



JOIN TELEGRAM-

@adityaranjansir\_notes



ENGLISH MEDIUM

# RRB NTPC 2024

# REASONING

SUBJECT- WISE



USEFUL FOR

SSC, Railway and Other  
Upcoming Exams.



SCAN CODE & JOIN ADITYA  
RANJAN SIR ON SOCIAL MEDIA



**ADITYA RANJAN SIR**  
(Excise Inspector)

SELECTED हैं SELECTION दिलाएँगे

**COMPLETE MATHS**  
**ब्रह्मास्त्र**  
**FORMULA BOOK**  
 CLASS NOTES • CONCEPTS • SHORT TRICKS  
 SOLVED EXAMPLES • CALCULATION TRICKS  
**ADITYA RANJAN SIR**  
 EXCISE INSPECTOR  
 USEFUL FOR: CET, SSC, RAILWAYS, DEFENCE, BANKING, & ALL GOVT. EXAMS  
 Selected है Selection दिलायेंगे

**BUY NOW**

**रेलवे गणित**  
 2<sup>nd</sup> EDITION  
 हिन्दी माध्यम  
 2018 से अब तक RRB द्वारा पूछे गए सभी सवाल  
**4000+ MCQs** चेप्टर - वाइज  
 NTPC, RPF SI, RPF CONSTABLE, ALP, TECHNICIAN, GROUP D, RRB JE and other railway exams.  
 Typewise & Levelwise  
 Chapter-wise Test  
 Smart Approach and Short Tricks  
**आदित्य रंजन सर**  
 (Excise Inspector)  
 "SELECTED है, SELECTION दिलाएंगे"

**BUY NOW**

**RAILWAY MATHS**  
 ENGLISH MEDIUM  
 All questions asked by RRB from 2018 till date  
**4000+ MCQs** Chapter-Wise  
 NTPC, RPF SI, RPF CONSTABLE, ALP, TECHNICIAN, GROUP D, RRB JE and other railway exams.  
 Type-wise & Level-wise  
 Chapter-wise Test  
 Smart Approach and Short Tricks  
**Aditya Ranjan Sir**  
 (Excise Inspector)  
 "SELECTED है, SELECTION दिलाएंगे"

**BUY NOW**

**रेलवे सामान्य विज्ञान**  
 5000+ चेप्टर-वाइज  
 One-liner & MCQs.  
 भौतिक विज्ञान | रसायन विज्ञान  
 जीव विज्ञान  
 नवीनतम पैटर्न पर आधारित  
 पूर्णतः सटीकता के साथ  
 सत्यापित एवं संश्लेषित प्रत्येक सवाल  
**Useful for:**  
 RRB ALP, Technician, NTPC (CBT-1 & CBT-2), Group D, RPF SI & Constable, JE, other govt. exams.  
**आदित्य रंजन सर**  
 (Excise Inspector)  
 SELECTED है SELECTION दिलाएंगे

**BUY NOW**

**Railway General Science**  
 English Medium 5000+ Chapter-Wise  
 One-liner & MCQs.  
**Physics | Chemistry**  
**Biology**  
 BASED ON LATEST PATTERN  
 Complete Coverage of Previous exams  
 Factual & Numerical Questions Included  
**Useful for:**  
 RRB ALP, Technician, NTPC (CBT-1 & CBT-2), Group D, RPF SI & Constable, JE, other govt. exams.  
**ADITYA RANJAN SIR**  
 (Excise Inspector)  
 SELECTED है SELECTION दिलाएंगे

**BUY NOW**

**रेलवे NTPC**  
 2025-26 Edition  
 TCS PYQs सहित  
 नान टेक्निकल पोपुलर कॅटेगिरी  
 20 प्रैक्टिस पेपर्स | 10 मॉल्टिपल चॉइस पेपर्स | 30 SETS  
**CBT-01**  
 स्नातक स्तरीय  
 Chief Commercial Cum Ticket Supervisor  
 Junior Account Assistant Cum Typist  
 Senior Clerk Cum Typist  
 Goods Train Manager  
 Station Master  
 गैर स्नातक स्तरीय  
 Commercial Cum Ticket Clerk  
 Accounts Clerk Cum Typist  
 Junior Clerk Cum Typist  
 Train Clerk  
**प्रैक्टिस वर्क बुक**  
 विस्तृत व्याख्या सहित  
**आदित्य रंजन सर**  
 (Excise Inspector)

**BUY NOW**

**रेलवे ग्रुप-D परीक्षा**  
 2025-26 Edition  
 TCS PYQs सहित  
 15 मॉल्टिपल चॉइस पेपर्स | 30 प्रैक्टिस पेपर्स | 15 SETS  
**प्रैक्टिस वर्क बुक**  
 विस्तृत व्याख्या सहित  
 नवीनतम पाठ्यक्रम एवं पैटर्न पर आधारित  
**आदित्य रंजन सर**  
 (Excise Inspector)  
 SELECTED है SELECTION दिलाएंगे

**BUY NOW**



ऊपर दी गयी किसी भी **BOOK** को अभी **ORDER** करने के लिए उसी पर **CLICK** कीजिये

**AVAILABLE on Flipkart**  **amazon.in**

हिंदी माध्यम

# रेलवे गणित

ALP, TECHNICIAN, RPF, NTPC, GROUP D & RRB JE

2ND EDITION

- Type-wise & Level-wise
- Chapter-wise Test
- Smart Approach and Short Tricks

PRICE

~~₹430~~

₹299

ORDER NOW

AVAILABLE ON

amazon

Flipkart



## Table of Contents

Analogy & Classification .....	2
Answer Key (Q1 to Q205) Analogy & Classification .....	42
Distance & Direction .....	44
Answer Key (Q1 to Q94) Distance & Direction .....	63
Coding-Decoding .....	63
Answer Key (Q1 to Q258) Coding-Decoding .....	127
Blood Relation .....	129
Answer Key (Q1 to Q47) Blood Relation .....	141
Mathematical Operations .....	141
Answer Key (Q1 to Q136) Mathematical Operations .....	172
Series Test .....	174
Answer Key (Q1 to Q249) Series Test .....	223
Number Series & Missing Numbers .....	225
Answer Key (Q1 to Q13) Number Series & Missing Numbers .....	227
formation of letters .....	227
Answer Key (Q1 to Q6) formation of letters .....	228
Puzzle Test .....	228
Answer Key (Q1 to Q108) Puzzle Test .....	250
Number puzzle .....	251
Answer Key (Q1 to Q56) Number puzzle .....	269
Order and Ranking .....	270
Answer Key (Q1 to Q32) Order and Ranking .....	274
Seating Arrangement .....	275
Answer Key (Q1 to Q94) Seating Arrangement .....	291
Statement- Conclusion .....	292
Answer Key (Q1 to Q41) Statement- Conclusion .....	312
Venn Diagram .....	313
Answer Key (Q1 to Q6) Venn Diagram .....	315

## RRB NTPC Graduate Level I Reasoning Topic Wise Complete Questions

## Analogy &amp; Classification

Q1) Which of the following letter-clusters should replace # and % so that the pattern and relationship followed between the letter-cluster pair on the left side of :: is the same as that on the right side of ::?

# : AIP :: MRV : %

A) # = ELR, % = QUX   B) # = WFN, % = QUX   C) # = IOT, % = WFN   D) # = QUX, % = ELR

Date: 06/06/2025   Time: 4:30 PM - 6:00 PM   Right: 39.04%   Wrong: 36.54%

Q2) Which of the following letter-clusters should replace # and % so that the pattern and relationship followed between the letter-cluster pair on the left side of :: is the same as that on the right side of ::?

# : VEC :: BNW : %

A) # = XHA, % = ZKY   B) # = ZKY, % = FTS   C) # = FTS, % = XHA   D) # = DQU, % = XHA

Date: 05/06/2025   Time: 9:00 AM - 10:30 AM   Right: 39.23%   Wrong: 23.03%

Q3) Which of the following letter-clusters should replace # and % so that the pattern and relationship followed between the letter-cluster pair on the left side of :: is the same as that on the right side of ::?

# : QYE :: BHP : %

A) # = RNF, % = WKK   B) # = LBZ, % = GEU   C) # = WKK, % = LBZ   D) # = GEU, % = RNF

Date: 09/06/2025   Time: 9:00 AM - 10:30 AM   Right: 40.42%   Wrong: 18.80%

Q4) SS 14 is related to WP -4 in a certain way. In the same way, CE 10 is related to GB -8. To which of the given options is QG 1 related, following the same logic?

A) NR -23   B) UD -17   C) IJ -21   D) UM -19

Date: 16/06/2025   Time: 12:45 PM - 2:15 PM   Right: 45.91%   Wrong: 5.67%

Q5) Which of the following letter-clusters should replace # and % so that the pattern and relationship followed between the letter-cluster pair on the left side of :: is the same as that on the right side of :: ?

# : LPR :: PSV : %

A) # = HNT, % = TUT   B) # = HMR, % = TVW   C) # = FNR, % = RVM   D) # = FMP, % = RUY

Date: 05/06/2025   Time: 12:45 PM - 2:15 PM   Right: 47.01%   Wrong: 16.46%

Q6) Which of the following letter-clusters should replace # and % so that the pattern and relationship followed between the letter-cluster pair on the left side of :: is the same as that on the right side of ::?

# : MLD :: VAM : %

A) # = YFP, % = BKS   B) # = SVJ, % = YFP   C) # = PQG, % = SVJ   D) # = BKS, % = PQG

Date: 06/06/2025   Time: 9:00 AM - 10:30 AM   Right: 48.77%   Wrong: 8.77%

Q7) MP 14 is related to LS -1 in a certain way. In the same way, NK 5 is related to MN -10. To which of the given options is SW -1 related, following the same logic?

A) TR -18   B) VW -20   C) VC -13   D) RZ -16

Date: 12/06/2025   Time: 9:00 AM - 10:30 AM   Right: 48.85%   Wrong: 7.51%

Q8) Which of the following letter-clusters should replace # and % so that the pattern and relationship followed between the letter-cluster pair on the left side of :: is the same as that on the right side of ::?

# : AND :: RWX : %

A) # = UTZ, % = OZV   B) # = OZV, % = LCT   C) # = XQB, % = UTZ   D) # = LCT, % = XQB

Date: 05/06/2025   Time: 12:45 PM - 2:15 PM   Right: 49.38%   Wrong: 9.29%

Q9) GF 7 is related to EA -10 in a certain way. In the same way, UG 14 is related to SB -3. To which of the given options is LN 2 related, following the same logic?

A) II -13   B) JJ -14   C) IJ -15   D) JI -15

Date: 18/06/2025   Time: 4:30 PM - 6:00 PM   Right: 49.75%   Wrong: 8.19%

Q10) Which of the following letter-clusters should replace # and % so that the pattern and relationship followed between the letter-cluster pair on the left side of :: is the same as that on the right side of :: ?

# : UEQ :: VFR : %

A) # = KUG, % = FPB   B) # = LUG, % = FPB   C) # = KUG, % = FPU   D) # = KTG, % = FPB

Date: 20/06/2025   Time: 9:00 AM - 10:30 AM   Right: 49.89%   Wrong: 12.26%

Q11) Which of the following letter-clusters should replace # and % so that the pattern and relationship followed between the letter-cluster pair on the left side of :: is the same as that on the right side of :: ?

# : EKN :: RVN : %

A) # = DHL, % = SYP   B) # = DMK, % = SZQ   C) # = CIK, % = PYR   D) # = CML, % = PZT

Date: 06/06/2025   Time: 4:30 PM - 6:00 PM   Right: 50.89%   Wrong: 19.29%

**Q12)** Which of the following letter-clusters should replace # and % so that the pattern and relationship followed between the letter-cluster pair on the left side of :: is the same as that on the right side of ::?

# : FLN :: TXB : %

**A)** # = BPJ, % = XTF **B)** # = LFT, % = BPJ **C)** # = XTF, % = PBX **D)** # = PBX, % = XTF

Date: 05/06/2025 Time: 12:45 PM - 2:15 PM Right: 51.24% Wrong: 10.01%

**Q13)** Which of the following letter-clusters should replace # and % so that the pattern and relationship followed between the letter-cluster pair on the left side of :: is the same as that on the right side of ::?

# : RND :: QRX : %

**A)** # = MQB, % = FFT **B)** # = MRQ, % = HHN **C)** # = PQC, % = YYP **D)** # = PMB, % = SSZ

Date: 06/06/2025 Time: 12:45 PM - 2:15 PM Right: 53.52% Wrong: 7.79%

**Q14)** KF 17 is related to HB 6 in a certain way. In the same way, KH 12 is related to HD 1. To which of the following is LP -6 related following the same logic?

**A)** HI -18 **B)** PL -19 **C)** IL -17 **D)** MP -13

Date: 05/06/2025 Time: 4:30 PM - 6:00 PM Right: 54.08% Wrong: 8.10%

**Q15)** Which of the following letter-clusters should replace # and % so that the pattern and relationship followed between the letter-cluster pair on the left side of :: is the same as that on the right side of ::?

# : LQT :: AJM : %

**A)** # = JQM, % = CPK **B)** # = JPT, % = CKR **C)** # = JRM, % = COP **D)** # = JPR, % = CKO

Date: 05/06/2025 Time: 4:30 PM - 6:00 PM Right: 54.30% Wrong: 10.32%

**Q16)** Which of the following letter-clusters should replace # and % so that the pattern and relationship followed between the letter-cluster pair on the left side of :: is the same as that on the right side of ::?

# : UWC :: OHW : %

**A)** # = MCU, % = KXS **B)** # = QMY, % = MCU **C)** # = SRA, % = QMY **D)** # = KXS, % = SRA

Date: 09/06/2025 Time: 4:30 PM - 6:00 PM Right: 55.90% Wrong: 7.62%

**Q17)** Which of the following letter-clusters should replace # and % so that the pattern and relationship followed between the letter-cluster pair on the left side of :: is the same as that on the right side of :: ?

# : DTF :: URQ : %

**A)** # = DTU, % = VWP   **B)** # = DSG, % = VWM   **C)** # = CQG, % = VUP   **D)** # = CPH, % = UPN

Date: 16/06/2025   Time: 12:45 PM - 2:15 PM   Right: 57.11%   Wrong: 7.60%

**Q18)** TX 12 is related to RS 23 in a certain way. In the same way, GW 2 is related to ER 13. To which of the given options is NR -5 related, following the same logic?

**A)** LL 4   **B)** LM 6   **C)** KL 6   **D)** KM 4

Date: 18/06/2025   Time: 9:00 AM - 10:30 AM   Right: 57.47%   Wrong: 7.12%

**Q19)** Which of the following letter-clusters should replace # and % so that the pattern and relationship followed between the letter-cluster pair on the left side of :: is the same as that on the right side of :: ?

# : EPV :: RFS : %

**A)** # = COW, % = SGQ   **B)** # = DMU, % = SGL   **C)** # = CNU, % = THV   **D)** # = DNU, % = SHT

Date: 17/06/2025   Time: 4:30 PM - 6:00 PM   Right: 57.73%   Wrong: 13.14%

**Q20)** Which of the following letter-clusters should replace # and % so that the pattern and relationship followed between the letter-cluster pair on the left side of :: is the same as that on the right side of :: ?

# : UEQ :: QAM : %

**A)** # = FMY, % = ISE   **B)** # = CMY, % = ISO   **C)** # = CMY, % = ISE   **D)** # = CMY, % = IUE

Date: 20/06/2025   Time: 12:45 PM - 2:15 PM   Right: 58.26%   Wrong: 11.01%

**Q21)** Which of the given letter-clusters should replace # and % so that the pattern and relationship followed between the letter-cluster pair on the left side of :: is the same as that on the right side of ::? # : DZT :: QMG : %

**A)** # = OYV, % = PYT   **B)** # = YUO, % = VRL   **C)** # = YPG, % = KUL   **D)** # = ZTY, % = VMH

Date: 20/06/2025   Time: 12:45 PM - 2:15 PM   Right: 60.75%   Wrong: 7.95%

**Q22)** Which of the following letter-clusters should replace # and % so that the pattern and relationship followed between the letter-cluster pair on the left side of :: is the same as that on the right side of :: ?

# : CRX :: ELU : %

**A)** # = BIY, % = HNW **B)** # = AHW, % = GMY **C)** # = APW, % = GNV **D)** # = BPU, % = DNY

Date: 16/06/2025 Time: 4:30 PM - 6:00 PM Right: 60.80% Wrong: 14.96%

**Q23)** RN 15 is related to TM 7 in a certain way. In the same way, LL 11 is related to NK 3. To which of the given options is MM 3 related, following the same logic?

**A)** OL -5 **B)** LP -9 **C)** JG -7 **D)** KN -5

Date: 12/06/2025 Time: 4:30 PM - 6:00 PM Right: 61.39% Wrong: 10.02%

**Q24)** Which of the following letter-clusters should replace # and % so that the pattern and relationship followed between the letter-cluster pair on the left side of :: is the same as that on the right side of :: ?

# : HNV :: GVO : %

**A)** # = FNW, % = QHT **B)** # = DNU, % = JHS **C)** # = DMU, % = SWT **D)** # = FMU, % = IWP

Date: 17/06/2025 Time: 12:45 PM - 2:15 PM Right: 62.75% Wrong: 7.03%

**Q25)** Which of the following letter-clusters should replace # and % so that the pattern and relationship followed between the letter-cluster pair on the left side of :: is the same as that on the right side of ::?

# : IFL :: KHN : %

**A)** # = LPG, % = NUY **B)** # = DAG, % = PMS **C)** # = CJS, % = KJI **D)** # = KHY, % = NHU

Date: 10/06/2025 Time: 4:30 PM - 6:00 PM Right: 64.05% Wrong: 10.92%

**Q26)** Which of the following letter-clusters should replace # and % so that the pattern and relationship followed between the letter-cluster pair on the left side of :: is the same as that on the right side of :: ?

# : OWF :: VDM : %

**A)** # = TBK, % = QYU **B)** # = TBM, % = QYH **C)** # = TBK, % = QYH **D)** # = TYK, % = QYH

Date: 20/06/2025 Time: 4:30 PM - 6:00 PM Right: 64.14% Wrong: 10.27%

**Q27)** Which of the following letter-clusters should replace # and % so that the pattern and relationship followed between the letter-cluster pair on the left side of :: is the same as that on the right side of :: ?

# : EIC :: QLZ : %

**A)** # = ERB, % = RNW   **B)** # = DJF, % = UPV   **C)** # = EDG, % = PNY   **D)** # = FHD, % = PMY

Date: 16/06/2025   Time: 4:30 PM - 6:00 PM   Right: 64.64%   Wrong: 7.63%

**Q28)** IL 17 is related to LN 12 in a certain way. In the same way, MN 12 is related to PP 7. To which of the given options is VR 4 related, following the same logic?

**A)** VX -3   **B)** BX -9   **C)** YT -1   **D)** NF -7

Date: 13/06/2025   Time: 12:45 PM - 2:15 PM   Right: 64.84%   Wrong: 8.68%

**Q29)** CK 17 is related to EG 29 in a certain way. In the same way, KM 12 is related to MI 24. To which of the given options is PQ 16 related, following the same logic?

**A)** RM 28   **B)** SP 33   **C)** PR 11   **D)** TV 29

Date: 11/06/2025   Time: 4:30 PM - 6:00 PM   Right: 64.97%   Wrong: 5.39%

**Q30)** Which of the following letter-clusters should replace # and % so that the pattern and relationship followed between the letter-cluster pair on the left side of :: is the same as that on the right side of :: ?

# : MTZ :: KRX : %

**A)** # = HOU, % = PWP   **B)** # = YOU, % = PWC   **C)** # = HYU, % = PWC   **D)** # = HOU, % = PWC

Date: 23/06/2025   Time: 12:45 PM - 2:15 PM   Right: 66.02%   Wrong: 12.23%

**Q31)** PH 14 is related to SD 30 in a certain way. In the same way, JI 18 is related to ME 34. To which of the given options is MU 6 related, following the same logic?

**A)** NH 33   **B)** PQ 22   **C)** HL 31   **D)** IV 20

Date: 11/06/2025   Time: 9:00 AM - 10:30 AM   Right: 66.20%   Wrong: 4.93%

**Q32)** Select the set in which the numbers are related in the same way as are the numbers of the following sets.

(NOTE: Operations should be performed on the whole numbers, without breaking down the numbers into their constituent digits. E.g. 13 – Operations on 13 such as adding to/subtracting from/multiplying with 13 can be performed. Breaking down 13 into 1 and 3 and then performing mathematical operations on 1 and 3 is not allowed.)

(88, 76, 64)

(71, 59, 47)

**A)** (40, 38, 36)   **B)** (64, 52, 40)   **C)** (99, 77, 55)   **D)** (58, 46, 24)

Date: 18/06/2025   Time: 4:30 PM - 6:00 PM   Right: 66.26%   Wrong: 18.22%

**Q33)** QQ 3 is related to NU -1 in a certain way. In the same way, OK 11 is related to LO 7. To which of the given options is PL -2 related, following the same logic?

- A)** NP -4   **B)** NQ -6   **C)** MQ -4   **D)** MP -6

Date: 16/06/2025   Time: 9:00 AM - 10:30 AM   Right: 66.27%   Wrong: 7.20%

**Q34)** Which of the following letter-clusters should replace # and % so that the pattern and relationship followed between the letter-cluster pair on the left side of :: is the same as that on the right side of :: ?

# : XTR :: LHF : %

- A)** # = DTX, % = FBZ   **B)** # = DZX, % = FBZ   **C)** # = UZX, % = FBZ   **D)** # = DZX, % = FBO

Date: 24/06/2025   Time: 9:00 AM - 10:30 AM   Right: 66.32%   Wrong: 8.75%

**Q35)** Which of the following letter-clusters should replace # and % so that the pattern and relationship followed between the letter-cluster pair on the left side of :: is the same as that on the right side of :: ?

# : LIN :: DAF : %

- A)** # = PBG, % = DER   **B)** # = PLQ, % = MHU   **C)** # = OLQ, % = AXC   **D)** # = POQ, % = ALK

Date: 16/06/2025   Time: 12:45 PM - 2:15 PM   Right: 66.38%   Wrong: 6.07%

**Q36)** Which of the following letter-clusters should replace # and % so that the pattern and relationship followed between the letter-cluster pair on the left side of :: is the same as that on the right side of ::?

# : OLR :: PMS : %

- A)** # = JGM, % = URX   **B)** # = MKI, % = NHU   **C)** # = KLM, % = NHY   **D)** # = LKP, % = FGH

Date: 09/06/2025   Time: 4:30 PM - 6:00 PM   Right: 67.30%   Wrong: 8.69%

**Q37)** MS 14 is related to OV 8 in a certain way. In the same way, NN 5 is related to PQ -1. To which of the given options is SR 6 related, following the same logic?

- A)** OO 4   **B)** UU 0   **C)** KP 3   **D)** OI 6

Date: 14/06/2025   Time: 12:45 PM - 2:15 PM   Right: 67.35%   Wrong: 4.81%

**Q38)** Which of the following letter-clusters should replace # and % so that the pattern and relationship followed between the letter-cluster pair on the left side of :: is the same as that on the right side of ::?

# : MLI :: LKH : %

- A)** # = FRL, % = QHE   **B)** # = UIL, % = IXC   **C)** # = POL, % = IHE   **D)** # = FRL, % = QHE

Date: 13/06/2025   Time: 4:30 PM - 6:00 PM   Right: 67.55%   Wrong: 7.78%

**Q39)** Which of the following letter-clusters should replace # and % so that the pattern and relationship followed between the letter-cluster pair on the left side of :: is the same as that on the right side of ::?  
# : LHM :: OKP : %

**A)** # = FDH, % = NHU   **B)** # = UPS, % = RPV   **C)** # = DCV, % = NHY   **D)** # = GCH, % = TPU

Date: 05/06/2025   Time: 9:00 AM - 10:30 AM   Right: 67.96%   Wrong: 7.79%

**Q40)** Which of the following letter-clusters should replace # and % so that the pattern and relationship followed between the letter-cluster pair on the left side of :: is the same as that on the right side of ::?  
# : JLH :: IKG : %

**A)** # = FJH, % = MHU   **B)** # = DEG, % = NIU   **C)** # = EGC, % = NPL   **D)** # = FDG, % = MLG

Date: 05/06/2025   Time: 9:00 AM - 10:30 AM   Right: 68.41%   Wrong: 6.08%

**Q41)** Which of the following letter-clusters should replace # and % so that the pattern and relationship followed between the letter-cluster pair on the left side of :: is the same as that on the right side of ::?  
?

# : KSB :: NVE : %

**A)** # = FUW, % = SAJ   **B)** # = FNW, % = SAJ   **C)** # = FNW, % = SAI   **D)** # = FNW, % = SUY

Date: 19/06/2025   Time: 12:45 PM - 2:15 PM   Right: 68.48%   Wrong: 11.17%

**Q42)** Which of the following letter-clusters should replace # and % so that the pattern and relationship followed between the letter-cluster pair on the left side of :: is the same as that on the right side of ::?  
?

# : OLR :: LIO : %

**A)** # = PKI, % = IMJ   **B)** # = ROU, % = IFL   **C)** # = RPO, % = MKP   **D)** # = YTU, % = LKJ

Date: 16/06/2025   Time: 9:00 AM - 10:30 AM   Right: 68.61%   Wrong: 5.65%

**Q43)** Which of the following letter-clusters should replace # and % so that the pattern and relationship followed between the letter-cluster pair on the left side of :: is the same as that on the right side of ::?  
?

# : VSQ :: OLJ : %

**A)** # = UZT, % = QMG   **B)** # = YOZ, % = LOQ   **C)** # = YVT, % = LIG   **D)** # = IQT, % = VCG

Date: 10/06/2025   Time: 12:45 PM - 2:15 PM   Right: 68.74%   Wrong: 6.83%

**Q44)** Which of the following letter-clusters should replace # and % so that the pattern and relationship followed between the letter-cluster pair on the left side of :: is the same as that on the right side of ::?  
?

# : QLO :: QLO : %

**A)** # = LGJ, % = VQT   **B)** # = LPU, % = VPY   **C)** # = LLP, % = VOY   **D)** # = KJJ, % = MYT

Date: 24/06/2025   Time: 12:45 PM - 2:15 PM   Right: 68.97%   Wrong: 5.81%

**Q45)** Which of the following letter-clusters should replace # and % so that the pattern and relationship followed between the letter-cluster pair on the left side of :: is the same as that on the right side of :: ?

# : IPJ :: NUO : %

**A)** # = KRJ, % = NSM   **B)** # = KRL, % = NSL   **C)** # = KRL, % = NRM   **D)** # = KRL, % = LSM

Date: 11/06/2025   Time: 4:30 PM - 6:00 PM   Right: 69.11%   Wrong: 8.45%

**Q46)** Which of the following letter-clusters should replace # and % so that the pattern and relationship followed between the letter-cluster pair on the left side of :: is the same as that on the right side of :: ?

# : RMN :: TOP : %

**A)** # = MHI, % = YTU   **B)** # = MOU, % = YLU   **C)** # = KJI, % = YMU   **D)** # = NHI, % = YOK

Date: 24/06/2025   Time: 4:30 PM - 6:00 PM   Right: 69.30%   Wrong: 8.02%

**Q47)** Which of the following letter-clusters should replace # and % so that the pattern and relationship followed between the letter-cluster pair on the left side of :: is the same as that on the right side of :: ?

# : PZL :: AKW : %

**A)** # = URD, % = ISE   **B)** # = HRD, % = LSE   **C)** # = HRD, % = ISE   **D)** # = HRD, % = ISO

Date: 21/06/2025   Time: 9:00 AM - 10:30 AM   Right: 69.33%   Wrong: 13.17%

**Q48)** Which of the following letter-clusters should replace # and % so that the pattern and relationship followed between the letter-cluster pair on the left side of :: is the same as that on the right side of :: ?

# : IKO :: TVZ : %

**A)** # = EGK, % = XZD   **B)** # = FGK, % = XZD   **C)** # = ELK, % = XZD   **D)** # = EGK, % = YZD

Date: 18/06/2025   Time: 4:30 PM - 6:00 PM   Right: 69.47%   Wrong: 10.44%

**Q49)** Which of the following letter-clusters should replace # and % so that the pattern and relationship followed between the letter-cluster pair on the left side of :: is the same as that on the right side of :: ?

# : YFI :: LSV : %

**A)** # = UBE, % = BWZ   **B)** # = UBE, % = PWO   **C)** # = VBE, % = PWZ   **D)** # = UBE, % = PWZ

Date: 24/06/2025   Time: 12:45 PM - 2:15 PM   Right: 69.98%   Wrong: 8.99%

**Q50)** Which of the following letter-clusters should replace # and % so that the pattern and relationship followed between the letter-cluster pair on the left side of :: is the same as that on the right side of ::?

# : ONJ :: VUQ : %

**A)** # = UIM, % = STN   **B)** # = RQM, % = SRN   **C)** # = RIO, % = ASN   **D)** # = RYM, % = PRN

Date: 11/06/2025   Time: 9:00 AM - 10:30 AM   Right: 70.28%   Wrong: 4.96%

**Q51)** Select the set in which the numbers are related in the same way as are the numbers of the following sets.

(NOTE: Operations should be performed on the whole numbers, without breaking down the numbers into their constituent digits. E.g. 13 – Operations on 13 such as adding/subtracting/multiplying to 13 can be performed. Breaking down 13 into 1 and 3 and then performing mathematical operations on 1 and 3 is not allowed.)

(25, 900, 18)

(23, 874, 19)

**A)** (40, 807, 10)   **B)** (42, 1176, 14)   **C)** (30, 1147, 19)   **D)** (49, 1575, 16)

Date: 12/06/2025   Time: 12:45 PM - 2:15 PM   Right: 70.47%   Wrong: 5.60%

**Q52)** Which of the following letter-clusters should replace # and % so that the pattern and relationship followed between the letter-cluster pair on the left side of :: is the same as that on the right side of ::?

# : USO :: LJF : %

**A)** # = IOR, % = IZC   **B)** # = XVI, % = IZC   **C)** # = XVR, % = IGC   **D)** # = ZOR, % = IQV

Date: 14/06/2025   Time: 12:45 PM - 2:15 PM   Right: 71.04%   Wrong: 5.77%

**Q53)** Based on the English alphabetical order, three of the following four letter-cluster pairs are alike in a certain way and thus form a group. Which letter-cluster pair DOES NOT belong to that group? (Note: The odd one out is not based on the number of consonants/vowels or their position in the letter-cluster.)

**A)** BU – GK   **B)** YR – DH   **C)** TN – YC   **D)** MF – RV

Date: 16/06/2025   Time: 12:45 PM - 2:15 PM   Right: 71.05%   Wrong: 18.24%

**Q54)** Which of the following letter-clusters should replace # and % so that the pattern and relationship followed between the letter-cluster pair on the left side of :: is the same as that on the right side of ::?

# : OSR :: JNM : %

**A)** # = ROU, % = GKQ   **B)** # = IUU, % = GBQ   **C)** # = UQU, % = GOZ   **D)** # = RVU, % = GKJ

Date: 19/06/2025   Time: 4:30 PM - 6:00 PM   Right: 71.51%   Wrong: 6.11%

**Q55)** Based on the English alphabetical order, three of the following four letter-cluster pairs are alike in a certain way and thus form a group. Which letter-cluster pair DOES NOT belong to that group?  
(Note: The odd one out is not based on the number of consonants/vowels or their position in the letter-cluster.)

**A)** KP – DW   **B)** RW – LD   **C)** UZ – NG   **D)** CH – VO

Date: 17/06/2025   Time: 9:00 AM - 10:30 AM   Right: 71.61%   Wrong: 20.58%

**Q56)** Which of the given letter-clusters should replace # and % so that the pattern and relationship followed between the letter-cluster pair on the left side of :: is the same as that on the right side of ::?  
# : QVS :: GLI : %

**A)** # = LPQ, % = LKP   **B)** # = LQN, % = LQN   **C)** # = PMN, % = PJY   **D)** # = KOJ, % = HGT

Date: 21/06/2025   Time: 12:45 PM - 2:15 PM   Right: 71.77%   Wrong: 5.17%

**Q57)** Based on the English alphabetical order, three of the following four letter-cluster pairs are alike in a certain way and thus form a group. Which letter-cluster pair DOES NOT belong to that group?  
(Note: The odd one out is not based on the number of consonants/vowels or their position in the letter-cluster.)

**A)** BJ-FZ   **B)** HP-LF   **C)** GO-KF   **D)** TB-XR

Date: 10/06/2025   Time: 12:45 PM - 2:15 PM   Right: 71.90%   Wrong: 18.53%

**Q58)** Which of the following letter-clusters should replace # and % so that the pattern and relationship followed between the letter-cluster pair on the left side of :: is the same as that on the right side of ::?  
# : QVR :: CHD : %

**A)** # = LQM, % = HMI   **B)** # = PMM, % = JUJ   **C)** # = LJM, % = NHG   **D)** # = GYT, % = NYU

Date: 09/06/2025   Time: 9:00 AM - 10:30 AM   Right: 72.21%   Wrong: 4.01%

**Q59)** Which of the following letter-clusters should replace # and % so that the pattern and relationship followed between the letter-cluster pair on the left side of :: is the same as that on the right side of ::?  
?

# : MRN :: HMI : %

**A)** # = JIQ, % = FDJ   **B)** # = KLJ, % = KHI   **C)** # = LPR, % = JHG   **D)** # = PUQ, % = EJF

Date: 16/06/2025   Time: 4:30 PM - 6:00 PM   Right: 72.24%   Wrong: 6.21%

**Q60)** Which of the following letter-clusters should replace # and % so that the pattern and relationship followed between the letter-cluster pair on the left side of :: is the same as that on the right side of :: ?

# : XFL :: KSY : %

**A)** # = SAG, % = PID **B)** # = TAG, % = PXD **C)** # = SAG, % = PXD **D)** # = SAG, % = PXO

Date: 21/06/2025 Time: 9:00 AM - 10:30 AM Right: 72.26% Wrong: 8.27%

**Q61)** Which of the following letter-clusters should replace # and % so that the pattern and relationship followed between the letter-cluster pair on the left side of :: is the same as that on the right side of :: ?

# : LNR :: MOS : %

**A)** # = GIM, % = RTY **B)** # = GIM, % = RTX **C)** # = HIM, % = RTX **D)** # = GIM, % = STX

Date: 19/06/2025 Time: 12:45 PM - 2:15 PM Right: 72.44% Wrong: 10.94%

**Q62)** Based on the English alphabetical order, three of the following four letter-cluster pairs are alike in a certain way and thus form a group. Which letter-cluster pair DOES NOT belong to that group? (Note: The odd one out is not based on the number of consonants/vowels or their position in the letter-cluster.)

**A)** KC – PT **B)** IA – NR **C)** BT – GK **D)** DV – IN

Date: 12/06/2025 Time: 12:45 PM - 2:15 PM Right: 72.48% Wrong: 15.52%

**Q63)** Which of the following letter-clusters should replace # and % so that the pattern and relationship followed between the letter-cluster pair on the left side of :: is the same as that on the right side of :: ?

# : RWS :: INJ : %

**A)** # = NGV, % = FLP **B)** # = PIV, % = MJU **C)** # = UZV, % = FKG **D)** # = CDR, % = KJI

Date: 17/06/2025 Time: 12:45 PM - 2:15 PM Right: 72.53% Wrong: 5.14%

**Q64)** Which of the following letter-clusters should replace # and % so that the pattern and relationship followed between the letter-cluster pair on the left side of :: is the same as that on the right side of :: ?

# : LQT :: ZEH : %

**A)** # = ODW, % = OIE **B)** # = OHD, % = LDK **C)** # = OTW, % = WBE **D)** # = LKO, % = WYE

Date: 10/06/2025 Time: 9:00 AM - 10:30 AM Right: 72.64% Wrong: 5.84%

**Q65)** Which of the following letter-clusters should replace # and % so that the pattern and relationship followed between the letter-cluster pair on the left side of :: is the same as that on the right side of ::?

# : OLM :: HEF : %

**A)** # = RUI, % = ESA **B)** # = POP, % = EUC **C)** # = ROP, % = EBC **D)** # = RVP, % = EQZ

Date: 13/06/2025 Time: 12:45 PM - 2:15 PM Right: 72.77% Wrong: 4.86%

**Q66)** Based on the English alphabetical order, three of the following four letter-cluster pairs are alike in a certain way and thus form a group. Which letter-cluster pair DOES NOT belong to that group? (Note: The odd one out is not based on the number of consonants/vowels or their position in the letter-cluster.)

**A)** UO-ZG **B)** BV-GN **C)** JD-OW **D)** WQ-BI

Date: 12/06/2025 Time: 9:00 AM - 10:30 AM Right: 73.24% Wrong: 17.47%

**Q67)** Select the set in which the numbers are related in the same way as are the numbers of the following sets.

(NOTE: Operations should be performed on the whole numbers, without breaking down the numbers into their constituent digits. E.g. 13 – Operations on 13 such as adding to/subtracting from/multiplying with 13 can be performed. Breaking down 13 into 1 and 3 and then performing mathematical operations on 1 and 3 is not allowed.)

(29, 41, 53)

(37, 49, 61)

**A)** (53, 65, 77) **B)** (67, 79, 101) **C)** (36, 48, 50) **D)** (40, 52, 74)

Date: 20/06/2025 Time: 9:00 AM - 10:30 AM Right: 73.30% Wrong: 10.32%

**Q68)** Select the triad that follows the same pattern as that followed by the two triads given below. Both triads follow the same pattern.

CX-GB-KF

GB-KF-OJ

**A)** PK-TO-WS **B)** WR-AV-EZ **C)** LG-PK-SO **D)** FA-JE-NJ

Date: 16/06/2025 Time: 12:45 PM - 2:15 PM Right: 73.49% Wrong: 15.50%

**Q69)** Which of the following letter-clusters should replace # and % so that the pattern and relationship followed between the letter-cluster pair on the left side of :: is the same as that on the right side of ::?

# : ACG :: CEI : %

**A)** # = WYC, % = GIK **B)** # = WYC, % = KIM **C)** # = XYC, % = GIM **D)** # = WYC, % = GIM

Date: 18/06/2025 Time: 12:45 PM - 2:15 PM Right: 73.58% Wrong: 10.05%

**Q70)** Which of the following letter-clusters should replace # and % so that the pattern and relationship followed between the letter-cluster pair on the left side of :: is the same as that on the right side of ::?

# : TRV :: SQU : %

**A)** # = IOY, % = PWR **B)** # = WUY, % = PNR **C)** # = WUO, % = ZNR **D)** # = WZY, % = UQR

Date: 12/06/2025 Time: 4:30 PM - 6:00 PM Right: 73.82% Wrong: 6.15%

**Q71)** Which of the following letter-clusters should replace # and % so that the pattern and relationship followed between the letter-cluster pair on the left side of :: is the same as that on the right side of ::?

# : VXB :: GIM : %

**A)** # = SUY, % = LLP **B)** # = SUY, % = JLP **C)** # = SEY, % = JLP **D)** # = SUY, % = JLL

Date: 18/06/2025 Time: 9:00 AM - 10:30 AM Right: 73.85% Wrong: 7.18%

**Q72)** Which of the following letter-clusters should replace # and % so that the pattern and relationship followed between the letter-cluster pair on the left side of :: is the same as that on the right side of ::?

# : KSM :: OWQ : %

**A)** # = LTM, % = NVP **B)** # = LTN, % = NUP **C)** # = LTN, % = NVP **D)** # = LTN, % = NVO

Date: 10/06/2025 Time: 9:00 AM - 10:30 AM Right: 73.87% Wrong: 8.92%

**Q73)** Based on the English alphabetical order, three of the following four letter-cluster pairs are alike in a certain way and thus form a group. Which letter-cluster pair DOES NOT belong to that group? (Note: The odd one out is not based on the number of consonants/vowels or their position in the letter-cluster.)

**A)** UP – CW **B)** JE – RL **C)** BW – JD **D)** DY – LE

Date: 19/06/2025 Time: 4:30 PM - 6:00 PM Right: 73.96% Wrong: 15.18%

**Q74)** Which of the following letter-clusters should replace # and % so that the pattern and relationship followed between the letter-cluster pair on the left side of :: is the same as that on the right side of ::?

# : NHO :: SMT : %

**A)** # = PJQ, % = QKR **B)** # = PJQ, % = QLR **C)** # = PJO, % = QKR **D)** # = PJQ, % = QKS

Date: 11/06/2025 Time: 12:45 PM - 2:15 PM Right: 74.37% Wrong: 11.39%

**Q75)** Based on the English alphabetical order, three of the following four letter-cluster pairs are alike in a certain way and thus form a group. Which letter-cluster pair DOES NOT belong to that group?  
(Note: The odd one out is not based on the number of consonants/vowels or their position in the letter-cluster.)

**A)** BK – EY   **B)** YH – CV   **C)** JS – NG   **D)** KT – OH

Date: 17/06/2025   Time: 4:30 PM - 6:00 PM   Right: 74.78%   Wrong: 14.24%

**Q76)** Which of the following letter-clusters should replace # and % so that the pattern and relationship followed between the letter-cluster pair on the left side of :: is the same as that on the right side of ::?

# : QSO :: XZV : %

**A)** # = SFR, % = POS   **B)** # = TVR, % = UWS   **C)** # = SVR, % = UWU   **D)** # = TUR, % = UET

Date: 19/06/2025   Time: 12:45 PM - 2:15 PM   Right: 75.12%   Wrong: 5.97%

**Q77)** Select the set in which the numbers are related in the same way as are the numbers of the following sets.

(NOTE: Operations should be performed on the whole numbers, without breaking down the numbers into their constituent digits. E.g. 13 – Operations on 13 such as adding/subtracting/multiplying to 13 can be performed. Breaking down 13 into 1 and 3 and then performing mathematical operations on 1 and 3 is not allowed.)

(14, 66, 19)

(43, 134, 24)

**A)** (10, 35, 8)   **B)** (45, 97, 4)   **C)** (6, 42, 15)   **D)** (37, 81, 4)

Date: 14/06/2025   Time: 12:45 PM - 2:15 PM   Right: 75.21%   Wrong: 3.98%

**Q78)** Which of the following letter-clusters should replace # and % so that the pattern and relationship followed between the letter-cluster pair on the left side of :: is the same as that on the right side of ::?

# : WQM :: TNJ : %

**A)** # = ZTP, % = QKG   **B)** # = KUY, % = QKJ   **C)** # = MKP, % = QPI   **D)** # = JTP, % = MWR

Date: 18/06/2025   Time: 12:45 PM - 2:15 PM   Right: 75.32%   Wrong: 8.26%

**Q79)** Which of the given letter-clusters should replace # and % so that the pattern and relationship followed between the letter-cluster pair on the left side of :: is the same as that on the right side of ::?

# : PKN :: TOR : %

**A)** # = KFI, % = YTW   **B)** # = KFL, % = YPG   **C)** # = KPJ, % = YOJ   **D)** # = LJY, % = YVX

Date: 21/06/2025   Time: 4:30 PM - 6:00 PM   Right: 75.82%   Wrong: 4.74%

**Q80)** Which of the following letter-clusters should replace # and % so that the pattern and relationship followed between the letter-cluster pair on the left side of :: is the same as that on the right side of :: ?

# : NHP :: RLT : %

**A)** # = OIR , % = QKS   **B)** # = OIQ , % = QLS   **C)** # = OIQ , % = QKR   **D)** # = OIQ , % = QKS

Date: 11/06/2025   Time: 12:45 PM - 2:15 PM   Right: 76.04%   Wrong: 9.87%

**Q81)** Which of the following letter-clusters should replace # and % so that the pattern and relationship followed between the letter-cluster pair on the left side of :: is the same as that on the right side of :: ?

# : OJR :: QLT : %

**A)** # = NIQ, % = RMU   **B)** # = NIQ, % = RNU   **C)** # = NIQ, % = RMV   **D)** # = NIR, % = RMU

Date: 12/06/2025   Time: 9:00 AM - 10:30 AM   Right: 76.46%   Wrong: 9.34%

**Q82)** Based on the English alphabetical order, three of the following four letter-clusters are alike in a certain way and thus form a group. Which letter-cluster DOES NOT belong to that group? (Note: The odd one out is not based on the number of consonants/vowels or their position in the letter-cluster.)

**A)** WQNJ   **B)** KEBW   **C)** QKHC   **D)** FZWR

Date: 20/06/2025   Time: 12:45 PM - 2:15 PM   Right: 76.59%   Wrong: 15.13%

**Q83)** Based on the English alphabetical order, three of the following four letter-cluster pairs are alike in a certain way and thus form a group. Which letter-cluster pair DOES NOT belong to that group? (Note: The odd one out is not based on the number of consonants/vowels or their position in the letter-cluster.)

**A)** TR – YP   **B)** VT – AR   **C)** YW – DV   **D)** GE – LC

Date: 19/06/2025   Time: 12:45 PM - 2:15 PM   Right: 76.68%   Wrong: 14.89%

**Q84)** Based on the English alphabetical order, three of the following four letter-cluster pairs are alike in a certain way and thus form a group. Which letter-cluster pair DOES NOT belong to that group? (Note: The odd one out is not based on the number of consonants/vowels or their position in the letter-cluster.)

**A)** GZ-LS   **B)** MF-RY   **C)** YR-EK   **D)** AT-FM

Date: 11/06/2025   Time: 9:00 AM - 10:30 AM   Right: 76.78%   Wrong: 14.25%

**Q85)** Select the set in which the numbers are related in the same way as are the numbers of the following sets.

(NOTE: Operations should be performed on the whole numbers, without breaking down the numbers into their constituent digits. E.g. 13 – Operations on 13 such as adding to/subtracting from/multiplying with 13 can be performed. Breaking down 13 into 1 and 3 and then performing mathematical operations on 1 and 3 is not allowed.)

(19, 39, 44)

(13, 27, 32)

**A)** (29, 49, 54) **B)** (24, 45, 50) **C)** (11, 23, 28) **D)** (35, 61, 66)

Date: 20/06/2025 Time: 12:45 PM - 2:15 PM Right: 77.04% Wrong: 5.75%

**Q86)** Which of the following letter-clusters should replace # and % so that the pattern and relationship followed between the letter-cluster pair on the left side of :: is the same as that on the right side of :: ?

# : DFJ :: LNR : %

**A)** # = ACG , % = OQP **B)** # = BCG , % = OQU **C)** # = ACG , % = OQU **D)** # = ACG , % = MQU

Date: 17/06/2025 Time: 9:00 AM - 10:30 AM Right: 77.30% Wrong: 8.08%

**Q87)** Which of the given letter-clusters should replace # and % so that the pattern and relationship followed between the letter-cluster pair on the left side of :: is the same as that on the right side of :: ?  
# : ZTW :: NHK : %

**A)** # = UGF, % = SPR **B)** # = UKH, % = OHY **C)** # = UOR, % = SMP **D)** # = UPL, % = TYF

Date: 21/06/2025 Time: 4:30 PM - 6:00 PM Right: 77.30% Wrong: 4.70%

**Q88)** Based on the English alphabetical order, three of the following four letter-cluster pairs are alike in a certain way and thus form a group. Which letter-cluster pair DOES NOT belong to that group?  
(Note: The odd one out is not based on the number of consonants/vowels or their position in the letter-cluster.)

**A)** TL – BV **B)** PH – XR **C)** GY – OJ **D)** ZR – HB

Date: 18/06/2025 Time: 12:45 PM - 2:15 PM Right: 77.43% Wrong: 13.09%

**Q89)** Which of the given letter-clusters should replace # and % so that the pattern and relationship followed between the letter-cluster pair on the left side of :: is the same as that on the right side of :: ?  
# : GLO :: INQ : %

**A)** # = DFR, % = NPY **B)** # = BGJ, % = NSV **C)** # = BPU, % = MTG **D)** # = EDG, % = MGV

Date: 23/06/2025 Time: 9:00 AM - 10:30 AM Right: 77.62% Wrong: 4.19%

**Q90)** Select the triad that follows the same pattern as that followed by the two triads given below. Both triads follow the same pattern.

TY-OT-JO

AF-VA-QV

**A)** LQ-GL-CG **B)** PU-LP-FK **C)** CH-XC-SX **D)** FK-AE-VA

Date: 14/06/2025 Time: 9:00 AM - 10:30 AM Right: 78.12% Wrong: 16.71%

**Q91)** Which of the following letter-clusters should replace # and % so that the pattern and relationship followed between the letter-cluster pair on the left side of :: is the same as that on the right side of :: ?

# : VTP :: KIE : %

**A)** # = QOK, % = PNJ **B)** # = QNK, % = PUY **C)** # = RTK, % = PKJ **D)** # = LOY, % = PKJ

Date: 23/06/2025 Time: 9:00 AM - 10:30 AM Right: 78.20% Wrong: 4.25%

**Q92)** Which of the following letter-clusters should replace # and % so that the pattern and relationship followed between the letter-cluster pair on the left side of :: is the same as that on the right side of ::?

# : TVS :: IKH : %

**A)** # = WYV, % = FHE **B)** # = IOV, % = WEE **C)** # = WOZ, % = UQE **D)** # = KNV, % = FXC

Date: 12/06/2025 Time: 9:00 AM - 10:30 AM Right: 79.42% Wrong: 3.84%

**Q93)** Which of the following letter-clusters should replace # and % so that the pattern and relationship followed between the letter-cluster pair on the left side of :: is the same as that on the right side of :: ?

# : LIE :: SPL : %

**A)** # = OLH, % = PMI **B)** # = PQH, % = GVI **C)** # = OLT, % = OAI **D)** # = OOI, % = PDF

Date: 11/06/2025 Time: 12:45 PM - 2:15 PM Right: 79.46% Wrong: 4.53%

**Q94)** Based on the English alphabetical order, three of the following four letter-cluster pairs are alike in a certain way and thus form a group. Which letter-cluster pair DOES NOT belong to that group? (Note: The odd one out is not based on the number of consonants/vowels or their position in the letter-cluster.)

**A)** RP – AU **B)** IG – RL **C)** BZ – KF **D)** NL – WQ

Date: 17/06/2025 Time: 12:45 PM - 2:15 PM Right: 79.64% Wrong: 13.51%

**Q95)** Based on the English alphabetical order, three of the following four letter-cluster pairs are alike in a certain way and thus form a group. Which letter-cluster pair DOES NOT belong to that group?  
(Note: The odd one out is not based on the number of consonants/vowels or their position in the letter-cluster.)

**A)** GE – ZU   **B)** PN – JD   **C)** LJ – EZ   **D)** QO – JE

Date: 23/06/2025   Time: 12:45 PM - 2:15 PM   Right: 79.80%   Wrong: 12.61%

**Q96)** Select the pair which follows the same pattern as that followed by the two set of pairs given below.  
Both pairs follow the same pattern.

JOL : FRO

MKH : INK

**A)** LOA : HSD   **B)** NRF : JUH   **C)** RME : NPG   **D)** HPD : DSG

Date: 23/06/2025   Time: 12:45 PM - 2:15 PM   Right: 79.80%   Wrong: 12.64%

**Q97)** Based on the English alphabetical order, three of the following four letter-cluster pairs are alike in a certain way and thus form a group. Which letter-cluster pair DOES NOT belong to that group?  
(Note: The odd one out is not based on the number of consonants/vowels or their position in the letter-cluster.)

**A)** RV – XE   **B)** DH – IQ   **C)** NR – TA   **D)** XB – DK

Date: 20/06/2025   Time: 12:45 PM - 2:15 PM   Right: 79.86%   Wrong: 12.43%

**Q98)** Based on the English alphabetical order, three of the following four letter-cluster pairs are alike in a certain way and thus form a group. Which letter-cluster pair DOES NOT belong to that group?  
(Note: The odd one out is not based on the number of consonants/vowels or their position in the letter-cluster.)

**A)** VP – DX   **B)** ZT – HB   **C)** DX – LE   **D)** HB – PJ

Date: 18/06/2025   Time: 4:30 PM - 6:00 PM   Right: 80.12%   Wrong: 9.84%

**Q99)** Which of the following letter-clusters should replace # and % so that the pattern and relationship followed between the letter-cluster pair on the left side of :: is the same as that on the right side of ::?

# : NQP :: HKJ : %

**A)** # = QTO, % = EEG   **B)** # = YTS, % = EUG   **C)** # = OMS, % = ERG   **D)** # = QTS, % = EHG

Date: 12/06/2025   Time: 9:00 AM - 10:30 AM   Right: 80.13%   Wrong: 4.41%

**Q100)** In the following triads, each group of letters is related to the subsequent one following a certain logic. Select from the given options, the one that follows the same logic.

ARCE - CARE - ECRA  
POLE - LPOE - ELOP

- A)** WORM - RWOM - MROW   **B)** BING - IBNG - GINB   **C)** ZEAP - AZEP - EAPZ  
**D)** SAFE - SFAE - EFAS

Date: 21/06/2025   Time: 4:30 PM - 6:00 PM   Right: 80.53%   Wrong: 9.55%

**Q101)** Based on the English alphabetical order, three of the following four letter-cluster pairs are alike in a certain way and thus form a group. Which letter-cluster pair DOES NOT belong to that group? (Note: The odd one out is not based on the number of consonants/vowels or their position in the letter-cluster.)

- A)** XT-CI   **B)** FA-KQ   **C)** RN-WC   **D)** WS-BH

Date: 12/06/2025   Time: 4:30 PM - 6:00 PM   Right: 80.54%   Wrong: 12.85%

**Q102)** Based on the English alphabetical order, three of the following four letter-clusters are alike in a certain way and thus form a group. Which letter-cluster DOES NOT belong to that group? (Note: The odd one out is not based on the number of consonants/vowels or their position in the letter-cluster.)

- A)** NJGB   **B)** TPMH   **C)** AWTO   **D)** EAYS

Date: 18/06/2025   Time: 4:30 PM - 6:00 PM   Right: 80.78%   Wrong: 11.03%

**Q103)** Select the pair which follows the same pattern as that followed by the two set of pairs given below. Both pairs follow the same pattern.

PBW : RDV  
NDS : PFR

- A)** JMM : LON   **B)** PWR : RZQ   **C)** LSO : NUN   **D)** UIK : WKL

Date: 24/06/2025   Time: 9:00 AM - 10:30 AM   Right: 81.30%   Wrong: 14.82%

**Q104)** Based on the English alphabetical order, three of the following four letter-cluster pairs are alike in a certain way and thus form a group. Which letter-cluster pair DOES NOT belong to that group? (Note: The odd one out is not based on the number of consonants/vowels or their position in the letter-cluster.)

- A)** OR - TN   **B)** JM - OH   **C)** SV - XQ   **D)** BE - GZ

Date: 16/06/2025   Time: 4:30 PM - 6:00 PM   Right: 81.42%   Wrong: 13.35%

**Q105)** Select the pair which follows the same pattern as that followed by the two set of pairs given below.

Both pairs follow the same pattern.

AJK : BEG

JIL : KDH

**A)** RLO : SIK **B)** BKK : CFH **C)** OHF : PCC **D)** KKQ : LFM

Date: 20/06/2025 Time: 4:30 PM - 6:00 PM Right: 81.46% Wrong: 12.60%

**Q106)** In the following triads, each group of letters is related to the subsequent one following a certain logic. Select from the given options, the one that follows the same logic.

BORE - EOBR - ORBE

RUST - TURS - USRT

**A)** TORN - NOTR - ROTN **B)** JUSL - LUJS - USJL **C)** DOIR - DIOR - RIOD **D)** CALE - ACLE - EALC

Date: 11/06/2025 Time: 4:30 PM - 6:00 PM Right: 81.74% Wrong: 10.23%

**Q107)** Based on the English alphabetical order, three of the following four letter-cluster pairs are alike in a certain way and thus form a group. Which letter-cluster pair DOES NOT belong to that group? (Note: The odd one out is not based on the number of consonants/vowels or their position in the letter-cluster.)

**A)** OJ - HC **B)** NI - GB **C)** YT - RN **D)** KF - DY

Date: 24/06/2025 Time: 9:00 AM - 10:30 AM Right: 82.14% Wrong: 12.00%

**Q108)** Based on the English alphabetical order, three of the following four letter-cluster pairs are alike in a certain way and thus form a group. Which letter-cluster pair DOES NOT belong to that group? (Note: The odd one out is not based on the number of consonants/vowels or their position in the letter-cluster.)

**A)** XV - FZ **B)** BZ - JD **C)** HF - PJ **D)** YX - GA

Date: 17/06/2025 Time: 9:00 AM - 10:30 AM Right: 82.76% Wrong: 9.07%

**Q109)** Based on the English alphabetical order, three of the following four letter-cluster pairs are alike in a certain way and thus form a group. Which letter-cluster pair DOES NOT belong to that group? (Note: The odd one out is not based on the number of consonants/vowels or their position in the letter-cluster.)

**A)** WE - CJ **B)** FN - LS **C)** CK - JP **D)** JR - PW

Date: 20/06/2025 Time: 4:30 PM - 6:00 PM Right: 82.87% Wrong: 10.67%

**Q110)** Select the set in which the numbers are related in the same way as are the numbers of the following sets.

(NOTE: Operations should be performed on the whole numbers, without breaking down the numbers into their constituent digits. E.g. 13 – Operations on 13 such as adding to/subtracting from/multiplying with 13 can be performed. Breaking down 13 into 1 and 3 and then performing mathematical operations on 1 and 3 is not allowed.)

(22, 28, 31)

(39, 45, 48)

**A)** (53, 59, 65) **B)** (44, 47, 50) **C)** (17, 20, 26) **D)** (27, 33, 36)

Date: 17/06/2025 Time: 12:45 PM - 2:15 PM Right: 83.02% Wrong: 3.83%

**Q111)** Based on the English alphabetical order, three of the following four letter-cluster pairs are alike in a certain way and thus form a group. Which letter-cluster pair DOES NOT belong to that group? (Note: The odd one out is not based on the number of consonants/vowels or their position in the letter-cluster.)

**A)** GC–ZV **B)** LH–DC **C)** CY–VR **D)** RN–KG

Date: 11/06/2025 Time: 4:30 PM - 6:00 PM Right: 83.32% Wrong: 9.31%

**Q112)** Based on the English alphabetical order, three of the following four letter-cluster pairs are alike in a certain way and thus form a group. Which letter-cluster pair DOES NOT belong to that group? (Note: The odd one out is not based on the number of consonants/vowels or their position in the letter-cluster.)

**A)** FL – JE **B)** MS – PL **C)** WC – AV **D)** DJ – HC

Date: 12/06/2025 Time: 4:30 PM - 6:00 PM Right: 83.38% Wrong: 12.04%

**Q113)** Based on the English alphabetical order, three of the following four letter-cluster pairs are alike in a certain way and thus form a group. Which letter-cluster pair DOES NOT belong to that group? (Note: The odd one out is not based on the number of consonants/vowels or their position in the letter-cluster.)

**A)** RX – VP **B)** GM – JE **C)** AG – DY **D)** NT – QL

Date: 13/06/2025 Time: 12:45 PM - 2:15 PM Right: 83.84% Wrong: 11.90%

**Q114)** Select the set in which the numbers are related in the same way as are the numbers of the following sets.

(NOTE: Operations should be performed on the whole numbers, without breaking down the numbers into their constituent digits. E.g. 13 – Operations on 13 such as adding/subtracting/multiplying to 13 can be performed. Breaking down 13 into 1 and 3 and then performing mathematical operations on 1 and 3 is not allowed.)

(37, 48, 59)

(41, 52, 63)

**A)** (47, 58, 70) **B)** (32, 43, 64) **C)** (56, 67, 78) **D)** (24, 35, 44)

Date: 17/06/2025 Time: 9:00 AM - 10:30 AM Right: 83.87% Wrong: 5.01%

**Q115)** Based on the English alphabetical order, three of the following four letter-clusters are alike in a certain way and thus form a group. Which letter-cluster DOES NOT belong to that group? (Note: The odd one out is not based on the number of consonants/vowels or their position in the letter-cluster.)

**A)** YGIP **B)** HPSY **C)** AILR **D)** NVYE

Date: 23/06/2025 Time: 9:00 AM - 10:30 AM Right: 84.12% Wrong: 8.90%

**Q116)** Select the set in which the numbers are related in the same way as are the numbers of the following sets.

(NOTE: Operations should be performed on the whole numbers, without breaking down the numbers into their constituent digits. E.g. 13 – Operations on 13 such as adding/subtracting/multiplying to 13 can be performed. Breaking down 13 into 1 and 3 and then performing mathematical operations on 1 and 3 is not allowed.)

(32, 47, 15)

(56, 81, 25)

**A)** (92, 110, 18) **B)** (17, 72, 14) **C)** (18, 65, 11) **D)** (29, 84, 10)

Date: 10/06/2025 Time: 4:30 PM - 6:00 PM Right: 84.34% Wrong: 3.63%

**Q117)** Based on the English alphabetical order, three of the following four letter-cluster pairs are alike in a certain way and thus form a group. Which letter-cluster pair DOES NOT belong to that group? (Note: The odd one out is not based on the number of consonants/vowels or their position in the letter-cluster.)

**A)** JO – QM **B)** LQ – SP **C)** UZ – BY **D)** EJ – LI

Date: 13/06/2025 Time: 9:00 AM - 10:30 AM Right: 84.34% Wrong: 11.68%

**Q118)** Select the triad that follows the same pattern as that followed by the two triads given below. Both triads follow the same pattern.

EA-GC-JL

GC-IE-LN

**A)** LG-MJ-PS **B)** KG-MI-PS **C)** KG-MI-PR **D)** LG-MI-PS

Date: 12/06/2025 Time: 12:45 PM - 2:15 PM Right: 84.54% Wrong: 8.97%

**Q119)** Based on the English alphabetical order, three of the following four letter-cluster pairs are alike in a certain way and thus form a group. Which letter-cluster pair DOES NOT belong to that group? (Note: The odd one out is not based on the number of consonants/vowels or their position in the letter-cluster.)

**A)** HK – NU **B)** XA – CK **C)** AD – FN **D)** KN – PX

Date: 19/06/2025 Time: 9:00 AM - 10:30 AM Right: 84.57% Wrong: 10.38%

**Q120)** Select the triad that follows the same pattern as that followed by the two triads given below. Both triads follow the same pattern.

SW-NR-IM

IM-DH-YC

**A)** YC-TX-OS **B)** UY-PT-LO **C)** HL-DG-XB **D)** FJ-AE-WZ

Date: 13/06/2025 Time: 9:00 AM - 10:30 AM Right: 84.58% Wrong: 11.37%

**Q121)** Select the triad that follows the same pattern as that followed by the two triads given below. Both triads follow the same pattern.

NJ-QM-TV

QM-TP-WY

**A)** MH-PK-RU **B)** LH-OK-RT **C)** LH-OK-RU **D)** MH-OK-RU

Date: 11/06/2025 Time: 9:00 AM - 10:30 AM Right: 84.60% Wrong: 8.91%

**Q122)** Based on the English alphabetical order, three of the following four letter-cluster pairs are alike in a certain way and thus form a group. Which letter-cluster pair DOES NOT belong to that group? (Note: The odd one out is not based on the number of consonants/vowels or their position in the letter-cluster.)

**A)** BK – IF **B)** HQ – OL **C)** TC – AY **D)** PY – WT

Date: 14/06/2025 Time: 12:45 PM - 2:15 PM Right: 84.64% Wrong: 9.24%

**Q123)** Based on the English alphabetical order, three of the following four letter-cluster pairs are alike in a certain way and thus form a group. Which letter-cluster pair DOES NOT belong to that group?  
(Note: The odd one out is not based on the number of consonants/vowels or their position in the letter-cluster.)

**A) IE – NG   B) QM – VO   C) GC – LF   D) DZ – IB**

Date: 16/06/2025   Time: 9:00 AM - 10:30 AM   Right: 84.72%   Wrong: 10.33%

**Q124)** Select the triad that follows the same pattern as that followed by the two triads given below. Both triads follow the same pattern.

FB-ID-KM  
JF-MH-OQ

**A) MI-PK-RT   B) NI-PL-RU   C) MI-PK-RU   D) NI-PK-RU**

Date: 10/06/2025   Time: 12:45 PM - 2:15 PM   Right: 84.75%   Wrong: 9.19%

**Q125)** Based on the English alphabetical order, three of the following four letter-clusters are alike in a certain way and thus form a group. Which letter-cluster DOES NOT belong to that group?  
(Note: The odd one out is not based on the number of consonants/vowels or their position in the letter-cluster.)

**A) AWRP   B) RNIG   C) HDVW   D) JFAY**

Date: 13/06/2025   Time: 9:00 AM - 10:30 AM   Right: 84.77%   Wrong: 7.60%

**Q126)** Select the triad that follows the same pattern as that followed by the two triads given below. Both triads follow the same pattern.

GB-IE-LN  
KF-MI-PR

**A) PJ-QM-TU   B) OJ-QM-TV   C) OJ-QM-TU   D) PJ-QN-TU**

Date: 16/06/2025   Time: 4:30 PM - 6:00 PM   Right: 84.91%   Wrong: 8.53%

**Q127)** Select the triad that follows the same pattern as that followed by the two triads given below. Both triads follow the same pattern.

IF-KH-OQ  
KH-MJ-QS

**A) MJ-OL-SV   B) MJ-OL-SU   C) NJ-OL-SV   D) NJ-OK-SV**

Date: 13/06/2025   Time: 12:45 PM - 2:15 PM   Right: 85.30%   Wrong: 8.62%

**Q128)** Based on the English alphabetical order, three of the following four letter-clusters are alike in a certain way and thus form a group. Which letter-cluster DOES NOT belong to that group?  
(Note: The odd one out is not based on the number of consonants/vowels or their position in the letter-cluster.)

**A) GLOS B) EJNQ C) ZEHL D) YDGK**

Date: 21/06/2025 Time: 4:30 PM - 6:00 PM Right: 85.49% Wrong: 9.44%

**Q129)** Select the triad that follows the same pattern as that followed by the two triads given below. Both triads follow the same pattern.

OL-QN-SU

LI-NK-PR

**A) SO-TR-VY B) RO-TQ-VX C) RO-TQ-VY D) SO-TQ-VY**

Date: 13/06/2025 Time: 9:00 AM - 10:30 AM Right: 85.55% Wrong: 9.93%

**Q130)** In the following triads, each group of letters is related to the subsequent one following a certain logic. Select from the given options, the one that follows the same logic.

BAIL - ALIB - LIAB

DEAF - EFAD - FAED

**A) LEAN - ELAN - NEAL B) GOLD - ODLG - LGOD C) MEAN - MAEN - NAEM**

**D) BOLD - ODLB - DLOB**

Date: 09/06/2025 Time: 9:00 AM - 10:30 AM Right: 85.59% Wrong: 7.84%

**Q131)** Select the triad that follows the same pattern as that followed by the two triads given below. Both triads follow the same pattern.

QT-OR-MP

XA-VY-TW

**A) JM-HK-FJ B) AD-YB-VZ C) TW-RU-PS D) NQ-LO-JN**

Date: 17/06/2025 Time: 4:30 PM - 6:00 PM Right: 86.09% Wrong: 9.02%

**Q132)** In the following triads, each group of letters is related to the subsequent one following a certain logic. Select from the given options, the one that follows the same logic.

REAL - LRAE - RLEA  
MAKE - EMKA - MEAK

- A)** POUR - RPUO - PORU   **B)** HUGS - UHGS - SUGH   **C)** KEYS - SKEY - EYSK  
**D)** COPE - ECPO - CEOP

Date: 12/06/2025   Time: 12:45 PM - 2:15 PM   Right: 86.12%   Wrong: 8.53%

**Q133)** Select the triad that follows the same pattern as that followed by the two triads given below. Both triads follow the same pattern.

EB-GD-IF  
BY-DA-FC

- A)** GD-JF-KH   **B)** UR-WT-YV   **C)** PM-RO-SQ   **D)** KH-MI-OL

Date: 17/06/2025   Time: 9:00 AM - 10:30 AM   Right: 86.13%   Wrong: 9.63%

**Q134)** Select the set in which the numbers are related in the same way as are the numbers of the following sets.

(NOTE: Operations should be performed on the whole numbers, without breaking down the numbers into their constituent digits. E.g. 13 – Operations on 13 such as adding/subtracting/multiplying to 13 can be performed. Breaking down 13 into 1 and 3 and then performing mathematical operations on 1 and 3 is not allowed.)

(33, 429, 13)  
(44, 220, 5)

- A)** (20, 363, 18)   **B)** (43, 903, 21)   **C)** (30, 363, 12)   **D)** (4, 23, 5)

Date: 09/06/2025   Time: 9:00 AM - 10:30 AM   Right: 86.22%   Wrong: 2.34%

**Q135)** Based on the English alphabetical order, three of the following four letter-cluster pairs are alike in a certain way and thus form a group. Which letter-cluster pair DOES NOT belong to that group?

(Note: The odd one out is not based on the number of consonants/vowels or their position in the letter-cluster.)

- A)** HE – NF   **B)** FC – KD   **C)** KH – PI   **D)** QN – VO

Date: 16/06/2025   Time: 12:45 PM - 2:15 PM   Right: 86.24%   Wrong: 7.02%

**Q136)** Based on the English alphabetical order, three of the following four letter-clusters are alike in a certain way and thus form a group. Which letter-cluster DOES NOT belong to that group?  
(Note: The odd one out is not based on the number of consonants/vowels or their position in the letter-cluster.)

**A) IPVX B) SZEH C) GNSV D) NUZC**

Date: 21/06/2025 Time: 12:45 PM - 2:15 PM Right: 86.24% Wrong: 8.66%

**Q137)** Based on the English alphabetical order, three of the following four letter-clusters are alike in a certain way and thus form a group. Which letter-cluster DOES NOT belong to that group?  
(Note: The odd one out is not based on the number of consonants/vowels or their position in the letter-cluster.)

**A) NRUA B) GKNT C) DGKQ D) QUXD**

Date: 23/06/2025 Time: 12:45 PM - 2:15 PM Right: 86.44% Wrong: 7.72%

**Q138)** Based on the English alphabetical order, three of the following four letter-cluster pairs are alike in a certain way and thus form a group. Which letter-cluster pair DOES NOT belong to that group?  
(Note: The odd one out is not based on the number of consonants/vowels or their position in the letter-cluster.)

**A) BI-GN B) GN-LS C) HO-MT D) TA-YE**

Date: 11/06/2025 Time: 4:30 PM - 6:00 PM Right: 86.71% Wrong: 8.06%

**Q139)** Select the pair that follows the same pattern as that followed by the two sets of pairs given below.  
Both pairs follow the same pattern.

ZIL : ARO

GRZ : TIA

**A) JPE : QJT B) MAP : NZJ C) LOT : OKG D) XMS : CNH**

Date: 06/06/2025 Time: 12:45 PM - 2:15 PM Right: 86.79% Wrong: 7.26%

**Q140)** Select the triad that follows the same pattern as that followed by the two triads given below. Both triads follow the same pattern.

QV-SX-UW

NS-PU-RT

**A) KP-MR-OQ B) LP-MR-OS C) KP-MR-OS D) LP-NR-OS**

Date: 14/06/2025 Time: 12:45 PM - 2:15 PM Right: 87.30% Wrong: 7.38%

**Q141)** Based on the English alphabetical order, three of the following four letter-clusters are alike in a certain way and thus form a group. Which letter-cluster DOES NOT belong to that group?  
(Note: The odd one out is not based on the number of consonants/vowels or their position in the letter-cluster.)

**A) ELH B) JQM C) GNI D) LSO**

Date: 24/06/2025 Time: 4:30 PM - 6:00 PM Right: 87.40% Wrong: 7.91%

**Q142)** Based on the English alphabetical order, three of the following four letter-clusters are alike in a certain way and thus form a group. Which letter-cluster DOES NOT belong to that group?  
(Note: The odd one out is not based on the number of consonants/vowels or their position in the letter-cluster.)

**A) SXBE B) BGKN C) FYUB D) FKOR**

Date: 20/06/2025 Time: 4:30 PM - 6:00 PM Right: 88.20% Wrong: 6.01%

**Q143)** Based on the English alphabetical order, three of the following four letter-cluster pairs are alike in a certain way and thus form a group. Which letter-cluster pair DOES NOT belong to that group?  
(Note: The odd one out is not based on the number of consonants/vowels or their position in the letter-cluster.)

**A) RV – TB B) GK – JQ C) MQ – OW D) EI – GO**

Date: 21/06/2025 Time: 9:00 AM - 10:30 AM Right: 88.24% Wrong: 8.35%

**Q144)** Based on the English alphabetical order, three of the following four letter-cluster pairs are alike in a certain way and thus form a group. Which letter-cluster pair DOES NOT belong to that group?  
(Note: The odd one out is not based on the number of consonants/vowels or their position in the letter-cluster.)

**A) NU – PX B) KR – NU C) EL – GO D) AH – CK**

Date: 21/06/2025 Time: 4:30 PM - 6:00 PM Right: 88.30% Wrong: 7.26%

**Q145)** Select the triad that follows the same pattern as that followed by the two triads given below. Both triads follow the same pattern.

NK-RO-VX

LI-PM-TV

**A) JG-NK-RT B) IG-NK-RU C) IG-NL-RU D) JG-NK-RU**

Date: 13/06/2025 Time: 9:00 AM - 10:30 AM Right: 88.45% Wrong: 7.16%

**Q146)** Based on the English alphabetical order, three of the following four letter-cluster pairs are alike in a certain way and thus form a group. Which letter-cluster pair DOES NOT belong to that group?  
(Note: The odd one out is not based on the number of consonants/vowels or their position in the letter-cluster.)

- A) TX – ZV   B) HL – NI   C) CG – ID   D) MQ – SN**

Date: 13/06/2025   Time: 4:30 PM - 6:00 PM   Right: 88.54%   Wrong: 7.54%

**Q147)** Select the triad that follows the same pattern as that followed by the two triads given below. Both triads follow the same pattern.

JQ-NU-RT  
MT-QX-UW

- A) CJ-GN-KM   B) DJ-GN-KL   C) DJ-GM-KL   D) CJ-GN-KL**

Date: 14/06/2025   Time: 9:00 AM - 10:30 AM   Right: 88.68%   Wrong: 6.41%

**Q148)** Based on the English alphabetical order, three of the following four letter-clusters are alike in a certain way and thus form a group. Which letter-cluster DOES NOT belong to that group?  
(Note: The odd one out is not based on the number of consonants/vowels or their position in the letter-cluster.)

- A) PXR   B) LTO   C) NVQ   D) HPK**

Date: 10/06/2025   Time: 9:00 AM - 10:30 AM   Right: 88.74%   Wrong: 6.42%

**Q149)** Based on the English alphabetical order, three of the following four letter-cluster pairs are alike in a certain way and thus form a group. Which letter-cluster pair DOES NOT belong to that group?  
(Note: The odd one out is not based on the number of consonants/vowels or their position in the letter-cluster.)

- A) WC – BY   B) LR – QM   C) HN – MI   D) BH – GC**

Date: 16/06/2025   Time: 9:00 AM - 10:30 AM   Right: 88.79%   Wrong: 6.62%

**Q150)** Select the pair that follows the same pattern as that followed by the two pairs given below. Both pairs follow the same pattern.

HKN : LOR  
DJO : HNS

- A) AFM : EJQ   B) ATB : CVE   C) GJM : IKO   D) WXC : YGP**

Date: 17/06/2025   Time: 9:00 AM - 10:30 AM   Right: 88.85%   Wrong: 6.11%

**Q151)** Based on the English alphabetical order, three of the following four letter-clusters are alike in a certain way and thus form a group. Which letter-cluster DOES NOT belong to that group?  
(Note: The odd one out is not based on the number of consonants/vowels or their position in the letter-cluster.)

**A) OSM B) RVQ C) UYT D) JNI**

Date: 23/06/2025 Time: 9:00 AM - 10:30 AM Right: 89.10% Wrong: 7.59%

**Q152)** Based on the English alphabetical order, three of the following four letter-cluster pairs are alike in a certain way and thus form a group. Which letter-cluster pair DOES NOT belong to that group?  
(Note: The odd one out is not based on the number of consonants/vowels or their position in the letter-cluster.)

**A) UX-YB B) GJ-JP C) PS-TW D) YB-CF**

Date: 11/06/2025 Time: 9:00 AM - 10:30 AM Right: 89.36% Wrong: 6.02%

**Q153)** Select the triad that follows the same pattern as that followed by the two triads given below. Both triads follow the same pattern.

KF-MH-OQ

ID-KF-MO

**A) GB-ID-KN B) HB-ID-KN C) HB-IC-KN D) GB-ID-KM**

Date: 09/06/2025 Time: 9:00 AM - 10:30 AM Right: 89.41% Wrong: 5.87%

**Q154)** In the following triads, each group of letters is related to the subsequent one following a certain logic. Select from the given options, the one that follows the same logic.

BEAN - EBAN - BANE

MAKE - AMKE - MKEA

**A) MACK - AMCK - MCKA B) RACE - RCAE - ECAR C) WORK - OWRK - KORW**

**D) NEAR - ENAR - EARN**

Date: 09/06/2025 Time: 12:45 PM - 2:15 PM Right: 89.75% Wrong: 5.93%

**Q155)** Based on the English alphabetical order, three of the following four letter-cluster pairs are alike in a certain way and thus form a group. Which letter-cluster pair DOES NOT belong to that group?  
(Note: The odd one out is not based on the number of consonants/vowels or their position in the letter-cluster.)

**A) BZ-WU B) YW-TR C) MK-GH D) KI-FD**

Date: 10/06/2025 Time: 12:45 PM - 2:15 PM Right: 89.85% Wrong: 5.79%

**Q156)** Based on the English alphabetical order, three of the following four letter-clusters are alike in a certain way and thus form a group. Which letter-cluster DOES NOT belong to that group?  
(Note: The odd one out is not based on the number of consonants/vowels or their position in the letter-cluster.)

**A) KQN B) NTP C) QWS D) TZV**

Date: 24/06/2025 Time: 12:45 PM - 2:15 PM Right: 89.89% Wrong: 5.51%

**Q157)** Based on the English alphabetical order, three of the following four letter-clusters are alike in a certain way and thus form a group. Which letter-cluster DOES NOT belong to that group?  
(Note: The odd one out is not based on the number of consonants/vowels or their position in the letter-cluster.)

**A) KNI B) MPK C) QTP D) ORM**

Date: 17/06/2025 Time: 4:30 PM - 6:00 PM Right: 90.21% Wrong: 6.26%

**Q158)** Select the triad that follows the same pattern as that followed by the two triads given below. Both triads follow the same pattern.

HO-JQ-LN

JQ-LS-NP

**A) LS-NU-PR B) LS-NU-PQ C) KS-NU-PQ D) KS-NV-PQ**

Date: 09/06/2025 Time: 4:30 PM - 6:00 PM Right: 90.27% Wrong: 5.63%

**Q159)** Select the triad that follows the same pattern as that followed by the two triads given below. Both triads follow the same pattern.

EL-GN-IK

GN-IP-KM

**A) JP-KR-MQ B) IP-KR-MQ C) IP-KR-MO D) JP-KS-MQ**

Date: 05/06/2025 Time: 12:45 PM - 2:15 PM Right: 90.28% Wrong: 5.28%

**Q160)** Based on the English alphabetical order, three of the following four letter-clusters are alike in a certain way and thus form a group. Which letter-cluster DOES NOT belong to that group?  
(Note: The odd one out is not based on the number of consonants/vowels or their position in the letter-cluster.)

**A) MQL B) RVQ C) KOJ D) OSM**

Date: 14/06/2025 Time: 9:00 AM - 10:30 AM Right: 90.42% Wrong: 6.53%

**Q161)** Based on the English alphabetical order, three of the following four letter-clusters are alike in a certain way and thus form a group. Which letter-cluster DOES NOT belong to that group?  
(Note: The odd one out is not based on the number of consonants/vowels or their position in the letter-cluster.)

**A) PRL B) IKE C) HJD D) PLO**

Date: 24/06/2025 Time: 4:30 PM - 6:00 PM Right: 90.89% Wrong: 3.44%

**Q162)** Based on the English alphabetical order, three of the following four letter-clusters are alike in a certain way and thus form a group. Which is the letter-cluster that DOES NOT belong to that group?  
(Note: The odd one out is not based on the number of consonants/vowels or their position in the letter-cluster.)

**A) UZW B) NSP C) IGL D) SXU**

Date: 24/06/2025 Time: 12:45 PM - 2:15 PM Right: 91.06% Wrong: 4.35%

**Q163)** Based on the English alphabetical order, three of the following four letter-clusters are alike in a certain way and thus form a group. Which letter-cluster DOES NOT belong to that group?  
(Note: The odd one out is not based on the number of consonants/vowels or their position in the letter-cluster.)

**A) NQL B) EHB C) KNI D) HKF**

Date: 21/06/2025 Time: 12:45 PM - 2:15 PM Right: 91.19% Wrong: 5.32%

**Q164)** Based on the English alphabetical order, three of the following four letter-clusters are alike in a certain way and thus form a group. Which letter-cluster DOES NOT belong to that group?  
(Note: The odd one out is not based on the number of consonants/vowels or their position in the letter-cluster.)

**A) POR B) SQU C) LJN D) ECG**

Date: 05/06/2025 Time: 9:00 AM - 10:30 AM Right: 91.40% Wrong: 4.67%

**Q165)** Based on the English alphabetical order, three of the following four letter-clusters are alike in a certain way and thus form a group. Which letter-cluster DOES NOT belong to that group?  
(Note: The odd one out is not based on the number of consonants/vowels or their position in the letter-cluster.)

**A) FHC B) LNJ C) HJE D) JLG**

Date: 20/06/2025 Time: 9:00 AM - 10:30 AM Right: 91.40% Wrong: 5.01%

**Q166)** Based on the English alphabetical order, three of the following four letter-clusters are alike in a certain way and thus form a group. Which letter-cluster DOES NOT belong to that group?  
(Note: The odd one out is not based on the number of consonants/vowels or their position in the letter-cluster.)

**A) PVQ B) KQM C) MSN D) HNI**

Date: 23/06/2025 Time: 4:30 PM - 6:00 PM Right: 91.42% Wrong: 5.17%

**Q167)** Based on the English alphabetical order, three of the following four letter-cluster pairs are alike in a certain way and thus form a group. Which is the letter-cluster pair that DOES NOT belong to that group?  
(Note: The odd one out is not based on the number of consonants/vowels or their position in the letter-cluster.)

**A) JN - HL B) LP - JK C) NR - LP D) OS - MQ**

Date: 14/06/2025 Time: 12:45 PM - 2:15 PM Right: 91.47% Wrong: 4.87%

**Q168)** Select the pair that follows the same pattern as that followed by the two pairs given below. Both pairs follow the same pattern.

MGP : NIS

SVB : TXE

**A) CTR : DVU B) DNP : CPT C) DMR : CMP D) CDP : DUV**

Date: 17/06/2025 Time: 9:00 AM - 10:30 AM Right: 91.92% Wrong: 2.86%

**Q169)** Based on the English alphabetical order, three of the following four letter-clusters are alike in a certain way and thus form a group. Which letter-cluster DOES NOT belong to that group?  
(Note: The odd one out is not based on the number of consonants/vowels or their position in the letter-cluster.)

**A) TXW B) IML C) UYX D) PRS**

Date: 24/06/2025 Time: 9:00 AM - 10:30 AM Right: 91.93% Wrong: 4.45%

**Q170)** Based on the English alphabetical order, three of the following four letter-clusters are alike in a certain way and thus form a group. Which letter-cluster DOES NOT belong to that group? (Note: The odd one out is not based on the number of consonants/vowels or their position in the letter-cluster.)

**A) SUP B) NPK C) PRV D) GID**

Date: 06/06/2025 Time: 9:00 AM - 10:30 AM Right: 91.95% Wrong: 4.82%

**Q171)** Based on the English alphabetical order, three of the following four letter-clusters are alike in a certain way and thus form a group. Which letter-cluster DOES NOT belong to that group?  
(Note: The odd one out is not based on the number of consonants/vowels or their position in the letter-cluster.)

**A) DAX B) KGE C) SOM D) WSQ**

Date: 05/06/2025 Time: 12:45 PM - 2:15 PM Right: 92.02% Wrong: 4.73%

**Q172)** Based on the English alphabetical order, three of the following four letter-clusters are alike in a certain way and thus form a group. Which letter-cluster DOES NOT belong to that group?  
(Note: The odd one out is not based on the number of consonants/vowels or their position in the letter-cluster.)

**A) SYT B) QWR C) NTO D) LRN**

Date: 12/06/2025 Time: 9:00 AM - 10:30 AM Right: 92.02% Wrong: 4.76%

**Q173)** Based on the English alphabetical order, three of the following four letter-cluster pairs are alike in a certain way and thus form a group. Which letter-cluster pair DOES NOT belong to that group?  
(Note: The odd one out is not based on the number of consonants/vowels or their position in the letter-cluster.)

**A) IL - FI B) MP - JM C) NQ - KN D) MJ - DF**

Date: 23/06/2025 Time: 4:30 PM - 6:00 PM Right: 92.39% Wrong: 3.92%

**Q174)** Based on the English alphabetical order, three of the following four letter-clusters are alike in a certain way and thus form a group. Which letter-cluster DOES NOT belong to that group?  
(Note: The odd one out is not based on the number of consonants/vowels or their position in the letter-cluster.)

**A) MOJ B) GID C) KMG D) IKF**

Date: 18/06/2025 Time: 9:00 AM - 10:30 AM Right: 92.42% Wrong: 4.71%

**Q175)** Based on the English alphabetical order, three of the following four letter-clusters are alike in a certain way and thus form a group. Which letter-cluster DOES NOT belong to that group? (Note: The odd one out is not based on the number of consonants/vowels or their position in the letter-cluster.)

**A) ACG B) SUY C) BEH D) FHL**

Date: 09/06/2025 Time: 4:30 PM - 6:00 PM Right: 92.70% Wrong: 4.56%

**Q176)** Based on the English alphabetical order, three of the following four letter-cluster pairs are alike in a certain way and thus form a group. Which letter-cluster pair DOES NOT belong to that group?  
(Note: The odd one out is not based on the number of consonants/vowels or their position in the letter cluster)

**A) HL - JN   B) MU - KH   C) NR - PT   D) SW - UY**

Date: 05/06/2025   Time: 9:00 AM - 10:30 AM   Right: 92.88%   Wrong: 2.74%

**Q177)** JKL is related to KMO in a certain way based on the English alphabetical order. In the same way, PQR is related to QSU. To which of the following is XYZ related, following the same logic?

**A) YZA   B) FED   C) ABC   D) YAC**

Date: 13/06/2025   Time: 9:00 AM - 10:30 AM   Right: 92.90%   Wrong: 4.86%

**Q178)** Based on the English alphabetical order, three of the following four letter-cluster pairs are alike in a certain way and thus form a group. Which letter-cluster pair DOES NOT belong to that group?  
(Note: The odd one out is not based on the number of consonants/vowels or their position in the letter cluster)

**A) MQ - UZ   B) GJ - PS   C) EH - NQ   D) JM - SV**

Date: 09/06/2025   Time: 4:30 PM - 6:00 PM   Right: 93.09%   Wrong: 3.71%

**Q179)** Based on the English alphabetical order, three of the following four letter-cluster pairs are alike in a certain way and thus form a group. Which letter-cluster pair DOES NOT belong to that group?  
(Note: The odd one out is not based on the number of consonants/vowels or their position in the letter-cluster.)

**A) NK-LI   B) TQ-RO   C) KH-HH   D) YV-WT**

Date: 11/06/2025   Time: 12:45 PM - 2:15 PM   Right: 93.20%   Wrong: 3.26%

**Q180)** Based on the English alphabetical order, three of the following four letter-cluster pairs are alike in a certain way and thus form a group. Which letter-cluster pair DOES NOT belong to that group?  
(Note: The odd one out is not based on the number of consonants/vowels or their position in the letter-cluster.)

**A) MP - LK   B) NP - KM   C) KM - HJ   D) HJ - EG**

Date: 19/06/2025   Time: 12:45 PM - 2:15 PM   Right: 93.22%   Wrong: 2.94%

**Q181)** Based on the English alphabetical order, three of the following four letter-cluster pairs are alike in a certain way and thus form a group. Which is the letter-cluster pair that DOES NOT belong to that group?  
(Note: The odd one out is not based on the number of consonants/vowels or their position in the letter-cluster.)

**A) OJ - NL   B) IK - PR   C) HJ - OQ   D) GI - NP**

Date: 18/06/2025   Time: 9:00 AM - 10:30 AM   Right: 93.38%   Wrong: 2.61%

**Q182)** Based on the English alphabetical order, three of the following four letter-cluster pairs are alike in a certain way and thus form a group. Which letter-cluster pair DOES NOT belong to that group?  
(Note: The odd one out is not based on the number of consonants/vowels or their position in the letter-cluster.)

**A) MH - KJ   B) SV - PS   C) IL - FI   D) PS - MP**

Date: 20/06/2025   Time: 9:00 AM - 10:30 AM   Right: 93.46%   Wrong: 2.73%

**Q183)** Based on the English alphabetical order, three of the following four letter-cluster pairs are alike in a certain way and thus form a group. Which is the letter-cluster pair that DOES NOT belong to that group?

(Note: The odd one out is not based on the number of consonants/vowels or their position in the letter-cluster.)

**A) IL - GJ   B) QT - OR   C) LJ - MK   D) KN - IL**

Date: 14/06/2025   Time: 9:00 AM - 10:30 AM   Right: 93.63%   Wrong: 3.49%

**Q184)** Based on the English alphabetical order, three of the following four letter-cluster pairs are alike in a certain way and thus form a group. Which is the letter-cluster pair that DOES NOT belong to that group?

(Note: The odd one out is not based on the number of consonants/vowels or their position in the letter-cluster.)

**A) LK - KJ   B) HI - CD   C) QR - LM   D) PQ - KL**

Date: 13/06/2025   Time: 4:30 PM - 6:00 PM   Right: 93.75%   Wrong: 3.40%

**Q185)** Based on the English alphabetical order, three of the following four letter-cluster pairs are alike in a certain way and thus form a group. Which is the letter-cluster pair that DOES NOT belong to that group?

(Note: The odd one out is not based on the number of consonants/vowels or their position in the letter-cluster.)

**A) PS - OR   B) HK - GJ   C) JH - KL   D) LO - KN**

Date: 18/06/2025   Time: 12:45 PM - 2:15 PM   Right: 93.92%   Wrong: 2.84%

**Q186)** Based on the English alphabetical order, three of the following four letter-cluster pairs are alike in a certain way and thus form a group. Which is the letter-cluster pair that DOES NOT belong to that group?

(Note: The odd one out is not based on the number of consonants/vowels or their position in the letter-cluster.)

**A) PI - KJ   B) KO - LP   C) QU - RV   D) NR - OS**

Date: 13/06/2025   Time: 12:45 PM - 2:15 PM   Right: 94.07%   Wrong: 2.21%

**Q187)** Based on the English alphabetical order, three of the following four letter-cluster pairs are alike in a certain way and thus form a group. Which letter-cluster pair DOES NOT belong to that group?  
(Note: The odd one out is not based on the number of consonants/vowels or their position in the letter cluster)

**A) QR - WX   B) LM - RS   C) ST - YZ   D) GH - OM**

Date: 09/06/2025   Time: 12:45 PM - 2:15 PM   Right: 94.17%   Wrong: 2.63%

**Q188)** Based on the English alphabetical order, three of the following four letter-cluster pairs are alike in a certain way and thus form a group. Which letter-cluster pair DOES NOT belong to that group?  
(Note: The odd one out is not based on the number of consonants/vowels or their position in the letter cluster)

**A) MO - KM   B) CG - LP   C) SU - QS   D) QS - OQ**

Date: 09/06/2025   Time: 9:00 AM - 10:30 AM   Right: 94.32%   Wrong: 2.45%

**Q189)** Based on the English alphabetical order, three of the following four letter-cluster pairs are alike in a certain way and thus form a group. Which letter-cluster pair DOES NOT belong to that group?  
(Note: The odd one out is not based on the number of consonants/vowels or their position in the letter cluster)

**A) PS - NQ   B) EH - CF   C) KN - IL   D) GJ - FK**

Date: 10/06/2025   Time: 9:00 AM - 10:30 AM   Right: 94.35%   Wrong: 2.50%

**Q190)** Based on the English alphabetical order, three of the following four letter-cluster pairs are alike in a certain way and thus form a group. Which letter-cluster pair DOES NOT belong to that group?  
(Note: The odd one out is not based on the number of consonants/vowels or their position in the letter-cluster.)

**A) IM - KO   B) SP - QI   C) LP - NR   D) GK - IM**

Date: 06/06/2025   Time: 12:45 PM - 2:15 PM   Right: 94.44%   Wrong: 2.59%

**Q191)** Based on the English alphabetical order, three of the following four letter-cluster pairs are alike in a certain way and thus form a group. Which letter-cluster pair DOES NOT belong to that group?  
(Note: The odd one out is not based on the number of consonants/vowels or their position in the letter-cluster.)

**A) GK - JN   B) EI - HL   C) ML - KJ   D) LP - OS**

Date: 21/06/2025   Time: 9:00 AM - 10:30 AM   Right: 94.46%   Wrong: 2.65%

**Q192)** Based on the English alphabetical order, three of the following four letter-clusters are alike in a certain way and thus form a group. Which letter-cluster DOES NOT belong to that group?  
(Note: The odd one out is not based on the number of consonants/vowels or their position in the letter-cluster.)

**A) URO B) KIE C) TQN D) WTQ**

Date: 06/06/2025 Time: 4:30 PM - 6:00 PM Right: 94.48% Wrong: 3.32%

**Q193)** Based on the English alphabetical order, three of the following four letter-cluster pairs are alike in a certain way and thus form a group. Which letter-cluster pair DOES NOT belong to that group?  
(Note: The odd one out is not based on the number of consonants/vowels or their position in the letter-cluster.)

**A) NQ - RM B) NM - PO C) SR - UT D) UT - WV**

Date: 05/06/2025 Time: 4:30 PM - 6:00 PM Right: 94.60% Wrong: 2.70%

**Q194)** Based on the English alphabetical order, three of the following four letter-clusters are alike in a certain way and thus form a group. Which letter-cluster DOES NOT belong to that group?  
(Note: The odd one out is not based on the number of consonants/vowels or their position in the letter-cluster.)

**A) LKP B) QRU C) EFI D) MNQ**

Date: 11/06/2025 Time: 12:45 PM - 2:15 PM Right: 94.65% Wrong: 2.41%

**Q195)** Based on the English alphabetical order, three of the following four letter-cluster pairs are alike in a certain way and thus form a group. Which letter-cluster pair DOES NOT belong to that group?  
(Note: The odd one out is not based on the number of consonants/vowels or their position in the letter cluster)

**A) HK - LP B) KL - FG C) XY - ST D) OP - JK**

Date: 05/06/2025 Time: 12:45 PM - 2:15 PM Right: 94.68% Wrong: 2.40%

**Q196)** Based on the English alphabetical order, three of the following four letter-cluster pairs are alike in a certain way and thus form a group. Which letter-cluster pair DOES NOT belong to that group?  
(Note: The odd one out is not based on the number of consonants/vowels or their position in the letter-cluster.)

**A) JM - IL B) NQ - MP C) FI - EH D) NT - JK**

Date: 09/06/2025 Time: 12:45 PM - 2:15 PM Right: 94.70% Wrong: 1.97%

**Q197)** Based on the English alphabetical order, three of the following four letter-cluster pairs are alike in a certain way and thus form a group. Which letter-cluster pair DOES NOT belong to that group?  
(Note: The odd one out is not based on the number of consonants/vowels or their position in the letter-cluster.)

**A) QR-TU B) FG-HL C) WX-ZA D) DE-GH**

Date: 10/06/2025 Time: 4:30 PM - 6:00 PM Right: 94.74% Wrong: 2.67%

**Q198)** Based on the English alphabetical order, three of the following four letter-cluster pairs are alike in a certain way and thus form a group. Which letter-cluster pair DOES NOT belong to that group?  
(Note: The odd one out is not based on the number of consonants/vowels or their position in the letter-cluster.)

**A) PS - MP B) GJ - DG C) EH - BE D) RK - JH**

Date: 09/06/2025 Time: 9:00 AM - 10:30 AM Right: 94.80% Wrong: 2.19%

**Q199)** Based on the English alphabetical order, three of the following four letter-cluster pairs are alike in a certain way and thus form a group. Which is the letter-cluster pair that DOES NOT belong to that group?  
(Note: The odd one out is not based on the number of consonants/vowels or their position in the letter-cluster.)

**A) IJ - DE B) GH - BC C) LM - GH D) MN - PD**

Date: 19/06/2025 Time: 9:00 AM - 10:30 AM Right: 95.01% Wrong: 1.64%

**Q200)** Based on the English alphabetical order, three of the following four letter-cluster pairs are alike in a certain way and thus form a group. Which letter-cluster pair DOES NOT belong to that group?  
(Note: The odd one out is not based on the number of consonants/vowels or their position in the letter cluster)

**A) PK - MJ B) NO - IJ C) FG - AB D) JK - EF**

Date: 06/06/2025 Time: 12:45 PM - 2:15 PM Right: 95.25% Wrong: 1.77%

**Q201)** Based on the English alphabetical order, three of the following four letter-cluster pairs are alike in a certain way and thus form a group. Which letter-cluster pair DOES NOT belong to that group?  
(Note: The odd one out is NOT based on the number of consonants/vowels or their position in the letter cluster)

**A) PS - QT B) KN - LO C) GJ - HK D) DH - FP**

Date: 05/06/2025 Time: 4:30 PM - 6:00 PM Right: 95.33% Wrong: 2.30%

**Q202)** Based on the English alphabetical order, three of the following four letter-cluster pairs are alike in a certain way and thus form a group. Which letter-cluster pair DOES NOT belong to that group?  
(Note: The odd one out is not based on the number of consonants/vowels or their position in the letter cluster)

**A) NR - MQ   B) EI - DH   C) RV - QU   D) XZ - TL**

Date: 06/06/2025   Time: 4:30 PM - 6:00 PM   Right: 95.45%   Wrong: 2.16%

**Q203)** Based on the English alphabetical order, three of the following four letter-cluster pairs are alike in a certain way and thus form a group. Which is the letter-cluster pair that DOES NOT belong to that group?

(Note: The odd one out is not based on the number of consonants/vowels or their position in the letter-cluster.)

**A) EF - CD   B) CD - AB   C) NP - RL   D) IJ - GH**

Date: 17/06/2025   Time: 12:45 PM - 2:15 PM   Right: 95.46%   Wrong: 1.70%

**Q204)** Based on the English alphabetical order, three of the following four letter-cluster pairs are alike in a certain way and thus form a group. Which letter-cluster pair DOES NOT belong to that group?  
(Note: The odd one out is not based on the number of consonants/vowels or their position in the letter-cluster.)

**A) LD - KH   B) OP - KL   C) IJ - EF   D) MN - IJ**

Date: 06/06/2025   Time: 9:00 AM - 10:30 AM   Right: 95.60%   Wrong: 1.59%

**Q205)** Based on the English alphabetical order, three of the following four letter-cluster pairs are alike in a certain way and thus form a group. Which letter-cluster pair DOES NOT belong to that group?  
(Note: The odd one out is not based on the number of consonants/vowels or their position in the letter cluster)

**A) PQ - NO   B) KL - IJ   C) GH - EF   D) MH - IP**

Date: 10/06/2025   Time: 4:30 PM - 6:00 PM   Right: 95.96%   Wrong: 1.52%

### Answer Key (Q1 to Q205) Analogy & Classification

Q1: 2	Q2: 1	Q3: 2	Q4: 2	Q5: 1
Q6: 3	Q7: 4	Q8: 3	Q9: 4	Q10: 1
Q11: 1	Q12: 1	Q13: 4	Q14: 3	Q15: 4
Q16: 3	Q17: 3	Q18: 2	Q19: 4	Q20: 3
Q21: 2	Q22: 3	Q23: 1	Q24: 4	Q25: 2
Q26: 3	Q27: 4	Q28: 3	Q29: 1	Q30: 4

Q31: 2	Q32: 2	Q33: 4	Q34: 2	Q35: 3
Q36: 1	Q37: 2	Q38: 3	Q39: 4	Q40: 3
Q41: 2	Q42: 2	Q43: 3	Q44: 1	Q45: 4
Q46: 1	Q47: 3	Q48: 1	Q49: 4	Q50: 2
Q51: 2	Q52: 3	Q53: 3	Q54: 4	Q55: 2
Q56: 2	Q57: 3	Q58: 1	Q59: 4	Q60: 3
Q61: 2	Q62: 4	Q63: 3	Q64: 3	Q65: 3
Q66: 3	Q67: 1	Q68: 2	Q69: 4	Q70: 2
Q71: 2	Q72: 3	Q73: 4	Q74: 1	Q75: 1
Q76: 2	Q77: 3	Q78: 1	Q79: 1	Q80: 4
Q81: 1	Q82: 1	Q83: 3	Q84: 3	Q85: 3
Q86: 3	Q87: 3	Q88: 3	Q89: 2	Q90: 3
Q91: 1	Q92: 1	Q93: 1	Q94: 3	Q95: 2
Q96: 4	Q97: 2	Q98: 3	Q99: 4	Q100: 1
Q101: 2	Q102: 4	Q103: 3	Q104: 1	Q105: 4
Q106: 2	Q107: 3	Q108: 4	Q109: 3	Q110: 4
Q111: 2	Q112: 2	Q113: 1	Q114: 3	Q115: 1
Q116: 1	Q117: 1	Q118: 3	Q119: 1	Q120: 1
Q121: 2	Q122: 3	Q123: 3	Q124: 1	Q125: 3
Q126: 2	Q127: 2	Q128: 2	Q129: 2	Q130: 4
Q131: 3	Q132: 4	Q133: 2	Q134: 2	Q135: 1
Q136: 1	Q137: 3	Q138: 4	Q139: 4	Q140: 1
Q141: 3	Q142: 3	Q143: 2	Q144: 2	Q145: 1
Q146: 1	Q147: 1	Q148: 1	Q149: 1	Q150: 1
Q151: 1	Q152: 2	Q153: 4	Q154: 1	Q155: 3
Q156: 1	Q157: 3	Q158: 1	Q159: 3	Q160: 4
Q161: 4	Q162: 3	Q163: 2	Q164: 1	Q165: 2

Q166: 2	Q167: 2	Q168: 1	Q169: 4	Q170: 3
Q171: 1	Q172: 4	Q173: 4	Q174: 3	Q175: 3
Q176: 2	Q177: 4	Q178: 1	Q179: 3	Q180: 1
Q181: 1	Q182: 1	Q183: 3	Q184: 1	Q185: 3
Q186: 1	Q187: 4	Q188: 2	Q189: 4	Q190: 2
Q191: 3	Q192: 2	Q193: 1	Q194: 1	Q195: 1
Q196: 4	Q197: 2	Q198: 4	Q199: 4	Q200: 1
Q201: 4	Q202: 4	Q203: 3	Q204: 1	Q205: 4

## Distance & Direction

**Q1)** Zakir starts from Point A and drives 7 km towards the South. He then takes a left turn, drives 2 km, turns right and drives 7 km. He then takes a left turn and drives 11 km. He then takes a left turn and drives 8 km. He then takes a left turn and drives 2 turns. He takes a final right turn, drives 6 km and stops at Point P. How far (shortest distance) and towards which direction should he drive in order to reach Point A again? (All turns are 90 degrees turns only unless specified.)

**A)** 10 km to the West **B)** 9 km to the West **C)** 11 km to the West **D)** 13 km to the West

Date: 24/06/2025 Time: 4:30 PM - 6:00 PM Right: 55.29% Wrong: 24.05%

**Q2)** Gyanesh starts from Point Y and drives 11 km towards the south. He then takes a left turn, drives 45 km, turns right and drives 29 km. He then takes a right turn and drives 18 km. He takes a right turn, drives 13 km. He then turns right, drives 29 km, turns left and drives 27 km to stop at Point Z. How far (shortest distance) and towards which direction should he drive in order to reach Point Y again? (All turns are 90-degree turns only unless specified.)

**A)** 53 km towards the north **B)** 61 km towards the west **C)** 56 km towards the west

**D)** 51 km towards the east

Date: 18/06/2025 Time: 9:00 AM - 10:30 AM Right: 57.67% Wrong: 18.04%

**Q3)** Mr. Evan starts from Point A and drives 8 km towards the East. He then takes a right turn, drives 19 km, turns right and drives 19 km. He then takes a right turn and drives 9 km. He then taken a right turn, drives 3 km, turns left and drives 6 km. He takes a final right turn, drives 8 km and stops at Point P. How far (shortest distance) and towards which direction should he drive in order to reach Point A again? (All turns are 90 degrees turns only unless specified.)

**A)** 3 km to the West **B)** 4 km to the North **C)** 7 km to the North **D)** 9 km to the West

Date: 18/06/2025 Time: 9:00 AM - 10:30 AM Right: 60.69% Wrong: 19.73%

**Q4)** Mr. P starts from Point C and drives 5 km towards the west. He then takes a left turn, drives 6 km, turns left and drives 8 km. He then takes a right turn, drives 2 km, turns left and drives 4 km. He then takes left turn and drives 12 km. He takes a final left turn drives 7 km and stops at Point P. How far (shortest distance) and towards which direction should he drive in order to reach Point C again? (All turns are 90 degree turns only unless specified.)

**A)** 4 km towards the north **B)** 2 km towards the east **C)** 2 km towards the west **D)** 4 km towards the south

Date: 12/06/2025 Time: 9:00 AM - 10:30 AM Right: 61.56% Wrong: 23.18%

**Q5)** Town J is to the north of Town K. Town K is to the east of Town L. Town L is to the west of Town M. Town M is to the south of Town N. Town J is to the south-west of Town N. What is the position of Town K with respect to Town M?

**A)** North **B)** East **C)** South **D)** West

Date: 11/06/2025 Time: 4:30 PM - 6:00 PM Right: 61.81% Wrong: 22.60%

**Q6)** Ishan starts from Point Y and drives 21 km towards the north. He then takes a left turn, drives 42 km, turns left and drives 41 km. He then takes a right turn and drives 17 km. He takes a right turn, drives 59 km. He then turns right, drives 18 km, turns right and drives 39 km to stop at Point Z. How far (shortest distance) and towards which direction should he drive in order to reach Point Y again? (All turns are 90-degree turns only unless specified.)

**A)** 39 km towards the east **B)** 43 km towards the west **C)** 45 km towards the south

**D)** 41 km towards the east

Date: 19/06/2025 Time: 9:00 AM - 10:30 AM Right: 62.27% Wrong: 16.02%

**Q7)** Q starts from Point P and drives 2 km towards the south. He then takes a right turn, drives 3 km, turns right and drives 11 km. He then takes a right turn and drives 4 km, turns left and drives 3 km. He then takes a right turn and drives 2 km. He takes a final right turn, drives 12 km and stops at Point O. How far (shortest distance) and towards which direction should he drive in order to reach Point P again? (All turns are 90 degree turns only unless specified.)

**A)** 7 km towards the north **B)** 5 km towards the south **C)** 3 km towards the east **D)** 3 km towards the west

Date: 11/06/2025 Time: 9:00 AM - 10:30 AM Right: 62.46% Wrong: 20.16%

**Q8)** Steve starts from Point A and drives 10 km towards north. He then takes a right turn, drives 7 km, turns right and drives 3 km. He then takes a left turn and drives 5 km. He takes a final right turn, drives 7 km and stops at Point P. How far (shortest distance) and towards which direction should he drive in order to reach Point A again? (All turns are 90 degrees turns only unless specified)

**A)** 12 km towards west **B)** 10 km towards south **C)** 12 km towards east **D)** 10 km towards west

Date: 24/06/2025 Time: 12:45 PM - 2:15 PM Right: 62.81% Wrong: 28.15%

**Q9)** Mr. Yanki starts from Point A and drives 17 km towards the South. He then takes a right turn, drives 19 km, turns right and drives 29 km. He then takes a right turn and drives 15 km, turns right drives 1 km. He then takes a left turn drives 6 km. He takes a final right turn, drives 11 km and stops at Point P. How far (shortest distance) and towards which direction should he drive in order to reach Point A again? (All turns are 90 degrees turns only unless specified.)

**A)** 4 km to the South **B)** 2 km to the West **C)** 6 km to the East **D)** 8 km to the North

Date: 18/06/2025 Time: 4:30 PM - 6:00 PM Right: 63.52% Wrong: 16.20%

**Q10)** Evan starts from point A and drives 12 km towards west. He then takes a left turn, drives 6 km, turns left and drives 4 km. He then takes a right turn and drives 2 km. He then takes a right turn and drive 3 km. He then takes a left turn and drives 3 km. He takes a final left turn, drives 11 km and stops at point P. How far (shortest distance) and towards which direction should he drive in order to reach point A again (all turns are 90° turns only unless specified)?

**A)** 9 km south **B)** 11 km south **C)** 11 km north **D)** 12 km north

Date: 06/06/2025 Time: 9:00 AM - 10:30 AM Right: 63.72% Wrong: 20.95%

**Q11)** Town C is to the west of Town D. Town E is to the east of Town C. Town F is to the north of Town D. Town G is to the north of Town E. Town G is to the north-west of Town D. What is the position of Town E with respect to Town D?

**A)** North **B)** East **C)** West **D)** South

Date: 11/06/2025 Time: 9:00 AM - 10:30 AM Right: 63.79% Wrong: 23.50%

**Q12)** Town V is to the west of Town W. Town X is to the east of Town V. Town Y is to the north of Town W. Town Z is to the north of Town X. Town Z is to the north-west of Town W. What is the position of Town X with respect to Town W?

**A)** North **B)** East **C)** West **D)** South

Date: 09/06/2025 Time: 12:45 PM - 2:15 PM Right: 65.46% Wrong: 20.81%

**Q13)** B starts from Point U and drives 5 km towards the South. He then takes a right turn, drives 2 km, turns right and drives 16 km. He then takes a right turn and drives 3 km, turns left and drives 1 km. He then takes a right turn, drives 2 km. He takes a final right turn, drives 12 km and stops at Point X. How far (shortest distance) and towards which direction should he drive in order to reach Point U again? (All turns are 90 degrees turns only unless specified).

**A)** 3 km towards the East **B)** 3 km towards the West **C)** 5 km towards the South

**D)** 7 km towards the North

Date: 20/06/2025 Time: 9:00 AM - 10:30 AM Right: 65.71% Wrong: 20.61%

**Q14)** Town M is to the north of Town N. Town N is to the east of Town O. Town O is to the west of Town P. Town P is to the south of Town Q. Town M is to the south-west of Town Q. What is the position of Town N with respect to Town P?

- A)** North **B)** East **C)** South **D)** West

Date: 10/06/2025 Time: 4:30 PM - 6:00 PM Right: 66.46% Wrong: 21.58%

**Q15)** Fenil starts from Point Y and drives 19 km towards the west. He then takes a left turn, drives 49 km, turns left and drives 12 km. He then takes a left turn and drives 28 km. He takes a left turn and drives 38 km. He then turns right and drives 21 km to stop at Point Z. How far (shortest distance) and towards which direction should he drive in order to reach Point Y again? (All turns are 90 degree turns only unless specified.)

- A)** 51 km towards the south **B)** 39 km towards the west **C)** 41 km towards the south  
**D)** 45 km towards the east

Date: 18/06/2025 Time: 4:30 PM - 6:00 PM Right: 66.92% Wrong: 11.37%

**Q16)** Mr. Wax starts from Point A and drives 14 km towards the north. He then takes a right turn, drives 9 km, turns right and drives 7 km. He then takes a left turn, drives 3 km, turns right and drives 11 km. He then takes a right turn and drives 15 km. He takes a final right turn, drives 4 km and stops at Point P. How far (shortest distance) and in which direction should he drive in order to reach Point A again? (All turns are 90-degree turns only unless specified)

- A)** 3 km to the east **B)** 2 km to the west **C)** 4 km to the west **D)** 5 km to the east

Date: 17/06/2025 Time: 12:45 PM - 2:15 PM Right: 67.32% Wrong: 17.73%

**Q17)** Town G is to the south of Town H. Town I is to the east of Town H. Town J is to the west of Town I. Town K is to the north of Town J. Town G is to the south-east of Town K. What is the position of Town H with respect to Town J?

- A)** West **B)** North **C)** East **D)** South

Date: 12/06/2025 Time: 9:00 AM - 10:30 AM Right: 68.27% Wrong: 20.11%

**Q18)** Town P is to the east of Town Q. Town Q is to the south of Town R. Town R is to the east of Town S. Town S is to the west of Town T. Town P is to the south-west of Town T. What is the position of Town R with respect to Town T?

- A)** West **B)** South **C)** East **D)** North

Date: 11/06/2025 Time: 12:45 PM - 2:15 PM Right: 68.54% Wrong: 19.62%

**Q19)** Mr. RST starts from Point A and drives 16 km towards the south. He then takes a left turn, drives 6 km, turns left and drives 23 km. He then takes a left turn and drives 8 km, turns left and drives 3 km. He then takes a right turn and drives 4 km. He takes a final left turn, drives 4 km and stops at Point P. How far (shortest distance) and in which direction should he drive in order to reach Point A again? (All turns are 90-degree turns only unless specified)

**A)** 3 km to the west **B)** 5 km to the north **C)** 6 km to the east **D)** 2 km to the south

Date: 24/06/2025 Time: 4:30 PM - 6:00 PM Right: 68.87% Wrong: 13.74%

**Q20)** Mr. Chotu starts from Point A and drives 16 km towards the North. He then takes a left turn, drives 8 km, turns left and drives 7 km. He then takes a right turn, drives 4 km, turns left and drives 12 km. He then takes a left turn and drives 18 km. He takes a final left turn, drives 3 km and stops at Point P. How far (shortest distance) and towards which direction should he drive in order to reach Point A again? (All turns are 90 degrees turns only unless specified).

**A)** 4 km to the East **B)** 6 km to the West **C)** 9 km to the South **D)** 1 km to the North

Date: 17/06/2025 Time: 4:30 PM - 6:00 PM Right: 69.00% Wrong: 16.49%

**Q21)** Barun starts from Point Y and drives 19 km towards the east. He then takes a right turn, drives 28 km, turns left and drives 17 km. He then takes a left turn and drives 59 km. He takes a left turn, drives 36 km. He then turns right, drives 9 km and stops at Point Z. How far (shortest distance) and towards which direction should he drive in order to reach Point Y again? (All turns are 90-degree turns only unless specified.)

**A)** 22 km towards the south **B)** 36 km towards the north **C)** 40 km towards the south

**D)** 29 km towards the north

Date: 17/06/2025 Time: 9:00 AM - 10:30 AM Right: 69.07% Wrong: 18.58%

**Q22)** Eshwar starts from Point Y and drives 13 km towards the south. He then takes a left turn, drives 27 km, turns right and drives 51 km. He then takes a left turn and drives 18 km. He takes a left turn, drives 35 km. He then turns left, drives 45 km, turns left and drives 18 km to stop at Point Z. How far (shortest distance) and towards which direction should he drive in order to reach Point Y again? (All turns are 90-degree turns only unless specified.)

**A)** 47 km towards the north **B)** 42 km towards the east **C)** 36 km towards the south

**D)** 51 km towards the west

Date: 18/06/2025 Time: 12:45 PM - 2:15 PM Right: 69.15% Wrong: 12.75%

**Q23)** Town E is to the east of Town F. Town F is to the south of Town G. Town G is to the east of Town H. Town H is to the west of Town I. Town E is to the south-west of Town I. What is the position of Town G with respect to Town I?

**A)** East **B)** North **C)** South **D)** West

Date: 09/06/2025 Time: 4:30 PM - 6:00 PM Right: 69.58% Wrong: 18.28%

**Q24)** Dhiraj starts from Point Y and drives 22 km towards the east. He then takes a right turn, drives 33 km, turns left and drives 25 km. He then takes a left turn and drives 51 km. He takes a left turn, drives 47 km. He then turns left, drives 23 km and stops at Point Z. How far (shortest distance) and towards which direction should he drive in order to reach Point Y again? (All turns are 90-degree turns only unless specified.)

- A)** 5 km towards the north   **B)** 5 km towards the east   **C)** 7 km towards the north  
**D)** 7 km towards the south

Date: 17/06/2025   Time: 12:45 PM - 2:15 PM   Right: 69.75%   Wrong: 15.40%

**Q25)** Sundar starts from point A and drives 12 km towards the east. He then takes a left turn, drives 9 km, turns left and drives 13 km. He then takes a left turn and drives 11 km. He takes a final left turn, drives 1 km and stops at point P. How far (shortest distance) and towards which direction should he drive in order to reach point A again? (All turns are 90 degree turns only unless specified.)

- A)** 2 km to the south   **B)** 1 km to the north   **C)** 2 km to the north   **D)** 1 km to the south

Date: 05/06/2025   Time: 9:00 AM - 10:30 AM   Right: 70.60%   Wrong: 20.50%

**Q26)** Anish starts from Point A and drives 3 km towards the East. He then takes a right turn, drives 5 km, turns right and drives 2 km. He then takes a left turn and drives 4 km. He then takes a right turn and drives 7 km. He takes a final right turn, drives 9 km and stops at Point P. How far (shortest distance) and towards which direction should he drive in order to reach Point A again? (All turns are 90 degrees turns only unless specified.)

- A)** 3 km to the West   **B)** 6 km to the East   **C)** 6 km to the West   **D)** 5 km to the East

Date: 24/06/2025   Time: 9:00 AM - 10:30 AM   Right: 70.61%   Wrong: 17.18%

**Q27)** Mr C starts from Point A and drives 5 km towards the West. He then takes a right turn, drives 11 km, turns right and drives 3 km. He then takes a left turn and drives 4 km. He then takes a right turn, drives 3 km. He then takes a final right turn drives 15 km and stops at Point B. How far (shortest distance) and towards which direction should he drive in order to reach Point A again? (All turns are 90 degrees turns only unless specified)

- A)** 1 km towards the West   **B)** 1 km towards the East   **C)** 1 km towards the North  
**D)** 3 km towards the South

Date: 21/06/2025   Time: 12:45 PM - 2:15 PM   Right: 70.92%   Wrong: 18.89%

**Q28)** Mr. Alex starts from Point A and drives 9 km towards the South. He then takes a left turn, drives 3 km, turns left and drives 19 km. He then takes a left turn and drives 7 km, turns left drives 5 km. He then takes a right turn and drives 4 km. He takes a final left turn, drives 5 km and stops at Point P. How far (shortest distance) and towards which direction should he drive in order to reach Point A again? (All turns are 90 degrees turns only unless specified)

- A)** 8 km to the East   **B)** 6 km to the West   **C)** 10 km to the East   **D)** 4 km to the West

Date: 18/06/2025   Time: 12:45 PM - 2:15 PM   Right: 70.97%   Wrong: 14.08%

**Q29)** Town C is to the east of Town D. Town E is to the north of Town C. Town F is to the south of Town E. Town G is to the west of Town F. Town D is to the north-east of Town G. What is the position of Town C with respect to Town F?

- A)** West **B)** South **C)** North **D)** East

Date: 10/06/2025 Time: 9:00 AM - 10:30 AM Right: 71.48% Wrong: 16.06%

**Q30)** Town N is to the east of Town O. Town P is to the north of Town N. Town Q is to the south of Town P. Town R is to the west of Town Q. Town O is to the north-east of Town R. What is the position of Town N with respect to Town Q?

- A)** East **B)** West **C)** North **D)** South

Date: 12/06/2025 Time: 12:45 PM - 2:15 PM Right: 71.65% Wrong: 16.88%

**Q31)** Harit starts from Point Y and drives 47 km towards the east. He then takes a right turn, drives 23 km, turns right and drives 26 km. He then takes a right turn and drives 52 km. He takes a left turn, drives 21 km. He then turns left, drives 11 km to stop at Point Z. How far (shortest distance) and towards which direction should he drive in order to reach Point Y again? (All turns are 90-degree turns only unless specified.)

- A)** 19 km towards the north **B)** 18 km towards the south **C)** 20 km towards the south  
**D)** 24 km towards the east

Date: 19/06/2025 Time: 12:45 PM - 2:15 PM Right: 71.66% Wrong: 11.57%

**Q32)** Kapil starts from point A and drives 9 km towards west. He then takes a right turn, drives 1 km, turns right and drives 5 km. He then takes a left turn and drives 3 km. He then takes a left turn and drive 5 km. He then takes a right turn and drives 8 km. He takes a final right turn, drives 9 km and stops at point P. How far (shortest distance) and towards which direction should he drive in order to reach point A again (all turns are 90° turns only unless specified)?

- A)** 12 km north **B)** 10 km south **C)** 12 km south **D)** 11 km north

Date: 09/06/2025 Time: 9:00 AM - 10:30 AM Right: 72.40% Wrong: 16.68%

**Q33)** Mr. Y starts from Point B and drives 4 km towards the south. He then takes a left turn, drives 7 km, turns right and drives 7 km. He then takes a left turn and drives 9 km. He takes a final left turn, drives 11 km and stops at Point A. How far (shortest distance) and towards which direction should he drive in order to reach Point B again? (All turns are 90 degree turns only unless specified.)

- A)** 7 km towards the south **B)** 16 km towards the west **C)** 11 km towards the north **D)** 16 km towards the east

Date: 10/06/2025 Time: 9:00 AM - 10:30 AM Right: 72.75% Wrong: 15.99%

**Q34)** Mr. C starts from Point D and drives 3 km towards the west. He then takes a left turn, drives 11 km, turns left and drives 9 km. He then takes a right turn and drives 5 km, turns left drives 7 km. He then takes left turn, drives 16 km. He takes a final left turn drives 9 km and stops at Point E. How far (shortest distance) and towards which direction should he drive in order to reach Point D again? (All turns are 90 degrees turns only unless specified.)

- A)** 2 km towards the East   **B)** 4 km towards the West   **C)** 2 km towards the West  
**D)** 4 km towards the South

Date: 23/06/2025   Time: 9:00 AM - 10:30 AM   Right: 72.79%   Wrong: 14.58%

**Q35)** Town A is to the south of Town B. Town C is to the east of Town B. Town D is to the west of Town C. Town E is to the north of Town D. Town A is to the south-east of Town E. What is the position of Town B with respect to Town D?

- A)** East   **B)** South   **C)** West   **D)** North

Date: 10/06/2025   Time: 12:45 PM - 2:15 PM   Right: 73.37%   Wrong: 16.48%

**Q36)** Mr. I starts from Point M and drives 5 km towards the south. He then takes a right turn, drives 8 km, turns left and drives 7 km. He then takes a left turn and drives 12 km. He takes a final left turn, drives 12 km and stops at Point N. How far (shortest distance) and towards which direction should he drive in order to reach Point M again? (All turns are 90 degree turns only unless specified.)

- A)** 4 km towards the east   **B)** 12 km towards the north   **C)** 5 km towards the south   **D)** 4 km towards the west

Date: 10/06/2025   Time: 12:45 PM - 2:15 PM   Right: 73.49%   Wrong: 16.94%

**Q37)** Sunil starts from Point A and drives 11 km towards the south. He then takes a left turn, drives 3 km, turns left and drives 4 km. He then takes a left turn and drives 12 km. He takes a final right turn, drives 7 km and stops at Point P. How far (shortest distance) and towards which direction should he drive in order to reach Point A again? (All turns are 90 degree turns only unless specified.)

- A)** 8 km to the east   **B)** 9 km to the west   **C)** 7 km to the east   **D)** 9 km to the east

Date: 05/06/2025   Time: 12:45 PM - 2:15 PM   Right: 73.82%   Wrong: 17.77%

**Q38)** Mr. D starts from Point P and drives 11 km towards the South. He then takes a left turn, drives 6 km, turns right and drives 12 km. He then takes a left turn and drives 1 km. He takes a final left turn derives 23 km and stops at Point Q. How far (shortest distance) and towards which direction should he drive in order to reach Point P again? (All turns are 90 degrees turns only unless specified.)

- A)** 3 km towards the North   **B)** 4 km towards the South   **C)** 7 km towards the West  
**D)** 7 km towards the East

Date: 23/06/2025   Time: 12:45 PM - 2:15 PM   Right: 74.60%   Wrong: 15.34%

**Q39)** Mr. HIJ starts from Point A and drives 21 km towards the south. He then takes a right turn, drives 19 km, turns right and drives 26 km. He then takes a right turn and drives 19 km, turns right and drives 2 km. He then takes a left turn and drives 4 km. He takes a final right turn, drives 3 km and stops at Point P. How far (shortest distance) and in which direction should he drive in order to reach Point A again? (All turns are 90-degree turns only unless specified)

**A)** 7 km to the east **B)** 5 km to the south **C)** 6 km to the north **D)** 4 km to the west

Date: 24/06/2025 Time: 9:00 AM - 10:30 AM Right: 74.91% Wrong: 12.31%

**Q40)** Mr. O starts from Point L and drives 3 km towards the south. He then takes a left turn, drives 3 km, turns right and drives 4 km. He then takes a left turn and drives 4 km. He takes a final left turn, drives 7 km and stops at Point M. How far (shortest distance) and towards which direction should he drive in order to reach Point L again? (All turns are 90 degree turns only unless specified.)

**A)** 3 km towards the north **B)** 7 km towards the east **C)** 7 km towards the west **D)** 4 km towards the south

Date: 12/06/2025 Time: 12:45 PM - 2:15 PM Right: 75.20% Wrong: 14.94%

**Q41)** Pravenesh starts from point A and drives 12 km towards the south. He then takes a right turn, drives 7 km, turns right and drives 14 km. He then takes a right turn and drives 10 km. He takes a final right turn, drives 2 km and stops at point P. How far (shortest distance) and towards which direction should he drive in order to reach point A again? (All turns are 90 degree turns only unless specified.)

**A)** 2 km to the east **B)** 4 km to the east **C)** 3 km to the east **D)** 3 km to the west

Date: 06/06/2025 Time: 4:30 PM - 6:00 PM Right: 75.62% Wrong: 15.66%

**Q42)** Mr. T starts from Point D and drives 3 km towards the east. He then takes a right turn, drives 7 km, turns right and drives 6 km. He then takes a right turn and drives 4 km, and then turns right and drives 3 km. He takes a final left turn, drives 1 km and stops at Point H. How far (shortest distance) and towards which direction should he drive in order to reach Point D again? (All turns are 90 degree turns only unless specified.)

**A)** 2 km towards the south **B)** 7 km towards the west **C)** 5 km towards the east **D)** 2 km towards the north

Date: 11/06/2025 Time: 12:45 PM - 2:15 PM Right: 75.85% Wrong: 12.53%

**Q43)** Manav starts from point A and drives 10 km towards the east. He then takes a right turn, drives 9 km, turns right and drives 12 km. He then takes a right turn and drives 13 km. He takes a final right turn, drives 2 km and stops at point P. How far (shortest distance) and towards which direction should he drive in order to reach point A again? (All turns are 90-degree turns only unless specified.)

**A)** 4 km to the south **B)** 3 km to the south **C)** 3 km to the north **D)** 4 km to the north

Date: 16/06/2025 Time: 12:45 PM - 2:15 PM Right: 75.96% Wrong: 15.99%

**Q44)** Mr. U starts from Point F and drives 2 km towards the west. He then takes a left turn, drives 4 km, turns right and drives 10 km. He then takes a left turn and drives 4 km. He then takes a left turn and drives 12 km. He takes a final left turn, drives 2 km and stops at Point O. How far (shortest distance) and towards which direction should he drive in order to reach Point F again? (All turns are 90 degree turns only unless specified.)

- A)** 4 km towards the south   **B)** 6 km towards the west   **C)** 6 km towards the north   **D)** 8 km towards the east

Date: 11/06/2025   Time: 4:30 PM - 6:00 PM   Right: 76.09%   Wrong: 11.64%

**Q45)** Rajendra starts from point A and drives 9 km towards the north. He then takes a left turn, drives 7 km, turns left and drives 11 km. He then takes a left turn and drives 10 km. He takes a final left turn, drives 2 km and stops at point P. How far (shortest distance) and towards which direction should he drive in order to reach point A again? (All turns are 90 degree turns only unless specified.)

- A)** 3 km to the west   **B)** 1 km to the west   **C)** 2 km to the west   **D)** 3 km to the east

Date: 05/06/2025   Time: 4:30 PM - 6:00 PM   Right: 76.11%   Wrong: 17.51%

**Q46)** Sudeep starts from Point A and drives 3 km towards south. He then takes a left turn, drives 4 km, turns right and drives 4 km. He then takes a left turn and drives 3 km. He takes a final left turn, drives 7 km and stops at Point P. How far (shortest distance) and towards which direction should he drive in order to reach Point A again (all turns are 90° turns only unless specified)?

- A)** 7 km; East   **B)** 6 km; East   **C)** 7 km; West   **D)** 6 km; West

Date: 05/06/2025   Time: 4:30 PM - 6:00 PM   Right: 76.22%   Wrong: 16.41%

**Q47)** Vinay starts from Point A and drives 3 km towards the North. He then takes a right turn, drives 2 km, turns left and drives 3 km. He then takes a left turn and drives 6 km. He takes a final left turn, drives 6 km and stops at Point P. How far (shortest distance) and towards which direction should he drive in order to reach Point A again? (All turns are 90 degrees turns only unless specified)

- A)** 6 km to the East   **B)** 4 km to the West   **C)** 4 km to the East   **D)** 5 km to the East

Date: 24/06/2025   Time: 12:45 PM - 2:15 PM   Right: 76.35%   Wrong: 15.77%

**Q48)** Shyam starts from point A and drives 11 km towards the east. He then takes a right turn, drives 5 km, turns right and drives 12 km. He then takes a right turn and drives 10 km. He takes a final right turn, drives 1 km and stops at point P. How far (shortest distance) and towards which direction should he drive in order to reach point A again? (All turns are 90 degree turns only unless specified.)

- A)** 5 km to the north   **B)** 5 km to the south   **C)** 4 km to the south   **D)** 4 km to the north

Date: 06/06/2025   Time: 9:00 AM - 10:30 AM   Right: 76.36%   Wrong: 15.33%

**Q49)** Prakesh starts from point A and drives 11 km towards the south. He then takes a right turn, drives 7 km, turns right and drives 13 km. He then takes a right turn and drives 9 km. He takes a final right turn, drives 2 km and stops at point P. How far (shortest distance) and towards which direction should he drive in order to reach point A again? (All turns are 90 degree turns only unless specified.)

**A)** 3 km to the west **B)** 2 km to the east **C)** 2 km to the west **D)** 1 km to the west

Date: 09/06/2025 Time: 9:00 AM - 10:30 AM Right: 76.37% Wrong: 13.60%

**Q50)** Mr. I starts from Point J and drives 5 km towards the west. He then takes a right turn, drives 7 km, turns right and drives 11 km. He then takes a left turn and drives 2 km. He then takes a right turn and drives 4 km. He then takes a final right turn, drives 9 km and stops at Point K. How far (shortest distance) and towards which direction should he drive in order to reach Point J again? (All turns are 90 degree turns only unless specified.)

**A)** 10 km towards the west **B)** 10 km towards the east **C)** 13 km towards the south **D)** 11 km towards the north

Date: 12/06/2025 Time: 4:30 PM - 6:00 PM Right: 76.65% Wrong: 15.38%

**Q51)** Fardeen starts from point A and drives 13 km towards west. He then takes a left turn, drives 7 km, turns right and drives 6 km. He then takes a left turn and drives 8 km. He takes a final left turn, drives 19 km and stops at point P. How far (shortest distance) and towards which direction should he drive in order to reach point A again (all turns are 90 degrees turns only unless specified)?

**A)** 10 km north **B)** 15 km south **C)** 12 km south **D)** 15 km north

Date: 05/06/2025 Time: 9:00 AM - 10:30 AM Right: 77.27% Wrong: 12.38%

**Q52)** Manoj starts from Point A and drives 13 km towards west. He then takes a right turn, drives 2 km, turns right and drives 7 km. He then takes a left turn and drives 5 km. He takes a final right turn, drives 6 km and stops at Point P. How far (shortest distance) and towards which direction should he drive in order to reach Point A again (all turns are 90° turns only unless specified)?

**A)** 5 km; South **B)** 9 km; South **C)** 7 km; South **D)** 6 km; South

Date: 06/06/2025 Time: 4:30 PM - 6:00 PM Right: 77.43% Wrong: 15.05%

**Q53)** Mr. O starts from Point U and drives 1 km towards the west. He then takes a left turn, drives 2 km, turns right and drives 3 km. He then takes a left turn and drives 4 km. He then takes a left turn, drives 4 km. He takes a final left turn, drives 4 km and stops at Point V. How far (shortest distance) and towards which direction should he drive in order to reach Point U again? (All turns are 90-degree turns only unless specified.)

**A)** 2 km towards the west **B)** 4 km towards the east **C)** 4 km towards the south

**D)** 2 km towards the north

Date: 21/06/2025 Time: 9:00 AM - 10:30 AM Right: 77.44% Wrong: 10.12%

**Q54)** Kanav starts from point A and drives 11 km towards the east. He then takes a left turn, drives 7 km, turns left and drives 13 km. He then takes a left turn and drives 12 km. He takes a final left turn, drives 2 km and stops at point P. How far (shortest distance) and towards which direction should he drive in order to reach point A again? (All turns are 90-degree turns only unless specified.)

**A)** 5 km to the south **B)** 4 km to the south **C)** 4 km to the north **D)** 5 km to the north

Date: 16/06/2025 Time: 4:30 PM - 6:00 PM Right: 77.57% Wrong: 13.80%

**Q55)** Rohan starts from point A and drives 8 km towards the north. He then takes a left turn, drives 12 km, turns left and drives 11 km. He then takes a left turn and drives 14 km. He takes a final left turn, drives 3 km and stops at point P. How far (shortest distance) and towards which direction should he drive in order to reach point A again? (All turns are 90-degree turns only unless specified.)

**A)** 3 km to the west **B)** 2 km to the west **C)** 3 km to the east **D)** 2 km to the east

Date: 13/06/2025 Time: 9:00 AM - 10:30 AM Right: 77.61% Wrong: 16.01%

**Q56)** Uday starts from Point A and drives 3 km towards south. He then takes a right turn, drives 2 km, turns left and drives 5 km. He then takes a right turn and drives 3 km. He takes a final right turn, drives 8 km and stops at Point P. How far (shortest distance) and towards which direction should he drive in order to reach Point A again (all turns are 90° turns only unless specified)?

**A)** 3 km; East **B)** 5 km; West **C)** 4 km; East **D)** 5 km; East

Date: 05/06/2025 Time: 12:45 PM - 2:15 PM Right: 77.82% Wrong: 14.02%

**Q57)** Raju starts from point A and drives 9 km towards the west. He then takes a left turn, drives 7 km, turns left and drives 11 km. He then takes a left turn and drives 13 km. He takes a final left turn, drives 2 km and stops at point P. How far (shortest distance) and towards which direction should he drive in order to reach point A again? (All turns are 90 degree turns only unless specified.)

**A)** 5 km to the north **B)** 6 km to the south **C)** 5 km to the south **D)** 6 km to the north

Date: 06/06/2025 Time: 12:45 PM - 2:15 PM Right: 77.83% Wrong: 15.55%

**Q58)** Sunny starts from point A and drives 11 km towards the east. He then takes a left turn, drives 8 km, turns left and drives 12 km. He then takes a left turn and drives 10 km. He takes a final left turn, drives 1 km and stops at point P. How far (shortest distance) and towards which direction should he drive in order to reach point A again? (All turns are 90 degree turns only unless specified.)

**A)** 2 km to the south **B)** 2 km to the north **C)** 1 km to the south **D)** 4 km to the south

Date: 09/06/2025 Time: 12:45 PM - 2:15 PM Right: 78.31% Wrong: 13.41%

**Q59)** Ganesh starts from point A and drives 11 km towards the south. He then takes a right turn, drives 8 km, turns right and drives 15 km. He then takes a right turn and drives 12 km. He takes a final right turn, drives 4 km and stops at point P. How far (shortest distance) and towards which direction should he drive in order to reach point A again? (All turns are 90-degree turns only unless specified.)

- A)** 4 km to the west   **B)** 3 km to the west   **C)** 3 km to the east   **D)** 4 km to the east

Date: 14/06/2025   Time: 12:45 PM - 2:15 PM   Right: 78.70%   Wrong: 13.79%

**Q60)** Prabin starts from Point A and drives 12 km towards the west. He then takes a right turn, drives 8 km, turns right and drives 14 km. He then takes a right turn and drives 12 km. He takes a final right turn, drives 2 km and stops at Point P. How far (shortest distance) and towards which direction should he drive in order to reach Point A again? (All turns are 90 degrees turns only unless specified.)

- A)** 5 km to the north   **B)** 3 km to the north   **C)** 4 km to the south   **D)** 4 km to the north

Date: 09/06/2025   Time: 4:30 PM - 6:00 PM   Right: 79.76%   Wrong: 12.40%

**Q61)** Chetan starts from Point Y and drives 37 km towards the south. He then takes a right turn, drives 18 km, turns right and drives 58 km. He then takes a left turn and drives 61 km. He takes a left turn, drives 21 km and stops at Point Z. How far (shortest distance) and towards which direction should he drive in order to reach Point Y again? (All turns are 90-degree turns only unless specified.)

- A)** 39 km towards the south   **B)** 64 km towards the west   **C)** 43 km towards the west

- D)** 79 km towards the east

Date: 17/06/2025   Time: 4:30 PM - 6:00 PM   Right: 79.80%   Wrong: 7.95%

**Q62)** Mr. Helux starts from Point A and drives 18 km towards the West. He then takes a left turn, drives 6 km, turns right and drives 21 km. He then takes a right turn and drives 18 km. He takes a final right turn, drives 39 km and stops at Point P. How far (shortest distance) and towards which direction should he drive in order to reach Point A again? (All turns are 90 degrees turns only unless specified.)

- A)** 12 km to the South   **B)** 16 km to the East   **C)** 19 km to the North   **D)** 10 km to the West

Date: 21/06/2025   Time: 12:45 PM - 2:15 PM   Right: 80.18%   Wrong: 8.63%

**Q63)** Vinod starts from point A and drives 8 km towards the west. He then takes a left turn, drives 6 km, turns left and drives 12 km. He then takes a left turn and drives 11 km. He takes a final left turn, drives 4 km and stops at point P. How far (shortest distance) and towards which direction should he drive in order to reach point A again? (All turns are 90-degree turns only unless specified.)

- A)** 5 km to the south   **B)** 6 km to the south   **C)** 5 km to the north   **D)** 6 km to the north

Date: 16/06/2025   Time: 9:00 AM - 10:30 AM   Right: 80.64%   Wrong: 14.04%

**Q64)** Radhe starts from Point A and drives 8 km towards North. He then takes a left turn, drives 9 km, turns left and drives 12 km. He then takes a left turn and drives 11 km. He takes a final left turn, drives 4 km and stops at Point P. How far (shortest distance) and towards which direction should he drive in order to reach Point A again? (All turns are 90° turns only unless specified)

**A)** 3 km to the west **B)** 2 km to the west **C)** 4 km to the west **D)** 1 km to the west

Date: 13/06/2025 Time: 4:30 PM - 6:00 PM Right: 81.06% Wrong: 11.62%

**Q65)** Mr. Becks starts from Point A and drives 9 km towards the East. He then takes a right turn, drives 16 km, turns right and drives 28 km. He then takes a right turn and drives 21 km. He takes a final right turn, drives 19 km and stops at Point P. How far (shortest distance) and towards which direction should he drive in order to reach Point A again? (All turns are 90 degrees turns only unless specified.)

**A)** 5 km to the South **B)** 3 km to the North **C)** 7 km to the South **D)** 1 km to the North

Date: 19/06/2025 Time: 4:30 PM - 6:00 PM Right: 81.09% Wrong: 7.17%

**Q66)** Mukesh starts from point A and drives 9 km towards the north. He then takes a right turn, drives 7 km, turns right and drives 10 km. He then takes a right turn and drives 8 km. He takes a final right turn, drives 1 km and stops at point P. How far (shortest distance) and towards which direction should he drive in order to reach point A again? (All turns are 90 degree turns only unless specified.)

**A)** 2 km to the east **B)** 1 km to the east **C)** 2 km to the west **D)** 1 km to the west

Date: 13/06/2025 Time: 4:30 PM - 6:00 PM Right: 81.40% Wrong: 11.43%

**Q67)** Mr. I starts from Point M and drives 1 km towards the south. He then takes a right turn, drives 3 km, turns left and drives 3 km. He then takes a left turn and drives 4 km. He takes a final left turn, drives 4 km and stops at Point N. How far (shortest distance) and towards which direction should he drive in order to reach Point M again? (All turns are 90-degree turns only unless specified.)

**A)** 1 km towards the west **B)** 2 km towards the south **C)** 4 km towards the east

**D)** 4 km towards the north

Date: 20/06/2025 Time: 12:45 PM - 2:15 PM Right: 81.49% Wrong: 9.64%

**Q68)** Mr. STU starts from Point A and drives 33 km towards the east. He then takes a left turn, drives 21 km, turns left and drives 41 km. He then takes a left turn and drives 41 km. He takes a final left turn, drives 8 km and stops at Point P. How far (shortest distance) and in which direction should he drive in order to reach Point A again? (All turns are 90-degree turns only unless specified)

**A)** 20 km to the north **B)** 17 km to the north **C)** 12 km to the south **D)** 13 km to the east

Date: 23/06/2025 Time: 12:45 PM - 2:15 PM Right: 81.55% Wrong: 7.62%

**Q69)** Mr. Filix starts from Point A and drives 19 km towards the South. He then takes a left turn, drives 5 km, turns left and drives 33 km. He then takes a left turn and drives 9 km. He takes a final left turn, drives 14 km and stops at Point P. How far (shortest distance) and towards which direction should he drive in order to reach Point A again? (All turns are 90 degrees turns only unless specified.)

**A)** 1 km to the West **B)** 8 km to the North **C)** 4 km to the East **D)** 2 km to the South

Date: 19/06/2025 Time: 12:45 PM - 2:15 PM Right: 81.59% Wrong: 5.92%

**Q70)** Mr. XYZ starts from Point A and drives 15 km towards the west. He then takes a left turn, drives 11 km, turns left and drives 19 km. He then takes a left turn and drives 16 km. He takes a final left turn, drives 4 km and stops at Point P. How far (shortest distance) and in which direction should he drive in order to reach Point A again? (All turns are 90-degree turns only unless specified)

**A)** 5 km to the west **B)** 5 km to the south **C)** 3 km to the east **D)** 3 km to the north

Date: 23/06/2025 Time: 4:30 PM - 6:00 PM Right: 81.83% Wrong: 8.93%

**Q71)** Virat starts from point A and drives 7 km towards the south. He then takes a left turn, drives 5 km, turns left and drives 9 km. He then takes a left turn and drives 12 km. He takes a final left turn, drives 2 km and stops at point P. How far (shortest distance) and towards which direction should he drive in order to reach point A again? (All turns are 90-degree turns only unless specified.)

**A)** 7 km to the west **B)** 6 km to the east **C)** 7 km to the east **D)** 6 km to the west

Date: 14/06/2025 Time: 9:00 AM - 10:30 AM Right: 82.11% Wrong: 11.16%

**Q72)** Mr. Z starts from Point Y and drives 12 km towards the north. He then takes a left turn, drives 2 km, turns right and drives 1 km. He then takes a left turn and drives 14 km. He takes a final left turn, drives 13 km and stops at Point X. How far (shortest distance) and towards which direction should he drive in order to reach Point Y again? (All turns are 90-degree turns only unless specified.)

**A)** 14 km towards the west **B)** 13 km towards the north **C)** 11 km towards the south

**D)** 16 km towards the east

Date: 19/06/2025 Time: 4:30 PM - 6:00 PM Right: 82.15% Wrong: 6.87%

**Q73)** Mr. IJK starts from Point A and drives 23 km towards the south. He then takes a right turn, drives 3 km, turns right and drives 27 km. He then takes a right turn and drives 7 km. He takes a final right turn, drives 4 km and stops at Point P. How far (shortest distance) and in which direction should he drive in order to reach Point A again? (All turns are 90-degree turns only unless specified)

**A)** 2 km to the east **B)** 4 km to the west **C)** 1 km to the north **D)** 3 km to the south

Date: 21/06/2025 Time: 9:00 AM - 10:30 AM Right: 82.26% Wrong: 6.42%

**Q74)** Mr. X starts from Point L and drives 5 km towards the east. He then takes a right turn, drives 6 km, turns right and drives 9 km. He then takes a right turn and drives 2 km, turns left, drives 4 km. He takes a final right turn, drives 4 km and stops at Point O. How far (shortest distance) and towards which direction should he drive in order to reach Point L again? (All turns are 90-degree turns only unless specified.)

- A)** 8 km towards the east   **B)** 2 km towards the north   **C)** 7 km towards the west  
**D)** 2 km towards the south

Date: 21/06/2025   Time: 4:30 PM - 6:00 PM   Right: 82.49%   Wrong: 8.07%

**Q75)** Mr. GHI starts from Point A and drives 16 km towards the east. He then takes a right turn, drives 18 km, turns right and drives 26 km. He then takes a right turn and drives 26 km. He takes a final right turn, drives 10 km and stops at Point P. How far (shortest distance) and in which direction should he drive in order to reach Point A again? (All turns are 90-degree turns only unless specified)

- A)** 8 km to the south   **B)** 4 km to the west   **C)** 6 km to the west   **D)** 5 km to the south

Date: 23/06/2025   Time: 9:00 AM - 10:30 AM   Right: 82.93%   Wrong: 5.28%

**Q76)** Mr. Y starts from Point B and drives 1 km towards the south. He then takes a left turn, drives 9 km, turns right and drives 2 km. He then takes a left turn and drives 13 km. He takes a final left turn, drives 3 km and stops at Point A. How far (shortest distance) and towards which direction should he drive in order to reach Point B again? (All turns are 90-degree turns only unless specified.)

- A)** 18 km towards the east   **B)** 9 km towards the south   **C)** 1 km towards the north  
**D)** 22 km towards the west

Date: 20/06/2025   Time: 4:30 PM - 6:00 PM   Right: 83.17%   Wrong: 7.11%

**Q77)** Mr. OPQ starts from Point A and drives 31 km towards the north. He then takes a left turn, drives 11 km, turns left and drives 51 km. He then takes a left turn and drives 16 km. He takes a final left turn, drives 20 km and stops at Point P. How far (shortest distance) and in which direction should he drive in order to reach Point A again? (All turns are 90-degree turns only unless specified)

- A)** 5 km to the west   **B)** 3 km to the south   **C)** 9 km to the east   **D)** 4 km to the north

Date: 20/06/2025   Time: 4:30 PM - 6:00 PM   Right: 83.36%   Wrong: 6.56%

**Q78)** Mr. KLM starts from Point A and drives 21 km towards the south. He then takes a left turn, drives 7 km, turns left and drives 26 km. He then takes a left turn and drives 11 km. He takes a final left turn, drives 5 km and stops at Point P. How far (shortest distance) and in which direction should he drive in order to reach Point A again? (All turns are 90-degree turns only unless specified)

- A)** 4 km to the east   **B)** 3 km to the west   **C)** 7 km to the east   **D)** 5 km to the west

Date: 20/06/2025   Time: 12:45 PM - 2:15 PM   Right: 83.45%   Wrong: 7.18%

**Q79)** Mr. Q starts from Point Z and drives 7 km towards the north. He then takes a left turn, drives 9 km, turns right and drives 6 km. He then takes a left turn and drives 7 km. He takes a final left turn, drives 13 km and stops at Point A. How far (shortest distance) and towards which direction should he drive in order to reach Point Z again? (All turns are 90 degree turns only unless specified.)

- A)** 11 km towards the south   **B)** 14 km towards the west   **C)** 16 km towards the east   **D)** 13 km towards the north

Date: 10/06/2025   Time: 4:30 PM - 6:00 PM   Right: 83.64%   Wrong: 6.29%

**Q80)** Mr. Plex starts from Point A and drives 22 km towards the East. He then takes a left turn, drives 31 km, turns left and drives 26 km. He then takes a left turn and drives 41 km. He takes a final left turn, drives 4 km and stops at Point P. How far (shortest distance) and towards which direction should he drive in order to reach Point A again? (All turns are 90 degrees turns only unless specified.)

- A)** 18 km to the West   **B)** 21 km to the West   **C)** 13 km to the South   **D)** 10 km to the North

Date: 20/06/2025   Time: 9:00 AM - 10:30 AM   Right: 83.66%   Wrong: 5.16%

**Q81)** T starts from Point A and drives 6 km towards the North. He then takes a right turn, drives 15 km, turns right and drives 9 km. He then takes a right turn and drives 19 km. He takes a final right turn, drives 3 km and stops at Point P. How far (shortest distance) and towards which direction should he drive in order to reach Point A again? (All turns are 90 degrees turns only unless specified)

- A)** 2 km to the East   **B)** 4 km to the East   **C)** 6 km to the North   **D)** 8 km to the North

Date: 19/06/2025   Time: 9:00 AM - 10:30 AM   Right: 83.77%   Wrong: 6.26%

**Q82)** Barun starts from Point A and drives 8 km towards West. He then takes a left turn, drives 9 km, turns left and drives 12 km. He then takes a left turn and drives 13 km. He takes a final left turn, drives 4 km and stops at Point P. How far (shortest distance) and towards which direction should he drive in order to reach Point A again? (All turns are 90° turns only, unless specified.)

- A)** 3 km to the south   **B)** 5 km to the south   **C)** 4 km to the south   **D)** 2 km to the south

Date: 16/06/2025   Time: 4:30 PM - 6:00 PM   Right: 83.81%   Wrong: 7.60%

**Q83)** Arpan starts from Point A and drives 12 km towards East. He then takes a right turn, drives 8 km, turns right and drives 14 km. He then takes a right turn and drives 12 km. He takes a final right turn, drives 2 km and stops at Point P. How far (shortest distance) and towards which direction should he drive in order to reach Point A again? (All turns are 90° turns only, unless specified)

- A)** 4 km to the south   **B)** 3 km to the south   **C)** 2 km to the south   **D)** 1 km to the south

Date: 14/06/2025   Time: 12:45 PM - 2:15 PM   Right: 83.87%   Wrong: 8.56%

**Q84)** Bikash starts from Point A and drives 12 km towards East. He then takes a left turn, drives 9 km, turns left and drives 13 km. He then takes a left turn and drives 12 km. He takes a final left turn, drives 1 km and stops at Point P. How far (shortest distance) and towards which direction should he drive in order to reach Point A again? (All turns are  $90^\circ$  turns only, unless specified)

**A)** 2 km to the north **B)** 4 km to the north **C)** 1 km to the north **D)** 3 km to the north

Date: 14/06/2025 Time: 9:00 AM - 10:30 AM Right: 84.21% Wrong: 9.32%

**Q85)** Sachdev starts from Point A and drives 11 km towards West. He then takes a right turn, drives 9 km, turns right and drives 13 km. He then takes a right turn and drives 14 km. He takes a final right turn, drives 2 km and stops at Point P. How far (shortest distance) and towards which direction should he drive in order to reach Point A again? (All turns are  $90^\circ$  turns only, unless specified.)

**A)** 6 km to the north **B)** 5 km to the north **C)** 4 km to the north **D)** 7 km to the north

Date: 16/06/2025 Time: 12:45 PM - 2:15 PM Right: 84.26% Wrong: 7.63%

**Q86)** Mr. J starts from Point U and drives 2 km towards the North. He then takes a right turn, drives 9 km, turns right and drives 3 km. He then takes a right turn and drives 16 km. He then takes a final right turn, drives 1 km and stops at Point P. How far (shortest distance) and towards which direction should he drive in order to reach Point U again? (All turns are 90 degrees turns only unless specified.)

**A)** 4 km towards the South **B)** 7 km towards the East **C)** 11 km towards the North

**D)** 4 km towards the West

Date: 23/06/2025 Time: 4:30 PM - 6:00 PM Right: 84.49% Wrong: 5.11%

**Q87)** Rituraj starts from Point A and drives 11 km towards South. He then takes a right turn, drives 9 km, turns right and drives 12 km. He then takes a right turn and drives 12 km. He takes a final right turn, drives 1 km and stops at Point P. How far (shortest distance) and towards which direction should he drive in order to reach Point A again? (All turns are  $90^\circ$  turns only, unless specified)

**A)** 3 km to the west **B)** 1 km to the west **C)** 4 km to the west **D)** 2 km to the west

Date: 13/06/2025 Time: 9:00 AM - 10:30 AM Right: 84.80% Wrong: 8.88%

**Q88)** Raghav starts from Point A and drives 8 km towards South. He then takes a left turn, drives 6 km, turns left and drives 11 km. He then takes a left turn and drives 12 km. He takes a final left turn, drives 3 km and stops at Point P. How far (shortest distance) and towards which direction should he drive in order to reach Point A again? (All turns are  $90^\circ$  turns only, unless specified)

**A)** 4 km to the east **B)** 5 km to the east **C)** 6 km to the east **D)** 3 km to the east

Date: 13/06/2025 Time: 12:45 PM - 2:15 PM Right: 85.09% Wrong: 7.75%

**Q89)** Anuj starts from Point A and drives 12 km towards East. He then takes a right turn, drives 8 km, turns right and drives 14 km. He then takes a right turn and drives 11 km. He takes a final right turn, drives 2 km and stops at Point P. How far (shortest distance) and towards which direction should he drive in order to reach Point A again? (All turns are  $90^\circ$  turns only, unless specified.)

**A)** 2 km to the south **B)** 4 km to the south **C)** 1 km to the south **D)** 3 km to the south

Date: 16/06/2025 Time: 9:00 AM - 10:30 AM Right: 85.29% Wrong: 8.90%

**Q90)** Rishi starts from Point A and drives 8 km towards North. He then takes a left turn, drives 9 km, turns left and drives 12 km. He then takes a left turn and drives 13 km. He takes a final left turn, drives 4 km and stops at Point P. How far (shortest distance) and towards which direction should he drive in order to reach Point A again? (All turns are  $90^\circ$  turns only, unless specified.)

**A)** 5 km to the west **B)** 6 km to the west **C)** 3 km to the west **D)** 4 km to the west

Date: 17/06/2025 Time: 9:00 AM - 10:30 AM Right: 85.92% Wrong: 5.96%

**Q91)** Mr. K starts from Point Z and drives 6 km towards the north. He then takes a right turn, drives 3 km, turns right and drives 11 km. He then takes a right turn and drives 10 km. He then takes a final right turn, drives 5 km and stops at Point B. How far (shortest distance) and towards which direction should he drive in order to reach Point Z again? (All turns are 90 degree turns only unless specified.)

**A)** 4 km towards the south **B)** 4 km towards the west **C)** 11 km towards the north **D)** 7 km towards the east

Date: 13/06/2025 Time: 12:45 PM - 2:15 PM Right: 86.07% Wrong: 5.61%

**Q92)** Mr. PQR starts from Point A and drives 9 km towards the north. He then takes a right turn, drives 11 km, turns right and drives 17 km. He then takes a right turn and drives 12 km. He takes a final right turn, drives 8 km and stops at Point P. How far (shortest distance) and in which direction should he drive in order to reach Point A again? (All turns are 90-degree turns only unless specified)

**A)** 5 km to the west **B)** 7 km to the east **C)** 1 km to the east **D)** 3 km to the west

Date: 21/06/2025 Time: 4:30 PM - 6:00 PM Right: 86.12% Wrong: 5.26%

**Q93)** Shaan starts from Point A and drives 6 km towards North. He then takes a right turn, drives 7 km, turns right and drives 12 km. He then takes a right turn and drives 8 km. He takes a final right turn, drives 6 km and stops at Point P. How far (shortest distance) and towards which direction should he drive in order to reach Point A again? (All turns are  $90^\circ$  turns only unless specified)

**A)** 2 km to the east **B)** 3 km to the east **C)** 4 km to the east **D)** 1 km to the east

Date: 12/06/2025 Time: 4:30 PM - 6:00 PM Right: 86.52% Wrong: 7.63%

**Q94)** Tanveer starts from Point B and drives 2 km towards west. He then takes a right turn, drives 4 km, turns left and drives 5 km. He then takes a right turn and drives 3 km. He takes a final right turn, drives 7 km and stops at Point P. How far (shortest distance) and towards which direction should he drive in order to reach Point B again (all turns are 90° turns only unless specified)?

**A)** 5 km south **B)** 7 km south **C)** 6 km south **D)** 4 km south

Date: 06/06/2025 Time: 12:45 PM - 2:15 PM Right: 87.92% Wrong: 4.82%

### Answer Key (Q1 to Q94) Distance & Direction

Q1: 3	Q2: 3	Q3: 2	Q4: 4	Q5: 4
Q6: 4	Q7: 4	Q8: 1	Q9: 2	Q10: 3
Q11: 3	Q12: 3	Q13: 2	Q14: 4	Q15: 4
Q16: 1	Q17: 3	Q18: 1	Q19: 3	Q20: 2
Q21: 3	Q22: 1	Q23: 4	Q24: 1	Q25: 3
Q26: 2	Q27: 1	Q28: 1	Q29: 3	Q30: 3
Q31: 2	Q32: 3	Q33: 2	Q34: 2	Q35: 1
Q36: 4	Q37: 4	Q38: 3	Q39: 4	Q40: 3
Q41: 4	Q42: 4	Q43: 1	Q44: 3	Q45: 1
Q46: 3	Q47: 3	Q48: 2	Q49: 3	Q50: 1
Q51: 4	Q52: 3	Q53: 4	Q54: 4	Q55: 2
Q56: 4	Q57: 2	Q58: 2	Q59: 1	Q60: 4
Q61: 4	Q62: 1	Q63: 1	Q64: 2	Q65: 1
Q66: 2	Q67: 1	Q68: 1	Q69: 3	Q70: 2
Q71: 3	Q72: 4	Q73: 2	Q74: 1	Q75: 1
Q76: 4	Q77: 1	Q78: 1	Q79: 3	Q80: 4
Q81: 2	Q82: 3	Q83: 1	Q84: 4	Q85: 2
Q86: 2	Q87: 1	Q88: 3	Q89: 4	Q90: 4
Q91: 4	Q92: 3	Q93: 4	Q94: 2	

### Coding-Decoding

Q1) A group of numbers and symbols is coded using letter codes as per the codes given below and the conditions that follow. Study the given codes and conditions and answer the question that follows.

Note: If none of the conditions apply, then codes for the respective number/symbol to be followed directly as given in the table.

Number/Symbol	3	#	8	\$	7	&	6	*	4	^	2	@	9	+
Code	B	S	D	F	G	H	J	K	L	P	R	C	U	Y

**Conditions:**

- If the first element is a symbol and the last a number, the codes for these two (the first and the last elements) are to be interchanged.
- If the first element is an odd number and the last an even number, the first and last elements are to be coded as ©.
- If both the second and third elements are perfect squares, then the code of the second element will be the code for the third element.

What will be the code for the following group?

849@

- A) DLUC B) CLUD C) DULC D) DLLC

Date: 19/06/2025 Time: 9:00 AM - 10:30 AM Right: 29.06% Wrong: 56.82%

Q2) In a certain code language 'QBOE' is coded as '76' and 'DWIJ' is coded as '69'. What is the code for 'YAPC' in the given language?

- A) 74 B) 69 C) 72 D) 70

Date: 11/06/2025 Time: 4:30 PM - 6:00 PM Right: 29.31% Wrong: 17.47%



**ADITYA RANJAN**  
(MATHS EXPERT)

**ALL EXAMS**

# MATHS SPECIAL

## LIVE + VOD BATCH

### PRE + MAINS

(Arithmetic + Advance)

For ALL Exam

VALIDITY - LIFETIME

- ✓ SMART APPROACH
- ✓ UPDATED SHEETS
- ✓ PDF (BILINGUAL)
- ✓ CLASS NOTES (BILINGUAL)
- ✓ PRACTICE SHEET WITH SOLUTIONS
- ✓ SECTIONAL MOCK TEST

DOWNLOAD

RG VIKRAMJEET APP

GET IT ON  
Google Play

ENQUIRY NUMBER

8506003399



Fees  
699/-

Q3) In this question, a group of number/symbol is coded using letter codes as per the codes given below and the conditions which follow. The correct combination of codes following the conditions is your answer.

Note: If none of the conditions apply, then codes for the respective number/symbol are to be followed directly as given in the table.

Number/ symbol	8	6	*	%	9	&	3	+	@	5	\$	7	4
Code	W	C	E	J	F	A	D	Q	G	P	R	B	U

**Conditions:**

- (I) If the first element is a number and the last a symbol, the codes for these two (the first and the last elements) are to be interchanged.
- (II) If the first element is an odd number and the last an even number, the first and last elements are to be coded as ©.
- (III) If the third element is a perfect cube, the second element is to be coded as the code for the third element.

What will %987 be coded as?

- A) JFWB   B) JWFB   C) JWWB   D) BFWJ

Date: 24/06/2025

Time: 12:45 PM - 2:15 PM

Right: 34.61%

Wrong: 47.65%



Q4) A group of numbers and symbols is coded using letter codes as per the codes given below and the conditions that follow. Study the given codes and conditions and answer the question that follows.

Note: If none of the conditions apply, then codes for the respective number/symbol are to be followed directly as given in the table.

Number/symbol	5	2	3	4	\$	&	6	@	#	%	+	8	9	7
Code	A	D	F	G	H	J	K	L	Z	X	C	V	B	M

**Conditions:**

- If the first element is a symbol and the last a number, the codes for these two (the first and the last elements) are to be interchanged.
- If the first element is an odd number and the last an even number, the first and last elements are to be coded as ©.
- If both second and third elements are perfect squares, the third element is to be coded as the code for the second element.

What will be the code for the following group?

3 4 9 7

- A) MGBF   B) FGBM   C) FGGM   D) FBBM

Date: 19/06/2025   Time: 12:45 PM - 2:15 PM   Right: 41.24%   Wrong: 36.05%

Q5) A group of numbers and symbols is coded using letter codes as per the codes given below and the conditions that follow. Study the given codes and conditions and answer the question that follows.

Note: If none of the conditions apply, then codes for the respective number/symbol are to be followed directly as given in the table.

Number/symbol	5	\$	7	2	%	*	3	^	#	9	+	6	8	4
Code	A	F	L	B	G	M	C	H	N	D	J	P	E	K

**Conditions:**

- If the first element is a number and the last a symbol, the codes for these two (the first and the last elements) are to be interchanged.
- If the first and last elements are odd numbers, then the first and last elements are to be coded as @.
- If both the second and third elements are perfect square roots, then the third element is to be coded as the code for the second element.

What will be the code for \$94^8?

- A) FDKHE   B) EDKHF   C) FDDHE   D) FKKHE

Date: 20/06/2025   Time: 4:30 PM - 6:00 PM   Right: 45.36%   Wrong: 37.60%

Q6) A group of numbers and symbols is coded using letter codes as per the codes given below and the conditions that follow. Study the given codes and conditions and answer the question that follows.

Note: If none of the conditions apply, then codes for the respective number/symbol are to be followed directly as given in the table.

<b>Number/symbol</b>	9	%	2	5	*	\$	3	^	#	4	+	6	7	8
<b>Code</b>	S	G	L	F	B	M	C	H	N	D	J	P	E	K

**Conditions:**

- If the first element is a symbol and the last a number, the codes for these two (the first and the last elements) are to be interchanged.
- If the first element is an odd number and the last element is an even number, then the first and last elements are to be coded as @.
- If both the second and third elements are divisible by 2, the third element is to be coded as the code for the second element.

What will be the code for 768\*%?

- A) EPPBG   B) GPKBE   C) EPKBG   D) EKKBG

Date: 20/06/2025   Time: 4:30 PM - 6:00 PM   Right: 47.81%   Wrong: 35.06%

Q7) TN 14 is related to PK 29 in a certain way. In the same way, JD 3 is related to FA 18. To which of the given options is SG -5 related, following the same logic?

- A) OC 8   B) OC 10   C) OD 10   D) OD 8

Date: 18/06/2025   Time: 12:45 PM - 2:15 PM   Right: 49.07%   Wrong: 16.74%

**Q8)** A group of numbers and symbols is coded using letter codes as per the codes given below and the conditions that follow. Study the given codes and conditions and answer the question that follows.

Note: If none of the conditions apply, then codes for the respective number/symbol are to be followed directly as given in the table.

Number/symbol	4	@	7	#	3	&	8	*	2	^	9	\$	6	+
Code	H	A	J	B	K	C	L	D	M	E	N	F	P	G

**Conditions:**

If the first element is a number and the last a symbol, the codes for these two (the first and the last elements) are to be interchanged.

If the first element is an even number and the last an odd number, the first and last elements are to be coded as 'I'.

If both second and third elements are perfect squares, the code of the third element will be the code for the second element.

What will be the code for the following group?

4739

- A)** JK( **B)** KJ( **C)** HKJN **D)** HJKN

Date: 05/06/2025 Time: 4:30 PM - 6:00 PM Right: 49.60% Wrong: 27.10%

**Q9)** A group of numbers/symbols is coded using letter codes as per the codes given below and the conditions that follow. If none of the conditions apply, then codes for the respective number/symbol to be followed directly as given in the table.

Number/Symbol	3	8	@	&	2	7	5	%	1	9	Δ	4	6
Code	L	E	Z	M	D	W	A	P	R	T	F	B	K

**Conditions:**

(i) If the first element and the last element is a number, the codes for these two (the first and the last elements) are to be interchanged.

(ii) If the first element is an odd number and the last an even number, the first and last elements are to be coded as ©.

(iii) If both the second and third elements are perfect squares, the third element is to be coded as the code for the second element.

What will be the code for the following group?

7 2 Δ 8 9 @ 3

- A)** W D F L T Z W **B)** W D F E T Z L **C)** L D F E Z T W **D)** L D F E T Z W

Date: 09/06/2025 Time: 12:45 PM - 2:15 PM Right: 50.26% Wrong: 28.68%

**Q10)** A group of numbers and symbols is coded using letter codes as per the codes given below and the conditions that follow. Study the given codes and conditions and answer the question that follows.

Note: If none of the conditions apply, then codes for the respective number/symbol are to be followed directly as given in the table.

<b>Number/symbol</b>	6	%	8	5	\$	&	3	@	#	7	+	4	9	6
<b>Code</b>	S	E	A	J	L	F	W	Q	D	P	R	B	U	T

**Conditions:**

- If the first element is a symbol and the last a number, the codes for these two (the first and the last elements) are to be interchanged.
- If the first element is an odd number and the last an even number, the first and last elements are to be coded as ©.
- If both second and third elements are perfect squares, the third element is to be coded as the code for the second element.

What will be the code for the following group?

@ 4 8 5

- A) JBAQ B) QBAJ C) QAAJ D) QBBJ**

Date: 16/06/2025 Time: 12:45 PM - 2:15 PM Right: 53.20% Wrong: 19.80%

**Q11)** UB 15 is related to SF 11 in a certain way. In the same way, IO 8 is related to GS 4. To which of the given options is EL 3 related, following the same logic?

- A) CP -1 B) ED -5 C) RD -7 D) BD -9**

Date: 10/06/2025 Time: 9:00 AM - 10:30 AM Right: 53.96% Wrong: 7.92%

**Q12)** In this question, a group of number/symbol is coded using letter codes as per the codes given below and the conditions which follow. The correct combination of codes (following only the condition/s that applies) is your answer.

Note: If none of the conditions apply, then codes for the respective number/symbol are to be followed directly as given in the table.

Number/symbol	R	E	A	U	M	D	F	P	Q	I	O	H	N	W	Z	B
Code	#	7	6	\$	8	%	*	5	9	4	©	@	d	3	2	1

**Conditions:**

- If the first element is a consonant and the third is a vowel, the codes for these two (the first and the third elements) are to be interchanged.
- If the first element is vowel and the fourth letter is a consonant, the first and fourth elements are to be coded as the code for the vowel.
- If the second and third elements the consonants, both are to be coded as the code for the third element.

Based on the above instructions, what would be the code for 'OBAHMQ'?

- A)** ©16@87   **B)** @\$6@89   **C)** @16@89   **D)** ©16©89

Date: 23/06/2025   Time: 4:30 PM - 6:00 PM   Right: 55.08%   Wrong: 20.90%

**Q13)** TK 14 is related to YH 5 in a certain way. In the same way, MN 5 is related to RK -4. To which of the given options is SV 0 related, following the same logic?

- A)** WV -7   **B)** PR -13   **C)** XT -11   **D)** XS -9

Date: 10/06/2025   Time: 4:30 PM - 6:00 PM   Right: 55.13%   Wrong: 6.11%

**Q14)** In this question, a group of number/symbol is coded using letter codes as per the codes given below and the conditions which follow.

The correct combination of codes (following only the condition/s that apply) is your answer.

Number/Symbol	7	9	@	&	2	3	5	#	1	8	Δ	4	6
Code	L	C	Z	M	D	W	A	P	R	T	F	B	K

Conditions:

- (i) If the first element is a symbol and the last a number, the codes for these two (the first and the last elements) are to be interchanged.
- (ii) If the first element is an even number and the last an odd number, the first and last elements are to be coded as ©
- (iii) If both the second and third elements are perfect squares, the third element is to be coded as the code for the second element.

2 # @ 7 9

**A) DPZL© B) ©PLZC C) ©PZLC D) ©PZL©**

Date: 05/06/2025 Time: 12:45 PM - 2:15 PM Right: 55.61% Wrong: 11.73%

**Q15)** A group of numbers/symbols is coded using letter codes as per the codes given below and the conditions that follow. If none of the conditions apply, then codes for the respective number/symbol to be followed directly as given in the table.

Number/Symbol	3	9	7	&	2	@	5	%	1	8	Δ	4	6
Code	L	C	Z	M	D	W	A	P	R	T	F	B	K

Conditions:

- (i) If the first element is a symbol and the last a number, the codes for these two (the first and the last elements) are to be interchanged.
- (ii) If the first element is an odd number and the last an even number, the first and last elements are to be coded as ©.
- (iii) If both the second and third elements are perfect squares, the third element is to be coded as the code for the second element.

What will be the code for the following group?

@ 9 7 8 3

**A) LCZTW B) TCBLW C) WTCBL D) LCTBW**

Date: 06/06/2025 Time: 9:00 AM - 10:30 AM Right: 56.02% Wrong: 11.88%

**Q16)** A group of numbers and symbols is coded using letter codes as per the codes given below and the conditions that follow. Study the given codes and conditions and answer the question that follows.

Note: If none of the conditions apply, then codes for the respective number/symbol are to be followed directly as given in the table.

<b>Number/symbol</b>	7	%	2	5	*	\$	3	^	#	4	+	6	9	8
<b>Code</b>	U	G	L	F	B	M	C	H	N	D	J	P	E	K

**Conditions:**

- I) If the first element is a symbol and the last a number, then the codes for these two (the first and the last elements) are to be interchanged.
- II) If the first element is an odd number and the last element is an even number, then the first and last elements are to be coded as @.
- III) If both the second and third elements are perfect square roots, the third element is to be coded as the code for the second element.

What will be the code for 536+8?

- A)** @CPJ@ **B)** @PCJ@ **C)** FCPJK **D)** KCPJF

Date: 21/06/2025 Time: 12:45 PM - 2:15 PM Right: 56.27% Wrong: 24.21%

**Q17)** GG 12 is related to CB 29 in a certain way. In the same way, IK 2 is related to EF 19. To which of the following is RN -6 related, following the same logic?

- A)** MI 6 **B)** NH 11 **C)** NI 11 **D)** MH 6

Date: 24/06/2025 Time: 4:30 PM - 6:00 PM Right: 56.38% Wrong: 7.63%

**Q18)** In this question, a group of numbers/symbols are coded using letter codes as per the codes given below and the conditions that follow. The correct combination of codes (following only the condition/s that apply) is your answer.

Note: If none of the conditions apply, then codes for the respective number/symbol are to be followed directly as given in the table.

<b>Number/symbol</b>	4	#	\$	7	9	2	6	@	3	&	5	+	%	8
<b>Code</b>	B	W	Q	C	A	T	J	N	P	D	G	E	Y	S

**Conditions:**

- (i) If the first element is a number and the last element is a symbol, then the codes for the first and last element are interchanged.
- (ii) If the first element is divisible by 2 and the last element is divisible by 3, then the first and last elements are to be coded \*.
- (iii) If the first element is a symbol and the last element is an even number, then their codes (i.e. first and last element) are to be changed to the code for 3.

What is the code for the following?

@&238

- A)** NDTPS   **B)** NDTPP   **C)** PDTPP   **D)** PDTPS

Date: 21/06/2025   Time: 4:30 PM - 6:00 PM   Right: 56.39%   Wrong: 20.81%

**Q19)** A group of numbers and symbols is coded using letter codes as per the codes given below and the conditions that follow. Study the given codes and conditions and answer the question that follows.

Note: If none of the conditions apply, then codes for the respective number/symbol are to be followed directly as given in the table.

<b>Number/Symbols</b>	4	@	7	#	3	&	8	*	2	^	9	\$	6	+
<b>Code</b>	H	A	J	B	K	C	L	D	M	E	N	F	P	G

**Conditions:**

- If the first element is a number and the last a symbol, the codes for these two (the first and the last elements) are to be interchanged.
- If the first element is an even number and the last an odd number, the first and last elements are to be coded as .
- If both the second and third elements are perfect cubes, then the code of the second element will be the code of the third element.

What will be the code for the following group?

348@

- A) KHLA B) KLHA C) ALHK D) AHLK**

Date: 19/06/2025

Time: 4:30 PM - 6:00 PM

Right: 56.41%

Wrong: 25.26%

**Q20)** A group of numbers and symbols is coded using letter codes as per the codes given below and the conditions that follow. Study the given codes and conditions and answer the question that follows.

Note: If none of the conditions apply, then codes for the respective number/symbol are to be followed directly as given in the table.

Number/symbol	*	2	5	7	\$	+	8	%	#	9	&	6	\$	4
Code	H	D	O	A	B	P	B	Q	Z	Y	R	B	U	F

**Conditions:**

- If the first element is a symbol and the last an odd number, the codes for these two (the first and the last elements) are to be interchanged.
- If the first element is an odd number and the last an even number, the first and last elements are to be coded as ©.
- If both second and third elements are perfect cubes, the third element is to be coded as the code for the second element.

What will be the code for the following group?

# 8 9 \$

- A) ZYYU B) UBYZ C) ZBBU D) ZBYU**

Date: 12/06/2025 Time: 9:00 AM - 10:30 AM Right: 56.62% Wrong: 18.10%

**Q21)** GV 14 is related to LS 5 in a certain way. In the same way, HQ 5 is related to MN -4. To which of the given options is MG 0 related, following the same logic?

- A) NY -6 B) RD -9 C) BG -7 D) HR -3**

Date: 06/06/2025 Time: 12:45 PM - 2:15 PM Right: 57.63% Wrong: 6.98%

**Q22)** A group of numbers and symbols is coded using letter codes as per the codes given below and the conditions that follow. Study the given codes and conditions and answer the question that follows.

Note: If none of the conditions apply, then codes for the respective number/symbol are to be followed directly as given in the table.

<b>Number/symbol</b>	6	÷	7	%	@	+	8	4	-	2	#	3	9	&
<b>Code</b>	P	E	S	H	W	Q	G	T	I	M	Z	A	V	R

**Conditions:**

If the first element is a prime number and the last element is an even number, then the codes for these two (first and last elements) are to be interchanged.

If the third element is a symbol, then it is to be coded as  $\alpha$ .

If both the second and the fourth elements are perfect numbers, then the fourth number is to be coded as the code for the second element.

What will be the code for the following group?

$$3 \div 7 @ 4$$

- A) AESWT**   **B) AESWA**   **C) TEAWA**   **D) TESWA**

Date: 23/06/2025

Time: 12:45 PM - 2:15 PM

Right: 57.83%

Wrong: 19.66%

**Q23)** A group of numbers and symbols is coded using letter codes as per the codes given below and the conditions that follow. Study the given codes and conditions and answer the question that follows.

Note: If none of the conditions apply, then codes for the respective number/symbol are to be followed directly as given in the table.

Number/Symbol	3	9	@	&	2	7	5	%	1	8	Δ	4	6
Code	L	C	Z	M	D	W	A	P	R	T	F	B	K

**Conditions:**

- (i) If the first element is a symbol and the last a number, the codes for these two (the first and the last elements) are to be interchanged.
- (ii) If the first element is an odd number and the last an even number, the first and last elements are to be coded as ©.
- (iii) If both second and third elements are perfect squares, the third element is to be coded as the code for the second element.

What will be the code for the following group?

@ 9 3 8 5

- A) ZCBTA B) ACBTZ C) ZBCTA D) ACLTZ**

Date: 05/06/2025 Time: 4:30 PM - 6:00 PM Right: 58.50% Wrong: 17.65%

English Medium **5000+**  
Chapter-Wise  
One-liner & MCQs.

## Railway General Science

**Physics | Chemistry  
Biology**

BASED ON LATEST PATTERN

- Complete Coverage of Previous exams
- Factual & Numerical Questions Included

**Useful for**  
RRB ALP, Technician, NTPC (CBT-1 & CBT-2), Group D, RPF SI & Constable, JE, other govt. exams.

**ADITYA RANJAN SIR**  
(Excise Inspector)

SELECTED हैं SELECTION दिलाएंगे

**5000+**  
चैप्टर-वाइज़  
One-liner & MCQs.

## रेलवे सामान्य विज्ञान

भौतिक विज्ञान | रसायन विज्ञान  
जीव विज्ञान

नवीनतम पैटर्न पर आधारित

- पूर्ववर्ती परीक्षाओं की सम्पूर्ण कवरेज
- तथ्यात्मक एवं संख्यात्मक प्रश्न एक साथ

**Useful for**  
RRB ALP, Technician, NTPC (CBT-1 & CBT-2), Group D, RPF SI & Constable, JE, other govt. exams.

**आदित्य रंजन सर**  
(Excise Inspector)

SELECTED हैं SELECTION दिलाएंगे

**Available Now!**

**Flipkart**  

**Q24)** A group of numbers and symbols is coded using letter codes as per the codes given below and the conditions that follow. Study the given codes and conditions and answer the question that follows.

Note: If none of the conditions apply, then codes for the respective number/symbol are to be followed directly as given in the table.

Number/Symbols	4	#	\$	7	9	2	6	@	3	&	5	+	%	8
Code	B	W	Q	C	A	T	J	N	P	D	G	E	Y	S

**Conditions:**

- (i) If the first element is a number and the last element is a symbol, then the codes for the first and last elements are to be interchanged.
- (ii) If the first element is divisible by 2 and the last element is divisible by 3, then the first and last elements are to be coded as \*
- (iii) If the first element is a symbol and the last element is an even number, then their codes (i.e. first and last element) are to be changed to the code for 3.

Identify the code for the following.

56#4+

- A) EJWBG B) GJWBG C) GJWBE D) EJGBE**

Date: 21/06/2025 Time: 9:00 AM - 10:30 AM Right: 58.65% Wrong: 22.56%

**Q25)** DG 24 is related to WT 20 in a certain way based on the English alphabetical order. In the same way, IL 18 is related to BY 14. To which of the following is QT 30 related, following the same logic?

- A) RU 26 B) JG 34 C) HF 28 D) JG 26**

Date: 12/06/2025 Time: 12:45 PM - 2:15 PM Right: 58.87% Wrong: 12.15%

**Q26)** A group of numbers and symbols is coded using letter codes as per the codes given below and the conditions that follow. Study the given codes and conditions and answer the question that follows.

Note: If none of the conditions apply, then codes for the respective number/symbol are to be followed directly as given in the table.

<b>Number/symbol</b>	9	7	6	-	8	@	#	+	2	%	÷	3	1	&
<b>Code</b>	C	R	J	Z	L	F	I	Y	Q	P	V	S	U	E

**Conditions:**

If the fourth element is a number, then it is to be coded as  $\gamma$ .

If the first element is a multiple of 3, then it is to be coded as  $\beta$ .

If the second and the fifth elements are symbols, then the codes for these two (the second and the fifth elements) are to be interchanged.

What will be the code for the following group?

9 # @ 2 7

- A)**  $\gamma$ IF $\beta$ R   **B)**  $\beta$ IFQR   **C)** CIFQR   **D)**  $\beta$ IF $\gamma$ R

Date: 24/06/2025   Time: 4:30 PM - 6:00 PM   Right: 59.32%   Wrong: 21.92%

**Q27)** IV 17 is related to FR 6 in a certain way. In the same way, KJ 12 is related to HF 1. To which of the given options is OE -6 related, following the same logic?

- A)** KI -13   **B)** LA -17   **C)** TR -29   **D)** PA -21

Date: 09/06/2025   Time: 12:45 PM - 2:15 PM   Right: 59.35%   Wrong: 5.44%

**Q28)** A group of numbers and symbols is coded using letter codes as per the codes given below and the conditions that follow. Study the given codes and conditions and answer the question that follows.

Note: If none of the conditions apply, then codes for the respective number/symbol are to be followed directly as given in the table.

Letter	F	T	E	P	A	U	X	R
Code	7	\$	@	9	2	%	6	4

**Conditions:**

1. If the 1<sup>st</sup> letter is a vowel and the last letter is a consonant, their codes are to be interchanged.
2. If the 2<sup>nd</sup> letter is a vowel and the last letter is a consonant, both are to be coded as 'W'.
3. If the 3<sup>rd</sup> and 4<sup>th</sup> letters are consonants, both are to be coded as the code for the 3<sup>rd</sup> letter.
4. If the 1<sup>st</sup> and 2<sup>nd</sup> letters are vowels, then both are to be coded as 'Q'.

What will be the code for the following group?

EPTFU

- A)** @ 9 7 7 %   **B)** @ 9 W W %   **C)** @ 9 \$ \$ %   **D)** @ \$ \$ 7 %

Date: 10/06/2025   Time: 9:00 AM - 10:30 AM   Right: 60.38%   Wrong: 11.57%

**Q29)** A group of numbers and symbols is coded using letter codes as per the codes given below and the conditions that follow. Study the given codes and conditions and answer the question that follows.

Note: If none of the conditions apply, then codes for the respective number/symbol are to be followed directly as given in the table.

Number/symbol	@	4	6	9	\$	+	3	%	#	7	&	5	\$	2
Code	L	V	C	M	K	P	B	Q	Z	Y	R	B	U	F

**Conditions:**

- i. If the first element is a symbol and the last an odd number, the codes for these two (the first and the last elements) are to be interchanged.
- ii. If the first element is an odd number and the last an even number, the first and last elements are to be coded as ©.
- iii. If both second and third elements are perfect squares, the third element is to be coded as the code for the second element.

What will be the code for the following group?

+ 6 # 5

- A)** PCCB   **B)** PCZB   **C)** BCZP   **D)** PZZB

Date: 12/06/2025   Time: 12:45 PM - 2:15 PM   Right: 60.45%   Wrong: 18.99%

**Q30)** A group of numbers and symbols is coded using letter codes as per the codes given below and the conditions that follow. Study the given codes and conditions and answer the question that follows.

Note: If none of the conditions apply, then codes for the respective number/symbol are to be followed directly as given in the table.

<b>Number/symbol</b>	6	@	8	5	\$	&	3	%	#	7	+	9	4	2
<b>Code</b>	F	G	H	N	L	K	C	Q	Z	P	R	B	U	E

**Conditions:**

- If the first element is a symbol and the last a number, the codes for these two (the first and the last elements) are to be interchanged.
- If the first element is an odd number and the last an even number, the first and last elements are to be coded as ©.
- If both second and third elements are perfect squares, the third element is to be coded as the code for the second element.

What will be the code for the following group?

5 3 + 4

- A) NRCU B) UCRN C) NCRU D) ©CR©**

Date: 10/06/2025

Time: 4:30 PM - 6:00 PM

Right: 60.46%

Wrong: 17.62%

**Q31)** RR 14 is related to UN 3 in a certain way. In the same way, BV 10 is related to ER -1. To which of the given options is PE 1 related, following the same logic?

- A) RI 8 B) SA -10 C) VS -9 D) PV 2**

Date: 12/06/2025

Time: 12:45 PM - 2:15 PM

Right: 60.48%

Wrong: 4.85%

**Q32)** A group of numbers and symbols is coded using letter codes as per the codes given below and the conditions that follow. Study the given codes and conditions and answer the question that follows.

Note: If none of the conditions apply, then codes for the respective number/symbol are to be followed directly as given in the table.

Number/symbol	5	\$	7	2	%	*	3	^	#	9	+	6	8	4
Code	A	F	L	B	G	M	C	H	N	D	J	P	E	K

**Conditions:**

- If the first element is a number and the last a symbol, then the codes for these two (the first and the last elements) are to be interchanged.
- If the first and the last elements are odd numbers, then the first and last elements are to be coded as @.
- If both the second and third elements are perfect square roots, then the third element is to be coded as the code for the second element.

What will be the code for 5#64%?

- A) ANPKG** **B) AKPNG** **C) GNPKA** **D) GKPNA**

Date: 20/06/2025 Time: 12:45 PM - 2:15 PM Right: 61.02% Wrong: 23.64%

**Q33)** XC 14 is related to VG 1 in a certain way. In the same way, RD 18 is related to PH 5. To which of the given options is UP 4 related, following the same logic?

- A) VR -7** **B) NR -7** **C) ST -9** **D) NE -9**

Date: 06/06/2025 Time: 4:30 PM - 6:00 PM Right: 61.03% Wrong: 6.21%

**Q34)** In this question, a group of numbers is coded by using letters and symbols as per the table given below and the conditions which follow.

Number	7	8	2	3	4	5	6	9	1
Code	Z	Q	*	@	%	\$	T	S	J

Conditions:

1. If the 1<sup>st</sup> and 2<sup>nd</sup> digits are even, both are to be coded as 'A'.
2. If the 1<sup>st</sup> and last digits are odd, both are to be coded as the code for the 1<sup>st</sup> digit.
3. If the 3<sup>rd</sup> and 4<sup>th</sup> digits are even, their codes are to be interchanged.

What is the correct combination of codes (by following only the applicable condition(s)) for the following?

71628

- A) Z J \* \* Q   B) Z J T T Q   C) Z J \* T Q   D) Z J T \* Q**

Date: 11/06/2025   Time: 4:30 PM - 6:00 PM   Right: 61.05%   Wrong: 21.38%

**Q35)** A group of numbers and symbols is coded using letter codes as per the codes given below and the conditions that follow. Study the given codes and conditions and answer the question that follows.

Note: If none of the conditions apply, then codes for the respective number/symbol are to be followed directly as given in the table.

Number/symbol	9	7	8	6	\$	&	3	@	#	%	+	4	9	5
Code	R	F	A	L	K	C	W	Q	D	P	R	D	U	V

Conditions:

- i. If the first element is a symbol and the last a number, the codes for these two (the first and the last elements) are to be interchanged.
- ii. If the first element is an odd number and the last an even number, the first and last elements are to be coded as ©.
- iii. If both second and third elements are perfect squares, the third element is to be coded as the code for the second element.

What will be the code for the following group?

9 7 8 6

- A) RFFL   B) ©FA©   C) LFAR   D) RFAL**

Date: 17/06/2025   Time: 9:00 AM - 10:30 AM   Right: 61.23%   Wrong: 15.18%

**Q36)** KX 3 is related to OV -9 in a certain way. In the same way, IR 11 is related to MP -1. To which of the given options is JG -2 related, following the same logic?

- A)** NE -14 **B)** OE -14 **C)** OF -13 **D)** NF -15

Date: 19/06/2025 Time: 4:30 PM - 6:00 PM Right: 61.40% Wrong: 7.50%

**Q37)** A group of numbers and symbols is coded using letter codes as per the codes given below and the conditions that follow. Study the given codes and conditions and answer the question that follows.

Note: If none of the conditions apply, then codes for the respective number/symbol are to be followed directly as given in the table.

Letter	Z	T	E	P	A	U	X	V
Code	8	\$	@	9	2	%	6	4

**Conditions:**

1. If the 1<sup>st</sup> letter is a vowel and the last letter is a consonant, their codes are to be interchanged.
2. If the 2<sup>nd</sup> letter is a vowel and the last letter is a consonant, both are to be coded as 'W'.
3. If the 3<sup>rd</sup> and 4<sup>th</sup> letters are consonants, both are to be coded as the code for the 3<sup>rd</sup> letter.
4. If the 1<sup>st</sup> and 2<sup>nd</sup> letters are vowels, then both are to be coded as 'Q'.

What will be the code for the following group?

AUTEA

- A)** Q Q \$ @ 2 **B)** 2 % \$ @ 2 **C)** 2 W \$ @ 2 **D)** 2 Q \$ @ 2

Date: 11/06/2025 Time: 9:00 AM - 10:30 AM Right: 61.61% Wrong: 17.44%

**Q38)** WR 21 is related to ZS 6 in a certain way. In the same way, GV 11 is related to JW -4. To which of the given options is UE 5 related, following the same logic?

- A)** NM -7 **B)** XF -10 **C)** FV -6 **D)** VW -9

Date: 10/06/2025 Time: 12:45 PM - 2:15 PM Right: 61.75% Wrong: 4.32%

**Q39)** A group of numbers and symbols is coded using letter codes as per the codes given below and the conditions that follow. Study the given codes and conditions and answer the question that follows.

Note: If none of the conditions apply, then codes for the respective number/symbol are to be followed directly as given in the table.

Letter	F	T	E	P	A	U	X	R
Code	7	\$	@	9	2	%	6	4

**Conditions:**

1. If the 1<sup>st</sup> letter is a vowel and the last letter is a consonant, their codes are to be interchanged.
2. If the 2<sup>nd</sup> letter is a vowel and the last letter is a consonant, both are to be coded as 'W'.
3. If the 3<sup>rd</sup> and 4<sup>th</sup> letters are consonants, both are to be coded as the code for the 3<sup>rd</sup> letter.
4. If the 1<sup>st</sup> and 2<sup>nd</sup> letters are vowels, then both are to be coded as 'Q'.

What will be the code for the following group?

TAEX

- A)** \$ 2 2 6   **B)** \$ @ @ 6   **C)** \$ W @ W   **D)** \$ 2 @ 6

Date: 10/06/2025   Time: 4:30 PM - 6:00 PM   Right: 61.79%   Wrong: 17.99%

**Q40)** In this question, a group of letters is coded by using numbers and symbols as per the table given below and the conditions which follow.

Letter	U	M	S	J	P	T	F	E	A
Code	7	4	@	\$	%	*	6	2	3

**Conditions:**

1. If the 1<sup>st</sup> letter is a vowel and the 3<sup>rd</sup> letter is a consonant, both to be coded as the code of the consonant.
2. If the 1<sup>st</sup> and last letters are vowels, both are to be coded as 'N'.
3. If the 2<sup>nd</sup> and last letters are vowels, their codes are to be interchanged.

What is the correct combination of codes (by following only the applicable condition(s)) for the following letters?

SEMTU

- A)** @ 7 4 \* 2   **B)** @ 2 4 \* 2   **C)** @ 2 4 \* 7   **D)** @ 7 4 \* 7

Date: 13/06/2025   Time: 9:00 AM - 10:30 AM   Right: 61.82%   Wrong: 22.58%

Q41) GN 14 is related to ER 1 in a certain way. In the same way, HP 18 is related to FT 5. To which of the given options is TK 4 related, following the same logic?

- A) PW -7 B) KJ -13 C) RO -9 D) TY -11

Date: 09/06/2025 Time: 12:45 PM - 2:15 PM Right: 61.85% Wrong: 4.88%

Q42) A group of numbers and symbols is coded using letter codes as per the codes given below and the conditions that follow. Study the given codes and conditions and answer the question that follows.

Note: If none of the conditions apply, then codes for the respective number/symbol are to be followed directly as given in the table.

Number/symbol	2	@	9	5	\$	&	3	%	#	7	+	4	8	6
Code	D	B	A	M	L	E	C	Q	D	P	R	B	U	K

### Conditions:

- If the first element is a symbol and the last a number, the codes for these two (the first and the last elements) are to be interchanged.
- If the first element is an odd number and the last an even number, the first and last elements are to be coded as ©.
- If both second and third elements are perfect squares, the third element is to be coded as the code for the second element.

What will be the code for the following group?

@ 3 5 7

- A) B M M P B) P C M B C) B C M P D) B C C P

Date: 10/06/2025 Time: 12:45 PM - 2:15 PM Right: 62.79% Wrong: 17.64%

ENGLISH MEDIUM 3 in 1  
**SSC GENERAL STUDIES**  
शुभवास्तु  
— ज्ञान का अंतिम प्रहार —  
SUBJECT WISE TOPIC WISE  
• TOPIC WISE DETAILED CONCEPTS  
• VERY IMPORTANT ONE-LINER FACTS  
• 4500+ TCS PYQS WITH DETAILED EXPLANATION  
USEFUL FOR  
SSC CGL (TIER-1 & II), CHSL (TIER-1 & II), CPO, SELECTION POST, MTS, GD & OTHER GOVT. EXAMS  
ADITYA RANJAN SIR  
(EXCISE INSPECTOR)  
SELECTED हैं SELECTION दिलाएंगे

हिन्दी माध्यम 3 in 1  
**SSC सामान्य अध्ययन**  
शुभवास्तु  
— ज्ञान का अंतिम प्रहार —  
SUBJECT WISE TOPIC WISE  
• विषयवार विस्तृत अवधारणाएं  
• अति महत्वपूर्ण ONE-LINER तथ्य  
• विस्तृत व्याख्या के साथ 4500+ TCS PYQS  
USEFUL FOR  
SSC CGL (TIER-1 & II), CHSL (TIER-1 & II), CPO, SELECTION POST, MTS, GD & OTHER GOVT. EXAMS  
ADITYA RANJAN SIR  
(EXCISE INSPECTOR)  
SELECTED हैं SELECTION दिलाएंगे

**Available Now!**

Flipkart

**Q43)** A group of numbers/symbols is coded using letter codes as per the codes given below and the conditions that follow. If none of the conditions apply, then codes for the respective number/symbol to be followed directly as given in the table.

Number/Symbol	9	2	@	&	3	4	5	%	1	8	Δ	7	6
Code	L	C	Z	M	D	W	A	P	R	T	F	B	K

Conditions:

- (i) If the first element is a symbol and the last a number, the codes for these two (the first and the last elements) are to be interchanged.
- (ii) If the first element is an odd number and the last an even number, the first and last elements are to be coded as ©.
- (iii) If both the second and third elements are perfect squares, the third element is to be coded as the code for the second element.

What will be the code for the following group?

7 & 2 @ 9 % 2

- A)** M M C Z L P © **B)** © M Z C L P © **C)** © M C Z P L © **D)** © M C Z L P ©

Date: 09/06/2025

Time: 4:30 PM - 6:00 PM

Right: 63.38%

Wrong: 9.23%

**Q44)** NW -19 is related to PZ -10 in a certain way. In the same way, RD -12 is related to TG -3. To which of the given options is WU -2 related, following the same logic?

- A)** ZA -5 **B)** ZZ -5 **C)** YX -7 **D)** XA -7

Date: 13/06/2025

Time: 12:45 PM - 2:15 PM

Right: 63.44%

Wrong: 9.04%

**Q45)** This question is based on the words given below.

(Left) BAD FIG ICE NOT (Right)

In each of the words, each vowel is changed to the letter immediately following it in the English alphabetical order and each consonant is changed to the letter immediately preceding in the English alphabetical order. In how many letter clusters thus formed, will no vowel appear?

- A)** Two **B)** None **C)** Three **D)** One

Date: 05/06/2025

Time: 4:30 PM - 6:00 PM

Right: 63.57%

Wrong: 25.57%

**Q46)** In this question, a group of numbers is coded by using letters and symbols as per the table given below and the conditions which follow.

Number	7	8	2	3	4	5	6	9	1
Code	Z	Q	*	@	#	\$	T	S	J

Conditions:

1. If the 1<sup>st</sup> and 2<sup>nd</sup> digits are even, both are to be coded as 'A'.
2. If the 1<sup>st</sup> and last digits are odd, both are to be coded as the code for the 1<sup>st</sup> digit.
3. If the 3<sup>rd</sup> and 4<sup>th</sup> digits are even, their codes are to be interchanged.

What is the correct combination of codes (by following only the applicable condition(s)) for the following digits?

38159

- A)** S Q J \$ S   **B)** @ Q J \$ @   **C)** S Q J \$ @   **D)** @ Q J \$ S

Date: 12/06/2025   Time: 4:30 PM - 6:00 PM   Right: 63.77%   Wrong: 23.29%

**Q47)** A group of numbers and symbols is coded using letter codes as per the codes given below and the conditions that follow. Study the given codes and conditions and answer the question that follows.

Note: If none of the conditions apply, then codes for the respective number/symbol are to be followed directly as given in the table.

Letter	L	M	E	P	A	U	X	R
Code	7	\$	@	9	2	%	6	4

Conditions:

1. If the 1<sup>st</sup> letter is a vowel and the last letter is a consonant, their codes are to be interchanged.
2. If the 2<sup>nd</sup> letter is a vowel and the last letter is a consonant, both are to be coded as 'W'.
3. If the 3<sup>rd</sup> and 4<sup>th</sup> letters are consonants, both are to be coded as the code for the 3<sup>rd</sup> letter.
4. If the 1<sup>st</sup> and 2<sup>nd</sup> letters are vowels, then both are to be coded as 'Q'.

What will be the code for the following group?

APUXR

- A)** 2 9 % 6 4   **B)** Q 9 % 6 Q   **C)** 2 9 % 6 2   **D)** 4 9 % 6 2

Date: 10/06/2025   Time: 12:45 PM - 2:15 PM   Right: 64.03%   Wrong: 16.87%

**Q48)** VB CD is related to MT TV in a certain way based on the English alphabetical order. In the same way, LV SX is related to CN JP. To which of the following options is KX RZ related, following the same logic?

- A)** BROP   **B)** BPIR   **C)** BPRI   **D)** BRIP

Date: 24/06/2025   Time: 4:30 PM - 6:00 PM   Right: 64.18%   Wrong: 8.12%

**Q49)** A group of numbers and symbols is coded using letter codes as per the codes given below and the conditions that follow. Study the given codes and conditions and answer the question that follows.

Note: If none of the conditions apply, then codes for the respective number/symbol are to be followed directly as given in the table.

Number/symbol	\$	%	&	*	2	4	6	@	#	3	+	8	9	7
Code	T	U	P	S	D	F	J	K	Z	C	V	B	N	M

**Conditions:**

- If the first element is a symbol and the last a number, the codes for these two (the first and the last elements) are to be interchanged.
- If the first element is an odd number and the last an even number, the first and last elements are to be coded as ©.
- If both second and third elements are perfect cubes, the third element is to be coded as the code for the second element.

What will be the code for the following group?

3 9 8 \*

- A) CNNS** **B) CNBS** **C) SNBC** **D) CBBS**

Date: 20/06/2025 Time: 12:45 PM - 2:15 PM Right: 64.25% Wrong: 18.72%

**Q50)** HN 19 is related to DK 30 in a certain way. In the same way, JR 11 is related to FO 22. To which of the given options is SF 3 related, following the same logic?

- A) NB 12** **B) OC 14** **C) NC 14** **D) OB 12**

Date: 14/06/2025 Time: 9:00 AM - 10:30 AM Right: 65.05% Wrong: 7.80%

**Q51)** JR 11 is related to MV 2 in a certain way. In the same way, KL 7 is related to NP -2. To which of the given options is WO 2 related, following the same logic?

- A) ZT -7** **B) AT -7** **C) AS -5** **D) ZS -7**

Date: 14/06/2025 Time: 12:45 PM - 2:15 PM Right: 65.23% Wrong: 7.79%

**Q52)** SI 14 is related to WH -2 in a certain way. In the same way, MJ 18 is related to QI 2. To which of the given options is PV 4 related, following the same logic?

- A) TU -12** **B) NG -6** **C) HT -8** **D) KH -7**

Date: 14/06/2025 Time: 9:00 AM - 10:30 AM Right: 65.84% Wrong: 4.00%

**Q53)** In this question, a group of numbers is coded by using letters and symbols as per the table given below and the conditions which follow.

Number	7	8	2	3	4	5	6	9	1
Code	Z	Q	#	@	%	\$	U	S	J

Conditions:

1. If the 1<sup>st</sup> and 2<sup>nd</sup> digits are even, both are to be coded as 'A'.
2. If the 1<sup>st</sup> and last digits are odd, both are to be coded as the code for the 1<sup>st</sup> digit.
3. If the 3<sup>rd</sup> and 4<sup>th</sup> digits are even, their codes are to be interchanged.

What is the correct combination of codes (by following only the applicable condition(s)) for the given digits?

48719

- A)** Q Q Z J S   **B)** % Q Z J S   **C)** A A Z J S   **D)** % % Z J S

Date: 11/06/2025   Time: 12:45 PM - 2:15 PM   Right: 65.95%   Wrong: 17.94%

**Q54)** In this question, a group of numbers/symbols are coded using letter codes as per the codes given below, and the conditions that follow. The correct combination of codes (following only the condition/s that apply) is your answer.

Note: If none of the conditions apply, then codes for the respective number/symbol are to be followed directly as given in the table.

Number/symbol	7	@	6	2	#	%	&	8	9	=	\$	3	4	+
Code	E	J	A	H	F	R	B	Y	L	H	Q	T	K	Z

Conditions:

- (i) If the first element is an odd number and the last element is also an odd number then the codes for these two (the first and the last elements) are to be interchanged.
- (ii) If the first and last elements are perfect squares then the code of the 1st and last element is to be that of the preceding number or symbol.
- (iii) If the first and last element is a symbol then the first and last element is to be coded as >.

What is the code for the following?

9%+27

- A)** LRZHE   **B)** ERZHE   **C)** LRZHL   **D)** ERZHL

Date: 23/06/2025   Time: 9:00 AM - 10:30 AM   Right: 65.96%   Wrong: 20.71%

**Q55)** A group of numbers/symbols is coded using letter codes as per the codes given below and the conditions that follow. If none of the conditions apply, then codes for the respective number/symbol to be followed directly as given in the table.

Number/Symbol	8	9	@	&	5	7	2	%	1	3	Δ	4	6
Code	L	C	Z	N	D	W	A	P	R	T	F	B	K

Conditions:

- If the first element is a symbol and the last a number, the codes for these two (the first and the last elements) are to be interchanged.
- If the first element is an odd number and the last an even number, the first and last elements are to be coded as ©.
- If both the second and third elements are perfect squares, the third element is to be coded as the code for the second element.

What will be the code for the following group?

7 6 @ 1 3 &

- A)** W K Z R T W   **B)** W K R Z T N   **C)** N K Z R T N   **D)** W K Z R T N

Date: 09/06/2025   Time: 9:00 AM - 10:30 AM   Right: 66.12%   Wrong: 5.65%

**Q56)** A group of numbers and symbols is coded using letter codes as per the codes given below and the conditions that follow. Study the given codes and conditions and answer the question that follows.

Note: If none of the conditions apply, then codes for the respective number/symbol are to be followed directly as given in the table.

Number/Symbols	3	#	4	\$	7	&	6	*	8	^	2	@	9	+
Code	H	A	J	B	K	C	L	D	M	E	N	F	P	G

Conditions:

- If the first element is a symbol and the last a number, the codes for these two (the first and the last elements) are to be interchanged.
- If the first element is an odd number and the last an even number, the first and last elements are to be coded as ©.
- If both the second and third elements are perfect cubes, the code of the second element will be the code of third element.

What will be the code for the following group?

3\$72

- A)** NBKH   **B)** ©BK©   **C)** HBKN   **D)** HKB©

Date: 19/06/2025   Time: 9:00 AM - 10:30 AM   Right: 66.39%   Wrong: 18.65%

**Q57)** WJ 15 is related to UN 11 in a certain way. In the same way, QH 8 is related to OL 4. To which of the given options is RI 3 related, following the same logic?

- A)** IN -9   **B)** PL -7   **C)** TR -5   **D)** PM -1

Date: 06/06/2025   Time: 9:00 AM - 10:30 AM   Right: 66.53%   Wrong: 10.21%

**Q58)** A group of numbers/symbols is coded using letter codes as per the codes given below and the conditions that follow. If none of the conditions apply, then codes for the respective number/symbol to be followed directly as given in the table.

Number/Symbol	9	2	@	&	3	7	5	%	1	8	Δ	4	6
Code	L	C	Z	M	D	W	A	P	R	T	F	B	K

Conditions:

- (i) If the first element is a symbol and the last a number, the codes for these two (the first and the last elements) are to be interchanged.
- (ii) If the first element is an odd number and the last an even number, the first and last elements are to be coded as ©.
- (iii) If both the second and third elements are perfect squares, the third element is to be coded as the code for the second element.

What will be the code for the following group?

5 & 3 @ 7 % 2

- A)** © M D Z W P ©   **B)** © M D Z P W ©   **C)** © D M Z W P ©   **D)** © M D W Z P ©

Date: 05/06/2025   Time: 9:00 AM - 10:30 AM   Right: 66.70%   Wrong: 7.60%

**Q59)** OJ 9 is related to QM -8 in a certain way. In the same way, JK 14 is related to LN -3. To which of the given options is VP 1 related, following the same logic?

- A)** XT -16   **B)** YS -14   **C)** XS -16   **D)** YT -16

Date: 16/06/2025   Time: 9:00 AM - 10:30 AM   Right: 66.79%   Wrong: 7.14%

**Q60)** In this question, a group of numbers/symbols are coded using letter codes as per the codes given below, and the conditions that follow. The correct combination of codes (following only the condition/s that apply) is your answer.

Note: If none of the conditions apply, then codes for the respective number/symbol are to be followed directly as given in the table.

<b>Number/symbol</b>	7	@	6	2	#	%	&	8	9	=	\$	3	4	+
<b>Code</b>	E	J	A	H	F	R	B	Y	L	H	Q	T	K	Z

**Conditions:**

- (i) If the first element is an odd number and the last element is also an odd number, then the codes for these two (the first and the last elements) are to be interchanged.
- (ii) If the first and last elements are perfect squares, then the code of the 1st and last element are to be interchanged.
- (iii) If the first and last element is a symbol, then the first and last element is to be coded as >.

What is the code for the following?

98#@4

- A) KYFJL B) LYFJK C) TYFJY D) KYFEL**

Date: 23/06/2025 Time: 9:00 AM - 10:30 AM Right: 67.14% Wrong: 20.32%

**Q61)** In this question, a group of letters is coded by using numbers and symbols as per the table given below and the conditions which follow.

<b>Letter</b>	U	M	S	J	P	T	F	E	A
<b>Code</b>	7	4	@	\$	%	*	6	2	3

**Conditions:**

1. If the 1<sup>st</sup> letter is a vowel and the 3<sup>rd</sup> letter is a consonant, both are to be coded as the code for that 3<sup>rd</sup> letter consonant.
2. If the 1<sup>st</sup> and last letters are vowels, both are to be coded as 'N'.
3. If the 2<sup>nd</sup> and last letters are vowels, their codes are to be interchanged.

What is the correct combination of codes (by following only the applicable condition(s)) for the following letters?

AJSPT

- A) 3 \$ % @ \* B) 3 \$ @ % \* C) 3 \$ 3 % \* D) @ \$ @ % \***

Date: 12/06/2025 Time: 4:30 PM - 6:00 PM Right: 68.05% Wrong: 18.34%

**Q62)** HT 17 is related to GQ 6 in a certain way. In the same way, LX 9 is related to KU -2. To which of the given options is QR 6 related, following the same logic?

- A)** QR -7 **B)** PQ -5 **C)** PO -5 **D)** QQ -7

Date: 17/06/2025 Time: 12:45 PM - 2:15 PM Right: 68.07% Wrong: 6.49%

**Q63)** A group of numbers/symbols is coded using letter codes as per the codes given below and the conditions that follow. If none of the conditions apply, then codes for the respective number/symbol to be followed directly as given in the table.

Note: If none of the conditions apply, then codes for the respective number/symbol are to be followed directly as given in the table.

Number/Symbol	2	9	6	7	4	#	3	@	1
Code	Y	A	L	B	S	D	E	Z	C

Conditions –

- (i) If the first element is a symbol and the last a number, the codes for these two (the first and the last elements) are to be interchanged.  
 (ii) If the first element is an odd number and the last an even number, the first and last elements are to be coded as ©  
 (iii) If both second and third elements are perfect squares, the third element is to be coded as the code for the second element.

What will be the code for the following group?

9 4 @ 1

- A)** ASZC **B)** ©SZ© **C)** LZSC **D)** AZSC

Date: 24/06/2025 Time: 12:45 PM - 2:15 PM Right: 68.22% Wrong: 11.67%

**Q64)** This question is based on the words given below.

(Left) DIE CUP BOX ASK (Right)

In each of the words, each vowel is changed to the letter immediately following it in the English alphabetical order and each consonant is changed to the letter immediately preceding in the English alphabetical order. In how many letter clusters thus formed, will no vowel appear?

- A)** Two **B)** Three **C)** None **D)** One

Date: 05/06/2025 Time: 12:45 PM - 2:15 PM Right: 68.54% Wrong: 23.42%

**Q65)** A group of numbers and symbols is coded using letter codes as per the codes given below and the conditions that follow. Study the given codes and conditions and answer the question that follows.

Note: If none of the conditions apply, then codes for the respective number/symbol are to be followed directly as given in the table.

<b>Number/symbol</b>	2	@	9	5	\$	&	3	%	#	7	+	4	8	6
<b>Code</b>	T	F	A	J	L	E	W	Q	D	P	R	B	U	S

**Conditions:**

- If the first element is a symbol and the last a number, the codes for these two (the first and the last elements) are to be interchanged.
- If the first element is an odd number and the last an even number, the first and last elements are to be coded as ©.
- If both second and third elements are perfect squares, the third element is to be coded as the code for the second element.

What will be the code for the following group?

7 2 4 @ 5

- A) PBBFJ B) JTBFP C) JBBFP D) PTBFJ**

Date: 05/06/2025 Time: 9:00 AM - 10:30 AM Right: 68.67% Wrong: 8.12%

**Q66)** In this question, a group of letters is coded by using numbers and symbols as per the table given below and the conditions which follow.

<b>Letter</b>	U	M	S	J	P	T	F	E	A
<b>Code</b>	7	4	@	\$	%	*	6	2	3

**Conditions:**

- If the 1<sup>st</sup> letter is a vowel and the 3<sup>rd</sup> letter is a consonant, both to be coded as the code of the consonant.
- If the 1<sup>st</sup> and last letters are vowels, both are to be coded as 'N'.
- If the 2<sup>nd</sup> and last letters are vowels, their codes are to be interchanged.

What is the correct combination of codes (by following only the applicable condition(s)) for the following letters?

UJEPA

- A) 7 \$ 2 % 3 B) N \$ 2 % N C) N \$ 2 % 3 D) 7 \$ 2 % N**

Date: 12/06/2025 Time: 12:45 PM - 2:15 PM Right: 68.68% Wrong: 14.81%

**Q67)** RD 14 is related to UF 10 in a certain way. In the same way, CR 10 is related to FT 6. To which of the given options is ON 1 related, following the same logic?

- A)** RS -1   **B)** PR -9   **C)** RP -3   **D)** QF -7

Date: 06/06/2025   Time: 9:00 AM - 10:30 AM   Right: 69.07%   Wrong: 9.26%

**Q68)** In this question, a group of number/symbol is coded using letter codes as per the codes given below and the conditions which follow. The correct combination of codes following the conditions is your answer.

Note: If none of the conditions apply, then codes for the respective number/symbol are to be followed directly as given in the table.

<b>Number/symbol</b>	@	2	9	5	\$	&	3	%	#	7	+	4	8	6
<b>Code</b>	A	C	D	J	F	E	W	Q	G	P	R	B	U	S

**Conditions:**

- (i) If the first element is a symbol and the last a number, the codes for these two (the first and the last elements) are to be interchanged.
- (ii) If the first element is an odd number and the last an even number, the first and last elements are to be coded as ©.
- (iii) If both second and third elements are perfect squares, the third element is to be coded as the code for the second element.

What is @9#7 coded as?

- A)** ADGP   **B)** GPDA   **C)** PDGA   **D)** PGDA

Date: 24/06/2025   Time: 9:00 AM - 10:30 AM   Right: 69.09%   Wrong: 16.08%

**Q69)** A group of numbers and symbols is coded using letter codes as per the codes given below and the conditions that follow. Study the given codes and conditions and answer the question that follows.

Note: If none of the conditions apply, then codes for the respective number/symbol are to be followed directly as given in the table.

<b>Number/symbol</b>	2	@	9	5	\$	&	3	%	#	7	+	4	8	6
<b>Code</b>	T	F	A	J	L	E	W	Q	D	P	R	B	U	S

**Conditions:**

- If the first element is a symbol and the last a number, the codes for these two (the first and the last elements) are to be interchanged.
- If the first element is an odd number and the last an even number, the first and last elements are to be coded as ©.
- If both second and third elements are perfect squares, the third element is to be coded as the code for the second element.
- If none of the above conditions are met, then the elements are to be simply coded as per the codes given in the question.

What will be the code for the following group?

@ 2 4 7 +

- A) RTBPF   B) RBBPF   C) FBBPR   D) FTBPR**

Date: 05/06/2025

Time: 4:30 PM - 6:00 PM

Right: 69.18%

Wrong: 6.78%

**Q70)** In this question, a group of number/symbol is coded using letter codes as per the codes given below and the conditions which follow. The correct combination of codes following the conditions is your answer.

Note: If none of the conditions apply, then codes for the respective number/symbol are to be followed directly as given in the table.

<b>Number/symbol</b>	9	6	+	@	8	&	3	*	%	5	\$	4	7
<b>Code</b>	W	C	E	J	F	A	D	Q	G	P	R	B	U

**Conditions:**

- (I) If the first element is a number and the last a symbol, the codes for these two (the first and the last elements) are to be interchanged.
- (II) If the first element is an odd number and the last an even number, the first and last elements are to be coded as ©.
- (III) If both second and third elements are perfect squares, the third element is to be coded as the code for the second element.

What is 843% coded as?

- A) GBDF**   **B) BDGF**   **C) FBDG**   **D) FDBG**

Date: 24/06/2025   Time: 9:00 AM - 10:30 AM   Right: 69.51%   Wrong: 16.03%

**Q71)** A group of numbers/symbols is coded using letter codes as per the codes given below and the conditions that follow. If none of the conditions apply, then codes for the respective number/symbol to be followed directly as given in the table.

Number/Symbol	8	9	@	&	5	7	2	%	1	3	Δ	4	6
Code	L	C	Z	M	D	W	A	P	R	T	F	B	K

Conditions:

- (i) If the first element is a symbol and the last a number, the codes for these two (the first and the last elements) are to be interchanged.
- (ii) If the first element is an odd number and the last an even number, the first and last elements are to be coded as ©
- (iii) If both the second and third elements are perfect squares, the third element is to be coded as the code for the second element.

What will be the code for the following group?

7 2 @ 1 3 &

- A) WAZRTM B) WARZTM C) MAZTRW D) MAZRTW**

Date: 05/06/2025 Time: 9:00 AM - 10:30 AM Right: 69.97% Wrong: 6.45%

**Q72)** This question is based on the words given below.

(Left) ACT BUS CAR DAD (Right)

In each of the words, each vowel is changed to the letter immediately following it in the English alphabetical order and each consonant is changed to the letter immediately preceding in the English alphabetical order. In how many letter clusters thus formed, will no vowel appear?

- A) One B) Two C) None D) Three**

Date: 05/06/2025 Time: 12:45 PM - 2:15 PM Right: 69.99% Wrong: 21.74%

**Q73)** A group of numbers and symbols is coded using letter codes as per the codes given below and the conditions that follow. Study the given codes and conditions and answer the question that follows.

Note: If none of the conditions apply, then codes for the respective number/symbol are to be followed directly as given in the table.

<b>Number/symbol</b>	@	4	2	+	8	-	÷	6	7	%	5	\$	#	&
<b>Code</b>	P	V	A	R	Z	I	E	H	L	O	J	C	B	Q

**Conditions:**

If the first and the last elements are symbols, then the codes for these two (the first and the last element) are to be interchanged.

If the third element is a prime number, then the third element is to be coded as  $\gamma$ .

If the fifth element is a multiple of 4, then the fifth element is to be coded as  $\beta$ .

What will be the code for the following group?

4 6 ÷ % 8

- A) BHEOZ B) VHEOZ C) VHEO $\beta$  D)  $\gamma$ HYO $\beta$**

Date: 23/06/2025 Time: 9:00 AM - 10:30 AM Right: 71.15% Wrong: 16.28%

**Q74)** A group of numbers and symbols is coded using letter codes as per the codes given below and the conditions that follow. Study the given codes and conditions and answer the question that follows.

Note: If none of the conditions apply, then codes for the respective number/symbol are to be followed directly as given in the table.

<b>Number/Symbol</b>	1	8	6	7	4	#	2	@	&
<b>Code</b>	Y	A	L	B	S	D	E	Z	C

**Conditions:**

(i) If the first element is a symbol and the last a number, the codes for these two (the first and the last elements) are to be interchanged.

(ii) If the first element is an odd number and the last an even number, the first and last elements are to be coded as ©.

(iii) If both second and third elements are perfect squares, the third element is to be coded as the code for the second element.

What will be the code for the following group?

# 6 @ 2

- A) ELDZ B) EZLD C) ELZD D) DZLE**

Date: 24/06/2025 Time: 9:00 AM - 10:30 AM Right: 71.50% Wrong: 13.31%

**Q75)** If 1 is added to each odd digit and 2 is subtracted from each even digit in the number 6318574, how many digits will appear more than once in the new number thus formed?

- A)** Three **B)** Four **C)** Two **D)** One

Date: 14/06/2025 Time: 12:45 PM - 2:15 PM Right: 71.97% Wrong: 24.70%

**Q76)** VH 14 is related to YJ 7 in a certain way. In the same way, PI 18 is related to SK 11. To which of the given options is SU 4 related, following the same logic?

- A)** NT -7 **B)** MR -9 **C)** XR -5 **D)** VW -3

Date: 17/06/2025 Time: 12:45 PM - 2:15 PM Right: 72.74% Wrong: 5.17%

**Q77)** If 2 is added to each odd digit and 1 is subtracted from each even digit in the number 5634812, how many digits will appear more than once in the new number thus formed?

- A)** 1 **B)** 3 **C)** 2 **D)** 0

Date: 18/06/2025 Time: 4:30 PM - 6:00 PM Right: 73.08% Wrong: 22.65%

**Q78)** YAGK is related to PRXB in a certain way based on the English alphabetical order. In the same way, OQWA is related to FHNR. To which of the following options is NPVZ related, following the same logic?

- A)** EQMG **B)** EGMQ **C)** EGQM **D)** EQGM

Date: 23/06/2025 Time: 12:45 PM - 2:15 PM Right: 75.04% Wrong: 7.24%

**Q79)** If 1 is added to each odd digit and 2 is subtracted from each even digit in the number 7418536, how many digits will appear more than once in the new number thus formed?

- A)** Two **B)** Three **C)** None **D)** One

Date: 19/06/2025 Time: 12:45 PM - 2:15 PM Right: 75.47% Wrong: 21.82%

**Q80)** If 1 is added to each odd digit and 2 is subtracted from each even digit in the number 3816427, how many digits will appear more than once in the new number thus formed?

- A)** Four **B)** One **C)** Two **D)** Three

Date: 11/06/2025 Time: 12:45 PM - 2:15 PM Right: 75.57% Wrong: 20.41%

**Q81)** Select the pair which follows the same pattern as that followed by the two set of pairs given below.

Both pairs follow the same pattern.

PNQ : QQO

UQR : VTP

- A)** OHM : PKK **B)** VHQ : WKN **C)** QSX : RUV **D)** UCT : VFS

Date: 20/06/2025 Time: 12:45 PM - 2:15 PM Right: 77.96% Wrong: 15.93%

**Q82)** If 1 is added to each odd digit and 2 is subtracted from each even digit in the number 4275613, how many digits will appear more than once in the new number thus formed?

**A) 0 B) 1 C) 2 D) 3**

Date: 18/06/2025 Time: 9:00 AM - 10:30 AM Right: 79.02% Wrong: 17.90%

**Q83)** If 1 is added to each odd digit and 2 is subtracted from each even digit in the number 5214637, how many digits will appear more than once in the new number thus formed?

**A) Four B) Three C) Two D) One**

Date: 16/06/2025 Time: 12:45 PM - 2:15 PM Right: 79.53% Wrong: 16.14%

**Q84)** If 1 is added to each even digit and 2 is subtracted from each odd digit in the number 37246895, how many digits will appear more than once in the new number thus formed?

**A) Four B) One C) Three D) Two**

Date: 17/06/2025 Time: 12:45 PM - 2:15 PM Right: 80.21% Wrong: 16.38%

**Q85)** If 2 is added to each even digit and 1 is subtracted from each odd digit in the number 6154932, how many digits will appear more than once in the new number thus formed?

**A) Three B) Four C) Two D) One**

Date: 05/06/2025 Time: 12:45 PM - 2:15 PM Right: 80.26% Wrong: 16.13%

**Q86)** Select the pair which follows the same pattern as that followed by the two set of pairs given below.  
Both pairs follow the same pattern.

ICK : KEF

HDW : JFR

**A) RFM : TIH B) VJF : XLA C) KLR : MNN D) GGP : IJK**

Date: 23/06/2025 Time: 4:30 PM - 6:00 PM Right: 80.92% Wrong: 13.57%

**Q87)** If 1 is added to each odd digit and 1 is subtracted from each even digit in the number 5746238, what will be the sum of the highest and lowest digits in the new number thus formed?

**A) 11 B) 8 C) 9 D) 15**

Date: 14/06/2025 Time: 9:00 AM - 10:30 AM Right: 81.16% Wrong: 15.54%

**Q88)** SUZD is related to ACHL in a certain way based on the English alphabetical order. In the same way, YAFJ is related to GINR. To which of the following options is WYDH related, following the same logic?

**A) EGPL B) GPEL C) EGLP D) GPLE**

Date: 20/06/2025 Time: 9:00 AM - 10:30 AM Right: 81.17% Wrong: 5.28%

**Q89)** YAGK is related to RTZD in a certain way based on the English alphabetical order. In the same way, WYEI is related to PRXB. To which of the following options is BDJN related, following the same logic?

- A) UWHY B) UWAC C) UWCG D) UWCH**

Date: 23/06/2025 Time: 4:30 PM - 6:00 PM Right: 81.27% Wrong: 5.73%

**Q90)** If 2 is added to each even digit and 1 is subtracted from each odd digit in the number 74135296, how many digits will appear more than once in the new number thus formed?

- A) One B) Two C) Three D) Four**

Date: 23/06/2025 Time: 12:45 PM - 2:15 PM Right: 81.30% Wrong: 14.70%

**Q91)** If 1 is added to each odd digit and 2 is subtracted from each even digit in the number 8271634, how many digits will appear more than once in the new number thus formed?

- A) Two B) None C) One D) Three**

Date: 09/06/2025 Time: 9:00 AM - 10:30 AM Right: 81.65% Wrong: 14.82%

**Q92)** If 1 is added to each odd digit and 2 is subtracted from each even digit in the number 1437586, what will be difference between the highest and lowest digits in the number thus formed?

- A) 6 B) 1 C) 4 D) 7**

Date: 06/06/2025 Time: 9:00 AM - 10:30 AM Right: 82.24% Wrong: 12.49%

**Q93)** DREAM is related to ZNAWI in a certain way based on the English alphabetical order. In the same way, DANCE is related to ZWJYA. To which of the given options is DOUBT related, following the same logic?

- A) ZKKXP B) ZKVXP C) ZKPXP D) ZKQXP**

Date: 06/06/2025 Time: 9:00 AM - 10:30 AM Right: 83.30% Wrong: 4.48%

**Q94)** In a certain code language, 'ROME' is coded as '7245' and 'TURN' is coded as '5689'. What is the code for 'R' in the given code language?

- A) 9 B) 5 C) 2 D) 7**

Date: 16/06/2025 Time: 12:45 PM - 2:15 PM Right: 83.92% Wrong: 8.63%

**Q95)** DIOR is related to MQXZ in a certain way based on the English alphabetical order. In the same way, NOYX is related to WWHF. To which of the given options is OMZV related, following the same logic?

- A) XERT B) XUDI C) XUID D) XUIO**

Date: 24/06/2025 Time: 9:00 AM - 10:30 AM Right: 83.97% Wrong: 5.19%

**Q96)** In a certain code language, 'FAST' is coded as '2468' and 'SLOW' is coded as '1327'. What is the code for 'S' in the given code language?

**A) 7 B) 6 C) 2 D) 1**

Date: 11/06/2025 Time: 9:00 AM - 10:30 AM Right: 84.09% Wrong: 7.07%

**Q97)** In a certain code language, 'BORN' is coded as '2468' and 'NEST' is coded as '1327'. What is the code for 'N' in the given code language?

**A) 7 B) 2 C) 8 D) 1**

Date: 10/06/2025 Time: 12:45 PM - 2:15 PM Right: 84.21% Wrong: 8.53%

**Q98)** If 2 is added to each even digit and 1 is subtracted from each odd digit in the number 571649, what will be the sum of the last three digits from the left in the new number thus formed?

**A) 14 B) 24 C) 18 D) 22**

Date: 12/06/2025 Time: 9:00 AM - 10:30 AM Right: 84.21% Wrong: 10.26%

**Q99)** In a certain code language, 'GSTA' is coded as '51' and 'XMBJ' is coded as '53'. What is the code for 'YDOM' in the given language?

**A) 58 B) 55 C) 60 D) 61**

Date: 11/06/2025 Time: 9:00 AM - 10:30 AM Right: 84.84% Wrong: 7.21%

**Q100)** If 1 is added to each odd digit and 2 is subtracted from each even digit in the number 6753412, what will be the sum of the digits which are second from the left and second from the right in the new number thus formed?

**A) 11 B) 10 C) 9 D) 8**

Date: 16/06/2025 Time: 12:45 PM - 2:15 PM Right: 85.27% Wrong: 10.13%

**Q101)** In a certain code language, 'FUSE' is coded as '3517' and 'SING' is coded as '2458'. What is the code for 'S' in the given code language?

**A) 5 B) 1 C) 8 D) 2**

Date: 09/06/2025 Time: 9:00 AM - 10:30 AM Right: 85.51% Wrong: 6.80%

**Q102)** In a certain code language, 'FIGS' is coded as '3648' and 'ICED' is coded as '1285'. What is the code for 'I' in the given code language?

**A) 1 B) 8 C) 6 D) 5**

Date: 20/06/2025 Time: 12:45 PM - 2:15 PM Right: 85.55% Wrong: 7.74%

**Q103)** If 2 is added to each even digit and 1 is subtracted from each odd digit in the number 2614759, what will be the sum of the digits which are sixth from the left and first from the right in the new number thus formed?

**A) 10 B) 14 C) 12 D) 6**

Date: 10/06/2025 Time: 9:00 AM - 10:30 AM Right: 85.74% Wrong: 9.15%

**Q104)** In a certain code language, 'RIPE' is coded as '5987' and 'FIRE' is coded as '8751'. What is the code for 'F' in the given code language?

**A) 8 B) 5 C) 7 D) 1**

Date: 13/06/2025 Time: 4:30 PM - 6:00 PM Right: 85.81% Wrong: 10.27%

**Q105)** In a certain code language, 'FARM' is coded as '4683' and 'MUSE' is coded as '2419'. What is the code for 'M' in the given code language?

**A) 1 B) 4 C) 2 D) 3**

Date: 23/06/2025 Time: 4:30 PM - 6:00 PM Right: 85.81% Wrong: 7.86%

**Q106)** In a certain code language, 'WIND' is coded as '6482' and 'DOGS' is coded as '3671'. What is the code for 'D' in the given code language?

**A) 2 B) 6 C) 3 D) 1**

Date: 12/06/2025 Time: 12:45 PM - 2:15 PM Right: 85.93% Wrong: 6.46%

**Q107)** If 2 is added to each odd digit and 1 is subtracted from each even digit in the number 2645783, what will be the sum of the highest and lowest digits in the new number thus formed?

**A) 10 B) 14 C) 12 D) 16**

Date: 09/06/2025 Time: 12:45 PM - 2:15 PM Right: 86.07% Wrong: 8.67%

**Q108)** In a certain code language, 'PACE' is coded as '2468' and 'COST' is coded as '1327'. What is the code for 'C' in the given code language?

**A) 6 B) 1 C) 7 D) 2**

Date: 11/06/2025 Time: 12:45 PM - 2:15 PM Right: 86.11% Wrong: 7.88%

**Q109)** CSVG is related to GOZC in a certain way based on the English alphabetical order. In the same way, KKDY is related to OGHU. To which of the given options is SCLQ related, following the same logic?

**A) VZPL B) WYPM C) WZOL D) XYQN**

Date: 10/06/2025 Time: 12:45 PM - 2:15 PM Right: 86.14% Wrong: 8.95%

**Q110)** In a certain code language, 'MAZE' is coded as '3647' and 'ZIPS' is coded as '1275'. What is the code for 'Z' in the given code language?

**A) 2 B) 7 C) 1 D) 4**

Date: 20/06/2025 Time: 9:00 AM - 10:30 AM Right: 86.33% Wrong: 7.19%

**Q111)** In a certain code language, 'CURE' is coded as '3527' and 'EATS' is coded as '1246'. What is the code for 'E' in the given code language?

**A) 1 B) 2 C) 6 D) 7**

Date: 19/06/2025 Time: 4:30 PM - 6:00 PM Right: 86.39% Wrong: 7.35%

**Q112)** In the following triads, each group of letters is related to the subsequent one following a certain logic. Select from the given options, the one that follows the same logic.

SAND - DSNA - SDAN

GUNT - TGNU - GTUN

**A) JUNK - KJNU - JKUN B) SEAL - ESAL - LEAS C) FEAR - RFEA - EARF D) POLE - EPLO - POEL**

Date: 24/06/2025 Time: 4:30 PM - 6:00 PM Right: 86.42% Wrong: 7.80%

**Q113)** In a certain code language, 'BEST' is coded as '4568' and 'STAB' is coded as '8965'. What is the code for 'A' in the given code language?

**A) 6 B) 5 C) 9 D) 8**

Date: 16/06/2025 Time: 4:30 PM - 6:00 PM Right: 86.49% Wrong: 9.73%

**Q114)** In a certain code language, 'NEST' is coded as '4683' and 'SOUP' is coded as '2319'. What is the code for 'S' in the given code language?

**A) 3 B) 1 C) 9 D) 2**

Date: 23/06/2025 Time: 12:45 PM - 2:15 PM Right: 86.50% Wrong: 7.53%

**Q115)** In a certain code language, 'HIRE' is coded as '7539' and 'INKS' is coded as '2496'. What is the code for 'I' in the given code language?

**A) 2 B) 9 C) 6 D) 5**

Date: 11/06/2025 Time: 4:30 PM - 6:00 PM Right: 86.51% Wrong: 5.79%

**Q116)** VAGL is related to PUAf in a certain way based on the English alphabetical order. In the same way, XCIN is related to RWCH. To which of the following options is FKQV related, following the same logic?

**A) ZPEK B) ZEKp C) ZPKE D) ZEPK**

Date: 24/06/2025 Time: 12:45 PM - 2:15 PM Right: 86.51% Wrong: 4.40%

Q117) In a certain code language, 'PANT' is coded as '6129' and 'TAPE' is coded as '2956'. What is the code for 'E' in the given code language?

A) 9 B) 6 C) 2 D) 5

Date: 14/06/2025 Time: 9:00 AM - 10:30 AM Right: 86.65% Wrong: 8.59%

Q118) In a certain code language, 'HEIR' is coded as '2468' and 'EASY' is coded as '1327'. What is the code for 'E' in the given code language?

A) 1 B) 2 C) 4 D) 7

Date: 10/06/2025 Time: 9:00 AM - 10:30 AM Right: 86.70% Wrong: 6.00%

Q119) In a certain code language, 'GIVE' is coded as '4628' and 'VOLT' is coded as '3567'. What is the code for 'V' in the given code language?

A) 2 B) 5 C) 6 D) 3

Date: 05/06/2025 Time: 12:45 PM - 2:15 PM Right: 86.78% Wrong: 7.50%

Q120) In a certain code language, 'WILD' is coded as '5391' and 'DOGS' is coded as '2458'. What is the code for 'D' in the given code language?

A) 1 B) 4 C) 2 D) 5

Date: 14/06/2025 Time: 12:45 PM - 2:15 PM Right: 86.79% Wrong: 7.31%

Q121) In a certain code language, 'YOUR' is coded as '5683' and 'UNIT' is coded as '2519'. What is the code for 'U' in the given code language?

A) 5 B) 8 C) 9 D) 2

Date: 23/06/2025 Time: 12:45 PM - 2:15 PM Right: 86.85% Wrong: 6.57%

Q122) What should come in place of the question mark (?) in the given series based on the English alphabetical order?  
GUR QEB AOL KYV ?

A) FIU B) UFI C) FUI D) UIF

Date: 21/06/2025 Time: 9:00 AM - 10:30 AM Right: 86.87% Wrong: 6.58%

Q123) In a certain code language, 'CARE' is coded as '5391' and 'RIBS' is coded as '2458'. What is the code for 'R' in the given code language?

A) 9 B) 2 C) 5 D) 8

Date: 14/06/2025 Time: 9:00 AM - 10:30 AM Right: 87.00% Wrong: 7.26%

Q124) In a certain code language, 'FARE' is coded as '8432' and 'FEAT' is coded as '3287'. What is the code for 'R' in the given code language?

A) 2 B) 3 C) 8 D) 4

Date: 12/06/2025 Time: 4:30 PM - 6:00 PM Right: 87.03% Wrong: 10.17%

**Q125)** Select the pair that follows the same pattern as that followed by the two sets of pairs given below.  
Both pairs follow the same pattern.

JAY : MDB

PAN : SDQ

**A) HEN : KHJ   B) RIC : ULZ   C) KUT : HRW   D) UPC : XSF**

Date: 06/06/2025   Time: 4:30 PM - 6:00 PM   Right: 87.08%   Wrong: 9.49%

**Q126)** In a certain code language, 'VEST' is coded as '3649' and 'SOAP' is coded as '1295'. What is the code for 'S' in the given code language?

**A) 4   B) 2   C) 9   D) 1**

Date: 20/06/2025   Time: 9:00 AM - 10:30 AM   Right: 87.10%   Wrong: 6.48%

**Q127)** In a certain code language, 'SOUP' is coded as '5173' and 'PINT' is coded as '4216'. What is the code for 'P' in the given code language?

**A) 1   B) 4   C) 6   D) 3**

Date: 23/06/2025   Time: 9:00 AM - 10:30 AM   Right: 87.25%   Wrong: 6.23%

**Q128)** If 2 is added to each even digit and 1 is subtracted from each odd digit in the number 6193425, how many digits will appear more than once in the new number thus formed?

**A) Two   B) Three   C) None   D) One**

Date: 12/06/2025   Time: 9:00 AM - 10:30 AM   Right: 87.29%   Wrong: 10.14%

**Q129)** GQCN is related to LNHK in a certain way based on the English alphabetical order. In the same way, QKMH is related to VHRE. To which of the given options is AEWB related, following the same logic?

**A) FABX   B) GCAZ   C) EBCX   D) FBBY**

Date: 11/06/2025   Time: 4:30 PM - 6:00 PM   Right: 87.30%   Wrong: 7.20%

**Q130)** In a certain code language, 'PREY' is coded as '6482' and 'YOLK' is coded as '3671'. What is the code for 'Y' in the given code language?

**A) 3   B) 6   C) 1   D) 2**

Date: 12/06/2025   Time: 9:00 AM - 10:30 AM   Right: 87.32%   Wrong: 6.18%

**Q131)** In a certain code language, 'HUNT' is coded as '3517' and 'TIME' is coded as '2458'. What is the code for 'T' in the given code language?

**A) 7   B) 8   C) 2   D) 5**

Date: 10/06/2025   Time: 4:30 PM - 6:00 PM   Right: 87.38%   Wrong: 5.37%

**Q132)** In a certain code language, 'NEWS' is coded as '6482' and 'WORK' is coded as '3671'. What is the code for 'W' in the given code language?

**A) 8 B) 6 C) 1 D) 3**

Date: 12/06/2025 Time: 9:00 AM - 10:30 AM Right: 87.40% Wrong: 5.50%

**Q133)** In a certain code language, 'GIFT' is coded as '4268' and 'TURN' is coded as '3527'. What is the code for 'T' in the given code language?

**A) 2 B) 3 C) 6 D) 7**

Date: 17/06/2025 Time: 9:00 AM - 10:30 AM Right: 87.41% Wrong: 7.01%

**Q134)** In a certain code language, 'GIVE' is coded as '6482' and 'VOLT' is coded as '3671'. What is the code for 'V' in the given code language?

**A) 3 B) 6 C) 8 D) 7**

Date: 13/06/2025 Time: 9:00 AM - 10:30 AM Right: 87.42% Wrong: 6.14%

**Q135)** In a certain code language, 'FUSE' is coded as '6482' and 'SORT' is coded as '3671'. What is the code for 'S' in the given code language?

**A) 6 B) 1 C) 3 D) 8**

Date: 13/06/2025 Time: 4:30 PM - 6:00 PM Right: 87.43% Wrong: 6.47%

**Q136)** In a certain code language, 'ROPE' is coded as '5391' and 'OILY' is coded as '2458'. What is the code for 'O' in the given code language?

**A) 8 B) 5 C) 3 D) 2**

Date: 16/06/2025 Time: 12:45 PM - 2:15 PM Right: 87.46% Wrong: 5.09%

**Q137)** In a certain code language, 'BRAVE' is coded as '29317' and 'VIBER' is coded as '38792'. What is the code for 'A' in the given code language?

**A) 7 B) 2 C) 1 D) 9**

Date: 06/06/2025 Time: 12:45 PM - 2:15 PM Right: 87.50% Wrong: 5.31%

**Q138)** In a certain code language, 'CURE' is coded as '5783' and 'RIGS' is coded as '2179'. What is the code for 'R' in the given code language?

**A) 2 B) 1 C) 8 D) 7**

Date: 24/06/2025 Time: 4:30 PM - 6:00 PM Right: 87.51% Wrong: 6.60%

**Q139)** In a certain code language, 'FAIR' is coded as '9357' and 'ROSE' is coded as '8632'. What is the code for R' in the given code language?

**A) 2 B) 8 C) 7 D) 3**

Date: 16/06/2025 Time: 4:30 PM - 6:00 PM Right: 87.52% Wrong: 7.11%

Q140) In a certain code language, 'BOLT' is coded as '4195' and 'TOLD' is coded as '4529'. What is the code for 'D' in the given code language?

A) 4 B) 2 C) 5 D) 9

Date: 18/06/2025 Time: 9:00 AM - 10:30 AM Right: 87.54% Wrong: 8.11%

Q141) In a certain code language, 'CART' is coded as '4268' and 'RISE' is coded as '3527'. What is the code for 'R' in the given code language?

A) 2 B) 6 C) 7 D) 3

Date: 17/06/2025 Time: 12:45 PM - 2:15 PM Right: 87.59% Wrong: 6.82%

Q142) In a certain code language, 'LINK' is coded as '9236' and 'SINK' is coded as '6349'. What is the code for 'S' in the given code language?

A) 3 B) 6 C) 9 D) 4

Date: 20/06/2025 Time: 9:00 AM - 10:30 AM Right: 87.62% Wrong: 8.54%

Q143) In a certain code language, 'KITE' is coded as '3641' and 'LACK' is coded as '1295'. What is the code for 'K' in the given code language?

A) 4 B) 1 C) 5 D) 2

Date: 21/06/2025 Time: 12:45 PM - 2:15 PM Right: 87.62% Wrong: 7.25%

Q144) In a certain code language, 'LIKE' is coded as '5738' and 'TASK' is coded as '2819'. What is the code for 'K' in the given code language?

A) 8 B) 9 C) 2 D) 3

Date: 24/06/2025 Time: 4:30 PM - 6:00 PM Right: 87.68% Wrong: 6.49%

Q145) In a certain code language, 'COAT' is coded as '2486' and 'PALE' is coded as '5712'.

What is the code for 'A' in the given code language?

A) 5 B) 7 C) 2 D) 8

Date: 14/06/2025 Time: 9:00 AM - 10:30 AM Right: 87.69% Wrong: 6.31%

Q146) In the following triads, each group of letters is related to the subsequent one following a certain logic. Select from the given options, the one that follows the same logic.

BACK - ABCK - BCKA

MINO - IMNO - MNOI

A) RANK - ARNK - ANKR B) CLIP - LCIP - PLIC C) CAGE - CGAE - EGAC D) TEAR - ETAR - TARE

Date: 23/06/2025 Time: 9:00 AM - 10:30 AM Right: 87.73% Wrong: 7.26%

Q147) In a certain code language, 'GATE' is coded as '4628' and 'TURN' is coded as '3567'. What is the code for 'T' in the given code language?

A) 4 B) 6 C) 3 D) 2

Date: 06/06/2025 Time: 12:45 PM - 2:15 PM Right: 87.78% Wrong: 6.20%

Q148) In a certain code language, 'PEAR' is coded as '7481' and 'DEAR' is coded as '7154'. What is the code for 'D' in the given code language?

A) 7 B) 4 C) 1 D) 5

Date: 19/06/2025 Time: 9:00 AM - 10:30 AM Right: 87.89% Wrong: 7.90%

Q149) In a certain code language, 'MUTE' is coded as '3517' and 'EARS' is coded as '2458'. What is the code for 'E' in the given code language?

A) 7 B) 5 C) 2 D) 8

Date: 06/06/2025 Time: 9:00 AM - 10:30 AM Right: 87.93% Wrong: 3.91%

Q150) In a certain code language, 'GATE' is coded as '3647' and 'WING' is coded as '1265'. What is the code for 'G' in the given code language?

A) 3 B) 5 C) 6 D) 7

Date: 21/06/2025 Time: 4:30 PM - 6:00 PM Right: 87.97% Wrong: 6.55%

Q151) In a certain code language, 'FISH' is coded as '6147' and 'SALE' is coded as '9512'. What is the code for 'S' in the given code language?

A) 5 B) 4 C) 9 D) 1

Date: 16/06/2025 Time: 9:00 AM - 10:30 AM Right: 88.00% Wrong: 6.93%

Q152) In a certain code language, 'FISH' is coded as '6458' and 'HAVE' is coded as '5723'. What is the code for 'H' in the given code language?

A) 5 B) 7 C) 8 D) 2

Date: 18/06/2025 Time: 4:30 PM - 6:00 PM Right: 88.04% Wrong: 5.39%

Q153) If 1 is added to each odd digit and 2 is subtracted from each even digit in the number 7643185, what will be difference between the highest and lowest digits in the number thus formed?

A) 4 B) 7 C) 5 D) 6

Date: 19/06/2025 Time: 9:00 AM - 10:30 AM Right: 88.10% Wrong: 8.43%

Q154) If 2 is added to each even digit and 1 is subtracted from each odd digit in the number 415796, what will be the sum of the digits which are fifth from the left and first from the right in the new number thus formed?

A) 14 B) 10 C) 16 D) 12

Date: 06/06/2025 Time: 4:30 PM - 6:00 PM Right: 88.12% Wrong: 7.68%

**Q155)** If 1 is added to each odd digit and 2 is subtracted from each even digit in the number 7235614, then which of the following digits will be second from the left?

**A) 2 B) 4 C) 0 D) 7**

Date: 17/06/2025 Time: 12:45 PM - 2:15 PM Right: 88.13% Wrong: 9.09%

**Q156)** In a certain code language, 'BEAR' is coded as '4567' and 'RUIN' is coded as '1234'. What is the code for 'R' in the given code language?

**A) 4 B) 7 C) 2 D) 1**

Date: 18/06/2025 Time: 4:30 PM - 6:00 PM Right: 88.19% Wrong: 6.26%

**Q157)** In a certain code language, 'OWNS' is coded as '5391' and 'SIDE' is coded as '2458'. What is the code for 'S' in the given code language?

**A) 1 B) 5 C) 4 D) 2**

Date: 13/06/2025 Time: 12:45 PM - 2:15 PM Right: 88.22% Wrong: 6.05%

**Q158)** In a certain code language, 'LIKE' is coded as '6284' and 'HAIR' is coded as '9578'.

What is the code for 'I' in the given code language?

**A) 9 B) 2 C) 8 D) 7**

Date: 13/06/2025 Time: 12:45 PM - 2:15 PM Right: 88.22% Wrong: 6.44%

**Q159)** VBDP is related to ZWHK in a certain way based on the English alphabetical order. In the same way, DRLF is related to HMPA. To which of the following is LHTV related, following the same logic?

**A) OCWR B) QBYR C) QDYP D) PCXQ**

Date: 11/06/2025 Time: 12:45 PM - 2:15 PM Right: 88.35% Wrong: 4.94%

**Q160)** In a certain code language, 'DISH' is coded as '4268' and 'HUNT' is coded as '3527'. What is the code for 'H' in the given code language?

**A) 2 B) 7 C) 6 D) 3**

Date: 18/06/2025 Time: 12:45 PM - 2:15 PM Right: 88.50% Wrong: 6.52%

**Q161)** Select the pair that follows the same pattern as that followed by the two pairs given below. Both pairs follow the same pattern.

HLF : JOH

UYR : WBT

**A) SFJ : UIL B) SEK : VRT C) MPQ : RMT D) MFL : XRL**

Date: 17/06/2025 Time: 4:30 PM - 6:00 PM Right: 88.52% Wrong: 3.92%

**Q162)** In a certain code language, 'LIFE' is coded as '4268' and 'FUND' is coded as '3527'. What is the code for 'F' in the given code language?

**A) 6 B) 3 C) 2 D) 7**

Date: 17/06/2025 Time: 4:30 PM - 6:00 PM Right: 88.52% Wrong: 5.81%

**Q163)** Select the pair that follows the same pattern as that followed by the two sets of pairs given below. Both pairs follow the same pattern.

PIL : TMP

NAP : RET

**A) NLI : JPM B) SWT : WAX C) SPL : WLH D) BGM : GKQ**

Date: 05/06/2025 Time: 4:30 PM - 6:00 PM Right: 88.55% Wrong: 6.97%

**Q164)** Find the average of all prime numbers between 20 and 40.

**A) 25 B) 28 C) 30 D) 20**

Date: 14/06/2025 Time: 12:45 PM - 2:15 PM Right: 88.58% Wrong: 7.99%

**Q165)** In a certain code language, 'PAID' is coded as '3517' and 'ARCS' is coded as '2458'. What is the code for 'A' in the given code language?

**A) 2 B) 7 C) 8 D) 5**

Date: 09/06/2025 Time: 12:45 PM - 2:15 PM Right: 88.63% Wrong: 4.70%

**Q166)** In a certain code language, 'MUST' is coded as '4268' and 'SALE' is coded as '3527'. What is the code for 'S' in the given code language?

**A) 7 B) 2 C) 3 D) 6**

Date: 16/06/2025 Time: 9:00 AM - 10:30 AM Right: 88.64% Wrong: 6.05%

**Q167)** In a certain code language, 'MEAN' is coded as '6248' and 'AIDS' is coded as '5721'. What is the code for 'A' in the given code language?

**A) 5 B) 7 C) 4 D) 2**

Date: 16/06/2025 Time: 9:00 AM - 10:30 AM Right: 88.64% Wrong: 5.62%

**Q168)** In a certain code language, 'NOSE' is coded as '3517' and 'OILY' is coded as '2458'. What is the code for 'O' in the given code language?

**A) 1 B) 5 C) 2 D) 7**

Date: 09/06/2025 Time: 4:30 PM - 6:00 PM Right: 88.74% Wrong: 4.99%

**Q169)** Select the triad that follows the same pattern as that followed by the two triads given below. Both triads follow the same pattern.

JF-LH-NP

HD-JF-LN

**A)** KH-NI-PS **B)** LH-NJ-PS **C)** KH-NJ-PS **D)** LH-NJ-PR

Date: 12/06/2025 Time: 4:30 PM - 6:00 PM Right: 88.78% Wrong: 6.21%

**Q170)** YRUO is related to QJMG in a certain way based on the English alphabetical order. In the same way, SLOI is related to KDGA. To which of the given options is UNQK related, following the same logic?

**A)** MIFC **B)** MIOP **C)** MFCI **D)** MFIC

Date: 24/06/2025 Time: 9:00 AM - 10:30 AM Right: 88.84% Wrong: 3.72%

**Q171)** Select the pair that follows the same pattern as that followed by the two pairs given below. Both pairs follow the same pattern.

MWC : JYA

KUR : HWP

**A)** PAY : MGT **B)** WTH : PUR **C)** JVP : GXN **D)** SLV : QPS

Date: 20/06/2025 Time: 12:45 PM - 2:15 PM Right: 88.85% Wrong: 5.19%

**Q172)** Select the pair that follows the same pattern as that followed by the two pairs given below. Both pairs follow the same pattern.

HMP : KON

USQ : XUO

**A)** KWZ : GSC **B)** DLV : GNT **C)** DWP : JZI **D)** BIO : FNK

Date: 19/06/2025 Time: 12:45 PM - 2:15 PM Right: 88.86% Wrong: 3.29%

**Q173)** In a certain code language, 'JAIL' is coded as '3457' and 'ARCS' is coded as '1265'. What is the code for 'A' in the given code language?

**A)** 4 **B)** 1 **C)** 5 **D)** 6

Date: 19/06/2025 Time: 12:45 PM - 2:15 PM Right: 88.86% Wrong: 5.11%

**Q174)** In a certain code language, 'CARD' is coded as '4681' and 'DOGS' is coded as '3219'. What is the code for 'D' in the given code language?

**A)** 1 **B)** 2 **C)** 4 **D)** 3

Date: 21/06/2025 Time: 9:00 AM - 10:30 AM Right: 88.88% Wrong: 5.30%

**Q175)** Select the triad that follows the same pattern as that followed by the two triads given below. Both triads follow the same pattern.

NJ-QM-TV

JF-MI-PR

**A)** GB-ID-LM **B)** FB-IE-LM **C)** GB-IE-LM **D)** FB-IE-LN

Date: 13/06/2025 Time: 4:30 PM - 6:00 PM Right: 88.91% Wrong: 6.56%

**Q176)** In a certain code language, 'HUNT' is coded as '6438' and 'USER' is coded as '5723'. What is the code for 'U' in the given code language?

**A)** 3 **B)** 5 **C)** 7 **D)** 4

Date: 17/06/2025 Time: 12:45 PM - 2:15 PM Right: 88.94% Wrong: 5.23%

**Q177)** In a certain code language, 'MICE' is coded as '6398' and 'PEAR' is coded as '3215'. What is the code for 'E' in the given code language?

**A)** 2 **B)** 5 **C)** 3 **D)** 8

Date: 17/06/2025 Time: 4:30 PM - 6:00 PM Right: 88.96% Wrong: 5.16%

**Q178)** In the following triads, each group of letters is related to the subsequent one following a certain logic. Select from the given options, the one that follows the same logic.

SAME - AEMS - EMAS

GOAL - OLAG - LAOG

**A)** LEAN - ELAN - NEAL **B)** SINK - IKNS - KNIS **C)** YEAK - YAEK - KAEY **D)** RIPE - IRPE - EIPR

Date: 24/06/2025 Time: 12:45 PM - 2:15 PM Right: 88.98% Wrong: 3.79%

**Q179)** In a certain code language, 'MOVE' is coded as '4826' and 'IRON' is coded as '1352'.

What is the code for 'O' in the given code language?

**A)** 5 **B)** 8 **C)** 2 **D)** 4

Date: 13/06/2025 Time: 4:30 PM - 6:00 PM Right: 89.00% Wrong: 5.52%

**Q180)** In a certain code language, 'SING' is coded as '9137' and 'TURN' is coded as '8496'. What is the code for 'N' in the given code language?

**A)** 9 **B)** 7 **C)** 3 **D)** 6

Date: 17/06/2025 Time: 12:45 PM - 2:15 PM Right: 89.03% Wrong: 5.29%

**Q181)** If 2 is added to each even digit and 1 is subtracted from each odd digit in the number 6435127, what will be the sum of the second digit from the left and the third digit from the right in the new number thus formed?

**A) 4 B) 10 C) 8 D) 6**

Date: 05/06/2025 Time: 4:30 PM - 6:00 PM Right: 89.13% Wrong: 7.15%

**Q182)** In a certain code language, 'RATS' is coded as '3571' and 'TUBE' is coded as '2146'. What is the code for 'T' in the given code language?

**A) 2 B) 1 C) 7 D) 6**

Date: 18/06/2025 Time: 12:45 PM - 2:15 PM Right: 89.14% Wrong: 5.10%

**Q183)** In a certain code language, 'FIRE' is coded as '5371' and 'ACID' is coded as '8247'.

What is the code for 'I' in the given code language?

**A) 3 B) 2 C) 4 D) 7**

Date: 14/06/2025 Time: 12:45 PM - 2:15 PM Right: 89.38% Wrong: 5.32%

**Q184)** In a certain code language, 'NEAR' is coded as '3571' and 'WINK' is coded as '2346'. What is the code for 'N' in the given code language?

**A) 7 B) 4 C) 1 D) 3**

Date: 18/06/2025 Time: 4:30 PM - 6:00 PM Right: 89.41% Wrong: 4.98%

**Q185)** In a certain code language, 'MANY' is coded as '5391' and 'ARCS' is coded as '2458'. What is the code for 'A' in the given code language?

**A) 5 B) 3 C) 2 D) 8**

Date: 16/06/2025 Time: 4:30 PM - 6:00 PM Right: 89.43% Wrong: 5.17%

**Q186)** In a certain code language, 'BLUE' is coded as '4628' and 'LOAD' is coded as '3567'. What is the code for 'L' in the given code language?

**A) 3 B) 6 C) 7 D) 8**

Date: 06/06/2025 Time: 12:45 PM - 2:15 PM Right: 89.44% Wrong: 4.78%

**Q187)** In a certain code language, 'GATE' is coded as '6148' and 'TIPS' is coded as '5721'. What is the code for 'T' in the given code language?

**A) 4 B) 1 C) 7 D) 5**

Date: 17/06/2025 Time: 4:30 PM - 6:00 PM Right: 89.53% Wrong: 4.78%

**Q188)** In a certain code language, 'CALM' is coded as '2468' and 'LIVE' is coded as '8537'. What is the code for 'L' in the given language?

**A) 6 B) 8 C) 7 D) 3**

Date: 17/06/2025 Time: 9:00 AM - 10:30 AM Right: 89.56% Wrong: 4.62%

**Q189)** In a certain code language, 'PICK' is coded as '4628' and 'COST' is coded as '3567'. What is the code for 'C' in the given code language?

**A) 3 B) 2 C) 7 D) 6**

Date: 06/06/2025 Time: 4:30 PM - 6:00 PM Right: 89.62% Wrong: 5.13%

**Q190)** In a certain code language, 'COIL' is coded as '3457' and 'OPEN' is coded as '1246'. What is the code for 'O' in the given code language?

**A) 4 B) 2 C) 1 D) 3**

Date: 19/06/2025 Time: 12:45 PM - 2:15 PM Right: 89.73% Wrong: 4.56%

**Q191)** In a certain code language, 'RACE' is coded as '6259' and 'ANTS' is coded as '7941'. What is the code for 'A' in the given code language?

**A) 7 B) 9 C) 1 D) 2**

Date: 18/06/2025 Time: 9:00 AM - 10:30 AM Right: 89.77% Wrong: 4.62%

**Q192)** In the following triads, each group of letters is related to the subsequent one following a certain logic. Select from the given options, the one that follows the same logic.

GOAL - GLAO - LAOG

COMB - CBMO - BMOC

**A) OVEL - OVLE - VELO B) WISH - WHSI - HSIW C) TING - ITNG - GINT D) LOST - LSOT - TSOL**

Date: 23/06/2025 Time: 4:30 PM - 6:00 PM Right: 89.82% Wrong: 4.10%

**Q193)** LQRU is related to ONTS in a certain way based on the English alphabetical order. In the same way, RKVQ is related to UHXO. To which of the given options is XEZM related, following the same logic?

**A) BCAF B) BABJ C) ABBK D) ZBZL**

Date: 09/06/2025 Time: 4:30 PM - 6:00 PM Right: 89.92% Wrong: 5.88%

**Q194)** In a certain code language, 'LIPS' is coded as '4628' and 'PURE' is coded as '3567'. What is the code for 'P' in the given code language?

**A) 2 B) 7 C) 6 D) 3**

Date: 06/06/2025 Time: 4:30 PM - 6:00 PM Right: 90.01% Wrong: 4.98%

**Q195)** MQIL is related to FJBE in a certain way based on the English alphabetical order. In the same way, OSKN is related to HLDG. To which of the given options is QUMP related, following the same logic?

- A) NJFI B) JNIF C) JNFI D) NJIF**

Date: 23/06/2025 Time: 4:30 PM - 6:00 PM Right: 90.01% Wrong: 4.20%

**Q196)** EUQF is related to BPNA in a certain way based on the English alphabetical order. In the same way, YKKV is related to VFHQ. To which of the given options is SAEL related, following the same logic?

- A) QWCH B) OVAG C) QUVH D) PVBG**

Date: 10/06/2025 Time: 4:30 PM - 6:00 PM Right: 90.11% Wrong: 5.48%

**Q197)** In a certain code language, 'OILY' is coded as '1357' and 'LACE' is coded as '8643'. What is the code for 'L' in the given language?

- A) 3 B) 5 C) 7 D) 8**

Date: 18/06/2025 Time: 9:00 AM - 10:30 AM Right: 90.15% Wrong: 4.79%

**Q198)** MBKF is related to OGMK in a certain way based on the English alphabetical order. In the same way, QLOP is related to SQQU. To which of the given options is UVSZ related, following the same logic?

- A) VBUD B) WAUE C) XZVF D) WBTD**

Date: 11/06/2025 Time: 9:00 AM - 10:30 AM Right: 90.24% Wrong: 4.56%

**Q199)** Select the pair that follows the same pattern as that followed by the two pairs given below. Both pairs follow the same pattern.

KNR : HKS

TGK : QDL

- A) LOQ : FJU B) FXL : CUM C) HMI : DKL D) GCP : EHR**

Date: 18/06/2025 Time: 9:00 AM - 10:30 AM Right: 90.35% Wrong: 3.28%

**Q200)** FARM is related to CXOJ in a certain way based on the English alphabetical order. In the same way, FRESH is related to COBPE. To which of the given options is RICH related, following the same logic?

- A) OEZF B) OFZE C) OFZF D) OEZE**

Date: 05/06/2025 Time: 9:00 AM - 10:30 AM Right: 90.47% Wrong: 5.08%

**Q201)** If 1 is added to each odd digit and 2 is subtracted from each even digit in the number 7134856, which of the following digits will be second from the left in the new number thus formed?

- A) 3 B) 2 C) 4 D) 1**

Date: 19/06/2025 Time: 9:00 AM - 10:30 AM Right: 90.52% Wrong: 5.67%

**Q202)** In a certain code language, 'DEAF' is coded as '6458' and 'FLIP' is coded as '4723'. What is the code for 'F' in the given code language?

- A) 2 B) 7 C) 8 D) 4**

Date: 18/06/2025 Time: 12:45 PM - 2:15 PM Right: 90.53% Wrong: 4.14%

**Q203)** SUZD is related to ZBGK in a certain way based on the English alphabetical order. In the same way, UWBF is related to BDIM. To which of the following options is PRWA related, following the same logic?

- A) WDHY B) WYHD C) WDUH D) WYDH**

Date: 21/06/2025 Time: 9:00 AM - 10:30 AM Right: 90.69% Wrong: 3.77%

**Q204)** If 1 is added to each even digit and 1 is added to each odd digit in the number 7142568, what will be the sum of the first digit from the left and the first digit from the right in the new number thus formed?

- A) 15 B) 14 C) 17 D) 10**

Date: 13/06/2025 Time: 9:00 AM - 10:30 AM Right: 90.72% Wrong: 6.29%

**Q205)** PSKO is related to ILDH in a certain way based on the English alphabetical order. In the same way, RUMQ is related to KNFJ. To which of the given options is TWOS related, following the same logic?

- A) PMLH B) MPLH C) MPHL D) PMHL**

Date: 23/06/2025 Time: 9:00 AM - 10:30 AM Right: 90.80% Wrong: 3.55%

**Q206)** Select the pair that follows the same pattern as that followed by the two pairs given below. Both pairs follow the same pattern.

HKO : FJM

DPY : BOW

- A) WGO : SCJ B) BPS : AKI C) TRK : RQI D) BZI : WVD**

Date: 18/06/2025 Time: 4:30 PM - 6:00 PM Right: 90.93% Wrong: 3.52%

**Q207)** MILK is related to TPSR in a certain way based on the English alphabetical order. In the same way, POT is related to WVA. To which of the given options is NATION related, following the same logic?

- A) UHAPVU B) UHAPUV C) UHAPUU D) UHAAUV**

Date: 05/06/2025 Time: 4:30 PM - 6:00 PM Right: 90.96% Wrong: 4.49%

**Q208)** Select the pair that follows the same pattern as that followed by the two pairs given below. Both pairs follow the same pattern.

TJR : PKT

DHQ : ZIS

**A) XBG : TCI B) EMT : CQX C) KOS : IQV D) CRJ : BTN**

Date: 19/06/2025 Time: 9:00 AM - 10:30 AM Right: 91.05% Wrong: 2.51%

**Q209)** ZRVY is related to TLPS in a certain way based on the English alphabetical order. In the same way, WOSV is related to QIMP. To which of the given options is UMQT related, following the same logic?

**A) OGNK B) OGKN C) GONK D) GOKN**

Date: 20/06/2025 Time: 9:00 AM - 10:30 AM Right: 91.24% Wrong: 3.53%

**Q210)** RUYQ is related to KNRJ in a certain way based on the English alphabetical order. In the same way, ORVN is related to HKOG. To which of the given options is LOSK related, following the same logic?

**A) HELD B) HEDL C) EHL D) EHL**

Date: 20/06/2025 Time: 4:30 PM - 6:00 PM Right: 91.36% Wrong: 3.77%

**Q211)** KORJ is related to DHKC in a certain way based on the English alphabetical order. In the same way, IMPH is related to BFIA. To which of the given options is NRUM related, following the same logic?

**A) KGFN B) GKNF C) KGNF D) GKFN**

Date: 21/06/2025 Time: 4:30 PM - 6:00 PM Right: 91.67% Wrong: 2.85%

**Q212)** DTUH is related to BQWK in a certain way based on the English alphabetical order. In the same way, ZNYN is related to XKAQ. To which of the given options is VHCT related, following the same logic?

**A) SFEV B) SEDX C) UDFX D) TEEW**

Date: 10/06/2025 Time: 4:30 PM - 6:00 PM Right: 92.00% Wrong: 4.63%

**Q213)** KARJ is related to NDUM in a certain way based on the English alphabetical order. In the same way, PLBF is related to SOEI. To which of the following is SCHQ related, following the same logic?

**A) UFNR B) VELT C) VFKT D) UEMR**

Date: 19/06/2025 Time: 9:00 AM - 10:30 AM Right: 92.10% Wrong: 4.74%

**Q214)** LIQM is related to JGOK in a certain way based on the English alphabetical order. In the same way, IFNJ is related to GDLH. To which of the given options is OLTP related, following the same logic?

**A) JMRN B) JMNR C) MJNR D) MJRN**

Date: 18/06/2025 Time: 4:30 PM - 6:00 PM Right: 92.12% Wrong: 3.83%

**Q215)** In a certain code language, 'shirt mile vow' is coded as 'sh dx rk' and 'pie vow fork' is coded as 'gg ne sh'. How is 'vow' coded in the given language?

- A)** rk **B)** gg **C)** sh **D)** dx

Date: 24/06/2025 Time: 12:45 PM - 2:15 PM Right: 92.17% Wrong: 4.60%

**Q216)** Select the pair that follows the same pattern as that followed by the two pairs given below. Both pairs follow the same pattern.

LQM : NSN

ETG : GVH

- A)** BKL : FJL **B)** GHM : KMO **C)** WHO : XZQ **D)** BRQ : DTR

Date: 18/06/2025 Time: 12:45 PM - 2:15 PM Right: 92.53% Wrong: 2.78%

**Q217)** TLOS is related to NFIM in a certain way based on the English alphabetical order. In the same way, VNQU is related to PHKO. To which of the given options is XPSW related, following the same logic?

- A)** JRQM **B)** RJMQ **C)** RJQM **D)** JRMQ

Date: 21/06/2025 Time: 12:45 PM - 2:15 PM Right: 92.86% Wrong: 3.09%

**Q218)** What should come in place of the question mark (?) in the given series based on the English alphabetical order?

XQS VOQ TMO RKM ?

- A)** PJL **B)** PIL **C)** PIK **D)** PJK

Date: 23/06/2025 Time: 4:30 PM - 6:00 PM Right: 92.86% Wrong: 4.82%

**Q219)** What should come in place of the question mark (?) in the given series based on the English alphabetical order?

RUW PSU NQS LOQ ?

- A)** JMO **B)** JMP **C)** JNP **D)** JNO

Date: 17/06/2025 Time: 12:45 PM - 2:15 PM Right: 92.94% Wrong: 5.14%

**Q220)** What should come in place of the question mark (?) in the given series based on the English alphabetical order?

UNP SLN QJL OHJ ?

- A)** MEH **B)** MFH **C)** MFG **D)** MEG

Date: 16/06/2025 Time: 12:45 PM - 2:15 PM Right: 92.95% Wrong: 4.12%

**Q221)** What should come in place of the question mark (?) in the given series based on the English alphabetical order?

TWY RUW PSU NQS ?

**A) LOR B) LPR C) LOQ D) LPQ**

Date: 23/06/2025 Time: 12:45 PM - 2:15 PM Right: 93.05% Wrong: 4.54%

**Q222)** ASXZ is related to DVAC in a certain way based on the English alphabetical order. In the same way, MEJL is related to PHMO. To which of the following options is VNSU related, following the same logic?

**A) YQVX B) YQXV C) YVXQ D) YVQX**

Date: 20/06/2025 Time: 9:00 AM - 10:30 AM Right: 93.12% Wrong: 2.09%

**Q223)** RWKA is related to TULZ in a certain way based on the English alphabetical order. In the same way, VSMY is related to XQNX. To which of the given options is ZOOW related, following the same logic?

**A) BMPV B) CLQU C) ALOV D) CNPW**

Date: 06/06/2025 Time: 12:45 PM - 2:15 PM Right: 93.34% Wrong: 3.54%

**Q224)** In a certain code language, 'rough and ready' is coded as 'mo hp km' and 'road is rough' is coded as 'tx km bn'. How is 'rough' coded in the given language?

**A) hp B) tx C) bn D) km**

Date: 23/06/2025 Time: 4:30 PM - 6:00 PM Right: 93.42% Wrong: 4.14%

**Q225)** In a certain code language, 'LOST' is coded as '6832' and 'SALT' is coded as '2136'. What is the code for 'A' in the given code language?

**A) 3 B) 6 C) 1 D) 2**

Date: 19/06/2025 Time: 4:30 PM - 6:00 PM Right: 93.50% Wrong: 2.69%

**Q226)** Which of the following letter-number clusters will replace the question mark (?) in the given series to make it logically complete?

LEJ21 MFK32 NGL43 OHM54 ?

**A) PIM65 B) PIN65 C) PIM66 D) PIN66**

Date: 18/06/2025 Time: 12:45 PM - 2:15 PM Right: 93.60% Wrong: 4.20%

**Q227)** What should come in place of the question mark (?) in the given series based on the English alphabetical order?

TMP RKN PIL NGJ ?

**A) LEG B) LFH C) LFG D) LEH**

Date: 16/06/2025 Time: 9:00 AM - 10:30 AM Right: 93.65% Wrong: 4.38%

**Q228)** What should come in place of the question mark (?) in the given series based on the English alphabetical order?

YRU WPS UNQ SLO ?

**A) QIM B) QJN C) QJM D) QIN**

Date: 20/06/2025 Time: 12:45 PM - 2:15 PM Right: 93.68% Wrong: 4.24%

**Q229)** In a certain code language, 'LATE' is coded as '8054' and 'TEAM' is coded as '4087'. What is the code for 'M' in the given code language?

**A) 4 B) 8 C) 0 D) 7**

Date: 11/06/2025 Time: 12:45 PM - 2:15 PM Right: 93.73% Wrong: 2.28%

**Q230)** KUQC is related to MYSG in a certain way based on the English alphabetical order. In the same way, OCUK is related to QGWO. To which of the following is SKYS related, following the same logic?

**A) TNBV B) UOAW C) TPAX D) VPZX**

Date: 12/06/2025 Time: 4:30 PM - 6:00 PM Right: 93.73% Wrong: 2.71%

**Q231)** What should come in place of the question mark (?) in the given series based on the English alphabetical order?

PIL NGJ LEH JCF ?

**A) HBD B) HAD C) HAE D) HBE**

Date: 18/06/2025 Time: 9:00 AM - 10:30 AM Right: 93.84% Wrong: 3.95%

**Q232)** SGUL is related to XLZQ in a certain way based on the English alphabetical order. In the same way, MAOF is related to RFTK. To which of the following options is BPDU related, following the same logic?

**A) GZIU B) GZUI C) GUIZ D) GUZI**

Date: 20/06/2025 Time: 4:30 PM - 6:00 PM Right: 93.90% Wrong: 2.57%

**Q233)** In a certain code language, 'BACK' is coded as '5314' and 'CARB' is coded as '1524'. What is the code for 'R' in the given code language?

**A) 1 B) 2 C) 5 D) 4**

Date: 21/06/2025 Time: 9:00 AM - 10:30 AM Right: 93.94% Wrong: 2.37%

**Q234)** KQRL is related to OTTM in a certain way based on the English alphabetical order. In the same way, SWVN is related to WZXO. To which of the given options is ACZP related, following the same logic?

**A) DEAP B) DGBP C) FDZR D) EFBQ**

Date: 09/06/2025 Time: 12:45 PM - 2:15 PM Right: 93.96% Wrong: 2.49%

**Q235)** GCKH is related to EAIF in a certain way based on the English alphabetical order. In the same way, JFNK is related to HDLI. To which of the given options is MIQN related, following the same logic?

- A) KGLO B) KGOL C) GKLO D) GKOL**

Date: 18/06/2025 Time: 9:00 AM - 10:30 AM Right: 93.96% Wrong: 3.22%

**Q236)** MJGT is related to QNKX in a certain way based on the English alphabetical order. In the same way, CZWJ is related to GDAN. To which of the following options is OLIV related, following the same logic?

- A) SMPZ B) SPMZ C) SPZM D) SMZP**

Date: 21/06/2025 Time: 9:00 AM - 10:30 AM Right: 93.98% Wrong: 2.61%

**Q237)** In a certain code language, 'can you knock' is coded as 'mo nv sb' and 'knock the door' is coded as 'kx rg nv'. How is 'knock' coded in the given language?

- A) rg B) nv C) sb D) kx**

Date: 20/06/2025 Time: 4:30 PM - 6:00 PM Right: 93.99% Wrong: 3.31%

**Q238)** What should come in place of the question mark (?) in the given series based on the English alphabetical order?  
SUX QSV OQT MOR ?

- A) KNP B) KMO C) KMP D) KNO**

Date: 17/06/2025 Time: 9:00 AM - 10:30 AM Right: 94.12% Wrong: 4.03%

**Q239)** In a certain code language, 'pizza base queen' is coded as 'du su qw' and 'pig queen wave' is coded as 'ic fv su'. How is 'queen' coded in the given language?

- A) ic B) su C) du D) qw**

Date: 05/06/2025 Time: 12:45 PM - 2:15 PM Right: 94.17% Wrong: 3.75%

**Q240)** If 2 is added to each odd digit and 2 is subtracted from each even digit in the number 6127385, then which of the following digits will be third from the right?

- A) 6 B) 5 C) 7 D) 4**

Date: 17/06/2025 Time: 9:00 AM - 10:30 AM Right: 94.33% Wrong: 2.48%

**Q241)** What should come in place of the question mark (?) in the given series based on the English alphabetical order?  
QJL OHJ MFH KDF ?

- A) IBD B) IAD C) IBE D) IAE**

Date: 17/06/2025 Time: 4:30 PM - 6:00 PM Right: 94.51% Wrong: 2.94%

**Q242)** Select the pair that follows the same pattern as that followed by the two pairs given below. Both pairs follow the same pattern.

BGM : DEK

SVL : UTJ

**A) HXF : LTB   B) GOU : KMQ   C) EKX : GIV   D) IMZ : MIW**

Date: 19/06/2025   Time: 9:00 AM - 10:30 AM   Right: 94.52%   Wrong: 2.14%

**Q243)** JROK is related to HPMI in a certain way based on the English alphabetical order. In the same way, GOLH is related to EMJF. To which of the given options is DLIE related, following the same logic?

**A) BJCG   B) BJGC   C) JBCG   D) JBGC**

Date: 21/06/2025   Time: 12:45 PM - 2:15 PM   Right: 94.91%   Wrong: 2.27%

**Q244)** UQNV is related to SOLT in a certain way based on the English alphabetical order. In the same way, XTQY is related to VROW. To which of the given options is RNKS related, following the same logic?

**A) PLIQ   B) PLQI   C) LPIQ   D) LPQI**

Date: 19/06/2025   Time: 4:30 PM - 6:00 PM   Right: 94.95%   Wrong: 2.51%

**Q245)** In a certain code language, 'joy lab poet' is coded as 'to dl dh' and 'poet win union' is coded as 'dl fo kb'. How is 'poet' coded in the given language?

**A) dl   B) dh   C) fo   D) to**

Date: 06/06/2025   Time: 9:00 AM - 10:30 AM   Right: 94.99%   Wrong: 2.47%

**Q246)** In a certain code language, 'please go down' is coded as 'ta wk vb' and 'down the drain' is coded as 'cm dg wk'. How is 'down' coded in the given language?

**A) vb   B) cm   C) dg   D) wk**

Date: 21/06/2025   Time: 4:30 PM - 6:00 PM   Right: 95.00%   Wrong: 2.89%

**Q247)** In a certain code language, 'talk to him' is coded as 'yd hp mu' and 'when you talk' is coded as 'nc mu bt'. How is 'talk' coded in the given language?

**A) yd   B) nc   C) bt   D) mu**

Date: 21/06/2025   Time: 12:45 PM - 2:15 PM   Right: 95.05%   Wrong: 2.71%

**Q248)** WDFG is related to ZGIJ in a certain way based on the English alphabetical order. In the same way, IPRS is related to LSUV. To which of the following options is RYAB related, following the same logic?

**A) UBDE   B) UDEB   C) UBED   D) UDBE**

Date: 19/06/2025   Time: 9:00 AM - 10:30 AM   Right: 95.26%   Wrong: 1.86%

**Q249)** FBHP is related to JFLT in a certain way based on the English alphabetical order. In the same way, VRXF is related to ZVBJ. To which of the following options is HDJR related, following the same logic?

- A) LVHN B) LHVN C) LHNV D) LVNH**

Date: 21/06/2025 Time: 12:45 PM - 2:15 PM Right: 95.39% Wrong: 1.93%

**Q250)** In a certain code language, 'friends good company' is coded as 'li ta ph' and 'friends create nostalgia' is coded as 'ta bu cy'. How is 'friends' coded in the given language?

- A) ta B) bu C) li D) ph**

Date: 13/06/2025 Time: 12:45 PM - 2:15 PM Right: 95.41% Wrong: 2.65%

**Q251)** In a certain code language, 'flag dance best' is coded as 'xk tc kz' and 'mile flag wine' is coded as 'tc di gv'. How is 'flag' coded in the given language?

- A) xk B) tc C) kz D) di**

Date: 06/06/2025 Time: 4:30 PM - 6:00 PM Right: 95.49% Wrong: 2.85%

**Q252)** NKGO is related to LIEM in a certain way based on the English alphabetical order. In the same way, QNJR is related to OLHP. To which of the given options is TQMU related, following the same logic?

- A) ORSK B) ROSK C) ROKS D) ORKS**

Date: 19/06/2025 Time: 4:30 PM - 6:00 PM Right: 95.74% Wrong: 1.72%

**Q253)** In a certain code language, 'smooth long drive' is coded as 'zi ma tu' and 'challenging mountain drive' is coded as 'fo se zi'. How is 'drive' coded in the given language?

- A) se B) fo C) zi D) ma**

Date: 13/06/2025 Time: 9:00 AM - 10:30 AM Right: 95.92% Wrong: 1.84%

**Q254)** In a certain code language, 'eat healthy food' is coded as 'xy zd uv' and 'food is essential' is coded as 'uv aq bc'. How is 'food' coded in the given language?

- A) aq B) xy C) uv D) zd**

Date: 10/06/2025 Time: 9:00 AM - 10:30 AM Right: 96.50% Wrong: 1.04%

**Q255)** In a certain code language, 'read this book' is coded as 'op st qr' and 'book on table' is coded as 'qr lm pq'. How is 'book' coded in the given language?

- A) op B) pq C) lm D) qr**

Date: 09/06/2025 Time: 4:30 PM - 6:00 PM Right: 96.69% Wrong: 1.64%

**Q256)** In a certain code language, 'good morning all' is coded as 'cx fg zq' and 'all students present' is coded as 'zq nr vk'. How is 'all' coded in the given language?

- A) zq B) nr C) fg D) vk**

Date: 09/06/2025 Time: 12:45 PM - 2:15 PM Right: 96.95% Wrong: 1.37%

**Q257)** In a certain code language, 'how are you' is coded as 'jp zl rc' and 'are they coming' is coded as 'zl qn bt'. How is 'are' coded in the given language?

**A) zl B) bt C) jp D) qn**

Date: 09/06/2025 Time: 9:00 AM - 10:30 AM Right: 97.07% Wrong: 1.11%

**Q258)** In a certain code language, 'sit back relax' is coded as 'ha mi pu' and 'relax and enjoy' is coded as 'pu co lz'. How is 'relax' coded in the given language?

**A) mi B) pu C) ha D) co**

Date: 14/06/2025 Time: 12:45 PM - 2:15 PM Right: 97.40% Wrong: 1.06%

### Answer Key (Q1 to Q258) Coding-Decoding

Q1: 4	Q2: 4	Q3: 3	Q4: 3	Q5: 3
Q6: 1	Q7: 3	Q8: 1	Q9: 4	Q10: 1
Q11: 1	Q12: 4	Q13: 4	Q14: 4	Q15: 1
Q16: 1	Q17: 3	Q18: 3	Q19: 4	Q20: 4
Q21: 2	Q22: 4	Q23: 4	Q24: 1	Q25: 4
Q26: 4	Q27: 2	Q28: 3	Q29: 3	Q30: 4
Q31: 2	Q32: 3	Q33: 3	Q34: 3	Q35: 2
Q36: 1	Q37: 1	Q38: 2	Q39: 3	Q40: 1
Q41: 3	Q42: 2	Q43: 4	Q44: 3	Q45: 1
Q46: 2	Q47: 4	Q48: 2	Q49: 2	Q50: 2
Q51: 4	Q52: 1	Q53: 3	Q54: 4	Q55: 4
Q56: 2	Q57: 4	Q58: 1	Q59: 3	Q60: 1
Q61: 4	Q62: 3	Q63: 1	Q64: 1	Q65: 4
Q66: 2	Q67: 3	Q68: 3	Q69: 4	Q70: 1
Q71: 1	Q72: 4	Q73: 3	Q74: 3	Q75: 1
Q76: 4	Q77: 2	Q78: 2	Q79: 2	Q80: 3
Q81: 1	Q82: 3	Q83: 3	Q84: 3	Q85: 3
Q86: 2	Q87: 3	Q88: 3	Q89: 3	Q90: 3
Q91: 1	Q92: 1	Q93: 4	Q94: 2	Q95: 3

Q96: 3	Q97: 2	Q98: 4	Q99: 4	Q100: 2
Q101: 1	Q102: 2	Q103: 3	Q104: 4	Q105: 2
Q106: 2	Q107: 1	Q108: 4	Q109: 2	Q110: 2
Q111: 2	Q112: 1	Q113: 3	Q114: 1	Q115: 2
Q116: 2	Q117: 4	Q118: 2	Q119: 3	Q120: 4
Q121: 1	Q122: 4	Q123: 3	Q124: 4	Q125: 4
Q126: 3	Q127: 1	Q128: 1	Q129: 4	Q130: 2
Q131: 4	Q132: 2	Q133: 1	Q134: 2	Q135: 1
Q136: 2	Q137: 3	Q138: 4	Q139: 4	Q140: 2
Q141: 1	Q142: 4	Q143: 2	Q144: 1	Q145: 3
Q146: 4	Q147: 2	Q148: 4	Q149: 2	Q150: 3
Q151: 4	Q152: 1	Q153: 4	Q154: 3	Q155: 3
Q156: 1	Q157: 2	Q158: 3	Q159: 4	Q160: 1
Q161: 1	Q162: 3	Q163: 2	Q164: 3	Q165: 4
Q166: 2	Q167: 4	Q168: 2	Q169: 4	Q170: 4
Q171: 3	Q172: 2	Q173: 3	Q174: 1	Q175: 4
Q176: 1	Q177: 3	Q178: 2	Q179: 3	Q180: 1
Q181: 4	Q182: 2	Q183: 4	Q184: 4	Q185: 1
Q186: 2	Q187: 2	Q188: 2	Q189: 4	Q190: 1
Q191: 2	Q192: 2	Q193: 3	Q194: 3	Q195: 3
Q196: 4	Q197: 1	Q198: 2	Q199: 2	Q200: 2
Q201: 2	Q202: 4	Q203: 4	Q204: 3	Q205: 3
Q206: 3	Q207: 1	Q208: 1	Q209: 2	Q210: 3
Q211: 2	Q212: 4	Q213: 3	Q214: 4	Q215: 3
Q216: 4	Q217: 2	Q218: 3	Q219: 1	Q220: 2
Q221: 3	Q222: 1	Q223: 1	Q224: 4	Q225: 3
Q226: 2	Q227: 4	Q228: 3	Q229: 4	Q230: 2

Q231: 2	Q232: 3	Q233: 2	Q234: 4	Q235: 2
Q236: 2	Q237: 2	Q238: 3	Q239: 2	Q240: 2
Q241: 1	Q242: 3	Q243: 2	Q244: 1	Q245: 1
Q246: 4	Q247: 4	Q248: 1	Q249: 3	Q250: 1
Q251: 2	Q252: 3	Q253: 3	Q254: 3	Q255: 4
Q256: 1	Q257: 1	Q258: 2		

## Blood Relation

Q1) In a certain code language,

'A + B' means 'A is the son of B',

'A - B' means 'A is the brother of B',

'A × B' means 'A is the wife of B' and

'A ÷ B' means 'A is the father of B'.

How is S related to H if 'S + D - F × G ÷ H'?

- A) Father's sister's son   B) Father's brother's son   C) Mother's sister's son   D) Mother's brother's son

Date: 23/06/2025   Time: 9:00 AM - 10:30 AM   Right: 59.91%   Wrong: 31.92%

Q2) S is the father of W. D is the only sister of W. R is the mother's mother of D. L, the mother of P, is married to S.

How is P related to W?

- A) Sister's husband   B) Father's brother   C) Brother   D) Sister

Date: 24/06/2025   Time: 4:30 PM - 6:00 PM   Right: 65.87%   Wrong: 19.25%

Q3) In a certain code language,

$A + B$  means 'A is the son of B',

$A - B$  means 'A is the sister of B',

$A \times B$  means 'A is the wife of B' and

$A \div B$  means 'A is the father of B'.

Based on the above, how is E related to K if ' $E \div F \times G + H - K$ '?

- A) Sister's son's wife's brother   B) Brother's son's wife's father   C) Brother's son's wife's brother  
D) Sister's son's wife's father

Date: 21/06/2025   Time: 9:00 AM - 10:30 AM   Right: 73.99%   Wrong: 11.36%

Q4) In a certain code language,

$A + B$  means 'A is the mother of B',

$A - B$  means 'A is the brother of B',

$A \times B$  means 'A is the wife of B' and

$A \div B$  means 'A is the father of B'.

How is M related to Q if ' $M - N + O \times P \div Q$ '?

- A) Mother's father   B) Mother's mother's brother   C) Father's brother   D) Father's father

Date: 10/06/2025   Time: 4:30 PM - 6:00 PM   Right: 74.60%   Wrong: 18.40%

Q5) In a certain code language,

' $A + B$ ' means 'A is the sister of B'

' $A - B$ ' means 'A is the father of B'

' $A \times B$ ' means 'A is the daughter of B'

' $A \div B$ ' means 'A is the son of B'

Based on the above, how is P related to T if ' $P + Q - R \div S \times T$ '?

- A) Daughter's husband's sister   B) Father's sister   C) Daughter-in-law   D) Sister's husband's mother

Date: 19/06/2025   Time: 12:45 PM - 2:15 PM   Right: 75.67%   Wrong: 13.82%

- Q6) In a certain code language,  
 'A + B' means 'A is the mother of B',  
 'A - B' means 'A is the brother of B',  
 'A × B' means 'A is the wife of B' and  
 'A ÷ B' means 'A is the father of B'.

How is M related to Q if 'M - N + O ÷ P × Q'?

- A) Wife's mother's brother   B) Wife's father's mother's brother   C) Wife's mother's father  
 D) Wife's father's father

Date: 10/06/2025   Time: 9:00 AM - 10:30 AM   Right: 76.13%   Wrong: 13.72%

- Q7) In a certain code language,

A + B means 'A is the son of B',  
 A - B means 'A is the sister of B',  
 A × B means 'A is the wife of B' and  
 A ÷ B means 'A is the father of B'.

Based on the above, how is E related to K if 'E + F - G ÷ H × K'?

- A) Wife's father's sister's son   B) Wife's father's brother's son   C) Wife's mother's sister's son  
 D) Wife's mother's brother's son

Date: 23/06/2025   Time: 12:45 PM - 2:15 PM   Right: 78.12%   Wrong: 9.30%

- Q8) In a certain code language,

'A + B' means 'A is the mother of B',  
 'A - B' means 'A is the brother of B',  
 'A × B' means 'A is the wife of B' and  
 'A ÷ B' means 'A is the father of B'.

Based on the above, how is M related to Q if 'M - N ÷ O + P × Q'?

- A) Wife's Father's Brother   B) Wife's Mother's Father   C) Wife's Father's Father  
 D) Wife's Mother's Father's Brother

Date: 11/06/2025   Time: 12:45 PM - 2:15 PM   Right: 79.84%   Wrong: 11.42%

Q9) In a certain code language,

'A + B' means 'A is the mother of B'

'A - B' means 'A is the brother of B'

'A x B' means 'A is the wife of B'

'A ÷ B' means 'A is the father of B'

Based on the above, how is P related to T if 'P ÷ Q + R - S x T'?

- A) Wife's mother's father   B) Wife's sister's husband   C) Son's daughter's husband  
D) Wife's father's mother

Date: 18/06/2025   Time: 9:00 AM - 10:30 AM   Right: 80.68%   Wrong: 11.19%

Q10) In a certain code language,

A + B means 'A is the son of B',

A - B means 'A is the sister of B',

A x B means 'A is the wife of B' and

A ÷ B means 'A is the father of B'.

Based on the above, how is E related to K if 'E ÷ F - G x H + K'?

- A) Wife's brother   B) Wife's father   C) Son's wife's father   D) Son's wife's brother

Date: 20/06/2025   Time: 9:00 AM - 10:30 AM   Right: 80.74%   Wrong: 8.88%

Q11) In a certain code language,

'A + B' means 'A is the sister of B'

'A - B' means 'A is the brother of B'

'A x B' means 'A is the wife of B'

'A ÷ B' means 'A is the father of B'

Based on the above, how is M related to Q if 'M x N - O + P ÷ Q'?

- A) Father's Brother's Wife   B) Mother's Brother's Daughter   C) Father's Brother's Daughter  
D) Mother's Brother's Wife

Date: 11/06/2025   Time: 4:30 PM - 6:00 PM   Right: 81.12%   Wrong: 10.10%

Q12) In a certain code language,

'A + B' means 'A is the mother of B'

'A - B' means 'A is the brother of B'

'A x B' means 'A is the wife of B'

'A ÷ B' means 'A is the father of B'

Based on the above, how is Q related to T if 'P x Q - R + S ÷ T'?

- A) Father's brother's son   B) Mother's mother's brother   C) Father's mother's brother  
D) Sister's husband's father

Date: 18/06/2025   Time: 12:45 PM - 2:15 PM   Right: 81.60%   Wrong: 10.40%

Q13) In a certain code language,

'A + B' means 'A is the sister of B'

'A - B' means 'A is the brother of B'

'A x B' means 'A is the wife of B'

'A ÷ B' means 'A is the father of B'

Based on the above, how is M related to Q if 'M x N - O ÷ P + Q'?

- A) Father's Brother's Wife   B) Mother's Brother's Wife   C) Father's Brother's Daughter  
D) Mother's Brother's Daughter

Date: 11/06/2025   Time: 9:00 AM - 10:30 AM   Right: 82.42%   Wrong: 8.74%

Q14) In a certain code language,

A + B means 'A is the mother of B'

A - B means 'A is the brother of B'

A x B means 'A is the wife of B' and

A ÷ B means 'A is the father of B'.

How is M related to Q if 'M + N x O ÷ P - Q'?

- A) Father's sister   B) Mother's mother   C) Father's mother   D) Mother's sister

Date: 05/06/2025   Time: 9:00 AM - 10:30 AM   Right: 82.68%   Wrong: 9.90%

- Q15)** In a certain code language,  
 'A + B' means 'A is the son of B'  
 'A - B' means 'A is the brother of B'  
 'A x B' means 'A is the wife of B'  
 'A ÷ B' means 'A is the father of B'

Based on the above, how is M related to Q if 'M + N - O ÷ P x Q'?

- A)** Wife's Father's Brother's Son   **B)** Wife's Mother's Sister's Son   **C)** Wife's Mother's Brother's Son  
**D)** Wife's Father's Sister's Son

Date: 17/06/2025   Time: 9:00 AM - 10:30 AM   Right: 83.15%   Wrong: 5.67%

- Q16)** In a certain code language,

A + B means 'A is the son of B',  
 A - B means 'A is the sister of B',  
 A x B means 'A is the wife of B' and  
 A ÷ B means 'A is the father of B'.

Based on the above, how is E related to K if 'E + F - G x H ÷ K'?

- A)** Mother's sister's husband   **B)** Father's sister's son   **C)** Mother's sister's son  
**D)** Father's sister's husband

Date: 23/06/2025   Time: 4:30 PM - 6:00 PM   Right: 83.30%   Wrong: 8.18%

- Q17)** In a certain code language,

A + B means 'A is the mother of B',  
 A - B means 'A is the brother of B',  
 A x B means 'A is the wife of B' and  
 A ÷ B means 'A is the father of B'.

How is M related to Q if 'M + N - O ÷ P x Q'?

- A)** Wife's father's mother   **B)** Wife's mother's mother   **C)** Wife's mother's sister   **D)** Wife's father's sister

Date: 05/06/2025   Time: 12:45 PM - 2:15 PM   Right: 83.36%   Wrong: 9.54%

Q18) In a certain code language,

'A + B' means 'A is the sister of B'

'A - B' means 'A is the father of B'

'A x B' means 'A is the wife of B'

'A ÷ B' means 'A is the son of B'

Based on the above, how is P related to T if 'P x Q ÷ R - S + T'?

A) Brother's wife B) Sister's daughter C) Son's wife's sister D) Brother's son's wife

Date: 19/06/2025 Time: 9:00 AM - 10:30 AM Right: 83.58% Wrong: 6.66%

Q19) B is the mother of A. C is the sister of A's father D. E is the brother of C. How is B related to E?

A) Brother's wife B) Sister C) Wife D) Mother

Date: 24/06/2025 Time: 9:00 AM - 10:30 AM Right: 83.97% Wrong: 10.95%

Q20) In a certain code language,

'A + B' means 'A is the father of B'

'A - B' means 'A is the daughter of B'

'A x B' means 'A is the son of B'

'A ÷ B' means 'A is the wife of B'

Based on the above, how is P related to T if 'P + Q x R - S ÷ T'?

A) Daughter's husband B) Son's wife's brother C) Wife's brother's son D) Daughter's son

Date: 21/06/2025 Time: 12:45 PM - 2:15 PM Right: 84.31% Wrong: 6.84%

Q21) In a certain code language,

A + B means 'A is the mother of B'

A - B means 'A is the brother of B'

A x B means 'A is the wife of B' and

A ÷ B means 'A is the father of B'.

How is M related to Q if 'M + N ÷ O x P - Q'?

A) Brother's wife's father's mother B) Brother's wife's mother's sister C) Brother's wife's father's sister

D) Brother's wife's mother's mother

Date: 06/06/2025 Time: 9:00 AM - 10:30 AM Right: 84.52% Wrong: 6.79%

**Q22)** In a certain code language,  
 $A + B$  means 'A is the mother of B',  
 $A - B$  means 'A is the brother of B',  
 $A \times B$  means 'A is the wife of B' and  
 $A \div B$  means 'A is the father of B'.

How is M related to Q if ' $M + N \times O - P \div Q$ '?

- A)** Mother's brother's wife's sister   **B)** Father's brother's wife's sister   **C)** Father's brother's wife's mother  
**D)** Mother's brother's wife's mother

Date: 05/06/2025   Time: 4:30 PM - 6:00 PM   Right: 84.61%   Wrong: 6.56%

**Q23)** In a certain code language,

$A + B$  means 'A is the son of B',  
 $A - B$  means 'A is the sister of B',  
 $A \times B$  means 'A is the wife of B' and  
 $A \div B$  means 'A is the father of B'.

Based on the above, how is E related to K if ' $E \div F + G - H \times K$ '?

- A)** Wife's brother's son   **B)** Wife's sister's husband   **C)** Wife's sister's son   **D)** Wife's brother's wife

Date: 21/06/2025   Time: 4:30 PM - 6:00 PM   Right: 84.67%   Wrong: 7.26%

**Q24)** In a certain code language,

' $A + B$ ' means 'A is the sister of B'  
' $A - B$ ' means 'A is the brother of B'  
' $A \times B$ ' means 'A is the wife of B'  
' $A \div B$ ' means 'A is the father of B'.

Based on the above, how is M related to Q if ' $M \div N + O - P \times Q$ '?

- A)** Brother   **B)** Wife's Brother   **C)** Father   **D)** Wife's Father

Date: 14/06/2025   Time: 12:45 PM - 2:15 PM   Right: 84.83%   Wrong: 9.97%

Q25) In a certain code language,

A + B means 'A is the mother of B'

A - B means 'A is the brother of B'

A × B means 'A is the wife of B' and

A ÷ B means 'A is the father of B'.

How is M related to Q if 'M + N ÷ O - P × Q'?

A) Wife's father's sister   B) Wife's mother's mother   C) Wife's mother's sister   D) Wife's father's mother

Date: 09/06/2025   Time: 4:30 PM - 6:00 PM   Right: 85.18%   Wrong: 6.91%

Q26) F is the husband of G. G is the mother of H. H is the wife of I. I is the father of J. How is F related to J?

A) Mother's brother   B) Mother's father   C) Father's father   D) Father's brother

Date: 16/06/2025   Time: 4:30 PM - 6:00 PM   Right: 85.20%   Wrong: 11.34%

Q27) In a certain code language,

'A + B' means 'A is the sister of B'

'A - B' means 'A is the brother of B'

'A × B' means 'A is the wife of B'

'A ÷ B' means 'A is the father of B'.

Based on the above, how is M related to Q if 'M + N - O × P ÷ Q'?

A) Mother's Sister   B) Father's Sister's Son   C) Father's Sister's Husband   D) Mother's Sister's Husband

Date: 14/06/2025   Time: 9:00 AM - 10:30 AM   Right: 85.22%   Wrong: 6.76%

Q28) In a certain code language,

A + B means 'A is the mother of B',

A - B means 'A is the brother of B',

A × B means 'A is the wife of B' and

A ÷ B means 'A is the father of B'.

How is M related to Q if 'M + N - O × P ÷ Q'?

A) Father's sister   B) Father's mother   C) Mother's mother   D) Mother's sister

Date: 06/06/2025   Time: 4:30 PM - 6:00 PM   Right: 85.38%   Wrong: 8.91%

**Q29)** A is married to E. E is the sister of R. R is married to D. D is the only brother of Z. B is the only daughter of R. How is A related to B?

- A)** Mother's sister's husband   **B)** Father's sister's husband   **C)** Mother's sister's father  
**D)** Mother's brother's wife

Date: 17/06/2025   Time: 12:45 PM - 2:15 PM   Right: 85.41%   Wrong: 9.48%

**Q30)** In a certain code language,  
 'A + B' means 'A is the sister of B'  
 'A - B' means 'A is the brother of B'  
 'A × B' means 'A is the wife of B'  
 'A ÷ B' means 'A is the father of B'

Based on the above, how is M related to Q if 'M ÷ N - O + P × Q'?

- A)** Brother   **B)** Wife's Brother   **C)** Father   **D)** Wife's Father

Date: 13/06/2025   Time: 9:00 AM - 10:30 AM   Right: 85.95%   Wrong: 8.38%

**Q31)** B is the father of C. Q is the sister of C. T is the only sister of Q. T is the child of S. M is the son of S's only son.

How is S related to B?

- A)** Father's sister   **B)** Wife   **C)** Father's brother   **D)** Wife's mother

Date: 20/06/2025   Time: 12:45 PM - 2:15 PM   Right: 86.18%   Wrong: 7.27%

**Q32)** F is the brother of G.  
 G is the husband of H.  
 H is the daughter of I.  
 I is the wife of J.  
 How is F related to J?

- A)** Daughter's husband's brother   **B)** Brother   **C)** Father   **D)** Daughter's husband's father

Date: 09/06/2025   Time: 9:00 AM - 10:30 AM   Right: 86.33%   Wrong: 9.14%

**Q33)** In a certain code language,  
 'A + B' means 'A is the sister of B'  
 'A - B' means 'A is the brother of B'  
 'A × B' means 'A is the wife of B'  
 'A ÷ B' means 'A is the father of B'.

Based on the above, how is M related to Q if 'M ÷ N + O × P - Q'?

- A)** Wife's Father   **B)** Brother's Wife's Brother   **C)** Wife's Brother   **D)** Brother's Wife's Father

Date: 13/06/2025   Time: 12:45 PM - 2:15 PM   Right: 87.06%   Wrong: 6.41%

- Q34)** In a certain code language,  
 'A + B' means 'A is the sister of B'  
 'A - B' means 'A is the brother of B'  
 'A × B' means 'A is the wife of B'  
 'A ÷ B' means 'A is the father of B'.

Based on the above, how is M related to Q if 'M ÷ N × O - P + Q'?

- A)** Brother's Wife's Brother **B)** Wife's Father **C)** Brother's Wife's Father **D)** Wife's Brother

Date: 12/06/2025 Time: 12:45 PM - 2:15 PM Right: 87.26% Wrong: 5.29%

- Q35)** In a certain code language,  
 'A+ B' means 'A is the sister of B'  
 'A - B' means 'A is the brother of B'  
 'A × B' means 'A is the wife of B'  
 'A ÷ B' means 'A is the father of B'

Based on the above, how is M related to Q if 'M × N ÷ O - P + Q'?

- A)** Wife **B)** Mother **C)** Sister **D)** Daughter

Date: 12/06/2025 Time: 9:00 AM - 10:30 AM Right: 87.32% Wrong: 7.30%

- Q36)** In a certain code language,  
 'A + B' means 'A is the mother of B',  
 'A - B' means 'A is the brother of B',  
 'A × B' means 'A is the wife of B' and  
 'A ÷ B' means 'A is the father of B'.

Based on the above, how is M related to Q if 'M - N × O ÷ P + Q'?

- A)** Mother's Mother's Brother **B)** Father's Brother **C)** Mother's Father **D)** Father's Father

Date: 10/06/2025 Time: 12:45 PM - 2:15 PM Right: 87.38% Wrong: 4.98%

- Q37)** F is the brother of G.  
 G is the wife of H.  
 H is the son of I.  
 I is the wife of J.  
 How is F related to J?

- A)** Father **B)** Son's wife's brother **C)** Son **D)** Son's wife's father

Date: 06/06/2025 Time: 12:45 PM - 2:15 PM Right: 87.39% Wrong: 8.86%

- Q38)** In a certain code language,  
 'A + B' means 'A is the sister of B'  
 'A - B' means 'A is the brother of B'  
 'A × B' means 'A is the wife of B'  
 'A ÷ B' means 'A is the father of B'.

Based on the above, how is M related to Q if 'M × N ÷ O + P - Q'?

- A)** Mother **B)** Wife **C)** Sister **D)** Daughter

Date: 12/06/2025 Time: 4:30 PM - 6:00 PM Right: 88.02% Wrong: 6.73%

- Q39)** L is the mother of two sons, namely, P and J. F is the wife of P. Q is the daughter of J. How is L related to Q?

- A)** Husband's mother **B)** Father's mother **C)** Mother's mother **D)** Mother

Date: 18/06/2025 Time: 4:30 PM - 6:00 PM Right: 88.29% Wrong: 8.97%

- Q40)** F is the brother of G. G is the husband of H. H is the daughter of I. I is the husband of J. How is F related to J?

- A)** Husband's father **B)** Daughter's husband's father **C)** Husband's brother  
**D)** Daughter's husband's brother

Date: 16/06/2025 Time: 12:45 PM - 2:15 PM Right: 89.08% Wrong: 5.92%

- Q41)** F is the sister of G. G is the husband of H. H is the daughter of I. I is the husband of J. How is F related to J?

- A)** Husband's sister **B)** Daughter's husband's sister **C)** Daughter's husband's mother  
**D)** Husband's mother

Date: 13/06/2025 Time: 4:30 PM - 6:00 PM Right: 90.59% Wrong: 5.42%

- Q42)** F is the husband of G. G is the mother of H. H is the husband of I. I is the mother of J. How is F related to J?

- A)** Father's brother **B)** Father's father **C)** Mother's brother **D)** Mother's father

Date: 16/06/2025 Time: 9:00 AM - 10:30 AM Right: 91.74% Wrong: 5.80%

- Q43)** N is the brother of E. E is the husband of P. L and G are sons of P. How is N related to G?

- A)** Husband's brother **B)** Father **C)** Father's brother **D)** Father's father

Date: 20/06/2025 Time: 4:30 PM - 6:00 PM Right: 91.79% Wrong: 5.36%

**Q44)** T is the wife of S. L is the daughter of T. K is the sister of S. W is the mother of L's father. P is the son of S.

How is P related to K?

**A)** Husband's brother **B)** Husband's father **C)** Daughter's husband **D)** Brother's son

Date: 24/06/2025 Time: 12:45 PM - 2:15 PM Right: 92.22% Wrong: 2.83%

**Q45)** F is the sister of G. G is the husband of H. H is the daughter of I. I is the wife of J. How is F related to J?

**A)** Daughter's husband's mother **B)** Sister **C)** Daughter's husband's sister **D)** Mother

Date: 09/06/2025 Time: 12:45 PM - 2:15 PM Right: 92.63% Wrong: 4.00%

**Q46)** R is the wife of A. F is the son of A. G is the sister of T. T is the brother of F. How is T related to R?

**A)** Son **B)** Sister's son **C)** Brother's son **D)** Brother

Date: 17/06/2025 Time: 4:30 PM - 6:00 PM Right: 94.30% Wrong: 2.91%

**Q47)** Z is the wife of S. M and C are daughters of S. T is the daughter of C. How is M related to T?

**A)** Mother's sister **B)** Mother's mother **C)** Mother's wife **D)** Mother

Date: 19/06/2025 Time: 4:30 PM - 6:00 PM Right: 94.68% Wrong: 3.21%

### Answer Key (Q1 to Q47) Blood Relation

Q1: 4	Q2: 3	Q3: 4	Q4: 2	Q5: 1
Q6: 2	Q7: 1	Q8: 4	Q9: 1	Q10: 3
Q11: 1	Q12: 3	Q13: 1	Q14: 2	Q15: 1
Q16: 3	Q17: 1	Q18: 1	Q19: 1	Q20: 1
Q21: 1	Q22: 3	Q23: 2	Q24: 4	Q25: 4
Q26: 2	Q27: 1	Q28: 3	Q29: 1	Q30: 4
Q31: 2	Q32: 1	Q33: 4	Q34: 3	Q35: 2
Q36: 1	Q37: 2	Q38: 1	Q39: 2	Q40: 4
Q41: 2	Q42: 2	Q43: 3	Q44: 4	Q45: 3
Q46: 1	Q47: 1			

### Mathematical Operations

**Q1)** Select the set in which the numbers are related in the same way as are the numbers of the following sets.

(NOTE: Operations should be performed on the whole numbers, without breaking down the numbers into their constituent digits. E.g. 13 – Operations on 13 such as adding/subtracting/multiplying to 13 can be performed. Breaking down 13 into 1 and 3 and then performing mathematical operations on 1 and 3 is not allowed.)

(7, 80, 22)

(43, 143, 19)

**A)** (25, 91, 15) **B)** (11, 63, 15) **C)** (13, 89, 21) **D)** (49, 139, 15)

Date: 23/06/2025 Time: 4:30 PM - 6:00 PM Right: 20.71% Wrong: 10.43%

**Q2)** Select the set in which the numbers are related in the same way as are the numbers of the following sets.

(NOTE: Operations should be performed on the whole numbers, without breaking down the numbers into their constituent digits. E.g. 13 – Operations on 13 such as adding/subtracting/multiplying to 13 can be performed. Breaking down 13 into 1 and 3 and then performing mathematical operations on 1 and 3 is not allowed.)

(15, -6, 3)

(43, 582, 25)

**A)** (31, 327, 19) **B)** (50, 47, 10) **C)** (19, 234, 16) **D)** (45, 99, 12)

Date: 16/06/2025 Time: 12:45 PM - 2:15 PM Right: 34.66% Wrong: 5.34%

**Q3)** Select the set in which the numbers are related in the same way as are the numbers of the following sets.

(NOTE: Operations should be performed on the whole numbers, without breaking down the numbers into their constituent digits. E.g. 13 – Operations on 13 such as adding/subtracting/multiplying to 13 can be performed. Breaking down 13 into 1 and 3 and then performing mathematical operations on 1 and 3 is not allowed.)

(41, 34, 24)

(63, 80, 23)

**A)** (46, 86, 24) **B)** (43, 40, 23) **C)** (17, 14, 11) **D)** (17, 2, 19)

Date: 13/06/2025 Time: 12:45 PM - 2:15 PM Right: 39.31% Wrong: 6.41%

**Q4)** Refer to the following number and symbol series and answer the question that follows. Counting to be done from left to right only.

(Left) 7 & 9 ^ # 1 \* 5 < 2 6 ≡ 4 Δ 3 \$ @ 8 (Right)

How many such symbols are there, each of which is immediately preceded by an odd number but NOT immediately followed by an even number?

(Note: a combination of three elements should be considered while answering this question.)

**A)** Two **B)** Three **C)** One **D)** More than three

Date: 21/06/2025 Time: 4:30 PM - 6:00 PM Right: 44.54% Wrong: 52.09%

**Q5)** HL 17 is related to KM -4 in a certain way. In the same way, LN 12 is related to OO -9. To which of the given options is UR 4 related, following the same logic?

**A)** IX -15 **B)** VR 16 **C)** XS -17 **D)** OZ -18

Date: 17/06/2025 Time: 4:30 PM - 6:00 PM Right: 54.08% Wrong: 5.52%

**Q6)** Select the set in which the numbers are related in the same way as are the numbers of the following sets.

(NOTE: Operations should be performed on the whole numbers, without breaking down the numbers into their constituent digits. E.g. 13 – Operations on 13 such as adding/subtracting/multiplying to 13 can be performed. Breaking down 13 into 1 and 3 and then performing mathematical operations on 1 and 3 is not allowed.)

(19, 354, 7)

(9, 73, 8)

**A)** (39, 1510, 10) **B)** (28, 778, 5) **C)** (22, 481, 2) **D)** (3, -10, 19)

Date: 11/06/2025 Time: 4:30 PM - 6:00 PM Right: 56.74% Wrong: 10.46%

**Q7)** Select the set in which the numbers are related in the same way as are the numbers of the following sets.

(NOTE: Operations should be performed on the whole numbers, without breaking down the numbers into their constituent digits. E.g. 13 – Operations on 13 such as adding to/subtracting from/multiplying with 13 can be performed. Breaking down 13 into 1 and 3 and then performing mathematical operations on 1 and 3 is not allowed.)

(36, 27, 41)

(45, 36, 50)

**A)** (74, 65, 89) **B)** (61, 52, 56) **C)** (28, 19, 43) **D)** (53, 44, 58)

Date: 19/06/2025 Time: 4:30 PM - 6:00 PM Right: 60.41% Wrong: 9.23%

**Q8)** Select the set in which the numbers are related in the same way as are the numbers of the following sets.

(NOTE: Operations should be performed on the whole numbers, without breaking down the numbers into their constituent digits. E.g. 13 – Operations on 13 such as adding to/subtracting from/multiplying with 13 can be performed. Breaking down 13 into 1 and 3 and then performing mathematical operations on 1 and 3 is not allowed.)

(57, 41, 32)

(65, 49, 40)

**A)** (51, 35, 16) **B)** (72, 56, 47) **C)** (89, 83, 74) **D)** (96, 80, 61)

Date: 21/06/2025 Time: 9:00 AM - 10:30 AM Right: 67.12% Wrong: 9.63%

**Q9)** QP 15 is related to TR 6 in a certain way. In the same way, KN 8 is related to NP -1. To which of the given options is LO 3 related, following the same logic?

**A)** OP -9 **B)** BH -4 **C)** YR -7 **D)** OQ -6

Date: 16/06/2025 Time: 9:00 AM - 10:30 AM Right: 68.61% Wrong: 5.56%

**Q10)** If 'W' stands for '÷', 'X' stands for '×', 'Y' stands for '+' and 'Z' stands for '-', then the resultant of which of the following would be 908?

**A)** 128 X 32 Y 120 Z 64 W 16 **B)** 128 W 32 Z 120 Y 64 X 16 **C)** 128 Y 32 Z 120 X 64 W 16

**D)** 128 Z 32 X 120 Y 64 Z 16

Date: 12/06/2025 Time: 12:45 PM - 2:15 PM Right: 71.65% Wrong: 10.20%

**Q11)** What will come in place of the question mark (?) in the following equation if '÷' and '-' are interchanged and '×' and '+' are interchanged?

$$56 + 41 \div 12054 - 123 \times 891 = ?$$

**A)** 811 **B)** 3089 **C)** 1307 **D)** 1557

Date: 11/06/2025 Time: 12:45 PM - 2:15 PM Right: 73.51% Wrong: 11.01%

**Q12)** Select the set in which the numbers are related in the same way as are the numbers of the following sets.

(NOTE: Operations should be performed on the whole numbers, without breaking down the numbers into their constituent digits. E.g. 13 – Operations on 13 such as adding to/subtracting from/multiplying with 13 can be performed. Breaking down 13 into 1 and 3 and then performing mathematical operations on 1 and 3 is not allowed.)

(15, 18.2, 21.4)

(19, 22.2, 25.4)

**A)** (43, 46.2, 48.4) **B)** (28, 30.2, 32.4) **C)** (36, 39.2, 41.4) **D)** (24, 27.2, 30.4)

Date: 19/06/2025 Time: 12:45 PM - 2:15 PM Right: 75.01% Wrong: 8.17%

**Q13)** If 'P' stands for '÷', 'Q' stands for '×', 'R' stands for '+' and 'S' stands for '-', then the resultant of which of the following would be 182?

- A)** 96 Q 16 R 112 S 48 P 6   **B)** 96 R 16 Q 112 P 48 S 6   **C)** 96 P 16 S 112 R 48 Q 6  
**D)** 96 S 16 P 112 Q 48 R 6

Date: 10/06/2025   Time: 4:30 PM - 6:00 PM   Right: 76.86%   Wrong: 8.85%

**Q14)** Select the set in which the numbers are related in the same way as are the numbers of the following sets.

(NOTE: Operations should be performed on the whole numbers, without breaking down the numbers into their constituent digits. E.g. 13 – Operations on 13 such as adding/subtracting/multiplying to 13 can be performed. Breaking down 13 into 1 and 3 and then performing mathematical operations on 1 and 3 is not allowed.)

(2, 20, 4)

(5, 61, 6)

- A)** (7, 45, 2)   **B)** (4, 40, 6)   **C)** (1, 8, 3)   **D)** (3, 25, 4)

Date: 17/06/2025   Time: 4:30 PM - 6:00 PM   Right: 76.92%   Wrong: 5.61%

**Q15)** In the following number-pairs, the second number is obtained by applying certain mathematical operations to the first number. Select the set in which the numbers are related in the same way as are the numbers of the following sets.

(NOTE: Operations should be performed on the whole numbers, without breaking down the numbers into their constituent digits. E.g. 13 – Operations on 13 such as adding/subtracting/multiplying to 13 can be performed. Breaking down 13 into 1 and 3 and then performing mathematical operations on 1 and 3 is not allowed.)

50, 4

80, 7

- A)** 90, 11   **B)** 70, 6   **C)** 100, 11   **D)** 60, 6

Date: 09/06/2025   Time: 4:30 PM - 6:00 PM   Right: 77.56%   Wrong: 3.28%

**Q16)** Which two numbers should be interchanged to make the following equation correct?  
 (Note: The entire number should be interchanged and not individual digits of a given number.)

$$24 \times 3 + (32 \div 4) - 10 \times 8 + 26 = 196$$

- A)** 4 and 8   **B)** 26 and 24   **C)** 3 and 8   **D)** 24 and 32

Date: 19/06/2025   Time: 4:30 PM - 6:00 PM   Right: 77.68%   Wrong: 9.17%

**Q17)** Two sets of numbers are given below. In each set of numbers, certain mathematical operation(s) on the first number results in the second number. Similarly, certain mathematical operation(s) on the second number results in the third number and so on. Which of the given options follows the same set of operations as in the given sets?

(NOTE: Operations should be performed on the whole numbers, without breaking down the numbers into their constituent digits. E.g. 13 – Operations on 13 such as adding / subtracting / multiplying to 13 can be performed. Breaking down 13 into 1 and 3 and then performing mathematical operations on 1 and 3 is not allowed.)

10 - 20 - 30 - 60; 2 - 4 - 14 - 28

**A)** 12 - 24 - 34 - 64   **B)** 8 - 10 - 20 - 40   **C)** 5 - 10 - 20 - 40   **D)** 15 - 30 - 35 - 60

Date: 24/06/2025   Time: 4:30 PM - 6:00 PM   Right: 77.70%   Wrong: 5.07%

**Q18)** If 'A' stands for '+', 'B' stands for 'x', 'C' stands for '+' and 'D' stands for '-', then the resultant of which of the following would be 75?

**A)** 84 B 12 C 76 D 36 A 4   **B)** 84 D 12 A 76 B 36 C 4   **C)** 84 A 12 D 76 C 36 B 4

**D)** 84 C 12 D 76 A 36 B 4

Date: 10/06/2025   Time: 9:00 AM - 10:30 AM   Right: 78.09%   Wrong: 8.38%

**Q19)** If 'W' stands for '+', 'X' stands for 'x', 'Y' stands for '+' and 'Z' stands for '-', then the resultant of which of the following would be 94?

**A)** 48 Y 8 X 56 W 24 Z 6   **B)** 48 Z 8 W 56 X 24 Y 6   **C)** 48 W 8 Z 56 Y 24 X 6   **D)** 48 X 8 Y 56 Z 24 W 6

Date: 11/06/2025   Time: 9:00 AM - 10:30 AM   Right: 78.14%   Wrong: 8.06%

**Q20)** Two sets of numbers are given below. In each set of numbers, certain mathematical operation(s) on the first number result(s) in the second number. Similarly, certain mathematical operation(s) on the second number result(s) in the third number and so on. Which of the given options follows the same set of operations as in the given sets?

(NOTE: Operations should be performed on the whole numbers, without breaking down the numbers into their constituent digits. E.g. 13 – Operations on 13 such as adding / subtracting / multiplying to 13 can be performed. Breaking down 13 into 1 and 3 and then performing mathematical operations on 1 and 3 is not allowed.)

5 - 6 - 10 - 20 ; 12 - 13 - 17 - 34

**A)** 17 - 18 - 22 - 44   **B)** 15 - 16 - 20 - 30   **C)** 7 - 8 - 12 - 26   **D)** 23 - 24 - 28 - 54

Date: 12/06/2025   Time: 9:00 AM - 10:30 AM   Right: 78.24%   Wrong: 5.09%

**Q21)** In the following number-pairs, the second number is obtained by applying certain mathematical operation(s) to the first number. Select the number pair in which the numbers are related in the same way as are the numbers of the following pairs.

(NOTE: Operations should be performed on the whole numbers, without breaking down the numbers into their constituent digits. E.g. 13 – Operations on 13 such as adding to/subtracting from/multiplying with 13 can be performed. Breaking down 13 into 1 and 3 and then performing mathematical operations on 1 and 3 is not allowed.)

78, 91

94, 107

**A)** 82, 105 **B)** 86, 99 **C)** 71, 74 **D)** 99, 114

Date: 20/06/2025 Time: 4:30 PM - 6:00 PM Right: 78.39% Wrong: 7.08%

**Q22)** If 'A' stands for '×', 'B' stands for '–', 'C' stands for '+', and 'D' stands for '÷', then the resultant of which of the following will be 9?

**A)** 8 B 3 A 10 C 2 D 5 **B)** 8 B 3 C 10 A 2 D 5 **C)** 8 A 3 C 10 B 2 D 5 **D)** 8 C 3 B 10 A 2 D 5

Date: 06/06/2025 Time: 12:45 PM - 2:15 PM Right: 79.31% Wrong: 10.73%

**Q23)** What will come in place of the question mark (?) in the following equation if '÷' and '–' are interchanged and '×' and '+' are interchanged?

$$612 \div 45 + 13 \times 936 - 78 = ?$$

**A)** 39 **B)** 15 **C)** 106 **D)** 112

Date: 19/06/2025 Time: 12:45 PM - 2:15 PM Right: 79.48% Wrong: 14.23%

**Q24)** Two sets of numbers are given below. In each set of numbers, certain mathematical operation(s) on the first number results in the second number. Similarly, certain mathematical operation(s) on the second number results in the third number and so on. Which of the given options follows the same set of operations as in the given sets?

(NOTE: Operations should be performed on the whole numbers, without breaking down the numbers into their constituent digits. E.g. 13 – Operations on 13 such as adding / subtracting / multiplying to 13 can be performed. Breaking down 13 into 1 and 3 and then performing mathematical operations on 1 and 3 is not allowed.)

12 - 13 - 15 - 30; 14 - 15 - 17 - 34

**A)** 3 - 4 - 5 - 10 **B)** 4 - 5 - 7 - 10 **C)** 9 - 10 - 12 - 24 **D)** 1 - 2 - 4 - 16

Date: 21/06/2025 Time: 12:45 PM - 2:15 PM Right: 79.51% Wrong: 6.43%

**Q25)** What will come in place of the question mark (?) in the following equation, if '+' and '-' are interchanged and 'x' and '÷' are interchanged?

$$35 - 112 \times 84 \div 48 + 75 = ?$$

**A) 24 B) 174 C) 86 D) 46**

Date: 23/06/2025 Time: 4:30 PM - 6:00 PM Right: 81.23% Wrong: 8.96%

**Q26)** What will come in place of the question mark (?) in the following equation if '÷' and '-' are interchanged and 'x' and '+' are interchanged?

$$89 \div 4984 - 89 \times 9 + 2 = ?$$

**A) 15 B) 51 C) 55 D) 92**

Date: 13/06/2025 Time: 9:00 AM - 10:30 AM Right: 81.63% Wrong: 9.93%

**Q27)** Which two numbers should be interchanged to make the following equation correct? (Note: The entire number should be interchanged and not individual digits of a given number.)

$$4 \times (56 - 20) + (28 \div 7) \times 5 - 17 = 55$$

**A) 4 and 5 B) 20 and 17 C) 4 and 7 D) 56 and 28**

Date: 24/06/2025 Time: 9:00 AM - 10:30 AM Right: 81.88% Wrong: 5.55%

**Q28)** Select the set in which the numbers are related in the same way as are the numbers of the following sets.

(NOTE: Operations should be performed on the whole numbers, without breaking down the numbers into their constituent digits. E.g. 13 – Operations on 13 such as adding/subtracting/multiplying to 13 can be performed. Breaking down 13 into 1 and 3 and then performing mathematical operations on 1 and 3 is not allowed.)

(23, 253, 11)

(46, 1104, 24)

**A) (4, 11, 2) B) (1, 12, 9) C) (25, 253, 10) D) (25, 525, 21)**

Date: 23/06/2025 Time: 12:45 PM - 2:15 PM Right: 82.15% Wrong: 3.78%

**Q29)** If 'P' stands for '÷', 'Q' stands for 'x', 'R' stands for '+' and 'S' stands for '-', then the resultant of which of the following would be 50?

**A) 24 S 4 Q 28 P 12 R 6 B) 24 Q 4 R 28 S 12 P 6 C) 24 P 4 S 28 R 12 Q 6 D) 24 R 4 P 28 Q 12 S 6**

Date: 13/06/2025 Time: 12:45 PM - 2:15 PM Right: 82.34% Wrong: 6.74%

**Q30)** If 'P' stands for '÷', 'Q' stands for '×', 'R' stands for '+' and 'S' stands for '-', then the resultant of which of the following would be 38?

- A)** 32 Q 8 R 30 S 16 P 4   **B)** 32 S 8 R 30 Q 16 P 4   **C)** 32 P 8 S 30 R 16 Q 4   **D)** 32 R 8 S 30 Q 16 P 4  
 Date: 13/06/2025   Time: 4:30 PM - 6:00 PM   Right: 82.38%   Wrong: 6.56%

**Q31)** If 'A' stands for '÷', 'B' stands for '×', 'C' stands for '+' and 'D' stands for '-', then the resultant of which of the following would be 5?

- A)** 96 C 12 B 45 A 3 D 14   **B)** 96 B 12 D 45 A 3 C 14   **C)** 96 A 12 D 45 C 3 B 14  
**D)** 96 D 12 C 45 B 3 A 14

Date: 09/06/2025   Time: 12:45 PM - 2:15 PM   Right: 82.66%   Wrong: 5.23%

**Q32)** Refer to the following number and symbol series and answer the question that follows. Counting to be done from left to right only.

(Note: All numbers are single digit numbers only.)

(Left) 3 © 3 # 1 & 5 £ 9 3 4 \* & 2 2 % 2 2 7 © @ (Right)

How many such symbols are there, each of which is immediately preceded by a number and also immediately followed by a symbol?

- A)** 4   **B)** 5   **C)** 3   **D)** 2

Date: 24/06/2025   Time: 12:45 PM - 2:15 PM   Right: 82.77%   Wrong: 13.44%

**Q33)** If 'P' stands for '÷', 'Q' stands for '×', 'R' stands for '+' and 'S' stands for '-', then the resultant of which of the following would be 200?

- A)** 64 P 16 S 60 R 32 Q 8   **B)** 64 R 16 Q 32 S 60 P 8   **C)** 64 Q 16 P 60 R 32 S 8  
**D)** 64 S 16 R 60 P 32 Q 8

Date: 12/06/2025   Time: 9:00 AM - 10:30 AM   Right: 83.09%   Wrong: 5.38%

**Q34)** Two sets of numbers are given below. In each set of numbers, certain mathematical operation(s) on the first number results in the second number. Similarly, certain mathematical operation(s) on the second number results in the third number and so on. Which of the given options follows the same set of operations as in the given sets?

(NOTE: Operations should be performed on the whole numbers, without breaking down the numbers into their constituent digits. E.g. 13 – Operations on 13 such as adding / subtracting / multiplying to 13 can be performed. Breaking down 13 into 1 and 3 and then performing mathematical operations on 1 and 3 is not allowed.)

10 - 20 - 25 - 50; 3 - 6 - 11 - 22

**A)** 13 - 15 - 30 - 35   **B)** 19 - 21 - 22 - 44   **C)** 5 - 10 - 15 - 30   **D)** 6 - 12 - 14 - 16

Date: 24/06/2025   Time: 12:45 PM - 2:15 PM   Right: 83.73%   Wrong: 2.22%

**Q35)** 4 is related to 10 following a certain logic. Following the same logic, 34 is related to 40. To which of the following is 66 related, following the same logic?

(NOTE: Operations should be performed on the whole numbers, without breaking down the numbers into their constituent digits. E.g. 13 – Operations on 13 such as adding/subtracting/multiplying to 13 can be performed. Breaking down 13 into 1 and 3 and then performing mathematical operations on 1 and 3 is not allowed.)

**A)** 70   **B)** 68   **C)** 72   **D)** 74

Date: 06/06/2025   Time: 4:30 PM - 6:00 PM   Right: 83.87%   Wrong: 5.52%

**Q36)** Below are given two sets of numbers. In each set of numbers, a certain mathematical operation on the first number results in the second number. Similarly, a certain mathematical operation on the second number results in the third number and so on. Which of the given options follows the same set of operations as in the question?

(NOTE – A two/three-digit number cannot be broken into individual digits for operations, e.g. if 37 is followed by 10, the operation cannot be 3+7 as a two-digit number cannot be broken into individual digits.)

3 - 5 - 10 - 12 ; 8 - 10 - 20 - 22

**A)** 6 - 10 - 12 - 24   **B)** 18 - 20 - 40 - 42   **C)** 28 - 30 - 60 - 64   **D)** 4 - 6 - 12 - 24

Date: 05/06/2025   Time: 12:45 PM - 2:15 PM   Right: 83.90%   Wrong: 4.48%

**Q37)** Two sets of numbers are given below. In each set of numbers, certain mathematical operation(s) on the first number result(s) in the second number. Similarly, certain mathematical operation(s) on the second number result(s) in the third number and so on. Which of the given options follows the same set of operations as in the given sets?

(NOTE: Operations should be performed on the whole numbers, without breaking down the numbers into their constituent digits. E.g. 13 – Operations on 13 such as adding / subtracting / multiplying to 13 can be performed. Breaking down 13 into 1 and 3 and then performing mathematical operations on 1 and 3 is not allowed.)

12 - 13 - 17 - 20 ; 22 - 23 - 27 - 30

**A)** 56 - 57 - 60 - 65   **B)** 44 - 45 - 49 - 52   **C)** 4 - 8 - 12 - 16   **D)** 32 - 33 - 37 - 41

Date: 12/06/2025   Time: 4:30 PM - 6:00 PM   Right: 84.16%   Wrong: 6.03%

**Q38)** Two sets of numbers are given below. In each set of numbers, certain mathematical operation(s) on the first number results in the second number. Similarly, certain mathematical operation(s) on the second number results in the third number and so on. Which of the given options follows the same set of operations as in the given sets?

(NOTE: Operations should be performed on the whole numbers, without breaking down the numbers into their constituent digits. E.g. 13 – Operations on 13 such as adding / subtracting / multiplying to 13 can be performed. Breaking down 13 into 1 and 3 and then performing mathematical operations on 1 and 3 is not allowed.)

6 - 12 - 15 - 30; 4 - 8 - 11 - 22

**A)** 1 - 2 - 4 - 16   **B)** 12 - 14 - 28 - 30   **C)** 11 - 22 - 25 - 50   **D)** 8 - 16 - 19 - 36

Date: 13/06/2025   Time: 9:00 AM - 10:30 AM   Right: 84.55%   Wrong: 4.30%

**Q39)** What will come in place of the question mark (?) in the following equation if '÷' and '-' are interchanged and '×' and '+' are interchanged?

$4320 - 96 \times 37 + 21 \div 372 = ?$

**A)** 822   **B)** 450   **C)** 1350   **D)** 733

Date: 21/06/2025   Time: 12:45 PM - 2:15 PM   Right: 84.57%   Wrong: 5.43%

**Q40)** Below are given two sets of numbers. In each set of numbers, a certain mathematical operation on the first number results in the second number. Similarly, a certain mathematical operation on the second number results in the third number and so on. Which of the given options follows the same set of operations as in the question?

(NOTE – A two/three-digit number cannot be broken into individual digits for operations, e.g. if 37 is followed by 10, the operation cannot be  $3+7$  as a two-digit number cannot be broken into individual digits.)

14 - 15 - 20 - 40 ; 19 - 20 - 25 - 50

**A)** 8 - 10 - 15 - 30   **B)** 3 - 4 - 9 - 14   **C)** 7 - 9 - 18 - 20   **D)** 5 - 6 - 11 - 22

Date: 06/06/2025   Time: 12:45 PM - 2:15 PM   Right: 84.70%   Wrong: 4.32%

**Q41)** Two sets of numbers are given below. In each set of numbers, certain mathematical operation(s) on the first number results in the second number. Similarly, certain mathematical operation(s) on the second number results in the third number and so on. Which of the given options follows the same set of operations as in the given sets?

(NOTE: Operations should be performed on the whole numbers, without breaking down the numbers into their constituent digits. E.g. 13 – Operations on 13 such as adding / subtracting / multiplying to 13 can be performed. Breaking down 13 into 1 and 3 and then performing mathematical operations on 1 and 3 is not allowed.)

12 - 14 - 16 - 20; 14 - 16 - 18 - 22

**A)** 3 - 5 - 7 - 11   **B)** 13 - 15 - 17 - 32   **C)** 4 - 8 - 16 - 32   **D)** 19 - 20 - 22 - 44

Date: 18/06/2025   Time: 9:00 AM - 10:30 AM   Right: 84.78%   Wrong: 2.67%

**Q42)** If 'A' stands for '+', 'B' stands for '×', 'C' stands for '+' and 'D' stands for '-', then the resultant of which of the following would be 77?

**A)** 42 B 6 C 38 D 18 A 6   **B)** 42 A 6 D 38 C 18 B 6   **C)** 42 C 6 B 38 A 18 D 6   **D)** 42 D 6 A 38 B 18 C 6

Date: 10/06/2025   Time: 12:45 PM - 2:15 PM   Right: 84.95%   Wrong: 5.71%

**Q43)** Two sets of numbers are given below. In each set of numbers, certain mathematical operation(s) on the first number result(s) in the second number. Similarly, certain mathematical operation(s) on the second number result(s) in the third number and so on. Which of the given options follows the same set of operations as in the given sets?

(NOTE: Operations should be performed on the whole numbers, without breaking down the numbers into their constituent digits. E.g. 13 – Operations on 13 such as adding / subtracting / multiplying to 13 can be performed. Breaking down 13 into 1 and 3 and then performing mathematical operations on 1 and 3 is not allowed.)

13 - 15 - 30 - 60 ; 3 - 5 - 10 - 20

**A)** 5 - 7 - 14 - 24   **B)** 10 - 12 - 24 - 42   **C)** 15 - 17 - 34 - 44   **D)** 8 - 10 - 20 - 40

Date: 11/06/2025   Time: 9:00 AM - 10:30 AM   Right: 85.11%   Wrong: 2.92%

**Q44)** Two sets of numbers are given below. In each set of numbers, certain mathematical operation(s) on the first number results in the second number. Similarly, certain mathematical operation(s) on the second number results in the third number and so on. Which of the given options follows the same set of operations as in the given sets?

(NOTE: Operations should be performed on the whole numbers, without breaking down the numbers into their constituent digits. E.g. 13 – Operations on 13 such as adding / subtracting / multiplying to 13 can be performed. Breaking down 13 into 1 and 3 and then performing mathematical operations on 1 and 3 is not allowed.)

13 - 26 - 30 - 60; 5 - 10 - 14 - 28

**A)** 3 - 6 - 10 - 30   **B)** 7 - 14 - 18 - 22   **C)** 10 - 20 - 24 - 48   **D)** 2 - 4 - 8 - 12

Date: 16/06/2025   Time: 4:30 PM - 6:00 PM   Right: 85.29%   Wrong: 3.43%

**Q45)** Select the set in which the numbers are related in the same way as are the numbers of the following sets.

(NOTE: Operations should be performed on the whole numbers, without breaking down the numbers into their constituent digits. E.g. 13 – Operations on 13 such as adding/subtracting/multiplying to 13 can be performed. Breaking down 13 into 1 and 3 and then performing mathematical operations on 1 and 3 is not allowed.)

(29, 53, 24)

(12, 32, 20)

**A)** (47, 75, 25)   **B)** (24, 40, 13)   **C)** (49, 71, 19)   **D)** (46, 60, 14)

Date: 23/06/2025   Time: 9:00 AM - 10:30 AM   Right: 85.51%   Wrong: 2.55%

**Q46)** 12 is related to 8 following a certain logic. Following the same logic, 56 is related to 52. To which of the following is 49 related, following the same logic?

(NOTE: Operations should be performed on the whole numbers, without breaking down the numbers into their constituent digits. E.g. 13 – Operations on 13 such as adding/subtracting/multiplying to 13 can be performed. Breaking down 13 into 1 and 3 and then performing mathematical operations on 1 and 3 is not allowed.)

**A)** 45   **B)** 36   **C)** 50   **D)** 40

Date: 24/06/2025   Time: 9:00 AM - 10:30 AM   Right: 85.80%   Wrong: 3.88%

**Q47)** If '-' means '÷', '÷' means '×', '×' means '+' and '+' means '-', then what will come in place of the question mark (?) in the following equation?

$$5 \times 39 \div 1407 - 3 + 11562 = ?$$

**A) 6734 B) 9074 C) 3426 D) 1120**

Date: 09/06/2025 Time: 9:00 AM - 10:30 AM Right: 85.81% Wrong: 7.65%

**Q48)** This question is based on the five, three-digit numbers given below.

(Left) 325 503 158 391 144 (Right)

(Example- 697 – First digit = 6, second digit = 9 and third digit = 7)

(NOTE: All operations to be done from left to right.)

What will be the resultant if the second digit of the highest number is added to the first digit of the lowest number?

**A) 2 B) 0 C) 4 D) 1**

Date: 12/06/2025 Time: 4:30 PM - 6:00 PM Right: 85.94% Wrong: 7.63%

**Q49)** 67 is related to 74 following a certain logic. Following the same logic, 13 is related to 20. To which of the following is 52 related, following the same logic?

(NOTE: Operations should be performed on the whole numbers, without breaking down the numbers into their constituent digits. E.g. 13 – Operations on 13 such as adding/subtracting/multiplying to 13 can be performed. Breaking down 13 into 1 and 3 and then performing mathematical operations on 1 and 3 is not allowed.)

**A) 63 B) 57 C) 59 D) 61**

Date: 05/06/2025 Time: 9:00 AM - 10:30 AM Right: 86.02% Wrong: 4.82%

**Q50)** What will come in place of the question mark (?) in the following equation if '÷' and '-' are interchanged and '×' and '+' are interchanged?

$$522 \times 708 - 59 + 19 \div 17 = ?$$

**A) 733 B) 567 C) 379 D) 768**

Date: 18/06/2025 Time: 4:30 PM - 6:00 PM Right: 86.04% Wrong: 5.36%

**Q51)** Two sets of numbers are given below. In each set of numbers, certain mathematical operation(s) on the first number results in the second number. Similarly, certain mathematical operation(s) on the second number results in the third number and so on. Which of the given options follows the same set of operations as in the given sets?

(NOTE: Operations should be performed on the whole numbers, without breaking down the numbers into their constituent digits. E.g. 13 – Operations on 13 such as adding / subtracting / multiplying to 13 can be performed. Breaking down 13 into 1 and 3 and then performing mathematical operations on 1 and 3 is not allowed.)

11 - 22 - 44 - 45; 3 - 6 - 12 - 13

**A)** 1 - 2 - 3 - 6   **B)** 19 - 20 - 22 - 44   **C)** 4 - 8 - 16 - 17   **D)** 13 - 14 - 15 - 20

Date: 19/06/2025   Time: 9:00 AM - 10:30 AM   Right: 86.68%   Wrong: 2.26%

**Q52)** What will come in the place of the question mark (?) in the following equation, if '+' and '-' are interchanged and '×' and '÷' are interchanged?

$38 \div 21 + 436 \times 4 - 73 = ?$

**A)** 761   **B)** 762   **C)** 764   **D)** 763

Date: 05/06/2025   Time: 9:00 AM - 10:30 AM   Right: 87.02%   Wrong: 7.38%

**Q53)** Select the set in which the numbers are related in the same way as are the numbers of the following sets.

(NOTE: Operations should be performed on the whole numbers, without breaking down the numbers into their constituent digits. E.g. 13 – Operations on 13 such as adding/subtracting/multiplying to 13 can be performed. Breaking down 13 into 1 and 3 and then performing mathematical operations on 1 and 3 is not allowed.)

(43, 48, 5)

(49, 70, 21)

**A)** (36, 52, 13)   **B)** (45, 52, 4)   **C)** (20, 34, 14)   **D)** (48, 71, 20)

Date: 10/06/2025   Time: 9:00 AM - 10:30 AM   Right: 87.09%   Wrong: 2.31%

**Q54)** Below are given two sets of numbers. In each set of numbers, a certain mathematical operation on the first number results in the second number. Similarly, a certain mathematical operation on the second number results in the third number and so on. Which of the given options follows the same set of operations as in the question?

(NOTE – A two/three-digit number cannot be broken into individual digits for operations, e.g. if 37 is followed by 10, the operation cannot be  $3+7$  as a two-digit number cannot be broken into individual digits.)

11 - 12 - 13 - 26 ; 19 - 20 - 21 - 42

**A)** 9 - 10 - 11 - 24   **B)** 3 - 4 - 5 - 12   **C)** 7 - 8 - 9 - 18   **D)** 4 - 5 - 6 - 10

Date: 06/06/2025   Time: 9:00 AM - 10:30 AM   Right: 87.40%   Wrong: 2.47%

**Q55)** Two sets of numbers are given below. In each set of numbers, certain mathematical operation(s) on the first number result(s) in the second number. Similarly, certain mathematical operation(s) on the second number result(s) in the third number and so on. Which of the given options follows the same set of operations as in the given sets?

(NOTE: Operations should be performed on the whole numbers, without breaking down the numbers into their constituent digits. E.g. 13 – Operations on 13 such as adding / subtracting / multiplying to 13 can be performed. Breaking down 13 into 1 and 3 and then performing mathematical operations on 1 and 3 is not allowed.)

10 - 20 - 40 - 80 ; 3 - 6 - 12 - 24

**A)** 5 - 10 - 20 - 30   **B)** 8 - 10 - 20 - 40   **C)** 4 - 8 - 12 - 24   **D)** 6 - 12 - 24 - 48

Date: 09/06/2025   Time: 12:45 PM - 2:15 PM   Right: 87.40%   Wrong: 3.51%

**Q56)** What will come in place of the question mark (?) in the following equation, if '+' and '-' are interchanged and '×' and '÷' are interchanged?

$76 \div 9 + 818 \times 2 - 93 = ?$

**A)** 398   **B)** 378   **C)** 388   **D)** 368

Date: 16/06/2025   Time: 9:00 AM - 10:30 AM   Right: 87.45%   Wrong: 6.99%

**Q57)** What will come in the place of '?' in the following equation, if '+' and '-' are interchanged and '×' and '÷' are interchanged?

$41 \div 19 + 448 \times 4 - 26 = ?$

**A)** 696   **B)** 691   **C)** 699   **D)** 693

Date: 12/06/2025   Time: 12:45 PM - 2:15 PM   Right: 88.19%   Wrong: 8.53%

**Q58)** Refer to the following number and symbol series and answer the question that follows. Counting to be done from left to right only.

(Left) 7 & 9 ^ # 1 \* 5 < 2 6 ≡ 4 Δ 3 \$ @ 8 (Right)

How many such symbols are there, each of which is immediately preceded by a number and also immediately followed by another number?

**A)** Three **B)** One **C)** More than three **D)** Two

Date: 20/06/2025 Time: 12:45 PM - 2:15 PM Right: 88.31% Wrong: 8.48%

**Q59)** What will come in the place of the question mark (?) in the following equation, if '+' and '-' are interchanged and 'x' and '÷' are interchanged?

$$51 \div 12 + 162 \times 3 - 104 = ?$$

**A)** 662 **B)** 642 **C)** 672 **D)** 652

Date: 09/06/2025 Time: 4:30 PM - 6:00 PM Right: 88.39% Wrong: 7.20%

**Q60)** What will come in the place of the question mark (?) in the following equation, if '+' and '-' are interchanged and 'x' and '÷' are interchanged?

$$117 \div 7 + 426 \times 6 - 66 = ?$$

**A)** 811 **B)** 804 **C)** 809 **D)** 814

Date: 18/06/2025 Time: 4:30 PM - 6:00 PM Right: 88.57% Wrong: 6.48%

**Q61)** What will come in the place of the question mark '(?)' in the following equation, if '+' and '-' are interchanged and 'x' and '÷' are interchanged?

$$116 \div 5 - 423 \times 3 + 13 = ?$$

**A)** 508 **B)** 808 **C)** 708 **D)** 608

Date: 14/06/2025 Time: 12:45 PM - 2:15 PM Right: 88.65% Wrong: 8.11%

**Q62)** What will come in place of the question mark (?) in the following equation if '+' and '-' are interchanged and 'x' and '÷' are interchanged?

$$1125 \times 45 \div 39 - 17 + 19 = ?$$

**A)** 992 **B)** 973 **C)** 379 **D)** 975

Date: 05/06/2025 Time: 9:00 AM - 10:30 AM Right: 88.80% Wrong: 4.97%

**Q63)** What will come in the place of the question mark (?) in the following equation, if '+' and '-' are interchanged and 'x' and '÷' are interchanged?

$$48 \div 14 - 168 \times 3 + 47 = ?$$

**A) 681 B) 691 C) 671 D) 661**

Date: 11/06/2025 Time: 4:30 PM - 6:00 PM Right: 88.91% Wrong: 6.91%

**Q64)** What will come in the place of the question mark (?) in the following equation, if '+' and '-' are interchanged and 'x' and '÷' are interchanged?

$$127 \div 7 + 324 \times 4 - 47 = ?$$

**A) 855 B) 755 C) 795 D) 885**

Date: 13/06/2025 Time: 4:30 PM - 6:00 PM Right: 89.03% Wrong: 6.13%

**Q65)** This question is based on the five, three-digit numbers given below.

(Left) 910 316 525 204 303 (Right)

(Example: 697 – First digit = 6, second digit = 9 and third digit = 7)

(NOTE: All operations to be done from left to right.)

What will be the resultant if the first digit of the highest number is added to the second digit of the lowest number?

**A) 9 B) 12 C) 8 D) 10**

Date: 06/06/2025 Time: 12:45 PM - 2:15 PM Right: 89.05% Wrong: 4.68%

**Q66)** What will come in the place of the question mark '(?)' in the following equation, if '+' and '-' are interchanged and 'x' and '÷' are interchanged?

$$43 \div 9 - 988 \times 2 + 11 = ?$$

**A) 880 B) 895 C) 870 D) 875**

Date: 16/06/2025 Time: 4:30 PM - 6:00 PM Right: 89.11% Wrong: 7.18%

**Q67)** Refer to the following number and symbol series and answer the question that follows. Counting to be done from left to right only. All numbers are single-digit numbers.

(Left) 3 \* 9 & % 4 6 @ 9 # 1 \* £ 5 8 \$ 7 & 3 Ω (Right)

How many such symbols are there each of which is immediately preceded by a symbol and also immediately followed by a number?

**A) Two B) One C) Three D) Four**

Date: 06/06/2025 Time: 9:00 AM - 10:30 AM Right: 89.15% Wrong: 7.97%

**Q68)** If 'P' stands for '×', 'Q' stands for '÷', 'R' stands for '-' and 'S' stands for '+', then what will come in place of the question mark (?) in the following equation?

(11 S 7) P 3 R 41 S 8 P 12 R 54 = ?

**A) 70 B) 55 C) 32 D) 40**

Date: 23/06/2025 Time: 12:45 PM - 2:15 PM Right: 89.30% Wrong: 4.73%

**Q69)** What will come in the place of the question mark (?) in the following equation, if '+' and '-' are interchanged and '×' and '÷' are interchanged?

$187 \div 3 + 168 \times 2 - 174 = ?$

**A) 654 B) 652 C) 651 D) 653**

Date: 17/06/2025 Time: 4:30 PM - 6:00 PM Right: 89.35% Wrong: 6.85%

**Q70)** What will come in the place of the question mark (?) in the following equation, if '+' and '-' are interchanged and '×' and '÷' are interchanged?

$215 \div 4 + 822 \times 3 - 45 = ?$

**A) 691 B) 631 C) 521 D) 581**

Date: 17/06/2025 Time: 4:30 PM - 6:00 PM Right: 89.41% Wrong: 6.82%

**Q71)** What will come in the place of the question mark (?) in the following equation, if '+' and '-' are interchanged and '×' and '÷' are interchanged?

$131 \div 6 + 1818 \times 18 - 23 = ?$

**A) 711 B) 705 C) 708 D) 701**

Date: 17/06/2025 Time: 9:00 AM - 10:30 AM Right: 89.50% Wrong: 5.43%

**Q72)** What will come in the place of the question mark (?) in the following equation, if '+' and '-' are interchanged and 'x' and '÷' are interchanged?

$$127 \div 5 + 707 \times 7 - 38 = ?$$

**A) 572 B) 576 C) 571 D) 575**

Date: 10/06/2025 Time: 9:00 AM - 10:30 AM Right: 89.55% Wrong: 6.61%

**Q73)** 54 is related to 59 following a certain logic. Following the same logic, 30 is related to 35. To which of the following is 11 related, following the same logic?

(NOTE: Operations should be performed on the whole numbers, without breaking down the numbers into their constituent digits. E.g. 13 – Operations on 13 such as adding/subtracting/multiplying to 13 can be performed. Breaking down 13 into 1 and 3 and then performing mathematical operations on 1 and 3 is not allowed.)

**A) 18 B) 16 C) 15 D) 17**

Date: 05/06/2025 Time: 4:30 PM - 6:00 PM Right: 89.61% Wrong: 3.28%

**Q74)** Refer to the following number and symbol series and answer the question that follows. Counting to be done from left to right only.

(Left) 5 @ 6 # 8 \$ % 1 9 ^ 7 < 2 3 ≧ 4 (Right)

How many such symbols are there, each of which is immediately preceded by a number and also immediately followed by another number?

**A) One B) Three C) Two D) More than three**

Date: 23/06/2025 Time: 12:45 PM - 2:15 PM Right: 90.00% Wrong: 7.15%

**Q75)** 10 is related to 2 following a certain logic. Following the same logic, 45 is related to 9. To which of the following is 50 related, following the same logic?

(NOTE: Operations should be performed on the whole numbers, without breaking down the numbers into their constituent digits. E.g. 13 – Operations on 13 such as adding/subtracting/multiplying to 13 can be performed. Breaking down 13 into 1 and 3 and then performing mathematical operations on 1 and 3 is not allowed.)

**A) 10 B) 5 C) 20 D) 15**

Date: 18/06/2025 Time: 12:45 PM - 2:15 PM Right: 90.24% Wrong: 3.56%

**Q76)** What will come in place of the question mark (?) in the following equation, if '+' and '-' are interchanged, and 'x' and '÷' are interchanged?

$$34 + 43 - 17 \div 121 \times 11 = ?$$

**A) 181 B) 164 C) 156 D) 178**

Date: 16/06/2025 Time: 4:30 PM - 6:00 PM Right: 90.37% Wrong: 5.33%

**Q77)** 6 is related to 42 following a certain logic. Following the same logic, 4 is related to 28. To which of the following is 7 related, following the same logic?

(NOTE: Operations should be performed on the whole numbers, without breaking down the numbers into their constituent digits. E.g. 13 – Operations on 13 such as adding/subtracting/multiplying to 13 can be performed. Breaking down 13 into 1 and 3 and then performing mathematical operations on 1 and 3 is not allowed.)

**A) 45 B) 38 C) 49 D) 42**

Date: 13/06/2025 Time: 4:30 PM - 6:00 PM Right: 90.41% Wrong: 3.98%

**Q78)** What will come in place of the question mark (?) in the following equation, if '+' and '-' are interchanged, and 'x' and '÷' are interchanged?

$$43 + 15 \div 2 - 12 \times 4 = ?$$

**A) 16 B) 18 C) 22 D) 24**

Date: 06/06/2025 Time: 4:30 PM - 6:00 PM Right: 90.51% Wrong: 6.75%

**Q79)** What will come in the place of the question mark (?) in the following equation, if '+' and '-' are interchanged and 'x' and '÷' are interchanged?

$$43 \div 13 - 648 \times 8 + 52 = ?$$

**A) 588 B) 581 C) 586 D) 583**

Date: 11/06/2025 Time: 9:00 AM - 10:30 AM Right: 90.55% Wrong: 4.56%

**Q80)** If '-' means '÷', '÷' means 'x', 'x' means '+' and '+' means '-', then what will come in place of the question mark (?) in the following equation?

$$1568 - 16 + 4 \div 5 \times 22 = ?$$

**A) 492 B) 294 C) 100 D) 113**

Date: 06/06/2025 Time: 12:45 PM - 2:15 PM Right: 90.68% Wrong: 4.46%

हिंदी माध्यम

# रेलवे गणित

ALP, TECHNICIAN, RPF, NTPC, GROUP D & RRB JE

2ND EDITION

- Type-wise & Level-wise
- Chapter-wise Test
- Smart Approach and Short Tricks

PRICE

~~₹430~~

₹299

ORDER NOW

AVAILABLE ON

amazon

Flipkart



**COMPLETE MATHS**  
**ब्रह्मास्त्र**  
**FORMULA BOOK**  
 CLASS NOTES • CONCEPTS • SHORT TRICKS  
 SOLVED EXAMPLES • CALCULATION TRICKS  
**ADITYA RANJAN SIR**  
 EXCISE INSPECTOR  
 USEFUL FOR: CET, SSC, RAILWAYS, DEFENCE, BANKING, & ALL GOVT. EXAMS  
 Selected है Selection दिलायेंगे

**BUY NOW**

**रेलवे गणित**  
 2<sup>nd</sup> EDITION  
 हिन्दी माध्यम  
 2018 से अब तक RRB द्वारा पूछे गए सभी सवाल  
**4000+ MCQs** चेप्टर - वाइज  
 NTPC, RPF SI, RPF CONSTABLE, ALP, TECHNICIAN, GROUP D, RRB JE and other railway exams.  
 Typewise & Levelwise  
 Chapter-wise Test  
 Smart Approach and Short Tricks  
**आदित्य रंजन सर**  
 (Excise Inspector)  
 "SELECTED है, SELECTION दिलाएंगे"

**BUY NOW**

**RAILWAY MATHS**  
 ENGLISH MEDIUM  
 All questions asked by RRB from 2018 till date  
**4000+ MCQs** Chapter-Wise  
 NTPC, RPF SI, RPF CONSTABLE, ALP, TECHNICIAN, GROUP D, RRB JE and other railway exams.  
 Type-wise & Level-wise  
 Chapter-wise Test  
 Smart Approach and Short Tricks  
**Aditya Ranjan Sir**  
 (Excise Inspector)  
 "SELECTED है, SELECTION दिलाएंगे"

**BUY NOW**

**रेलवे सामान्य विज्ञान**  
 5000+ चिप्टर-वाइज  
 One-liner & MCQs.  
 भौतिक विज्ञान | रसायन विज्ञान  
 जीव विज्ञान  
 नवीनतम पैटर्न पर आधारित  
 पूर्णतः परीक्षाओं की सफलता के लिए  
 सफलता के लिए संश्लेषण करने के लिए एक साथ  
**Useful for:**  
 RRB ALP, Technician, NTPC (CBT-1 & CBT-2), Group D, RPF SI & Constable, JE, other govt. exams.  
**आदित्य रंजन सर**  
 (Excise Inspector)  
 SELECTED है SELECTION दिलाएंगे

**BUY NOW**

**Railway General Science**  
 English Medium 5000+ Chapter-Wise  
 One-liner & MCQs.  
**Physics | Chemistry**  
**Biology**  
 BASED ON LATEST PATTERN  
 Complete Coverage of Previous exams  
 Factual & Numerical Questions Included  
**Useful for:**  
 RRB ALP, Technician, NTPC (CBT-1 & CBT-2), Group D, RPF SI & Constable, JE, other govt. exams.  
**ADITYA RANJAN SIR**  
 (Excise Inspector)  
 SELECTED है SELECTION दिलाएंगे

**BUY NOW**

**रेलवे NTPC**  
 2025-26 Edition  
 TCS PYQs सहित  
 नान टेक्निकल पोपुलर कॅटेगिरी  
 20 प्रैक्टिस पेपर्स | 10 मॉल्टिपल चॉइस पेपर्स | 30 SETS  
**CBT-01**  
 स्नातक स्तरीय  
 Chief Commercial Cum Ticket Supervisor  
 Junior Account Assistant Cum Typist  
 Senior Clerk Cum Typist  
 Goods Train Manager  
 Station Master  
 गैर स्नातक स्तरीय  
 Commercial Cum Ticket Clerk  
 Accounts Clerk Cum Typist  
 Junior Clerk Cum Typist  
 Train Clerk  
**प्रैक्टिस वर्क बुक**  
 विस्तृत व्याख्या सहित  
**आदित्य रंजन सर**  
 (Excise Inspector)

**BUY NOW**

**रेलवे ग्रुप-D परीक्षा**  
 2025-26 Edition  
 TCS PYQs सहित  
 15 मॉल्टिपल चॉइस पेपर्स | 30 प्रैक्टिस पेपर्स | 15 SETS  
**प्रैक्टिस वर्क बुक**  
 विस्तृत व्याख्या सहित  
 नवीनतम पाठ्यक्रम एवं पैटर्न पर आधारित  
**आदित्य रंजन सर**  
 (Excise Inspector)  
 SELECTED है SELECTION दिलाएंगे

**BUY NOW**



ऊपर दी गयी किसी भी **BOOK** को अभी **ORDER** करने के लिए उसी पर **CLICK** कीजिये  
**AVAILABLE on Flipkart** **amazon.in**

**Q81)** If 'A' stands for '÷', 'B' stands for '×', 'C' stands for '+' and 'D' stands for '-', what will come in place of the question mark (?) in the following equation?

$$63 \text{ D } 19 \text{ C } 6 \text{ B } 9 \text{ D } (56 \text{ A } 4) = ?$$

**A) 96 B) 84 C) 62 D) 120**

Date: 24/06/2025 Time: 12:45 PM - 2:15 PM Right: 90.96% Wrong: 3.84%

**Q82)** What will come in the place of the question mark (?) in the following equation, if '+' and '-' are interchanged and '×' and '÷' are interchanged?

$$121 \div 6 + 384 \times 3 - 31 = ?$$

**A) 623 B) 621 C) 629 D) 626**

Date: 10/06/2025 Time: 4:30 PM - 6:00 PM Right: 91.00% Wrong: 5.52%

**Q83)** What will come in the place of the question mark (?) in the following equation, if '+' and '-' are interchanged and '×' and '÷' are interchanged?

$$69 \div 11 + 408 \times 6 - 14 = ?$$

**A) 705 B) 720 C) 710 D) 715**

Date: 12/06/2025 Time: 4:30 PM - 6:00 PM Right: 91.34% Wrong: 4.49%

**Q84)** If 'S' stands for '-', 'Q' stands for '×', 'R' stands for '÷', and 'P' stands for '+', what will come in place of the question mark (?) in the following equation?

$$1 \text{ P } 4 \text{ 5 R } 2 \text{ Q } 2 \text{ S } 4 = ?$$

**A) 40 B) 42 C) 46 D) 36**

Date: 05/06/2025 Time: 12:45 PM - 2:15 PM Right: 91.41% Wrong: 5.90%

**Q85)** What will come in place of the question mark (?) in the following equation, if '+' and '-' are interchanged and '×' and '÷' are interchanged?

$$54 \div 11 + 272 \times 8 - 114 = ?$$

**A) 674 B) 672 C) 675 D) 673**

Date: 05/06/2025 Time: 4:30 PM - 6:00 PM Right: 91.47% Wrong: 4.19%

**Q86)** What will come in the place of the question mark (?) in the following equation, if '+' and '-' are interchanged and 'x' and '÷' are interchanged?

$$186 \div 5 + 189 \times 3 - 2 = ?$$

**A) 869 B) 887 C) 884 D) 881**

Date: 13/06/2025 Time: 12:45 PM - 2:15 PM Right: 91.59% Wrong: 4.83%

**Q87)** 12 is related to 4 following a certain logic. Following the same logic, 24 is related to 8. To which of the following is 60 related, following the same logic?

(NOTE: Operations should be performed on the whole numbers, without breaking down the numbers into their constituent digits. E.g. 13 – Operations on 13 such as adding/subtracting/multiplying to 13 can be performed. Breaking down 13 into 1 and 3 and then performing mathematical operations on 1 and 3 is not allowed.)

**A) 30 B) 15 C) 25 D) 20**

Date: 16/06/2025 Time: 9:00 AM - 10:30 AM Right: 91.61% Wrong: 3.62%

**Q88)** What will come in place of the question mark (?) in the following equation, if '+' and '-' are interchanged and 'x' and '÷' are interchanged?

$$66 \div 8 - 231 \times 11 + 14 = ?$$

**A) 545 B) 525 C) 515 D) 535**

Date: 06/06/2025 Time: 9:00 AM - 10:30 AM Right: 91.73% Wrong: 4.59%

**Q89)** If 'P' stands for 'x', 'Q' stands for '÷', 'R' stands for '-' and 'S' stands for '+', then what will come in place of the question mark (?) in the following equation?

$$29 S 9 P 3 R 13 P 4 S 55 = ?$$

**A) 59 B) 27 C) 83 D) 41**

Date: 23/06/2025 Time: 9:00 AM - 10:30 AM Right: 91.77% Wrong: 3.74%

**Q90)** If 'P' stands for 'x', 'Q' stands for '÷', 'R' stands for '-' and 'S' stands for '+', then what will come in place of the question mark (?) in the following equation?

$$37 S (28 Q 7) P 5 R 4 P 6 S 21 = ?$$

**A) 43 B) 54 C) 69 D) 76**

Date: 21/06/2025 Time: 12:45 PM - 2:15 PM Right: 91.82% Wrong: 3.83%

**Q91)** What will come in the place of the question mark '?' in the following equation, if '+' and '-' are interchanged and 'x' and '÷' are interchanged?

$$175 \div 5 + 213 \times 3 - 75 = ?$$

**A) 889 B) 879 C) 898 D) 869**

Date: 16/06/2025 Time: 4:30 PM - 6:00 PM Right: 91.98% Wrong: 4.23%

**Q92)** What will come in the place of the question mark (?) in the following equation, if '+' and '-' are interchanged and 'x' and '÷' are interchanged?

$$36 \div 15 - 175 \times 5 + 11 = ?$$

**A) 524 B) 564 C) 464 D) 484**

Date: 09/06/2025 Time: 9:00 AM - 10:30 AM Right: 92.12% Wrong: 4.31%

**Q93)** 72 is related to 9 following a certain logic. Following the same logic, 24 is related to 3. To which of the following is 64 related, following the same logic?

(NOTE: Operations should be performed on the whole numbers, without breaking down the numbers into their constituent digits. E.g. 13 – Operations on 13 such as adding/subtracting/multiplying to 13 can be performed. Breaking down 13 into 1 and 3 and then performing mathematical operations on 1 and 3 is not allowed.)

**A) 6 B) 8 C) 7 D) 9**

Date: 21/06/2025 Time: 4:30 PM - 6:00 PM Right: 92.19% Wrong: 1.93%

**Q94)** If '+' means '-', '-' means 'x', 'x' means '÷' and '÷' means '+', then what will come in place of the question mark (?) in the following equation?

$$13 - 780 \times 12 \div 16 + 32 = ?$$

**A) 829 B) 929 C) 815 D) 1232**

Date: 05/06/2025 Time: 4:30 PM - 6:00 PM Right: 92.23% Wrong: 3.61%

**Q95)** What will come in place of the question mark (?) in the following equation, if '+' and '-' are interchanged and 'x' and '÷' are interchanged?

$$63 \div 12 - 98 \times 7 + 35 = ?$$

**A) 742 B) 735 C) 745 D) 736**

Date: 05/06/2025 Time: 12:45 PM - 2:15 PM Right: 92.28% Wrong: 4.55%

**Q96)** If 'A' stands for '÷', 'B' stands for '×', 'C' stands for '+' and 'D' stands for '-', then what will come in place of the question mark (?) in the following equation?

$$19 B 4 D 7 B 8 C 32 D 11 B 2 = ?$$

**A) 48 B) 22 C) 30 D) 16**

Date: 16/06/2025 Time: 12:45 PM - 2:15 PM Right: 92.28% Wrong: 3.51%

**Q97)** What will come in place of the question mark (?) in the following equation, if '+' and '-' are interchanged and '×' and '÷' are interchanged?

$$8 \div 7 + 56 \times 14 - 2 = ?$$

**A) 56 B) 52 C) 58 D) 54**

Date: 06/06/2025 Time: 4:30 PM - 6:00 PM Right: 92.48% Wrong: 5.32%

**Q98)** If '-' means '÷', '÷' means '×', '×' means '+' and '+' means '-', then what will come in place of the question mark (?) in the following equation?

$$3 \div 45 \times 855 - 19 + 16 = ?$$

**A) 180 B) 136 C) 164 D) 460**

Date: 09/06/2025 Time: 4:30 PM - 6:00 PM Right: 92.52% Wrong: 2.71%

**Q99)** 45 is related to 5 following a certain logic. Following the same logic, 81 is related to 9. To which of the following is 63 related, following the same logic?

(NOTE: Operations should be performed on the whole numbers, without breaking down the numbers into their constituent digits. E.g. 13 – Operations on 13 such as adding/subtracting/multiplying to 13 can be performed. Breaking down 13 into 1 and 3 and then performing mathematical operations on 1 and 3 is not allowed.)

**A) 7 B) 9 C) 8 D) 6**

Date: 14/06/2025 Time: 9:00 AM - 10:30 AM Right: 92.52% Wrong: 3.52%

**Q100)** If 'A' stands for '÷', 'B' stands for '×', 'C' stands for '+' and 'D' stands for '-', then what will come in place of the question mark (?) in the following equation?

$$89 D 7 B 5 C (78 A 6) C 22 = ?$$

**A) 105 B) 74 C) 89 D) 97**

Date: 21/06/2025 Time: 9:00 AM - 10:30 AM Right: 92.53% Wrong: 3.21%

**Q101)** What will come in the place of the question mark '(?)' in the following equation, if '+' and '-' are interchanged and 'x' and '÷' are interchanged?

$$31 \div 15 - 1017 \times 9 + 22 = ?$$

**A) 558 B) 552 C) 554 D) 556**

Date: 14/06/2025 Time: 9:00 AM - 10:30 AM Right: 92.58% Wrong: 3.81%

**Q102)** What will come in the place of the question mark (?) in the following equation, if '+' and '-' are interchanged and 'x' and '÷' are interchanged?

$$151 \div 3 + 168 \times 8 - 145 = ?$$

**A) 577 B) 557 C) 547 D) 567**

Date: 11/06/2025 Time: 12:45 PM - 2:15 PM Right: 92.66% Wrong: 3.35%

**Q103)** What will come in the place of the question mark (?) in the following equation, if '+' is replaced by '-' and 'x' and '÷' are interchanged?

$$66 \div 2 + 6 \times 1 + 9 = ?$$

**A) 117 B) 120 C) 110 D) 105**

Date: 19/06/2025 Time: 9:00 AM - 10:30 AM Right: 92.69% Wrong: 3.62%

**Q104)** What will come in place of the question mark (?) in the following equation, if '+' and '-' are interchanged, and 'x' and '÷' are interchanged?

$$87 \times 3 \div 4 + 12 - 30 = ?$$

**A) 134 B) 145 C) 122 D) 144**

Date: 10/06/2025 Time: 12:45 PM - 2:15 PM Right: 92.74% Wrong: 4.59%

**Q105)** If '-' means '÷', '÷' means 'x', 'x' means '+' and '+' means '-', then what will come in place of the question mark (?) in the following equation?

$$9 \div 12 \times 450 + 8208 - 18 = ?$$

**A) 100 B) 101 C) 102 D) 425**

Date: 06/06/2025 Time: 4:30 PM - 6:00 PM Right: 92.75% Wrong: 3.47%

**Q106)** What will come in the place of the question mark (?) in the following equation, if '+' and '-' are interchanged and 'x' and '÷' are interchanged?

$$45 \div 13 - 286 \times 2 + 68 = ?$$

**A) 680 B) 670 C) 660 D) 690**

Date: 09/06/2025 Time: 12:45 PM - 2:15 PM Right: 92.77% Wrong: 3.72%

**Q107)** If 'P' stands for 'x', 'Q' stands for '÷', 'R' stands for '-' and 'S' stands for '+', then what will come in place of the question mark (?) in the following equation?

$$(110 R 32) Q 2 S 9 P 4 R 21 = ?$$

**A) 36 B) 22 C) 54 D) 48**

Date: 24/06/2025 Time: 4:30 PM - 6:00 PM Right: 92.86% Wrong: 3.16%

**Q108)** What will come in the place of the question mark (?) in the following equation, if '+' and '-' are interchanged and 'x' and '÷' are interchanged?

$$122 \div 4 + 65 \times 5 - 41 = ?$$

**A) 516 B) 518 C) 512 D) 522**

Date: 18/06/2025 Time: 12:45 PM - 2:15 PM Right: 92.87% Wrong: 4.17%

**Q109)** If 'A' stands for '÷', 'B' stands for 'x', 'C' stands for '+', and 'D' stands for '-', what will come in place of the question mark (?) in the following equation?

$$45 B 14 A 21 D 17 C 25 = ?$$

**A) 54 B) 42 C) 36 D) 38**

Date: 05/06/2025 Time: 4:30 PM - 6:00 PM Right: 93.11% Wrong: 3.14%

**Q110)** 5 is related to 35 following a certain logic. Following the same logic, 2 is related to 14. To which of the following is 9 related, following the same logic?

(NOTE: Operations should be performed on the whole numbers, without breaking down the numbers into their constituent digits. E.g. 13 – Operations on 13 such as adding/subtracting/multiplying to 13 can be performed. Breaking down 13 into 1 and 3 and then performing mathematical operations on 1 and 3 is not allowed.)

**A) 63 B) 61 C) 65 D) 67**

Date: 10/06/2025 Time: 12:45 PM - 2:15 PM Right: 93.13% Wrong: 1.58%

**Q111)** If 'A' stands for '÷', 'B' stands for '×', 'C' stands for '+' and 'D' stands for '-', then what will come in place of the question mark (?) in the following equation?

$$103 C (64 A8) B 2 C 9 B 3 D 33 = ?$$

**A) 129 B) 113 C) 137 D) 91**

Date: 17/06/2025 Time: 9:00 AM - 10:30 AM Right: 93.17% Wrong: 2.68%

**Q112)** If 'P' stands for '×', 'Q' stands for '÷', 'R' stands for '-' and 'S' stands for '+', then what will come in place of the question mark (?) in the following equation?

$$81 S 28 R 39 S (98 Q 7) = ?$$

**A) 72 B) 96 C) 84 D) 68**

Date: 21/06/2025 Time: 4:30 PM - 6:00 PM Right: 93.19% Wrong: 3.63%

**Q113)** 35 is related to 70 following a certain logic. Following the same logic, 24 is related to 48. To which of the following is 11 related, following the same logic?

(NOTE: Operations should be performed on the whole numbers, without breaking down the numbers into their constituent digits. E.g. 13 – Operations on 13 such as adding/subtracting/multiplying to 13 can be performed. Breaking down 13 into 1 and 3 and then performing mathematical operations on 1 and 3 is not allowed.)

**A) 23 B) 20 C) 21 D) 22**

Date: 11/06/2025 Time: 12:45 PM - 2:15 PM Right: 93.20% Wrong: 1.71%

**Q114)** If '+' means '-', '-' means '×', '×' means '÷' and '÷' means '+', then what will come in place of the question mark (?) in the following equation?

$$502 \div 78 + 2 - 258 \times 2 = ?$$

**A) 124 B) 74562 C) 322 D) 560**

Date: 05/06/2025 Time: 12:45 PM - 2:15 PM Right: 93.34% Wrong: 3.46%

**Q115)** What will come in the place of the question mark (?) in the following equation, if '+' and '-' are interchanged and '×' and '÷' are interchanged?

$$405 \div 2 + 369 \times 9 - 32 = ?$$

**A) 804 B) 801 C) 803 D) 802**

Date: 13/06/2025 Time: 9:00 AM - 10:30 AM Right: 93.37% Wrong: 3.15%

**Q116)** If 'A' stands for '÷', 'B' stands for '×', 'C' stands for '+' and 'D' stands for '-', then what will come in place of the question mark (?) in the following equation?

$$(46 B 8) A 16 C 15 B 3 D 27 = ?$$

**A) 41 B) 68 C) 29 D) 52**

Date: 16/06/2025 Time: 9:00 AM - 10:30 AM Right: 93.56% Wrong: 3.16%

**Q117)** What will come in the place of the question mark (?) in the following equation, if '+' is replaced by '-' and '×' and '÷' are interchanged?

$$55 \div 7 + 9 \times 3 + 1 = ?$$

**A) 385 B) 378 C) 381 D) 390**

Date: 19/06/2025 Time: 12:45 PM - 2:15 PM Right: 93.56% Wrong: 2.86%

**Q118)** What will come in place of the question mark (?) in the following equation, if '+' and '-' are interchanged and '×' and '÷' are interchanged?

$$52 \div 15 - 189 \times 9 + 117 = ?$$

**A) 684 B) 672 C) 688 D) 678**

Date: 06/06/2025 Time: 12:45 PM - 2:15 PM Right: 93.59% Wrong: 2.66%

**Q119)** If 'A' stands for '÷', 'B' stands for '×', 'C' stands for '+' and 'D' stands for '-', then what will come in place of question mark (?) in the following equation?

$$43 D 15 C 7 B 9 D (28 A 2) = ?$$

**A) 83 B) 92 C) 64 D) 77**

Date: 12/06/2025 Time: 4:30 PM - 6:00 PM Right: 93.73% Wrong: 2.81%

**Q120)** If '+' means 'subtraction', '-' means 'multiplication', '×' means 'division' and '÷' means 'addition', then what will come in place of the question mark (?) in the following equation?

$$11 - 91 \times 7 \div 83 + 27 = ?$$

**A) 184 B) 193 C) 210 D) 199**

Date: 14/06/2025 Time: 9:00 AM - 10:30 AM Right: 93.85% Wrong: 3.62%

**Q121)** If '+' means 'subtraction', '-' means 'multiplication', 'x' means 'division' and '÷' means 'addition', then what will come in place of the question mark (?) in the following equation?

$$171 \div 95 \times 5 - 4 + 33 = ?$$

**A) 204 B) 209 C) 226 D) 214**

Date: 17/06/2025 Time: 9:00 AM - 10:30 AM Right: 93.89% Wrong: 3.46%

**Q122)** If '+' means '-', '-' means 'x', 'x' means '÷' and '÷' means '+', then what will come in place of the question mark (?) in the following equation?

$$32 \div 14 + 16 - 8 \times 4 = ?$$

**A) 14 B) 18 C) 16 D) 22**

Date: 05/06/2025 Time: 9:00 AM - 10:30 AM Right: 93.92% Wrong: 2.71%

**Q123)** If '+' means 'subtraction', '-' means 'multiplication', 'x' means 'division' and '÷' means 'addition', then what will come in place of the question mark (?) in the following equation?

$$96 \times 6 - 8 \div 71 + 26 = ?$$

**A) 181 B) 194 C) 173 D) 186**

Date: 16/06/2025 Time: 12:45 PM - 2:15 PM Right: 93.96% Wrong: 2.50%

**Q124)** If '+' means 'subtraction', '-' means 'multiplication', 'x' means 'division' and '÷' means 'addition', then what will come in place of the question mark (?) in the following equation?

$$109 \div 76 \times 4 - 5 + 18 = ?$$

**A) 189 B) 186 C) 201 D) 191**

Date: 17/06/2025 Time: 4:30 PM - 6:00 PM Right: 93.98% Wrong: 2.79%

**Q125)** What will come in the place of the question mark (?) in the following equation, if '+' and '-' are interchanged and 'x' and '÷' are interchanged?

$$173 \div 3 - 135 \times 5 + 17 = ?$$

**A) 529 B) 528 C) 527 D) 530**

Date: 10/06/2025 Time: 12:45 PM - 2:15 PM Right: 94.17% Wrong: 2.93%

**Q126)** What will come in the place of the question mark (?) in the following equation, if '+' is replaced by '-' and 'x' and '÷' are interchanged?

$$44 \div 8 + 5 \times 1 + 7 = ?$$

**A) 340 B) 300 C) 400 D) 250**

Date: 18/06/2025 Time: 4:30 PM - 6:00 PM Right: 94.42% Wrong: 1.74%

**Q127)** If + means -, - means x, x means ÷, ÷ means +, then what will come in place of the question mark (?) in the following equation?

$$96 \times 6 - 8 \div 71 + 26 = ?$$

**A) 186 B) 194 C) 173 D) 181**

Date: 18/06/2025 Time: 9:00 AM - 10:30 AM Right: 94.71% Wrong: 2.00%

**Q128)** If + means -, - means x, x means ÷, and ÷ means +, what will come in place of the question mark (?) in the following equation?

$$45 - 2 \div 9 + 16 \times 8 = ?$$

**A) 80 B) 87 C) 97 D) 100**

Date: 11/06/2025 Time: 4:30 PM - 6:00 PM Right: 94.77% Wrong: 2.17%

**Q129)** What will come in place of the question mark (?) in the following equation, if '+' and '-' are interchanged, and 'x' and '÷' are interchanged?

$$56 - 12 \times 4 \div 9 + 5 = ?$$

**A) 55 B) 54 C) 78 D) 90**

Date: 06/06/2025 Time: 9:00 AM - 10:30 AM Right: 94.95% Wrong: 2.50%

**Q130)** If '+' means '-', '-' means 'x', 'x' means '÷' and '÷' means '+', then what will come in place of the question mark (?) in the following equation?

$$55 - 8 \div 3 + 15 \times 5 = ?$$

**A) 440 B) 400 C) 420 D) 450**

Date: 11/06/2025 Time: 12:45 PM - 2:15 PM Right: 95.13% Wrong: 2.22%

**Q131)** What will come in the place of '?' in the following equation, if '+' and '-' are interchanged and 'x' and '÷' are interchanged?

$$45 \div 12 - 75 \times 5 + 13 = ?$$

**A) 546 B) 542 C) 545 D) 544**

Date: 12/06/2025 Time: 12:45 PM - 2:15 PM Right: 95.15% Wrong: 2.07%

**Q132)** If '+' means 'subtraction', '-' means 'multiplication', 'x' means 'division' and '÷' means 'addition', then what will come in place of the question mark (?) in the following equation?

$$96 \times 8 - 11 \div 83 + 22 = ?$$

**A) 204 B) 193 C) 199 D) 186**

Date: 18/06/2025 Time: 12:45 PM - 2:15 PM Right: 95.57% Wrong: 2.06%

**Q133)** If + means -, - means x, x means ÷, and ÷ means +, what will come in place of the question mark (?) in the following equation?

$$20 - 4 \div 7 + 12 \times 4 = ?$$

**A) 80 B) 75 C) 84 D) 90**

Date: 10/06/2025 Time: 4:30 PM - 6:00 PM Right: 95.96% Wrong: 1.78%

**Q134)** If + means -, - means x, x means ÷, and ÷ means +, what will come in place of the question mark (?) in the following equation?

$$15 - 3 \div 5 + 18 \times 6 = ?$$

**A) 40 B) 57 C) 50 D) 47**

Date: 10/06/2025 Time: 9:00 AM - 10:30 AM Right: 96.12% Wrong: 1.73%

**Q135)** If + means -, - means x, x means ÷, and ÷ means +, then what will come in place of the question mark (?) in the following equation?

$$30 - 5 \div 2 + 10 \times 2 = ?$$

**A) 150 B) 147 C) 100 D) 125**

Date: 09/06/2025 Time: 12:45 PM - 2:15 PM Right: 96.17% Wrong: 1.68%

**Q136)** What will come in the place of the question mark (?) in the following equation, if '+' is replaced by '-' and 'x' and '÷' are interchanged?

$$20 \div 5 + 8 \times 2 + 1 = ?$$

**A) 95 B) 85 C) 80 D) 90**

Date: 17/06/2025 Time: 4:30 PM - 6:00 PM Right: 96.23% Wrong: 1.69%

### Answer Key (Q1 to Q136) Mathematical Operations

Q1: 3	Q2: 4	Q3: 2	Q4: 4	Q5: 3
Q6: 4	Q7: 4	Q8: 2	Q9: 4	Q10: 2

Q11: 2	Q12: 4	Q13: 3	Q14: 4	Q15: 2
Q16: 3	Q17: 3	Q18: 3	Q19: 3	Q20: 1
Q21: 2	Q22: 2	Q23: 1	Q24: 3	Q25: 1
Q26: 2	Q27: 4	Q28: 4	Q29: 3	Q30: 3
Q31: 3	Q32: 3	Q33: 1	Q34: 3	Q35: 3
Q36: 2	Q37: 2	Q38: 3	Q39: 2	Q40: 4
Q41: 1	Q42: 2	Q43: 4	Q44: 3	Q45: 4
Q46: 1	Q47: 1	Q48: 4	Q49: 3	Q50: 1
Q51: 3	Q52: 2	Q53: 3	Q54: 3	Q55: 4
Q56: 4	Q57: 4	Q58: 3	Q59: 1	Q60: 4
Q61: 3	Q62: 2	Q63: 1	Q64: 1	Q65: 1
Q66: 3	Q67: 1	Q68: 2	Q69: 3	Q70: 2
Q71: 3	Q72: 1	Q73: 2	Q74: 4	Q75: 1
Q76: 4	Q77: 3	Q78: 1	Q79: 1	Q80: 3
Q81: 2	Q82: 3	Q83: 1	Q84: 2	Q85: 1
Q86: 1	Q87: 4	Q88: 4	Q89: 1	Q90: 2
Q91: 2	Q92: 2	Q93: 2	Q94: 1	Q95: 2
Q96: 3	Q97: 4	Q98: 3	Q99: 1	Q100: 3
Q101: 4	Q102: 1	Q103: 1	Q104: 1	Q105: 3
Q106: 3	Q107: 3	Q108: 1	Q109: 4	Q110: 1
Q111: 2	Q112: 3	Q113: 4	Q114: 3	Q115: 2
Q116: 1	Q117: 3	Q118: 1	Q119: 4	Q120: 4
Q121: 4	Q122: 1	Q123: 3	Q124: 2	Q125: 1
Q126: 1	Q127: 3	Q128: 3	Q129: 3	Q130: 1
Q131: 2	Q132: 2	Q133: 3	Q134: 4	Q135: 2
Q136: 1				

## Series Test

Q1) Refer to the following number and symbol series and answer the question that follows. Counting to be done from left to right only.

(Left) \* 1 \* \$ 2 3 7 £ 1 7 @ 4 9 9 \* 6 \* 3 \$ 1 \$ @ (Right)

How many such numbers are there each of which is immediately preceded by a symbol and also immediately followed by a symbol?

A) 5 B) 4 C) 6 D) 3

Date: 13/06/2025 Time: 12:45 PM - 2:15 PM Right: 64.30% Wrong: 32.99%

Q2) What should come in place of the question mark (?) in the given series?

602 600 696 690 682 ?

A) 671 B) 668 C) 672 D) 670

Date: 06/06/2025 Time: 4:30 PM - 6:00 PM Right: 66.01% Wrong: 12.23%

Q3) Which of the following letter-number clusters will replace the question mark (?) in the given series to make it logically complete?

LOK 4, JMI 9, HKG 25, FIE 49, ?

A) DGC 169 B) DGC 121 C) DFC 121 D) DGC 81

Date: 23/06/2025 Time: 9:00 AM - 10:30 AM Right: 66.63% Wrong: 29.88%

Q4) What should come in place of the question mark (?) in the given series?

4 8 15 27 46 ? 113

A) 72 B) 68 C) 76 D) 74

Date: 24/06/2025 Time: 4:30 PM - 6:00 PM Right: 71.32% Wrong: 16.90%

Q5) Refer to the following number and symbol series and answer the question that follows. Counting to be done from left to right only. All numbers are single-digit numbers.

(Left) 4 6 & 8 \$ 7 & 3 9 # % 4 6 @ £ 5 Ω 9 # 1 \* 7 (Right)

How many such symbols are there each of which is immediately preceded by a number and also immediately followed by another number?

A) Three B) Five C) Six D) Four

Date: 06/06/2025 Time: 9:00 AM - 10:30 AM Right: 71.92% Wrong: 25.35%

**Q6)** Refer to the following number and symbol series and answer the question that follows. Counting to be done from left to right only. All numbers are single-digit numbers.

(Left) @ 5 4 £ 8 & © £ \* 2 5 9 \$ 6 £ 4 \* 8 \$ 4 % \* (Right)

How many such symbols are there each of which is immediately preceded by a number and also immediately followed by a number?

**A) 4 B) 7 C) 5 D) 6**

Date: 06/06/2025 Time: 4:30 PM - 6:00 PM Right: 75.77% Wrong: 21.95%

**Q7)** What should come in place of the question mark (?) in the given series?

517, 494, 461, ?, 365, 302

**A) 438 B) 418 C) 428 D) 408**

Date: 18/06/2025 Time: 12:45 PM - 2:15 PM Right: 76.65% Wrong: 17.93%

**Q8)** What should come in place of the question mark (?) in the given series?

536, 513, 480, ?, 384, 321

**A) 447 B) 437 C) 427 D) 457**

Date: 20/06/2025 Time: 9:00 AM - 10:30 AM Right: 76.87% Wrong: 17.45%

**Q9)** Refer to the following number and symbol series and answer the question that follows. Counting to be done from left to right only.

(Left) & 2 6 9 5 7 & € 9 \* % £ 7 © 5 3 3 @ 2 © % # (Right)

How many such symbols are there each of which is immediately preceded by a number and also immediately followed by a symbol?

**A) 4 B) 3 C) 2 D) 5**

Date: 11/06/2025 Time: 4:30 PM - 6:00 PM Right: 76.94% Wrong: 20.59%

**Q10)** What should come in place of the question mark (?) in the given series?

4 7 13 24 42 ? 107

**A) 68 B) 66 C) 69 D) 67**

Date: 24/06/2025 Time: 9:00 AM - 10:30 AM Right: 77.53% Wrong: 11.37%

**Q11)** What should come in place of the question mark (?) in the given series?

327, 304, 271, ?, 175, 112

**A)** 248 **B)** 218 **C)** 228 **D)** 238

Date: 19/06/2025 Time: 9:00 AM - 10:30 AM Right: 77.94% Wrong: 16.73%

**Q12)** Refer to the following number and symbol series and answer the question that follows. Counting to be done from left to right only.

(Note: All numbers are single digit numbers only.)

(Left) 3 3 & 7 \* € 2 6 8 £ % 5 6 £ © 1 6 & % 8 # # (Right)

How many such numbers are there, each of which is immediately preceded by a number and also immediately followed by a symbol?

**A)** 3 **B)** 4 **C)** 6 **D)** 5

Date: 24/06/2025 Time: 12:45 PM - 2:15 PM Right: 78.22% Wrong: 18.80%

**Q13)** Refer to the following number and symbol series and answer the question that follows. Counting to be done from left to right only.

(NOTE: All numbers are single digit numbers only.)

(Left) © 9 6 £ 9 & € 8 4 4 2 @ © £ # 4 \* 7 © 7 9 6 (Right)

How many such numbers are there each of which is immediately preceded by a symbol and also immediately followed by a symbol?

**A)** 5 **B)** 4 **C)** 2 **D)** 3

Date: 17/06/2025 Time: 9:00 AM - 10:30 AM Right: 78.47% Wrong: 19.03%

**Q14)** Refer to the following number and symbol series and answer the question that follows. Counting to be done from left to right only.

(Left) 9 8 3 1 4 6 # 6 4 6 \* % & \$ @ 9 1 % 1 % # £ (Right)

How many such numbers are there each of which is immediately preceded by a number and also immediately followed by a symbol?

**A)** 2 **B)** 4 **C)** 5 **D)** 3

Date: 10/06/2025 Time: 9:00 AM - 10:30 AM Right: 78.48% Wrong: 18.91%

**Q15)** Refer to the following number and symbol series and answer the question that follows. Counting to be done from left to right only.

(NOTE: All numbers are single digit numbers only.)

(Left) 6 3 £ \$ % 3 \$ 9 8 1 8 \* % 2 6 € \$ £ # 8 & \$ (Right)

How many such symbols are there each of which is immediately preceded by a number and also immediately followed by a symbol?

**A) 6 B) 4 C) 5 D) 3**

Date: 17/06/2025 Time: 9:00 AM - 10:30 AM Right: 78.71% Wrong: 18.52%

**Q16)** What should come in place of the question mark (?) in the given series?

428, 405, 372, ?, 276, 213

**A) 329 B) 229 C) 339 D) 319**

Date: 19/06/2025 Time: 12:45 PM - 2:15 PM Right: 78.99% Wrong: 16.08%

**Q17)** Refer to the following number and symbol series and answer the question that follows. Counting to be done from left to right only.

(NOTE: All numbers are single digit numbers only.)

(Left) 5 \$ 6 @ 3 \* 6 4 & \$ 2 9 5 9 € £ 7 8 # 1 & 2 (Right)

How many such numbers are there each of which is immediately preceded by a symbol and also immediately followed by a symbol?

**A) 4 B) 2 C) 3 D) 5**

Date: 16/06/2025 Time: 9:00 AM - 10:30 AM Right: 79.16% Wrong: 19.02%

**Q18)** Refer to the following number and symbol series and answer the question that follows. Counting to be done from left to right only.

(NOTE: All numbers are single digit numbers only.)

(Left) 4 2 1 6 9 & © 2 \$ % 6 & \$ \$ \* 5 @ £ 1 8 @ # (Right)

How many such symbols are there, each of which is immediately preceded by a number and also immediately followed by a symbol?

**A) 5 B) 4 C) 6 D) 7**

Date: 21/06/2025 Time: 12:45 PM - 2:15 PM Right: 80.66% Wrong: 16.33%

**Q19)** Refer to the following number and symbol series and answer the question that follows. Counting to be done from left to right only.

(NOTE: All numbers are single digit numbers only.)

(Left) 3 # 6 5 2 @ 8 \* 7 9 1 % 2 8 1 9 3 # 1 £ © 7 (Right)

How many such numbers are there each of which is immediately preceded by a number and also immediately followed by a symbol?

**A) 5 B) 3 C) 4 D) 2**

Date: 16/06/2025 Time: 9:00 AM - 10:30 AM Right: 80.86% Wrong: 16.50%

**Q20)** Refer to the following number and symbol series and answer the question that follows. Counting to be done from left to right only.

(Left) 2 @ % \* 2 7 4 8 € @ % © \$ 7 6 6 \* \$ 7 £ 7 6 (Right)

How many such numbers are there each of which is immediately preceded by a number and also immediately followed by a symbol?

**A) 4 B) 1 C) 2 D) 3**

Date: 12/06/2025 Time: 12:45 PM - 2:15 PM Right: 80.89% Wrong: 16.91%

**Q21)** What should come in place of the question mark (?) in the given series?

277, 254, 221, ?, 125, 62

**A) 188 B) 158 C) 178 D) 168**

Date: 19/06/2025 Time: 4:30 PM - 6:00 PM Right: 81.19% Wrong: 12.61%

**Q22)** What should come in place of the question mark (?) in the given series?

401 400 397 392 385 ?

**A) 375 B) 372 C) 374 D) 376**

Date: 09/06/2025 Time: 9:00 AM - 10:30 AM Right: 81.35% Wrong: 16.60%

**Q23)** What should come in place of the question mark (?) in the given series?

413, 390, 357, ?, 261, 198

**A) 344 B) 324 C) 334 D) 314**

Date: 20/06/2025 Time: 4:30 PM - 6:00 PM Right: 81.58% Wrong: 13.88%

**Q24)** Refer to the following number and symbol series and answer the question that follows. Counting to be done from left to right only.

(Left) 7 2 2 € 9 8 1 9 \* 8 € 2 4 9 7 2 \* \$ & \* 6 \$ (Right)

How many such numbers are there each of which is immediately preceded by a number and also immediately followed by a number?

**A) 6 B) 8 C) 7 D) 5**

Date: 14/06/2025 Time: 9:00 AM - 10:30 AM Right: 81.76% Wrong: 15.32%

**Q25)** What should come in place of the question mark (?) in the given series?

282, 259, 226, ?, 130, 67

**A) 173 B) 183 C) 193 D) 186**

Date: 18/06/2025 Time: 9:00 AM - 10:30 AM Right: 82.10% Wrong: 11.48%

**Q26)** Refer to the following number and symbol series and answer the question that follows. Counting to be done from left to right only.

(Note: All numbers are single digit numbers only.)

(Left) € & % 6 2 1 € 9 4 5 @ £ \$ 4 5 4 & & # 7 £ 7 (Right)

How many such symbols are there, each of which is immediately preceded by a number and also immediately followed by a symbol?

**A) 4 B) 3 C) 5 D) 2**

Date: 24/06/2025 Time: 9:00 AM - 10:30 AM Right: 82.14% Wrong: 14.61%

**Q27)** Refer to the following number and symbol series and answer the question that follows. Counting to be done from left to right only.

(NOTE: All numbers are single digit numbers only.)

(Left) 8 & 1 9 5 £ \$ 6 8 \$ # 8 & @ \* 5 \$ # \* 5 \$ 9 (Right)

How many such symbols are there each of which is immediately preceded by a number and also immediately followed by a symbol?

**A) 5 B) 6 C) 4 D) 3**

Date: 16/06/2025 Time: 4:30 PM - 6:00 PM Right: 82.45% Wrong: 14.06%

**Q28)** Refer to the following number and symbol series and answer the question that follows. Counting to be done from left to right only.

(NOTE: All numbers are single digit numbers only.)

(Left) \* # 8 # 5 # 3 3 € 6 7 & # 3 \$ € @ 9 # 7 £ 9 (Right)

How many such symbols are there each of which is immediately preceded by a number and also immediately followed by a symbol?

**A) 2 B) 3 C) 1 D) 4**

Date: 18/06/2025 Time: 9:00 AM - 10:30 AM Right: 82.54% Wrong: 14.79%

**Q29)** Refer to the following number and symbol series and answer the question that follows. Counting to be done from left to right only.

(NOTE: All numbers are single digit numbers only.)

(Left) # 1 9 7 \$ 9 1 5 2 @ 6 8 # € £ & 8 \$ 4 5 9 5 (Right)

How many such numbers are there each of which is immediately preceded by a number and also immediately followed by a symbol?

**A) 3 B) 2 C) 4 D) 5**

Date: 18/06/2025 Time: 9:00 AM - 10:30 AM Right: 82.77% Wrong: 14.61%

**Q30)** Refer to the following number and symbol series and answer the question that follows. Counting to be done from left to right only.

(Left) 4 6 & 8 \$ 7 & 3 9 # % 4 6 @ £ 5 Ω 9 # 1 \* 7 (Right)

How many such numbers are there each of which is immediately preceded by a symbol and also immediately followed by another number?

**A) One B) Three C) Two D) Four**

Date: 09/06/2025 Time: 9:00 AM - 10:30 AM Right: 82.80% Wrong: 13.71%

**Q31)** Refer to the number and symbol series given below and answer the question that follows. Counting to be done from left to right only.

(NOTE: All numbers are single digit numbers only.)

(Left) @ 2 % \* 4 2 & £ % 1 £ & 9 7 & 9 7 \$ 9 1 \$ 2 (Right)

How many such symbols are there each of which is immediately preceded by a number and also immediately followed by a symbol?

**A) 2 B) 5 C) 3 D) 4**

Date: 20/06/2025 Time: 9:00 AM - 10:30 AM Right: 82.86% Wrong: 13.39%

**Q32)** What should come in place of the question mark (?) in the given series?

319, 296, 263, ?, 167, 104

**A) 220 B) 200 C) 210 D) 230**

Date: 18/06/2025 Time: 4:30 PM - 6:00 PM Right: 82.90% Wrong: 11.25%

**Q33)** Refer to the following number and symbol series and answer the question that follows. Counting to be done from left to right only.

(Left) 6 @ \$ 1 8 # 9 % < 2 4 ≥ 3 ^ 5 & 7 (Right)

How many such symbols are there, each of which is immediately preceded by a number and also immediately followed by another number?

**A) Three B) One C) More than three D) Two**

Date: 21/06/2025 Time: 4:30 PM - 6:00 PM Right: 83.04% Wrong: 14.11%

**Q34)** Refer to the following number and symbol series and answer the question that follows. Counting to be done from left to right only.

(Left) 1 6 \$ 1 \* 6 5 9 6 % % 1 \* \* £ 2 \* 6 5 \$ @ 6 (Right)

How many such numbers are there each of which is immediately preceded by a number and also immediately followed by a symbol?

**A) 3 B) 4 C) 2 D) 5**

Date: 11/06/2025 Time: 12:45 PM - 2:15 PM Right: 83.54% Wrong: 13.32%

**Q35)** Refer to the following number and symbol series and answer the question that follows. Counting to be done from left to right only.

(Left) 8 \* \* \$ # 4 5 © © @ \* 7 @ # & © 6 1 £ 9 8 4 (Right)

How many such numbers are there each of which is immediately preceded by a number and also immediately followed by a symbol?

**A) 3 B) 1 C) 4 D) 2**

Date: 11/06/2025 Time: 4:30 PM - 6:00 PM Right: 83.75% Wrong: 13.82%

**Q36)** Refer to the following number and symbol series and answer the question that follows. Counting to be done from left to right only.

(NOTE: All numbers are single digit numbers only.)

(Left) # © 2 @ @ \* 1 1 \$ & € 1 £ 2 # 3 1 7 7 6 3 € (Right)

How many such symbols are there each of which is immediately preceded by a number and also immediately followed by a number?

**A) 1 B) 3 C) 2 D) 4**

Date: 16/06/2025 Time: 12:45 PM - 2:15 PM Right: 83.77% Wrong: 12.23%

**Q37)** Refer to the following number and symbol series and answer the question that follows. Counting to be done from left to right only.

(NOTE: All numbers are single digit numbers only.)

(Left) @ 9 7 8 2 @ @ 9 3 \* 2 6 2 © # 9 & 7 8 9 @ 4 (Right)

How many such symbols are there each of which is immediately preceded by a number and also immediately followed by a number?

**A) 2 B) 4 C) 5 D) 3**

Date: 17/06/2025 Time: 12:45 PM - 2:15 PM Right: 83.77% Wrong: 13.03%

**Q38)** What should come in place of the question mark (?) in the given series?

801 800 797 792 785 ?

**A) 773 B) 775 C) 776 D) 774**

Date: 06/06/2025 Time: 12:45 PM - 2:15 PM Right: 84.31% Wrong: 13.99%

**Q39)** Refer to the following number and symbol series and answer the question that follows. Counting to be done from left to right only.

(Left) £ \* 6 @ 1 £ 8 6 @ % \$ 7 # 1 9 # 6 % \* 5 € & (Right)

How many such numbers are there each of which is immediately preceded by a symbol and also immediately followed by a symbol?

**A) 6 B) 5 C) 7 D) 4**

Date: 14/06/2025 Time: 12:45 PM - 2:15 PM Right: 84.35% Wrong: 12.96%

**Q40)** What should come in place of the question mark (?) in the given series?

13 8 24 19 57 52 156 ?

**A) 155 B) 151 C) 140 D) 169**

Date: 16/06/2025 Time: 9:00 AM - 10:30 AM Right: 84.38% Wrong: 4.68%

**Q41)** Refer to the following number and symbol series and answer the question that follows. Counting to be done from left to right only.

(Left) & 5 @ 9 7 £ \$ 5 \$ 9 8 8 8 \* \$ \$ # \* 1 7 1 4 (Right)

How many such symbols are there each of which is immediately preceded by a number and also immediately followed by a symbol?

**A) 1 B) 2 C) 3 D) 4**

Date: 12/06/2025 Time: 4:30 PM - 6:00 PM Right: 84.46% Wrong: 13.18%

**Q42)** Refer to the following number and symbol series and answer the question that follows. Counting to be done from left to right only.

(Left) 3 € & £ @ \* # 1 \$ € @ © € © & 1 € 4 1 2 4 © (Right)

How many such symbols are there each of which is immediately preceded by a number and also immediately followed by a symbol?

**A) 3 B) 1 C) 4 D) 2**

Date: 13/06/2025 Time: 9:00 AM - 10:30 AM Right: 84.55% Wrong: 12.39%

**Q43)** What should come in place of the question mark (?) in the given series?

4 10 19 34 58 ?

**A) 94 B) 72 C) 74 D) 89**

Date: 24/06/2025 Time: 12:45 PM - 2:15 PM Right: 84.64% Wrong: 6.22%

**Q44)** What should come in place of the question mark (?) in the given series?

1514 1513 1517 1508 1524 ?

**A) 1478 B) 1499 C) 1476 D) 1474**

Date: 19/06/2025 Time: 4:30 PM - 6:00 PM Right: 85.06% Wrong: 4.57%

**Q45)** Refer to the number and symbol series given below and answer the question that follows. Counting to be done from left to right only.

(NOTE: All numbers are single digit numbers only.)

(Left) £ € # 9 4 9 \$ € \* 9 @ \* 6 6 5 © 5 6 3 8 7 6 (Right)

How many such numbers are there, each of which is immediately preceded by a number and also immediately followed by a number?

**A) 7 B) 5 C) 8 D) 6**

Date: 20/06/2025 Time: 4:30 PM - 6:00 PM Right: 85.11% Wrong: 11.22%

**Q46)** What should come in place of the question mark (?) in the given series based on the English alphabetical order?

FRO RDA DPM PBY ?

**A) BKN B) BNK C) BHY D) HBU**

Date: 21/06/2025 Time: 4:30 PM - 6:00 PM Right: 85.15% Wrong: 4.78%

**Q47)** Refer to the following number and symbol series and answer the question that follows. Counting to be done from left to right only.

(Note: All numbers are single digit numbers only.)

(Left) € & % & 5 6 3 1 © 1 4 6 @ £ @ \$ 8 8 £ 8 % 1 (Right)

How many such numbers are there, each of which is immediately preceded by a symbol and also immediately followed by a symbol?

**A) 2 B) 3 C) 0 D) 1**

Date: 23/06/2025 Time: 12:45 PM - 2:15 PM Right: 85.42% Wrong: 11.50%

**Q48)** Refer to the following number and symbol series and answer the question that follows. Counting to be done from left to right only.

(Note: All numbers are single digit numbers only.)

(Left) # 8 2 \* 3 & % # £ 2 € 3 5 @ 3 5 \* & % @ 3 € (Right)

How many such numbers are there, each of which is immediately preceded by a number and also immediately followed by a symbol?

**A) 3 B) 5 C) 2 D) 7**

Date: 24/06/2025 Time: 9:00 AM - 10:30 AM Right: 85.54% Wrong: 10.95%

**Q49)** Refer to the following number and symbol series and answer the question that follows. Counting to be done from left to right only.

(NOTE: All numbers are single digit numbers only.)

(Left) @ \* # % \* 8 1 4 2 2 & 4 8 9 8 8 # 6 \$ \$ \* 3 (Right)

How many such numbers are there each of which is immediately preceded by a number and also immediately followed by a symbol?

**A) 2 B) 3 C) 1 D) 4**

Date: 18/06/2025 Time: 12:45 PM - 2:15 PM Right: 85.63% Wrong: 12.05%

**Q50)** Refer to the following number and symbol series and answer the question that follows. Counting to be done from left to right only. All numbers are single-digit numbers.

(Left) @ \$ & 7 7 @ 5 7 & & 4 1 9 3 \$ 7 8 & 7 € € 1 (Right)

How many such symbols are there each of which is immediately preceded by a number and also immediately followed by a symbol?

**A) 5 B) 4 C) 2 D) 3**

Date: 06/06/2025 Time: 12:45 PM - 2:15 PM Right: 85.72% Wrong: 11.73%

**Q51)** Refer to the following letter and symbol series and answer the question that follows. Counting to be done from left to right only.

(Left) 7 \* £ 5 8 \$ 7 3 \* 9 & % 4 6 @ 9 # 1 & 3 Ω (Right)

How many such symbols are there each of which is immediately preceded by a symbol and also immediately followed by a number?

**A) Four B) Two C) One D) Three**

Date: 09/06/2025 Time: 9:00 AM - 10:30 AM Right: 85.77% Wrong: 11.29%

**Q52)** Refer to the following number and symbol series and answer the question that follows. Counting to be done from left to right only.

(Left) 8 \* \* € 6 % 3 2 \$ # 9 9 2 @ # 5 3 % 9 @ 1 (Right)

How many such numbers are there each of which is immediately preceded by a number and also immediately followed by a symbol?

**A) 3 B) 4 C) 2 D) 5**

Date: 13/06/2025 Time: 9:00 AM - 10:30 AM Right: 85.77% Wrong: 12.21%

**Q53)** Refer to the following number and symbol series and answer the question that follows. Counting to be done from left to right only. All numbers are single-digit numbers only.

(Left) 9 # 1 \* £ 5 2 & % \$ 7 & 3 Ω 4 6 @ 8 (Right)

How many such symbols are there each of which is immediately preceded by a number and also immediately followed by another symbol?

**A) Three B) Four C) Two D) One**

Date: 09/06/2025 Time: 12:45 PM - 2:15 PM Right: 85.89% Wrong: 11.27%

**Q54)** What should come in place of the question mark (?) in the given series?

86 97 73 82 60 67 47 52 ?

**A) 40 B) 34 C) 32 D) 37**

Date: 17/06/2025 Time: 9:00 AM - 10:30 AM Right: 85.95% Wrong: 7.58%

**Q55)** Refer to the following number and symbol series and answer the question that follows. Counting to be done from left to right only.

(NOTE: All numbers are single digit numbers only.)

(Left) 8 9 # 1 9 © 3 5 © € @ # £ @ \* © 5 £ € 5 4 4 (Right)

How many such numbers are there each of which is immediately preceded by a number and also immediately followed by a symbol?

**A) 3 B) 4 C) 5 D) 2**

Date: 17/06/2025 Time: 4:30 PM - 6:00 PM Right: 86.06% Wrong: 10.23%

**Q56)** Refer to the following number and symbol series and answer the question that follows. Counting to be done from left to right only.

(Left) \* 4 \* 2 9 @ @ 8 3 £ \$ 6 4 £ \* 4 8 £ % 9 8 8 (Right)

How many such symbols are there each of which is immediately preceded by a number and also immediately followed by a symbol?

**A) 5 B) 3 C) 6 D) 4**

Date: 13/06/2025 Time: 12:45 PM - 2:15 PM Right: 86.07% Wrong: 11.06%

**Q57)** Refer to the following number and symbol series and answer the question that follows. Counting to be done from left to right only.

(NOTE: All numbers are single digit numbers only.)

(Left) 4 \$ 4 2 2 7 4 1 8 € 6 9 3 £ 3 £ 9 @ % 9 # £ (Right)

How many such numbers are there each of which is immediately preceded by a number and also immediately followed by a symbol?

**A) 3 B) 1 C) 2 D) 4**

Date: 19/06/2025 Time: 4:30 PM - 6:00 PM Right: 86.09% Wrong: 10.77%

**Q58)** Refer to the following number and symbol series and answer the question that follows. Counting to be done from left to right only.

(Left) 7 & 3 Ω 4 6 @ 9 # 1 \* £ 5 2 & % \$ 8 (Right)

How many such symbols are there each of which is immediately preceded by a number and also immediately followed by another symbol?

**A) Two B) Four C) One D) Three**

Date: 10/06/2025 Time: 4:30 PM - 6:00 PM Right: 86.30% Wrong: 10.77%

**Q59)** What should come in place of the question mark (?) in the given series?

223, 174, 132, 97, 69, ?

**A) 64 B) 59 C) 48 D) 53**

Date: 24/06/2025 Time: 9:00 AM - 10:30 AM Right: 86.33% Wrong: 5.55%

**Q60)** What should come in place of the question mark (?) in the given series?

6 13 25 42 64 ?

**A) 86 B) 96 C) 91 D) 81**

Date: 21/06/2025 Time: 12:45 PM - 2:15 PM Right: 86.65% Wrong: 6.95%

**Q61)** Refer to the following number and symbol series and answer the question that follows. Counting to be done from left to right only.

(NOTE: All numbers are single digit numbers only.)

(Left) @ \$ 6 # % 1 4 £ \* 1 £ © 7 # 4 8 3 % % 2 \$ £ (Right)

How many such symbols are there each of which is immediately preceded by a number and also immediately followed by a number?

**A) 3 B) 1 C) 2 D) 0**

Date: 17/06/2025 Time: 9:00 AM - 10:30 AM Right: 87.03% Wrong: 9.93%

**Q62)** Refer to the following number and symbol series and answer the question that follows. Counting to be done from left to right only.

(NOTE: All numbers are single digit numbers only.)

(Left) © © 4 3 5 6 7 # \* 1 3 % 9 2 7 5 9 & £ @ 7 \* (Right)

How many such numbers are there each of which is immediately preceded by a number and also immediately followed by a number?

**A) 5 B) 6 C) 8 D) 7**

Date: 17/06/2025 Time: 12:45 PM - 2:15 PM Right: 87.17% Wrong: 9.48%

**Q63)** Refer to the following number and symbol series and answer the question that follows. Counting to be done from left to right only.

(NOTE: All numbers are single digit numbers only.)

(Left) 5 4 7 % € \$ 2 £ % 6 6 9 9 £ € & € © 3 7 © \* (Right)

How many such numbers are there each of which is immediately preceded by a number and also immediately followed by a number?

**A) 5 B) 2 C) 3 D) 4**

Date: 19/06/2025 Time: 9:00 AM - 10:30 AM Right: 87.27% Wrong: 9.79%

**Q64)** Refer to the following number and symbol series and answer the question that follows. Counting to be done from left to right only. All numbers are single-digit numbers.

(Left) 4 @ 7 4 £ 9 9 # @ 1 4 \$ % 4 3 8 2 © © 1 5 # (Right)

How many such numbers are there each of which is immediately preceded by a number and also immediately followed by a number?

**A) 3 B) 1 C) 2 D) 4**

Date: 06/06/2025 Time: 4:30 PM - 6:00 PM Right: 87.42% Wrong: 10.15%

**Q65)** What should come in place of the question mark (?) in the given series based on the English alphabetical order?

EBY XUR QNK JGD ?

**A) CWZ B) WCZ C) WZC D) CZW**

Date: 10/06/2025 Time: 4:30 PM - 6:00 PM Right: 87.49% Wrong: 6.96%

**Q66)** What should come in place of the question mark (?) in the given series based on the English alphabetical order?

WOM CVS ICY OJE ?

**A) UKQ B) KUQ C) UQK D) KQU**

Date: 11/06/2025 Time: 9:00 AM - 10:30 AM Right: 87.59% Wrong: 3.67%

**Q67)** What should come in place of the question mark (?) in the given series?

5 8 17 44 125 ?

**A) 370 B) 360 C) 358 D) 368**

Date: 18/06/2025 Time: 12:45 PM - 2:15 PM Right: 87.72% Wrong: 3.48%

**Q68)** Refer to the following number and symbol series and answer the question that follows. Counting to be done from left to right only. All numbers are single-digit numbers.

(Left) 6 @ 8 £ 5 @ \$ 7 & 3 6 & # 9 # 1 \* £ 5 (Right)

How many such numbers are there each of which is immediately preceded by a symbol and also immediately followed by another number?

**A) Two B) Four C) Three D) One**

Date: 06/06/2025 Time: 9:00 AM - 10:30 AM Right: 87.74% Wrong: 9.87%

**Q69)** Refer to the following number and symbol series and answer the question that follows. Counting to be done from left to right only.

(NOTE: All numbers are single digit numbers only)

(Left) & # 9 % 6 4 % © @ & 6 4 6 7 © 9 8 5 % 9 © 7 (Right)

How many such numbers are there each of which is immediately preceded by a symbol and also immediately followed by a symbol?

**A) 3 B) 4 C) 2 D) 1**

Date: 18/06/2025 Time: 4:30 PM - 6:00 PM Right: 87.79% Wrong: 8.10%

**Q70)** What should come in place of the question mark (?) in the given series?

21, 52, 87, 126, 169, ?

**A) 227 B) 221 C) 232 D) 216**

Date: 23/06/2025 Time: 12:45 PM - 2:15 PM Right: 87.90% Wrong: 4.41%

**Q71)** Refer to the following number and symbol series and answer the question that follows. Counting to be done from left to right only.

(Note: All numbers are single digit numbers only.)

(Left) % 3 £ 3 & © \* 3 & 7 7 3 7 % 4 8 © \* 1 \* 9 9 (Right)

How many such numbers are there, each of which is immediately preceded by a symbol and also immediately followed by a symbol?

**A) 3 B) 5 C) 2 D) 4**

Date: 23/06/2025 Time: 4:30 PM - 6:00 PM Right: 87.97% Wrong: 8.55%

**Q72)** Refer to the following number and symbol series and answer the question that follows. Counting to be done from left to right only.

(NOTE: All numbers are single digit numbers only.)

(Left) 1 \$ @ % 1 4 3 \* # 6 3 4 £ % 2 @ 6 % 8 % 9 \$ (Right)

How many such numbers are there each of which is immediately preceded by a symbol and also immediately followed by a symbol?

**A) 3 B) 5 C) 6 D) 4**

Date: 19/06/2025 Time: 9:00 AM - 10:30 AM Right: 87.98% Wrong: 9.48%

**Q73)** Refer to the following number and symbol series and answer the question that follows. Counting to be done from left to right only.

(Left) \* 6 8 @ 1 £ 9 5 3 @ \$ 9 © @ 7 9 £ @ 9 1 £ 6 (Right)

How many such symbols are there each of which is immediately preceded by a number and also immediately followed by a number?

**A) 4 B) 2 C) 3 D) 5**

Date: 13/06/2025 Time: 12:45 PM - 2:15 PM Right: 88.07% Wrong: 9.07%

**Q74)** Refer to the following number and symbol series and answer the question that follows. Counting to be done from left to right only.

(Left) 1 5 & 3 \* \$ 4 @ % 2 7 # 9 ^ # ≥ 6 8 (Right)

How many such symbols are there, each of which is immediately preceded by a number and also immediately followed by another number?

**A) One B) Two C) None D) Three**

Date: 20/06/2025 Time: 4:30 PM - 6:00 PM Right: 88.11% Wrong: 9.35%

**Q75)** Refer to the following number and symbol series and answer the question that follows. Counting to be done from left to right only.

(Left) 3 € \$ 1 6 8 6 6 € \$ # % # \* 3 8 3 1 € 6 @ 3 (Right)

How many such symbols are there each of which is immediately preceded by a number and also immediately followed by a symbol?

**A) 4 B) 1 C) 3 D) 2**

Date: 10/06/2025 Time: 12:45 PM - 2:15 PM Right: 88.19% Wrong: 9.49%

**Q76)** Refer to the following number and symbol series and answer the question that follows. Counting to be done from left to right only.

(NOTE: All numbers are single digit numbers only.)

(Left) 3 £ & 1 2 © 2 5 \$ 9 3 © 9 4 3 % 9 3 # © 6 2 (Right)

How many such symbols are there each of which is immediately preceded by a number and also immediately followed by a symbol?

**A) 2 B) 4 C) 3 D) 1**

Date: 18/06/2025 Time: 12:45 PM - 2:15 PM Right: 88.38% Wrong: 9.21%

**Q77)** What should come in place of the question mark (?) in the given series?

273 224 180 141 107 ?

**A) 73 B) 78 C) 61 D) 90**

Date: 16/06/2025 Time: 12:45 PM - 2:15 PM Right: 88.47% Wrong: 6.10%

**Q78)** Refer to the following number and symbol series and answer the question that follows. Counting to be done from left to right only.

(Left) 6 £ & 8 4 \* % 7 2 & 2 2 9 £ 1 & € 1 2 6 6 2 (Right)

How many such numbers are there each of which is immediately preceded by a symbol and also immediately followed by a symbol?

**A) 0 B) 1 C) 3 D) 2**

Date: 11/06/2025 Time: 4:30 PM - 6:00 PM Right: 88.52% Wrong: 8.98%

**Q79)** Refer to the following number and symbol series and answer the question that follows. Counting to be done from left to right only.

(NOTE: All numbers are single digit numbers only.)

(Left) 3 % 2 % 2 £ £ & © £ 1 1 8 5 \$ 9 9 5 2 & 5 6 (Right)

How many such numbers are there each of which is immediately preceded by a symbol and also immediately followed by a symbol?

**A) 2 B) 3 C) 1 D) 4**

Date: 14/06/2025 Time: 12:45 PM - 2:15 PM Right: 88.58% Wrong: 8.60%

**Q80)** Which of the following letter-number clusters will replace the question mark (?) in the given series to make it logically complete?

AZB 3, ZYA 9, YXZ 27, XWY 81, ?

**A) WVX 729 B) VWX 729 C) WWX 729 D) WVX 243**

Date: 24/06/2025 Time: 12:45 PM - 2:15 PM Right: 88.58% Wrong: 8.24%

**Q81)** Refer to the following number and symbol series and answer the question that follows. Counting to be done from left to right only. All numbers are single-digit numbers.

(Left) 2 \* 3 & @ @ 6 4 \$ @ 3 \* % 6 2 1 3 9 7 8 2 € (Right)

How many such numbers are there each of which is immediately preceded by a number and also immediately followed by a symbol?

**A) 4 B) 5 C) 3 D) 2**

Date: 05/06/2025 Time: 4:30 PM - 6:00 PM Right: 88.84% Wrong: 7.77%

**Q82)** What should come in place of the question mark (?) in the given series?

211, 198, 175, 142, 99, ?

**A) 56 B) 47 C) 57 D) 46**

Date: 17/06/2025 Time: 12:45 PM - 2:15 PM Right: 88.97% Wrong: 7.12%

**Q83)** Refer to the following number and symbol series and answer the question that follows. Counting to be done from left to right only.

(Left) 2 6 % 2 6 4 € 7 \* 9 \$ 3 € 6 1 2 @ 8 % € 9 2 (Right)

How many such symbols are there each of which is immediately preceded by a number and also immediately followed by a symbol?

**A) 0 B) 1 C) 3 D) 2**

Date: 12/06/2025 Time: 9:00 AM - 10:30 AM Right: 89.03% Wrong: 7.89%

**Q84)** What should come in place of the question mark (?) in the given series based on the English alphabetical order?

XCH RWB LQV FKP ?

**A) JZE B) ZEJ C) ZJE D) JEZ**

Date: 13/06/2025 Time: 4:30 PM - 6:00 PM Right: 89.52% Wrong: 5.36%

**Q85)** What should come in place of the question mark (?) in the given series?

51 87 121 153 183 211 ?

**A) 237 B) 249 C) 241 D) 253**

Date: 11/06/2025 Time: 9:00 AM - 10:30 AM Right: 89.56% Wrong: 4.08%

**Q86)** Refer to the number and symbol series given below and answer the question that follows. Counting to be done from left to right only.

(NOTE: All numbers are single digit numbers only.)

(Left) 9 # 2 6 7 © 6 8 & © \$ & 3 9 1 7 \$ 5 # @ \* 4 (Right)

How many such numbers are there, each of which is immediately preceded by a symbol and also immediately followed by a symbol?

**A) 0 B) 2 C) 3 D) 1**

Date: 21/06/2025 Time: 12:45 PM - 2:15 PM Right: 89.66% Wrong: 7.77%

**Q87)** Refer to the following number and symbol series and answer the question that follows. Counting to be done from left to right only.

(Left) £ % \* 3 6 £ 1 © & 8 1 5 5 3 \* # © 7 1 7 3 @ (Right)

How many such symbols are there each of which is immediately preceded by a number and also immediately followed by a number?

**A) 1 B) 0 C) 3 D) 2**

Date: 12/06/2025 Time: 12:45 PM - 2:15 PM Right: 89.67% Wrong: 7.79%

**Q88)** Refer to the following number and symbol series and answer the question that follows. Counting to be done from left to right only.

(Left) 2 8 6 \$ 4 \* € 1 9 5 # 2 % 4 % © # 5 \* 7 % \* (Right)

How many such numbers are there each of which is immediately preceded by a number and also immediately followed by a number?

**A) 1 B) 2 C) 3 D) 4**

Date: 13/06/2025 Time: 4:30 PM - 6:00 PM Right: 90.04% Wrong: 6.96%

**Q89)** Which of the following letter-number clusters will replace the question mark (?) in the given series to make it logically complete?

SM13 QK25 OI37 MG49 ?

**A) KF62 B) KE62 C) KE61 D) KF61**

Date: 16/06/2025 Time: 4:30 PM - 6:00 PM Right: 90.21% Wrong: 4.46%

**Q90)** Select the number from among the given options that can replace the question mark (?) in the following series.

62 61.1 60.2 59.3 58.4 57.5 ?

**A)** 56.6 **B)** 56.2 **C)** 56.8 **D)** 56.4

Date: 05/06/2025 Time: 4:30 PM - 6:00 PM Right: 90.26% Wrong: 7.59%

**Q91)** Select the number from among the given options that can replace the question mark (?) in the following series.

215 187 161 137 115 95 ?

**A)** 87 **B)** 81 **C)** 77 **D)** 75

Date: 06/06/2025 Time: 9:00 AM - 10:30 AM Right: 90.28% Wrong: 6.30%

**Q92)** What should come in place of the question mark (?) in the given series?

2 9 23 51 107 ?

**A)** 221 **B)** 214 **C)** 224 **D)** 219

Date: 17/06/2025 Time: 12:45 PM - 2:15 PM Right: 90.37% Wrong: 4.16%

**Q93)** Refer to the following number and symbol series and answer the question that follows. Counting to be done from left to right only.

(Left) € 3 © 3 \$ % % 5 5 £ € 4 \* € 3 7 5 & 8 2 5 \* (Right)

How many such symbols are there each of which is immediately preceded by a number and also immediately followed by a number?

**A)** 2 **B)** 1 **C)** 4 **D)** 3

Date: 10/06/2025 Time: 9:00 AM - 10:30 AM Right: 90.39% Wrong: 7.38%

**Q94)** Refer to the following number and symbol series and answer the question that follows. Counting to be done from left to right only. All numbers are single-digit numbers.

(Left) # \* £ 3 9 € # % £ 1 % £ 8 8 1 4 9 % 5 8 & 7 (Right)

How many such numbers are there each of which is immediately preceded by a symbol and also immediately followed by a symbol?

**A)** 2 **B)** 3 **C)** 1 **D)** 4

Date: 05/06/2025 Time: 9:00 AM - 10:30 AM Right: 90.47% Wrong: 5.41%

**Q95)** Which of the following letter-number clusters will replace the question mark (?) in the given series to make it logically complete?

MR25, NS33, OT41, PU49, ?

**A)** QU57 **B)** QV58 **C)** QV57 **D)** QU58

Date: 11/06/2025 Time: 9:00 AM - 10:30 AM Right: 90.85% Wrong: 5.30%

**Q96)** Refer to the following number and symbol series and answer the question that follows. Counting to be done from left to right only.

(NOTE: All numbers are single digit numbers only.)

(Left) 7 @ £ 1 @ 7 # \* 8 7 8 6 5 3 8 4 € # £ 9 1 £ (Right)

How many such symbols are there each of which is immediately preceded by a number and also immediately followed by a number?

**A)** 1 **B)** 3 **C)** 2 **D)** 0

Date: 16/06/2025 Time: 9:00 AM - 10:30 AM Right: 90.88% Wrong: 6.62%

**Q97)** Select the letter-cluster from among the given options that can replace the question mark (?) in the following series.

TPY URS VTM WVG ?

**A)** XXB **B)** XXA **C)** XWA **D)** XWZ

Date: 18/06/2025 Time: 9:00 AM - 10:30 AM Right: 90.91% Wrong: 6.45%

**Q98)** Which of the following letter-number clusters will replace the question mark (?) in the given series to make it logically complete?

AAA 16, ECZ 36, IEY 64, MGX 100, ?

**A)** QIW 144 **B)** UVW 81 **C)** WIU 100 **D)** UIW 121

Date: 23/06/2025 Time: 4:30 PM - 6:00 PM Right: 90.91% Wrong: 2.44%

**Q99)** Which of the following letter-number clusters will replace the question mark (?) in the given series to make it logically complete?

QK15 OI26 MG37 KE48 ?

**A)** IC59 **B)** ID58 **C)** IC58 **D)** ID59

Date: 19/06/2025 Time: 12:45 PM - 2:15 PM Right: 91.05% Wrong: 4.85%

**Q100)** Which of the following letter-number clusters will replace the question mark (?) in the given series to make it logically complete?

DJ26 EK37 FL48 GM59 ?

**A)** HM71 **B)** HN70 **C)** HM70 **D)** HN71

Date: 24/06/2025 Time: 4:30 PM - 6:00 PM Right: 91.06% Wrong: 4.85%

**Q101)** Which of the following letter-number clusters will replace the question mark (?) in the given series to make it logically complete?

KN33 JM41 IL49 HK57 ?

**A)** GJ65 **B)** GI66 **C)** GI65 **D)** GJ66

Date: 10/06/2025 Time: 4:30 PM - 6:00 PM Right: 91.08% Wrong: 5.78%

**Q102)** What should come in place of the question mark (?) in the given series?

12 29 63 131 267 ?

**A)** 531 **B)** 543 **C)** 521 **D)** 539

Date: 18/06/2025 Time: 4:30 PM - 6:00 PM Right: 91.09% Wrong: 4.05%

**Q103)** What should come in place of the question mark (?) in the given series?

1312 1320 1330 1342 1356 ?

**A)** 1372 **B)** 1370 **C)** 1374 **D)** 1368

Date: 23/06/2025 Time: 12:45 PM - 2:15 PM Right: 91.11% Wrong: 7.21%

**Q104)** Refer to the following number and symbol series and answer the question that follows. Counting to be done from left to right only.

(Left) 8 £ 6 @ & % 4 6 @ 8 \$ 7 & 3 Ω 9 # 1 \* 4 5 (Right)

How many such symbols are there each of which is immediately preceded by an even number and also immediately followed by an odd number?

**A)** Four **B)** Two **C)** One **D)** Three

Date: 09/06/2025 Time: 4:30 PM - 6:00 PM Right: 91.13% Wrong: 5.56%

**Q105)** What should come in place of the question mark (?) in the given series?

189 166 155 132 121 98 ?

**A) 92 B) 87 C) 66 D) 75**

Date: 13/06/2025 Time: 12:45 PM - 2:15 PM Right: 91.17% Wrong: 5.96%

**Q106)** Which of the following letter-number clusters will replace the question mark (?) in the given series to make it logically complete?

JQ29, LS36, NU43, PW50, ?

**A) RX58 B) RY57 C) RY58 D) RX57**

Date: 14/06/2025 Time: 9:00 AM - 10:30 AM Right: 91.18% Wrong: 5.68%

**Q107)** Which of the following letter-number clusters will replace the question mark (?) in the given series to make it logically complete?

KDG 19 LEH 30 MFI 41 NGJ 52 ?

**A) OHL 64 B) OHK 64 C) OHK 63 D) OHL 63**

Date: 18/06/2025 Time: 4:30 PM - 6:00 PM Right: 91.18% Wrong: 3.74%

**Q108)** What should come in place of the question mark (?) in the given series based on the English alphabetical order?

ZYB GFI NMP UTW ?

**A) BDA B) ADB C) BAD D) ABD**

Date: 11/06/2025 Time: 12:45 PM - 2:15 PM Right: 91.23% Wrong: 5.57%

**Q109)** What should come in place of the question mark (?) in the given series?

356, 333, 300, ?, 204, 141

**A) 237 B) 247 C) 257 D) 227**

Date: 21/06/2025 Time: 9:00 AM - 10:30 AM Right: 91.25% Wrong: 5.14%

**Q110)** Which of the following letter-number clusters will replace the question mark (?) in the given series to make it logically complete?

LOH 1, JMG 8, HKF 27, FIE 64, ?

**A) DAD 144 B) DFD 125 C) DCD 144 D) DGD 125**

Date: 23/06/2025 Time: 12:45 PM - 2:15 PM Right: 91.46% Wrong: 3.81%

**Q111)** Which of the following letter-number clusters will replace the question mark (?) in the given series to make it logically complete?

DK26, GN33, JQ40, MT47, ?

**A) PV53 B) PW54 C) PV54 D) PW53**

Date: 13/06/2025 Time: 9:00 AM - 10:30 AM Right: 91.50% Wrong: 5.64%

**Q112)** What should come in place of the question mark (?) in the given series?

21 24 33 48 69 96 ?

**A) 116 B) 138 C) 141 D) 129**

Date: 17/06/2025 Time: 4:30 PM - 6:00 PM Right: 91.63% Wrong: 4.27%

**Q113)** Refer to the following number and symbol series and answer the question that follows. Counting to be done from left to right only.

(NOTE: All numbers are single digit numbers only.)

(Left) 7 € 2 5 3 © 8 © 4 € 9 3 € 5 # % \* 3 4 7 \$ 1 (Right)

How many such symbols are there each of which is immediately preceded by a number and also immediately followed by a number?

**A) 8 B) 5 C) 6 D) 7**

Date: 19/06/2025 Time: 12:45 PM - 2:15 PM Right: 91.72% Wrong: 5.28%

**Q114)** What should come in place of the question mark (?) in the given series based on the English alphabetical order?

VCJ RYF NUB JQX ?

**A) FTM B) FNT C) FMT D) FTN**

Date: 05/06/2025 Time: 12:45 PM - 2:15 PM Right: 91.73% Wrong: 4.70%

**Q115)** Which of the following letter-number clusters will replace the question mark (?) in the given series to make it logically complete?

GM17, IO25, KQ33, MS41, ?

**A) OU49 B) OU48 C) OV49 D) OV48**

Date: 12/06/2025 Time: 12:45 PM - 2:15 PM Right: 91.74% Wrong: 4.64%

**Q116)** Which of the following letter-number clusters will replace the question mark (?) in the given series to make it logically complete?

EK19, GM28, IO37, KQ46, ?

**A) MR56 B) MR55 C) MS55 D) MS56**

Date: 11/06/2025 Time: 12:45 PM - 2:15 PM Right: 91.77% Wrong: 4.84%

**Q117)** Select the number from among the given options that can replace the question mark (?) in the following series.

37 55 66 84 95 113 ?

**A) 166 B) 145 C) 131 D) 124**

Date: 05/06/2025 Time: 12:45 PM - 2:15 PM Right: 91.81% Wrong: 4.70%

**Q118)** Which of the following letter-number clusters will replace the question mark (?) in the given series to make it logically complete?

KO29 JN41 IM53 HL65 ?

**A) GK77 B) GL78 C) GK78 D) GL77**

Date: 20/06/2025 Time: 4:30 PM - 6:00 PM Right: 91.82% Wrong: 4.47%

**Q119)** Select the letter-cluster from among the given options that can replace the question mark (?) in the following series.

VDU RGS NJQ ? FPM

**A) JMP B) JMN C) JLN D) JMO**

Date: 17/06/2025 Time: 9:00 AM - 10:30 AM Right: 91.83% Wrong: 5.16%

**Q120)** Select the letter-cluster from among the given options that can replace the question mark (?) in the following series.

ETQ IQO MNM QKK ?

**A) UHI B) UHJ C) UII D) UJJ**

Date: 19/06/2025 Time: 9:00 AM - 10:30 AM Right: 91.95% Wrong: 4.99%

**Q121)** Select the letter-cluster from among the given options that can replace the question mark (?) in the following series.

ELX IJT MHP ? UDH

**A) QGK B) QFK C) QGL D) QFL**

Date: 17/06/2025 Time: 4:30 PM - 6:00 PM Right: 91.96% Wrong: 4.87%

**Q122)** What should come in place of the question mark (?) in the given series based on the English alphabetical order?

QTM ORK MPI KNG ?

**A) IKF B) IKE C) ILF D) ILE**

Date: 24/06/2025 Time: 12:45 PM - 2:15 PM Right: 92.12% Wrong: 5.10%

**Q123)** What should come in place of the question mark (?) in the given series?

28, 39, 61, 94, 138, ?

**A) 183 B) 193 C) 173 D) 163**

Date: 24/06/2025 Time: 12:45 PM - 2:15 PM Right: 92.12% Wrong: 4.09%

**Q124)** Which of the following letter-number clusters will replace the question mark (?) in the given series to make it logically complete?

HL27 GK38 FJ49 EI60 ?

**A) DG71 B) DH71 C) DH72 D) DG72**

Date: 23/06/2025 Time: 9:00 AM - 10:30 AM Right: 92.23% Wrong: 4.56%

**Q125)** What should come in place of the question mark (?) in the given series?

46 55 78 87 110 119 ?

**A) 128 B) 142 C) 137 D) 150**

Date: 13/06/2025 Time: 9:00 AM - 10:30 AM Right: 92.37% Wrong: 3.77%

**Q126)** Select the letter-cluster from among the given options that can replace the question mark (?) in the following series.

QRH MPG INF ELE ?

**A) AHE B) AJD C) BHD D) AJE**

Date: 21/06/2025 Time: 12:45 PM - 2:15 PM Right: 92.41% Wrong: 5.06%

**Q127)** Which of the following letter-number clusters will replace the question mark (?) in the given series to make it logically complete?

NR25 MQ36 LP47 KO58 ?

**A)** JM68 **B)** JN69 **C)** JN68 **D)** JM69

Date: 21/06/2025 Time: 4:30 PM - 6:00 PM Right: 92.41% Wrong: 3.92%

**Q128)** What should come in place of the question mark (?) in the given series?

216, 182, 152, 126, 104, ?

**A)** 78 **B)** 72 **C)** 81 **D)** 86

Date: 23/06/2025 Time: 9:00 AM - 10:30 AM Right: 92.41% Wrong: 4.10%

**Q129)** Refer to the following number and symbol series and answer the question that follows. Counting to be done from left to right only.

(Left) £ @ 5 6 3 © & 4 9 % \* \$ \$ % 6 & # & € © 5 8 (Right)

How many such numbers are there each of which is immediately preceded by a symbol and also immediately followed by a symbol?

**A)** 3 **B)** 2 **C)** 0 **D)** 1

Date: 12/06/2025 Time: 12:45 PM - 2:15 PM Right: 92.49% Wrong: 4.92%

**Q130)** What should come in place of the question mark (?) in the given series?

1112 1120 1130 1142 1156 ?

**A)** 1168 **B)** 1172 **C)** 1170 **D)** 1174

Date: 21/06/2025 Time: 12:45 PM - 2:15 PM Right: 92.49% Wrong: 5.91%

**Q131)** Which of the following letter-number clusters will replace the question mark (?) in the given series to make it logically complete?

JCH34 KDI43 LEJ52 MFK61 ?

**A)** NGK71 **B)** NGK70 **C)** NGL71 **D)** NGL70

Date: 21/06/2025 Time: 9:00 AM - 10:30 AM Right: 92.53% Wrong: 4.26%

**Q132)** Refer to the following number and symbol series and answer the question that follows. Counting to be done from left to right only.

(Note: All numbers are single digit numbers only.)

(Left) & # © @ 7 2 5 1 4 © 4 2 £ & 9 1 % # 4 4 & 1 (Right)

How many such symbols are there, each of which is immediately preceded by a number and also immediately followed by a number?

**A) 3 B) 1 C) 0 D) 2**

Date: 23/06/2025 Time: 12:45 PM - 2:15 PM Right: 92.54% Wrong: 4.76%

**Q133)** What should come in place of the question mark (?) in the given series based on the English alphabetical order?

AEU GLA MSG SZM ?

**A) YGS B) YSG C) SYG D) SGY**

Date: 12/06/2025 Time: 4:30 PM - 6:00 PM Right: 92.58% Wrong: 4.10%

**Q134)** Select the letter-cluster from among the given options that can replace the question mark (?) in the following series.

PTM NSJ LRG ? HPA

**A) JQD B) JQE C) JPD D) HPD**

Date: 20/06/2025 Time: 4:30 PM - 6:00 PM Right: 92.64% Wrong: 5.06%

**Q135)** What should come in place of the question mark (?) in the given series?

1412 1420 1430 1442 1456 ?

**A) 1474 B) 1470 C) 1468 D) 1472**

Date: 23/06/2025 Time: 4:30 PM - 6:00 PM Right: 92.67% Wrong: 5.86%

**Q136)** What should come in place of the question mark (?) in the given series based on the English alphabetical order?

IPK PWR WDY DKF ?

**A) RKM B) KMR C) KRM D) RMK**

Date: 10/06/2025 Time: 9:00 AM - 10:30 AM Right: 92.70% Wrong: 3.88%

**Q137)** What should come in place of the question mark (?) in the given series based on the English alphabetical order?

FMT AHO VCJ QXE ?

**A) ZSL B) LZS C) ZLS D) LSZ**

Date: 09/06/2025 Time: 4:30 PM - 6:00 PM Right: 92.73% Wrong: 3.17%

**Q138)** What should come in place of the question mark (?) in the given series?

1212 1220 1230 1242 1256 ?

**A) 1272 B) 1274 C) 1268 D) 1270**

Date: 21/06/2025 Time: 4:30 PM - 6:00 PM Right: 92.74% Wrong: 5.70%

**Q139)** What should come in place of the question mark (?) in the given series?

1512 1520 1530 1542 1556 ?

**A) 1572 B) 1576 C) 1574 D) 1570**

Date: 23/06/2025 Time: 9:00 AM - 10:30 AM Right: 92.74% Wrong: 5.68%

**Q140)** Which of the following letter-number clusters will replace the question mark (?) in the given series to make it logically complete?

LOH 1, JMG 4, HKF 9, FIE 16, ?

**A) EFD 36 B) EFG 25 C) DGD 36 D) DGD 25**

Date: 20/06/2025 Time: 9:00 AM - 10:30 AM Right: 92.75% Wrong: 3.56%

**Q141)** What should come in place of the question mark (?) in the given series?

135 123 109 93 75 ?

**A) 65 B) 55 C) 45 D) 75**

Date: 21/06/2025 Time: 4:30 PM - 6:00 PM Right: 92.85% Wrong: 4.07%

**Q142)** What should come in place of the question mark (?) in the given series based on the English alphabetical order?

XDO BBQ FZS JXU ?

**A) LWX B) MUX C) NVW D) OWV**

Date: 16/06/2025 Time: 9:00 AM - 10:30 AM Right: 92.89% Wrong: 2.98%

**Q143)** What should come in place of the question mark (?) in the given series based on the English alphabetical order?

TCL ZIR FOX LUD ?

**A) RAJ B) AJR C) RJA D) ARJ**

Date: 11/06/2025 Time: 4:30 PM - 6:00 PM Right: 92.93% Wrong: 3.09%

**Q144)** Which of the following letter-number clusters will replace the question mark (?) in the given series to make it logically complete?

HKP22 ILQ31 JMR40 KNS49 ?

**A) LOT59 B) LOT58 C) LOS59 D) LOS58**

Date: 19/06/2025 Time: 4:30 PM - 6:00 PM Right: 92.95% Wrong: 3.78%

**Q145)** Which of the following letter-number clusters will replace the question mark (?) in the given series to make it logically complete?

EFR7, HIU12, KLX17, NOA22, ?

**A) QOD27 B) QRD27 C) QRI27 D) PRD27**

Date: 24/06/2025 Time: 9:00 AM - 10:30 AM Right: 92.98% Wrong: 3.88%

**Q146)** Refer to the following number and symbol series and answer the question that follows. Counting to be done from left to right only.

(Left) 8 \$ 7 & 3 Ω 9 # 1 8 £ 6 @ & % 4 6 @ \* 4 5 (Right)

How many such symbols are there each of which is immediately preceded by an even number and also immediately followed by an odd number?

**A) Two B) Four C) One D) Three**

Date: 10/06/2025 Time: 9:00 AM - 10:30 AM Right: 93.01% Wrong: 4.11%

**Q147)** Select the letter-cluster from among the given options that can replace the question mark (?) in the following series.

RLN PKP NJR ? JHV

**A) LIS B) LIT C) LJS D) LHP**

Date: 19/06/2025 Time: 12:45 PM - 2:15 PM Right: 93.02% Wrong: 4.36%

**Q148)** Refer to the following number and symbol series and answer the question that follows. Counting to be done from left to right only.

(Left) © 2 © # \* 6 € 4 5 3 € 1 1 € 6 7 # 7 4 £ 6 € (Right)

How many such numbers are there each of which is immediately preceded by a number and also immediately followed by a number?

**A) 3 B) 2 C) 0 D) 1**

Date: 10/06/2025 Time: 4:30 PM - 6:00 PM Right: 93.15% Wrong: 4.11%

**Q149)** Refer to the following number and symbol series and answer the question that follows. Counting to be done from left to right only.

(Left) 1 5 & 3 \* \$ 4 @ % 2 7 # 9 ^ # > 6 8 (Right)

If all the symbols are dropped from the series, which of the following will be fourth from the right?

**A) 2 B) 4 C) 9 D) 7**

Date: 21/06/2025 Time: 9:00 AM - 10:30 AM Right: 93.18% Wrong: 3.89%

**Q150)** Which of the following letter-number clusters will replace the question mark (?) in the given series to make it logically complete?

JN28 IM40 HL52 GK64 ?

**A) FI76 B) FJ77 C) FI77 D) FJ76**

Date: 21/06/2025 Time: 12:45 PM - 2:15 PM Right: 93.19% Wrong: 3.61%

**Q151)** What should come in place of the question mark (?) in the given series based on the English alphabetical order?

YSM CWQ GAU KEY ?

**A) COI B) OIC C) OCI D) CIO**

Date: 12/06/2025 Time: 9:00 AM - 10:30 AM Right: 93.20% Wrong: 3.13%

**Q152)** Select the letter-cluster from among the given options that can replace the question mark (?) in the following series.

YOD WNF UMH SLJ ?

**A) QKL B) QLL C) QKK D) QLK**

Date: 16/06/2025 Time: 4:30 PM - 6:00 PM Right: 93.21% Wrong: 4.33%

**Q153)** Which of the following letter-number clusters will replace the question mark (?) in the given series to make it logically complete?

PK23 OJ34 NI45 MH56 ?

**A) LH67 B) LG68 C) LG67 D) LH68**

Date: 20/06/2025 Time: 9:00 AM - 10:30 AM Right: 93.21% Wrong: 3.44%

**Q154)** What should come in place of the question mark (?) in the given series?

982 980 988 986 994 992 ?

**A) 996 B) 1000 C) 1002 D) 998**

Date: 21/06/2025 Time: 9:00 AM - 10:30 AM Right: 93.30% Wrong: 4.54%

**Q155)** Which of the following letter-number clusters will replace the question mark (?) in the given series to make it logically complete?

FKN17 GLO28 HMP39 INQ50 ?

**A) JOR61 B) JOS61 C) JOR60 D) JOS60**

Date: 19/06/2025 Time: 9:00 AM - 10:30 AM Right: 93.31% Wrong: 3.19%

**Q156)** Which of the following letter-number clusters will replace the question mark (?) in the given series to make it logically complete?

KP23, LQ32, MR41, NS50, ?

**A) OW58 B) OT58 C) OT59 D) OW59**

Date: 11/06/2025 Time: 4:30 PM - 6:00 PM Right: 93.36% Wrong: 2.99%

**Q157)** What should come in place of the question mark (?) in the given series?

113 137 106 130 99 123 ?

**A) 116 B) 96 C) 92 D) 110**

Date: 14/06/2025 Time: 12:45 PM - 2:15 PM Right: 93.36% Wrong: 3.56%

**Q158)** What should come in place of the question mark (?) in the given series based on the English alphabetical order?

NKR PMT ROV TQX ?

**A) VRZ B) VSY C) VSZ D) VRV**

Date: 06/06/2025 Time: 9:00 AM - 10:30 AM Right: 93.40% Wrong: 4.71%

**Q159)** What should come in place of the question mark (?) in the given series?

176 168 159 149 138 ? 113

**A) 125 B) 129 C) 126 D) 123**

Date: 16/06/2025 Time: 4:30 PM - 6:00 PM Right: 93.41% Wrong: 4.14%

**Q160)** Which of the following letter-number clusters will replace the question mark (?) in the given series to make it logically complete?

OKI 4, QLG 8, SME 12, UNC 16, ?

**A) WOA 24 B) WOA 20 C) WOV 20 D) VOW 16**

Date: 05/06/2025 Time: 9:00 AM - 10:30 AM Right: 93.44% Wrong: 2.93%

**Q161)** Refer to the following number and symbol series and answer the question that follows. Counting to be done from left to right only. All numbers are single-digit numbers.

(Left) 5 \$ 5 % 8 7 \* 5 % & 8 @ 2 6 2 £ 3 8 1 & 5 6 (Right)

How many such numbers are there each of which is immediately preceded by a number and also immediately followed by a number?

**A) 2 B) 3 C) 4 D) 7**

Date: 06/06/2025 Time: 12:45 PM - 2:15 PM Right: 93.45% Wrong: 4.07%

**Q162)** What should come in place of the question mark (?) in the given series based on the English alphabetical order?

KNP ILN GJL EHJ ?

**A) CFH B) CFG C) CEH D) CEG**

Date: 12/06/2025 Time: 4:30 PM - 6:00 PM Right: 93.45% Wrong: 4.56%

**Q163)** What should come in place of the question mark (?) in the given series based on the English alphabetical order?

XBF UYC RVZ OSW ?

**A) TPL B) TLP C) LTP D) LPT**

Date: 05/06/2025 Time: 9:00 AM - 10:30 AM Right: 93.55% Wrong: 2.89%

**Q164)** Which of the following letter-number clusters will replace the question mark (?) in the given series to make it logically complete?

URM 14, TQL 18, SPK 22, ROJ 26, ?

**A) PQM 28 B) PLI 28 C) PRN 30 D) QNI 30**

Date: 13/06/2025 Time: 12:45 PM - 2:15 PM Right: 93.56% Wrong: 3.10%

**Q165)** Which of the following letter-number clusters will replace the question mark (?) in the given series to make it logically complete?

NQ31, MP40, LO49, KN58, ?

**A) JN66 B) JN67 C) JM67 D) JM66**

Date: 09/06/2025 Time: 9:00 AM - 10:30 AM Right: 93.65% Wrong: 3.83%

**Q166)** Which of the following letter-number clusters will replace the question mark (?) in the given series to make it logically complete?

BI16, EL24, HO32, KR40, ?

**A) NV48 B) NU48 C) NU47 D) NV47**

Date: 13/06/2025 Time: 12:45 PM - 2:15 PM Right: 93.65% Wrong: 3.49%

**Q167)** Which of the following letter-number clusters will replace the question mark (?) in the given series to make it logically complete?

AAA 5, BCD 10, CEG 15, DGJ 20, ?

**A) EIM 25 B) EKM 25 C) ETM 25 D) EGM 25**

Date: 24/06/2025 Time: 4:30 PM - 6:00 PM Right: 93.68% Wrong: 2.62%

**Q168)** Which of the following letter-number-clusters will replace the question mark (?) in the given series to make it logically complete?

VRO 6, UQN 11, TPM 16, SOL 21, ?

**A) RPM 25 B) PQM 25 C) RNK 26 D) PRN 26**

Date: 12/06/2025 Time: 12:45 PM - 2:15 PM Right: 93.72% Wrong: 2.26%

**Q169)** Select the number from among the given options that can replace the question mark (?) in the following series.

29 33 41 53 ? 89 113

**A) 71 B) 79 C) 63 D) 69**

Date: 09/06/2025 Time: 9:00 AM - 10:30 AM Right: 93.76% Wrong: 3.83%

**Q170)** Refer to the following number and symbol series and answer the question that follows. Counting to be done from left to right only.

(Left) 1 @ 2 2 7 © & 8 6 \* # 9 3 6 & 6 # & \* © @ 8 (Right)

How many such numbers are there each of which is immediately preceded by a number and also immediately followed by a number?

**A) 1 B) 3 C) 2 D) 4**

Date: 12/06/2025 Time: 4:30 PM - 6:00 PM Right: 93.76% Wrong: 3.80%

**Q171)** What should come in place of the question mark (?) in the given series?

43 27 43 41 43 55 43 ?

**A) 69 B) 77 C) 73 D) 43**

Date: 12/06/2025 Time: 12:45 PM - 2:15 PM Right: 93.78% Wrong: 2.35%

**Q172)** What should come in place of the question mark (?) in the given series based on the English alphabetical order?

MPI KNG ILE GJC ?

**A) EHA B) EGA C) EGB D) EHB**

Date: 13/06/2025 Time: 4:30 PM - 6:00 PM Right: 93.90% Wrong: 3.89%

**Q173)** What should come in place of the question mark (?) in the given series?

852 850 846 840 832 ?

**A) 826 B) 824 C) 822 D) 820**

Date: 16/06/2025 Time: 12:45 PM - 2:15 PM Right: 94.05% Wrong: 4.12%

**Q174)** What should come in place of the question mark (?) in the given series based on the English alphabetical order?

AHE CJG ELI GNK ?

**A) ION B) IPN C) IOM D) IPM**

Date: 09/06/2025 Time: 4:30 PM - 6:00 PM Right: 94.12% Wrong: 4.06%

Q175) What should come in place of the question mark (?) in the given series?

901 900 897 892 885 ?

A) 877 B) 876 C) 875 D) 873

Date: 06/06/2025 Time: 9:00 AM - 10:30 AM Right: 94.16% Wrong: 3.45%

Q176) Which of the following letter-number-clusters will replace the question mark (?) in the given series to make it logically complete?

GOQ 35, HPR 32, IQS 29, JRT 26, ?

A) KSU 23 B) KPN 22 C) RQM 22 D) RPM 23

Date: 13/06/2025 Time: 9:00 AM - 10:30 AM Right: 94.18% Wrong: 1.90%

Q177) What should come in place of the question mark (?) in the given series?

173, 151, 131, 113, 97, ?

A) 91 B) 68 C) 83 D) 76

Date: 23/06/2025 Time: 4:30 PM - 6:00 PM Right: 94.20% Wrong: 2.82%

Q178) What should come in place of the question mark (?) in the given series based on the English alphabetical order?

OQJ MOH KMF IKD ?

A) GIB B) GIC C) GJB D) GJC

Date: 14/06/2025 Time: 12:45 PM - 2:15 PM Right: 94.26% Wrong: 3.85%

Q179) What should come in place of the question mark (?) in the given series?

882 880 876 870 862 ?

A) 852 B) 856 C) 850 D) 854

Date: 14/06/2025 Time: 9:00 AM - 10:30 AM Right: 94.29% Wrong: 4.35%

Q180) Select the letter-cluster from among the given options that can replace the question mark (?) in the following series.

ENU FLS GJQ ? IFM

A) HHO B) HOP C) HIO D) HIP

Date: 20/06/2025 Time: 12:45 PM - 2:15 PM Right: 94.30% Wrong: 3.50%

**Q181)** Select the number from among the given options that can replace the question mark (?) in the following series.

13 26 29 58 61 122 125 ?

**A) 131 B) 250 C) 225 D) 128**

Date: 09/06/2025 Time: 4:30 PM - 6:00 PM Right: 94.34% Wrong: 2.89%

**Q182)** Select the letter-cluster from among the given options that can replace the question mark (?) in the following series.

RLY TNS VPM XRG ?

**A) ZTZ B) ZUZ C) ZTA D) ZUA**

Date: 17/06/2025 Time: 12:45 PM - 2:15 PM Right: 94.35% Wrong: 2.93%

**Q183)** What should come in place of the question mark (?) in the given series?

1001 1000 997 992 985 ?

**A) 975 B) 976 C) 978 D) 977**

Date: 05/06/2025 Time: 4:30 PM - 6:00 PM Right: 94.38% Wrong: 3.79%

**Q184)** What should come in place of the question mark (?) in the given series?

163 131 99 67 35 ?

**A) 2 B) 4 C) 12 D) 3**

Date: 12/06/2025 Time: 4:30 PM - 6:00 PM Right: 94.39% Wrong: 3.17%

**Q185)** Refer to the following number and symbol series and answer the question that follows. Counting to be done from left to right only.

(Left) 6 @ \$ 1 8 # 9 % < 2 4 ≥ 3 ^ 5 & 7 (Right)

If all the numbers are dropped from the series, which of the following will be sixth from the right?

**A) % B) \$ C) # D) <**

Date: 23/06/2025 Time: 4:30 PM - 6:00 PM Right: 94.45% Wrong: 3.16%

**Q186)** What should come in place of the question mark (?) in the given series based on the English alphabetical order?

LJQ NLS PNU RPW ?

**A) TRZ B) TRY C) TSZ D) TSY**

Date: 06/06/2025 Time: 12:45 PM - 2:15 PM Right: 94.51% Wrong: 3.44%

**Q187)** What should come in place of the question mark (?) in the given series?

962 960 956 950 942 ?

**A) 936 B) 930 C) 932 D) 934**

Date: 12/06/2025 Time: 12:45 PM - 2:15 PM Right: 94.56% Wrong: 3.96%

**Q188)** What should come in place of the question mark (?) in the given series based on the English alphabetical order?

SKC WOG ASK EWO ?

**A) IAS B) AIS C) ASI D) ISA**

Date: 05/06/2025 Time: 4:30 PM - 6:00 PM Right: 94.64% Wrong: 2.55%

**Q189)** What should come in place of the question mark (?) in the given series?

912 910 920 918 928 ? 936

**A) 924 B) 930 C) 926 D) 928**

Date: 20/06/2025 Time: 9:00 AM - 10:30 AM Right: 94.65% Wrong: 3.07%

**Q190)** Select the number from among the given options that can replace the question mark (?) in the following series.

139 136 131 124 115 ? 91

**A) 106 B) 109 C) 104 D) 101**

Date: 06/06/2025 Time: 12:45 PM - 2:15 PM Right: 94.69% Wrong: 3.54%

**Q191)** What should come in place of the question mark (?) in the given series?

701 700 697 692 685 ?

**A) 675 B) 673 C) 671 D) 676**

Date: 05/06/2025 Time: 9:00 AM - 10:30 AM Right: 94.70% Wrong: 2.48%

**Q192)** What should come in place of the question mark (?) in the given series?

802 800 796 790 782 ?

**A) 776 B) 774 C) 772 D) 770**

Date: 05/06/2025 Time: 12:45 PM - 2:15 PM Right: 94.76% Wrong: 3.71%

Q193) What should come in place of the question mark (?) in the given series?

402 400 396 390 382 ?

A) 376 B) 370 C) 372 D) 374

Date: 11/06/2025 Time: 12:45 PM - 2:15 PM Right: 94.81% Wrong: 3.73%

Q194) What should come in place of the question mark (?) in the given series?

601 600 597 592 585 ?

A) 576 B) 571 C) 573 D) 577

Date: 09/06/2025 Time: 4:30 PM - 6:00 PM Right: 94.83% Wrong: 3.21%

Q195) What should come in place of the question mark (?) in the given series?

862 860 856 850 842 ?

A) 832 B) 833 C) 831 D) 830

Date: 16/06/2025 Time: 4:30 PM - 6:00 PM Right: 94.86% Wrong: 3.43%

Q196) What should come in place of the question mark (?) in the given series?

222 194 166 138 110 82 ?

A) 60 B) 66 C) 42 D) 54

Date: 11/06/2025 Time: 4:30 PM - 6:00 PM Right: 94.87% Wrong: 2.57%

Q197) What will come in place of the question mark (?) in the given series?

832 830 826 820 812 ?

A) 803 B) 800 C) 801 D) 802

Date: 17/06/2025 Time: 9:00 AM - 10:30 AM Right: 94.90% Wrong: 3.73%

Q198) What should come in place of the question mark (?) in the given series?

99 92 105 98 111 104 ? 110

A) 117 B) 92 C) 125 D) 97

Date: 11/06/2025 Time: 12:45 PM - 2:15 PM Right: 94.97% Wrong: 2.97%

**Q199)** What should come in place of the question mark (?) in the given series?

972 970 966 960 952 ?

**A)** 942 **B)** 940 **C)** 438 **D)** 941

Date: 12/06/2025 Time: 9:00 AM - 10:30 AM Right: 94.97% Wrong: 2.90%

**Q200)** What should come in place of the question mark (?) in the given series based on the English alphabetical order?

FCA HEC JGE LIG ?

**A)** NKI **B)** NKJ **C)** NLJ **D)** NLI

Date: 10/06/2025 Time: 12:45 PM - 2:15 PM Right: 94.98% Wrong: 3.13%

**Q201)** What should come in place of the question mark (?) in the given series?

4 10 22 46 94 190 ?

**A)** 390 **B)** 380 **C)** 384 **D)** 382

Date: 17/06/2025 Time: 4:30 PM - 6:00 PM Right: 94.99% Wrong: 2.49%

**Q202)** Which of the following letter-number clusters will replace the question mark (?) in the given series to make it logically complete?

EJM 13, FKN 15, GLO 17, HMP 19, ?

**A)** JNP 22 **B)** INQ 21 **C)** JRN 22 **D)** IOP 21

Date: 18/06/2025 Time: 12:45 PM - 2:15 PM Right: 94.99% Wrong: 2.55%

**Q203)** What should come in place of the question mark (?) in the given series based on the English alphabetical order?

LIP NKR PMT ROV ?

**A)** TRX **B)** TQX **C)** TRY **D)** TQY

Date: 24/06/2025 Time: 9:00 AM - 10:30 AM Right: 95.02% Wrong: 2.99%

**Q204)** What should come in place of the question mark (?) in the given series?

7 9 13 21 37 ?

**A)** 71 **B)** 66 **C)** 69 **D)** 65

Date: 18/06/2025 Time: 9:00 AM - 10:30 AM Right: 95.03% Wrong: 2.35%

**Q205)** Which of the following letter-number clusters will replace the question mark (?) in the given series to make it logically complete?

SPM 8, TQN 14, URO 20, VSP 26, ?

**A) WQM 30 B) XPM 30 C) WTQ 32 D) XRN 32**

Date: 19/06/2025 Time: 4:30 PM - 6:00 PM Right: 95.04% Wrong: 1.75%

**Q206)** Select the letter-cluster from among the given options that can replace the question mark (?) in the following series.

RCX TDS VEN XFI ?

**A) ZHE B) ZIE C) ZIF D) ZGD**

Date: 18/06/2025 Time: 4:30 PM - 6:00 PM Right: 95.08% Wrong: 2.09%

**Q207)** What should come in place of the question mark (?) in the given series based on the English alphabetical order?

JLO HJM FHK DFI ?

**A) BDG B) BEG C) BEH D) BDH**

Date: 12/06/2025 Time: 9:00 AM - 10:30 AM Right: 95.12% Wrong: 2.81%

**Q208)** What should come in place of the question mark (?) in the given series?

302 300 296 290 282 ?

**A) 268 B) 272 C) 270 D) 274**

Date: 11/06/2025 Time: 4:30 PM - 6:00 PM Right: 95.13% Wrong: 3.39%

**Q209)** What should come in place of the question mark (?) in the given series?

872 870 866 860 852 ?

**A) 840 B) 842 C) 843 D) 841**

Date: 14/06/2025 Time: 12:45 PM - 2:15 PM Right: 95.16% Wrong: 3.24%

**Q210)** What should come in place of the question mark (?) in the given series?

982 980 976 970 962 ?

**A) 952 B) 954 C) 948 D) 950**

Date: 12/06/2025 Time: 4:30 PM - 6:00 PM Right: 95.17% Wrong: 3.29%

**Q211)** What should come in place of the question mark (?) in the given series?

892 890 886 880 872 ?

**A) 862 B) 863 C) 860 D) 861**

Date: 13/06/2025 Time: 9:00 AM - 10:30 AM Right: 95.17% Wrong: 3.27%

**Q212)** What should come in place of the question mark (?) in the given series based on the English alphabetical order?

FCA GDB HEC IFD ?

**A) JGE B) JGF C) JHF D) JHE**

Date: 05/06/2025 Time: 12:45 PM - 2:15 PM Right: 95.27% Wrong: 3.02%

**Q213)** What should come in place of the question mark (?) in the given series?

61 54 61 47 61 40 61 ?

**A) 37 B) 33 C) 31 D) 40**

Date: 12/06/2025 Time: 9:00 AM - 10:30 AM Right: 95.27% Wrong: 3.13%

**Q214)** What should come in place of the question mark (?) in the given series?

79 77.8 76.6 ? 74.2 73

**A) 74.8 B) 76 C) 74.6 D) 75.4**

Date: 14/06/2025 Time: 9:00 AM - 10:30 AM Right: 95.34% Wrong: 2.47%

**Q215)** Refer to the following number and symbol series and answer the question that follows. Counting to be done from left to right only.

(Left) 7 & 9 ^ # 1 \* 5 < 2 6 ≡ 4 Δ 3 \$ @ 8 (Right)

If all the symbols are dropped from the series, which of the following will be fifth from the right?

**A) 5 B) 2 C) 6 D) 1**

Date: 21/06/2025 Time: 12:45 PM - 2:15 PM Right: 95.39% Wrong: 2.23%

**Q216)** What should come in place of the question mark (?) in the given series based on the English alphabetical order?

VQL TOJ RMH PKF ?

**A) NID B) NDI C) DNI D) DIN**

Date: 06/06/2025 Time: 9:00 AM - 10:30 AM Right: 95.41% Wrong: 2.35%

**Q217)** What should come in place of the question mark (?) in the given series?

187, 173, 160, 148, 137, ?

**A) 127 B) 117 C) 131 D) 129**

Date: 24/06/2025 Time: 4:30 PM - 6:00 PM Right: 95.42% Wrong: 1.80%

**Q218)** What should come in place of the question mark (?) in the given series based on the English alphabetical order?

GEB IGD KIF MKH ?

**A) OMJ B) OMI C) ONJ D) ONI**

Date: 10/06/2025 Time: 9:00 AM - 10:30 AM Right: 95.43% Wrong: 2.38%

**Q219)** What should come in place of the question mark (?) in the given series based on the English alphabetical order?

BIG DKI FMK HOM ?

**A) JRP B) JQO C) JRO D) JQP**

Date: 09/06/2025 Time: 12:45 PM - 2:15 PM Right: 95.44% Wrong: 2.81%

**Q220)** What should come in place of the question mark (?) in the given series?

512 520 510 522 ? 524 506

**A) 520 B) 505 C) 521 D) 508**

Date: 19/06/2025 Time: 12:45 PM - 2:15 PM Right: 95.50% Wrong: 1.90%

**Q221)** What should come in place of the question mark (?) in the given series based on the English alphabetical order?

DJP GMS JPV MSY ?

**A) PVB B) PBV C) BPV D) BVP**

Date: 16/06/2025 Time: 12:45 PM - 2:15 PM Right: 95.58% Wrong: 1.92%

**Q222)** What should come in place of the question mark (?) in the given series?

301 300 297 292 285 ?

**A) 275 B) 276 C) 273 D) 277**

Date: 10/06/2025 Time: 4:30 PM - 6:00 PM Right: 95.59% Wrong: 2.70%

**Q223)** What should come in place of the question mark (?) in the given series based on the English alphabetical order?

CXS EZU GBW IDY ?

**A) FKA B) KFA C) FAK D) KAF**

Date: 14/06/2025 Time: 9:00 AM - 10:30 AM Right: 95.65% Wrong: 2.35%

**Q224)** Which of the following letter-number clusters will replace the question mark (?) in the given series to make it logically complete?

GKO 11, IMQ 13, KOS 15, MQU 17, ?

**A) OSW 19 B) NQS 21 C) ORT 21 D) NTZ 19**

Date: 06/06/2025 Time: 12:45 PM - 2:15 PM Right: 95.68% Wrong: 2.09%

**Q225)** What should come in place of the question mark (?) in the given series based on the English alphabetical order?

DKR HOV LSZ PWD ?

**A) HAT B) HTA C) TAH D) THA**

Date: 09/06/2025 Time: 12:45 PM - 2:15 PM Right: 95.68% Wrong: 1.97%

**Q226)** Which of the following letter-number-clusters will replace the question mark (?) in the given series to make it logically complete?

CJL 11, DKM 15, ELN 19, FMO 23, ?

**A) QNO 27 B) TXU 26 C) TUY 26 D) GNP 27**

Date: 10/06/2025 Time: 12:45 PM - 2:15 PM Right: 95.68% Wrong: 1.00%

**Q227)** What should come in place of the question mark (?) in the given series?

201, 200, 197, 192, 185, ?

**A) 176 B) 184 C) 187 D) 185**

Date: 10/06/2025 Time: 9:00 AM - 10:30 AM Right: 95.73% Wrong: 2.54%

**Q228)** What should come in place of the question mark (?) in the given series?

713 715 720 722 727 729 ?

**A) 739 B) 734 C) 731 D) 736**

Date: 19/06/2025 Time: 9:00 AM - 10:30 AM Right: 95.79% Wrong: 2.82%

Q229) What should come in place of the question mark (?) in the given series?

842 840 836 830 822 ?

A) 812 B) 814 C) 808 D) 810

Date: 16/06/2025 Time: 9:00 AM - 10:30 AM Right: 95.84% Wrong: 2.80%

Q230) What should come in place of the question mark (?) in the given series?

49 55 63 73 85 99 ?

A) 129 B) 115 C) 120 D) 111

Date: 10/06/2025 Time: 9:00 AM - 10:30 AM Right: 95.89% Wrong: 1.50%

Q231) What should come in place of the question mark (?) in the given series based on the English alphabetical order?

NTZ LRX JPV HNT ?

A) RLF B) FRL C) FLR D) RFL

Date: 09/06/2025 Time: 9:00 AM - 10:30 AM Right: 95.95% Wrong: 2.04%

Q232) What should come in place of the question mark (?) in the given series?

942 940 936 930 922 ?

A) 910 B) 908 C) 906 D) 912

Date: 13/06/2025 Time: 12:45 PM - 2:15 PM Right: 96.06% Wrong: 2.56%

Q233) What should come in place of the question mark (?) in the given series?

501 500 497 492 485 ?

A) 471 B) 475 C) 473 D) 476

Date: 09/06/2025 Time: 12:45 PM - 2:15 PM Right: 96.24% Wrong: 2.21%

Q234) What should come in place of the question mark (?) in the given series based on the English alphabetical order?

KIO LJP MKQ NLR ?

A) ONR B) OMS C) ONS D) OMR

Date: 06/06/2025 Time: 4:30 PM - 6:00 PM Right: 96.26% Wrong: 2.43%

**Q235)** What should come in place of the question mark (?) in the given series based on the English alphabetical order?

FKP DIN BGL ZEJ ?

**A) XCH B) CXH C) XHC D) CHX**

Date: 14/06/2025 Time: 12:45 PM - 2:15 PM Right: 96.31% Wrong: 1.73%

**Q236)** Select the number from among the given options that can replace the question mark (?) in the following series.

22 25.1 28.2 31.3 ? 37.5

**A) 33.5 B) 34.1 C) 32.4 D) 34.4**

Date: 10/06/2025 Time: 4:30 PM - 6:00 PM Right: 96.41% Wrong: 1.96%

**Q237)** Which of the following letter-number clusters will replace the question mark (?) in the given series to make it logically complete?

GIM 8, HJN 11, IKO 14, JLP 17, ?

**A) UVY 20 B) KMQ 20 C) UYZ 21 D) TUY 21**

Date: 06/06/2025 Time: 4:30 PM - 6:00 PM Right: 96.45% Wrong: 1.08%

**Q238)** What should come in place of the question mark (?) in the given series?

911 910 920 919 929 ? 938

**A) 926 B) 924 C) 928 D) 929**

Date: 20/06/2025 Time: 4:30 PM - 6:00 PM Right: 96.60% Wrong: 1.50%

**Q239)** What should come in place of the question mark (?) in the given series based on the English alphabetical order?

JGM KHN LIO MJP ?

**A) NKR B) NLR C) NLQ D) NKQ**

Date: 05/06/2025 Time: 4:30 PM - 6:00 PM Right: 96.64% Wrong: 2.01%

**Q240)** What should come in place of the question mark (?) in the given series?

1012 1010 1000 998 988 ? 976

**A) 985 B) 988 C) 987 D) 986**

Date: 20/06/2025 Time: 12:45 PM - 2:15 PM Right: 96.65% Wrong: 1.78%

Q241) What should come in place of the question mark (?) in the given series?

992 990 986 980 972 ?

A) 961 B) 958 C) 959 D) 962

Date: 11/06/2025 Time: 9:00 AM - 10:30 AM Right: 96.70% Wrong: 1.16%

Q242) Select the number from among the given options that can replace the question mark (?) in the following series.

105 97 89 81 73 ?

A) 65 B) 58 C) 60 D) 70

Date: 05/06/2025 Time: 9:00 AM - 10:30 AM Right: 96.85% Wrong: 1.00%

Q243) What should come in place of the question mark (?) in the given series?

952 950 946 940 932 ?

A) 922 B) 918 C) 919 D) 921

Date: 13/06/2025 Time: 4:30 PM - 6:00 PM Right: 97.09% Wrong: 1.04%

Q244) What should come in place of the question mark (?) in the given series?

42 57 72 87 102 ?

A) 108 B) 115 C) 117 D) 121

Date: 10/06/2025 Time: 12:45 PM - 2:15 PM Right: 97.34% Wrong: 0.93%

Q245) What should come in place of the question mark (?) in the given series?

502 500 496 490 482 ?

A) 472 B) 471 C) 469 D) 468

Date: 10/06/2025 Time: 12:45 PM - 2:15 PM Right: 97.38% Wrong: 1.00%

Q246) What should come in place of the question mark (?) in the given series?

34 46 58 70 ? 94 106

A) 88 B) 86 C) 80 D) 82

Date: 09/06/2025 Time: 12:45 PM - 2:15 PM Right: 97.51% Wrong: 0.88%

**Q247)** What should come in place of the question mark (?) in the given series?

8 13 20 29 40 ?

**A) 65 B) 61 C) 53 D) 57**

Date: 20/06/2025 Time: 12:45 PM - 2:15 PM Right: 97.51% Wrong: 1.10%

**Q248)** Select the number from among the given options that can replace the question mark (?) in the following series.

89 103 94 108 99 113 104 ?

**A) 123 B) 95 C) 118 D) 98**

Date: 06/06/2025 Time: 4:30 PM - 6:00 PM Right: 97.69% Wrong: 0.73%

**Q249)** What should come in place of the question mark (?) in the given series?

23 29 35 41 47 ?

**A) 53 B) 62 C) 59 D) 65**

Date: 13/06/2025 Time: 4:30 PM - 6:00 PM Right: 98.56% Wrong: 0.28%

### Answer Key (Q1 to Q249) Series Test

Q1: 2	Q2: 3	Q3: 2	Q4: 4	Q5: 3
Q6: 3	Q7: 2	Q8: 2	Q9: 2	Q10: 3
Q11: 3	Q12: 2	Q13: 4	Q14: 4	Q15: 2
Q16: 1	Q17: 3	Q18: 1	Q19: 2	Q20: 3
Q21: 3	Q22: 4	Q23: 4	Q24: 1	Q25: 2
Q26: 4	Q27: 3	Q28: 1	Q29: 1	Q30: 3
Q31: 3	Q32: 1	Q33: 3	Q34: 1	Q35: 4
Q36: 3	Q37: 4	Q38: 3	Q39: 2	Q40: 2
Q41: 2	Q42: 4	Q43: 1	Q44: 2	Q45: 4
Q46: 2	Q47: 4	Q48: 1	Q49: 1	Q50: 3
Q51: 2	Q52: 1	Q53: 3	Q54: 2	Q55: 1
Q56: 4	Q57: 3	Q58: 1	Q59: 3	Q60: 3
Q61: 2	Q62: 2	Q63: 3	Q64: 3	Q65: 4
Q66: 3	Q67: 4	Q68: 4	Q69: 3	Q70: 4

Q71: 4	Q72: 4	Q73: 3	Q74: 2	Q75: 4
Q76: 1	Q77: 2	Q78: 2	Q79: 1	Q80: 4
Q81: 4	Q82: 4	Q83: 2	Q84: 2	Q85: 1
Q86: 4	Q87: 1	Q88: 2	Q89: 3	Q90: 1
Q91: 3	Q92: 4	Q93: 1	Q94: 3	Q95: 3
Q96: 1	Q97: 2	Q98: 1	Q99: 1	Q100: 2
Q101: 1	Q102: 4	Q103: 1	Q104: 3	Q105: 2
Q106: 2	Q107: 3	Q108: 3	Q109: 3	Q110: 4
Q111: 2	Q112: 4	Q113: 3	Q114: 3	Q115: 1
Q116: 3	Q117: 4	Q118: 1	Q119: 4	Q120: 1
Q121: 4	Q122: 4	Q123: 2	Q124: 2	Q125: 2
Q126: 2	Q127: 2	Q128: 4	Q129: 4	Q130: 2
Q131: 4	Q132: 4	Q133: 1	Q134: 1	Q135: 4
Q136: 3	Q137: 4	Q138: 1	Q139: 1	Q140: 4
Q141: 2	Q142: 3	Q143: 1	Q144: 2	Q145: 2
Q146: 3	Q147: 2	Q148: 4	Q149: 4	Q150: 4
Q151: 2	Q152: 1	Q153: 3	Q154: 2	Q155: 1
Q156: 3	Q157: 3	Q158: 3	Q159: 3	Q160: 2
Q161: 1	Q162: 1	Q163: 4	Q164: 4	Q165: 3
Q166: 2	Q167: 1	Q168: 3	Q169: 4	Q170: 3
Q171: 1	Q172: 1	Q173: 3	Q174: 4	Q175: 2
Q176: 1	Q177: 3	Q178: 1	Q179: 1	Q180: 1
Q181: 2	Q182: 3	Q183: 2	Q184: 4	Q185: 3
Q186: 2	Q187: 3	Q188: 1	Q189: 3	Q190: 3
Q191: 4	Q192: 3	Q193: 3	Q194: 1	Q195: 1
Q196: 4	Q197: 4	Q198: 1	Q199: 1	Q200: 1
Q201: 4	Q202: 2	Q203: 2	Q204: 3	Q205: 3

Q206: 4	Q207: 1	Q208: 2	Q209: 2	Q210: 1
Q211: 1	Q212: 1	Q213: 2	Q214: 4	Q215: 2
Q216: 1	Q217: 1	Q218: 1	Q219: 2	Q220: 4
Q221: 1	Q222: 2	Q223: 2	Q224: 1	Q225: 3
Q226: 4	Q227: 1	Q228: 2	Q229: 1	Q230: 2
Q231: 3	Q232: 4	Q233: 4	Q234: 2	Q235: 1
Q236: 4	Q237: 2	Q238: 3	Q239: 4	Q240: 4
Q241: 4	Q242: 1	Q243: 1	Q244: 3	Q245: 1
Q246: 4	Q247: 3	Q248: 3	Q249: 1	

## Number Series & Missing Numbers

Q1) Each of the digits in the number 6954381 is arranged in the descending order from left to right. Which of the following digits will be third from the right?

A) 5 B) 6 C) 3 D) 4

Date: 10/06/2025 Time: 4:30 PM - 6:00 PM Right: 73.23% Wrong: 24.92%

Q2) Each of the digits in the number 4319286 is arranged in descending order from left to right. The position(s) of how many digits will remain unchanged as compared to that in the original number?

A) Three B) One C) Two D) None

Date: 24/06/2025 Time: 12:45 PM - 2:15 PM Right: 74.03% Wrong: 23.09%

Q3) Each of the digits in the number 7234169 is arranged in ascending order from left to right. The position(s) of how many digits will remain unchanged as compared to that in the original number?

A) 2 B) 1 C) 4 D) 3

Date: 19/06/2025 Time: 4:30 PM - 6:00 PM Right: 76.23% Wrong: 21.54%

Q4) Each of the digits in the number 257461398 is arranged in ascending order from left to right. What will be the sum of the digits that are second from the left and third from the right in the new number thus formed?

A) 10 B) 11 C) 8 D) 9

Date: 23/06/2025 Time: 9:00 AM - 10:30 AM Right: 84.63% Wrong: 12.48%

Q5) Each of the digits in the number 691478325 is arranged in ascending order from left to right. What will be the sum of the digits that are third from the left and second from the right in the new number thus formed?

A) 10 B) 9 C) 12 D) 11

Date: 16/06/2025 Time: 9:00 AM - 10:30 AM Right: 85.87% Wrong: 11.15%

Q6) Each of the digits in the number 4917523 is arranged in the ascending order from left to right. Which of the following digits will be third from the left?

A) 4 B) 2 C) 5 D) 3

Date: 13/06/2025 Time: 4:30 PM - 6:00 PM Right: 86.79% Wrong: 10.91%

Q7) Select the triad that follows the same pattern as that followed by the two triads given below. Both triads follow the same pattern.

KG-NJ-PR

MI-PL-RT

A) PK-RN-TU B) OK-RN-TU C) PK-RM-TU D) OK-RN-TV

Date: 13/06/2025 Time: 4:30 PM - 6:00 PM Right: 87.40% Wrong: 7.88%

Q8) Each of the digits in the number 6427519 is arranged in ascending order from left to right. The position(s) of how many digits will remain unchanged as compared to that in the original number?

A) 3 B) 0 C) 2 D) 1

Date: 18/06/2025 Time: 9:00 AM - 10:30 AM Right: 87.74% Wrong: 9.88%

Q9) Each of the digits in the number 24765389 is arranged in ascending order from left to right. Which of the following digits will be fourth from the left in the new number thus formed?

A) 6 B) 4 C) 7 D) 5

Date: 19/06/2025 Time: 9:00 AM - 10:30 AM Right: 88.14% Wrong: 9.39%

Q10) Each of the digits in the number 8569142 is arranged in the descending order from left to right. The position(s) of how many digits will remain unchanged in the new number thus formed as compared to that in the original number?

A) Three B) Four C) Two D) One

Date: 06/06/2025 Time: 12:45 PM - 2:15 PM Right: 90.05% Wrong: 6.41%

Q11) Each of the digits in the number 7416385 is arranged in ascending order from left to right. The position(s) of how many digits will remain unchanged as compared to that/those in the original number?

A) None B) Three C) Two D) One

Date: 24/06/2025 Time: 4:30 PM - 6:00 PM Right: 91.77% Wrong: 5.07%

**Q12)** Each of the digits in the number 3178456 is arranged in ascending order from left to right. What will be the sum of the digits which are first from the left and second from the right in the new number thus formed?

**A) 14 B) 8 C) 10 D) 4**

Date: 24/06/2025 Time: 12:45 PM - 2:15 PM Right: 92.82% Wrong: 3.69%

**Q13)** Each of the digits in the number 8142769 is arranged in the ascending order from left to right. Which of the following digits will be fourth from the left in the new number thus formed?

**A) 6 B) 4 C) 8 D) 2**

Date: 06/06/2025 Time: 9:00 AM - 10:30 AM Right: 94.35% Wrong: 3.45%

### Answer Key (Q1 to Q13) Number Series & Missing Numbers

Q1: 4	Q2: 4	Q3: 3	Q4: 4	Q5: 4
Q6: 4	Q7: 4	Q8: 4	Q9: 4	Q10: 4
Q11: 1	Q12: 2	Q13: 1		

### formation of letters

**Q1)** Based on the English alphabetical order, three of the following four letter-clusters are alike in a certain way and thus form a group. Which letter-cluster DOES NOT belong to that group?  
(Note: The odd one out is not based on the number of consonants/vowels or their position in the letter-cluster.)

**A) BURM B) QJGB C) HAXS D) TMJF**

Date: 19/06/2025 Time: 4:30 PM - 6:00 PM Right: 74.74% Wrong: 15.94%

**Q2)** Based on the English alphabetical order, three of the following four letter-clusters are alike in a certain way and thus form a group. Which letter-cluster DOES NOT belong to that group?  
(Note: The odd one out is not based on the number of consonants/vowels or their position in the letter-cluster.)

**A) TQLJ B) JGBZ C) ROIH D) BYTR**

Date: 16/06/2025 Time: 4:30 PM - 6:00 PM Right: 84.42% Wrong: 9.47%

**Q3)** In the following triads, each group of letters is related to the subsequent one following a certain logic. Select from the given options, the one that follows the same logic.

GEAN - NAGE - GAEN  
MAKE - EKMA - MKAE

- A)** TURN - URTN - URNT   **B)** BOLD - BLOD - DLOB   **C)** FOWL - LWFO - FWOL  
**D)** BEAN - NABE - EABN

Date: 10/06/2025   Time: 9:00 AM - 10:30 AM   Right: 86.01%   Wrong: 7.46%

**Q4)** In the following triads, each group of letters is related to the subsequent one following a certain logic. Select from the given options, the one that follows the same logic.

WORK - OWRK - KOWR  
FERN - EFRN - NEFR

- A)** RATE - ARTE - ATER   **B)** WIND - IWND - DIWN   **C)** QUIT - UQIT - TUIQ   **D)** DRUM - DURM - MURD

Date: 23/06/2025   Time: 12:45 PM - 2:15 PM   Right: 86.06%   Wrong: 8.80%

**Q5)** Based on the English alphabetical order, three of the following four letter-clusters are alike in a certain way and thus form a group. Which letter-cluster DOES NOT belong to that group?  
(Note: The odd one out is not based on the number of consonants/vowels or their position in the letter-cluster.)

- A)** PWR   **B)** JQL   **C)** MTO   **D)** GNJ

Date: 12/06/2025   Time: 12:45 PM - 2:15 PM   Right: 89.64%   Wrong: 6.15%

**Q6)** IJF is related to PQM in a certain way based on the English alphabetical order. In the same way, RSO is related to YZV. To which of the following is EFB related, following the same logic?

- A)** MNJ   **B)** MNK   **C)** LMI   **D)** LMJ

Date: 13/06/2025   Time: 4:30 PM - 6:00 PM   Right: 90.71%   Wrong: 5.85%

### Answer Key (Q1 to Q6) formation of letters

Q1: 4	Q2: 3	Q3: 3	Q4: 2	Q5: 4
Q6: 3				

## Puzzle Test

Q1) Each of M, N, O, P, Q, R and S has an exam on a different day of the week, starting from Monday and ending on Sunday of the same week. S has an exam on Friday. Only two people have exams between S and R. O has an exam immediately before N. M has an exam immediately after P. S has an exam on one of the days after M. On which day does Q have an exam?

A) Wednesday B) Sunday C) Monday D) Friday

Date: 06/06/2025 Time: 9:00 AM - 10:30 AM Right: 47.74% Wrong: 17.42%

Q2) Each of P, Q, R, S, T, U and V has an exam on a different day of a week starting from Monday and ending on Sunday of the same week. R has an exam on Thursday. Exactly 4 people have their exam between U and T, neither of whom has an exam on Sunday. S has an exam immediately before Q. P does not have an exam on Friday. U does not have an exam after Q. How many people have an exam after Q?

A) 1 B) 3 C) 4 D) 2

Date: 19/06/2025 Time: 12:45 PM - 2:15 PM Right: 49.96% Wrong: 17.43%

Q3) Each of P, Q, R, S, T, U and V has an exam on a different day of a week starting from Monday and ending on Sunday of the same week. T has an exam on Friday. Exactly 3 people have an exam between P and U, neither of whom has an exam on Sunday. S has an exam immediately after Q. V has an exam immediately before U. How many people have an exam after S?

A) 3 B) 1 C) 4 D) 2

Date: 18/06/2025 Time: 4:30 PM - 6:00 PM Right: 51.21% Wrong: 19.94%

Q4) Seven boxes, A, B, C, D, E, F and G, are kept one over the other, but not necessarily in the same order. Only three boxes are kept below B. Only two boxes are kept between B and A. Only C is kept immediately above E. D is kept at some place below F and at some place above G. How many boxes are kept above F?

A) 4 B) 2 C) 3 D) 1

Date: 17/06/2025 Time: 12:45 PM - 2:15 PM Right: 51.36% Wrong: 32.35%

Q5) Each of P, Q, R, S, T, U and V has an exam on a different day of a week starting from Monday and ending on Sunday of the same week. V has an exam on Friday. Exactly 3 people have exams between Q and S, neither of whom has an exam on Sunday. P has an exam immediately after U. T has an exam immediately before S. How many people have exams before U?

A) 2 B) 3 C) 4 D) 1

Date: 17/06/2025 Time: 4:30 PM - 6:00 PM Right: 53.87% Wrong: 18.10%

**Q6)** P, Q, R, S, T, U and V have an exam on different days of the week starting on Monday and ending on Sunday. Q has an exam on Friday. Exactly 3 people have an exam between R and T, neither of whom has an exam on Sunday. P has an exam immediately after U. V has an exam immediately before T. Who among the following has an exam on Wednesday?

**A) S B) R C) V D) U**

Date: 16/06/2025 Time: 9:00 AM - 10:30 AM Right: 57.16% Wrong: 20.54%

**Q7)** Each of P, Q, R, S, T, U and V has an exam on a different day of a week starting from Monday and ending on Sunday of the same week. Q has an exam on Saturday. Only 4 people have exams between T and U, neither of whom has an exam on Monday. P has an exam immediately after V, and R has an exam immediately before V. U has an exam after P. How many people have exams after R?

**A) 2 B) 3 C) 1 D) 4**

Date: 19/06/2025 Time: 12:45 PM - 2:15 PM Right: 57.32% Wrong: 12.01%

**Q8)** Each of P, Q, R, S, T, U and V has an exam on a different day of a week starting from Monday and ending on Sunday of the same week. V has an exam on Thursday. Exactly 4 people have their exams between U and Q, neither of whom has an exam on Sunday. T has an exam immediately before S. R does not have an exam on Friday. U does not have an exam after S. How many people have exams after Q?

**A) 3 B) 1 C) 4 D) 2**

Date: 16/06/2025 Time: 4:30 PM - 6:00 PM Right: 58.95% Wrong: 11.64%

**Q9)** L, M, N, O, P and W live on six different floors of the same building. The lowermost floor in the building is numbered 1, the floor above it, number 2 and so on, till the topmost floor is numbered 6. Only three people live between M and N, where M lives below N. O lives on an odd-numbered floor and immediately above M. W lives on one of the floors below P and on one of the floors above L. How many people live between P and L?

**A) Two B) One C) Three D) Four**

Date: 20/06/2025 Time: 9:00 AM - 10:30 AM Right: 58.96% Wrong: 17.36%

**Q10)** Seven boxes, A, B, C, D, E, F and G, are kept one over the other but not necessarily in the same order. Only three boxes are kept below B. Only two boxes are kept between B and G. Only A is kept immediately above E. F is kept in some place below D and in some place above C. How many boxes are kept below C?

**A) 2 B) 4 C) 1 D) 3**

Date: 11/06/2025 Time: 12:45 PM - 2:15 PM Right: 59.68% Wrong: 23.23%

**Q11)** Each of C, D, E, F, S, T and U has an exam on a different day of a week starting from Monday and ending on Sunday of the same week. F has the exam on Thursday. C has the exam on one of the days after S and on one of the days before E. U has the exam on one of the days after T but on one of the days before D. T has the exam on one of the days after F. How many people have their exams between U and C?

**A) Four B) Three C) One D) Two**

Date: 13/06/2025 Time: 12:45 PM - 2:15 PM Right: 59.71% Wrong: 12.44%

**Q12)** Seven boxes, A, B, C, D, E, F and G, are kept one over the other but not necessarily in the same order. Only three boxes are kept above G. Only one box is kept between F and G. Only three boxes are kept between F and B. B is kept in some place above G. E is kept immediately below B. A is kept in one of the places above D. C is not kept immediately above or below F. How many boxes are kept below A?

**A) 2 B) 4 C) 1 D) 3**

Date: 10/06/2025 Time: 12:45 PM - 2:15 PM Right: 60.63% Wrong: 13.74%

**Q13)** P, Q, R, S, T, U and V have an exam on different days of the week starting on Monday and ending on Sunday.

V has an exam on Thursday. Exactly 4 people have their exam between S and U, neither of whom has an exam on Sunday. R has an exam immediately before P. T does not have an exam on Friday. S does not have an exam after P. Who among the following has an exam on Tuesday?

**A) U B) T C) R D) S**

Date: 14/06/2025 Time: 12:45 PM - 2:15 PM Right: 61.13% Wrong: 13.28%

**Q14)** Seven boxes, D, E, F, G, S, T and U, are kept one over the other but not necessarily in the same order. Only three boxes are kept above G. Only one box is kept between T and G. Only three boxes are kept between T and S. S is kept at some place above G. E is kept immediately below S. F is kept at one of the places above D. U is not kept immediately above or below T. Which box is kept at the lowermost position?

**A) F B) U C) T D) D**

Date: 19/06/2025 Time: 12:45 PM - 2:15 PM Right: 61.30% Wrong: 13.22%

**Q15)** Each of P, Q, R, S, T, U and V has an exam on a different day of a week starting from Monday and ending on Sunday of the same week. T has an exam on Wednesday. Exactly 4 people have exams between S and R, neither of whom has an exam on Monday. Q has an exam immediately before and V has an exam immediately after P. U has an exam immediately before S. Who has an exam on Sunday?

**A) U B) P C) R D) S**

Date: 20/06/2025 Time: 9:00 AM - 10:30 AM Right: 61.69% Wrong: 13.52%

**Q16)** Seven boxes, F, G, H, I, L, M and N, are kept one over the other but not necessarily in the same order. Only three boxes are kept below I. Only two boxes are kept between I and F. Only H is kept above L. M is kept at some place below G and at some place above N. Which box is kept at second position from the bottom?

**A) H B) N C) F D) L**

Date: 20/06/2025 Time: 4:30 PM - 6:00 PM Right: 62.76% Wrong: 22.46%

**Q17)** Each of O, P, Q, R, S, T and U has an exam on a different day of a week starting from Monday and ending on Sunday of the same week. S has an exam on Wednesday. R has an exam on one of the days after P and T has an exam on one of the days before Q. U has an exam immediately after O and S has an exam immediately before O. T has an exam on one of the days after U. How many people have an exam between S and Q?

**A) Two B) Four C) Five D) Three**

Date: 05/06/2025 Time: 4:30 PM - 6:00 PM Right: 63.24% Wrong: 9.56%

**Q18)** Seven boxes, D, E, F, G, S, T and U, are kept one over the other but not necessarily in the same order. Only three boxes are kept below D. Only two boxes are kept between D and U. Only G is kept above T. E is kept at some place below F and at some place above S. Which box is kept at second position from the bottom?

**A) S B) U C) D D) F**

Date: 13/06/2025 Time: 4:30 PM - 6:00 PM Right: 63.50% Wrong: 17.22%

**Q19)** Seven boxes, A, B, C, D, E, F and G, are kept one over the other, but not necessarily in the same order. E is kept immediately above G. C is kept immediately above D. Only B is kept above F. Only two boxes are kept above E. C is not kept at the third position from the bottom. How many boxes are kept above C?

**A) 3 B) 4 C) 2 D) 5**

Date: 21/06/2025 Time: 12:45 PM - 2:15 PM Right: 63.78% Wrong: 25.85%

**Q20)** Seven boxes, A, B, C, D, E, F and G, are kept one over the other but not necessarily in the same order. C is kept immediately above F. G is kept immediately above B. Only E is kept above D. Only two boxes are kept above C. G is not kept in third position from the bottom. How many boxes are kept above G?

**A) 4 B) 5 C) 3 D) 2**

Date: 06/06/2025 Time: 4:30 PM - 6:00 PM Right: 63.81% Wrong: 25.50%

**Q21)** Seven boxes, A, B, C, D, E, F and G, are kept one over the other, but not necessarily in the same order. Only three boxes are kept above G. Only one box is kept between A and G. Only three boxes are kept between A and F. F is kept at some place above G. B is kept immediately below F. D is kept at one of the places above E. C is not kept immediately above or below A. How many boxes are kept above D?

**A) 2 B) 3 C) 1 D) 4**

Date: 18/06/2025 Time: 9:00 AM - 10:30 AM Right: 63.83% Wrong: 13.80%

**Q22)** A, B, C, D, E and F live on six different floors of the same building. The lowermost floor in the building is numbered 1, the floor above it, number 2 and so on till the topmost floor is numbered 6. A lives on a floor which is a prime number. The product of floors on which A and E live is 3. Only 2 people live above B. F lives immediately below C. How many people live between D and F?

**A) Three B) Four C) One D) Two**

Date: 05/06/2025 Time: 9:00 AM - 10:30 AM Right: 64.33% Wrong: 17.24%

**Q23)** Seven boxes, D, E, F, G, S, T and U, are kept one over the other but not necessarily in the same order. Only two boxes are kept between T and E. Only S is kept above G. No box is kept below E. D is kept at some place below F but at some place above U. Which box is kept third above U?

**A) G B) D C) T D) F**

Date: 11/06/2025 Time: 12:45 PM - 2:15 PM Right: 64.34% Wrong: 18.54%

**Q24)** Each of C, D, E, F, S, T and U has an exam on a different day of a week starting from Monday and ending on Sunday of the same week. F has the exam on Friday. Only two people have their exams between T and F. Only four people have their exams between E and T. S has the exam immediately after U. D does not have the exam on Monday. How many people have their exams before D and after C?

**A) Four B) One C) Two D) Three**

Date: 05/06/2025 Time: 4:30 PM - 6:00 PM Right: 64.51% Wrong: 9.08%

**Q25)** Seven boxes, A, B, C, D, E, F and G, are kept one above the other but not necessarily in the same order. Only C is kept above B. Only two boxes are kept between B and F. Only E is kept below A. G is not kept immediately above F. How many boxes are kept above G?

**A) 4 B) 2 C) 1 D) 3**

Date: 16/06/2025 Time: 4:30 PM - 6:00 PM Right: 64.54% Wrong: 23.50%

**Q26)** Each of B, C, D, E, F, G and H has an exam on a different day of a week starting from Monday and ending on Sunday of the same week. Only two people have exams after B. Only two people have exams between B and C. F has an exam immediately before E and H has an exam immediately after G. H has an exam on some days before F. On which day D has an exam?

**A) Thursday B) Monday C) Sunday D) Tuesday**

Date: 11/06/2025 Time: 4:30 PM - 6:00 PM Right: 64.77% Wrong: 11.22%

**Q27)** Seven boxes, A, B, C, D, E, F and G, are kept one over the other but not necessarily in the same order. Only two boxes are kept between G and B. Only A is kept above F. No box is kept below B. E is kept in some place below C, but in some place above D. How many boxes are kept above E?

**A) 1 B) 2 C) 3 D) 4**

Date: 13/06/2025 Time: 12:45 PM - 2:15 PM Right: 64.96% Wrong: 21.62%

**Q28)** Each of P, Q, R, S, T, U and V has an exam on a different day of a week starting from Monday and ending on Sunday of the same week. T has the exam immediately after P. R has the exam before S but after V. Q has the exam on Sunday. Only four people have exams between P and U. How many people have exams between V and P?

**A) One B) Two C) Four D) Three**

Date: 23/06/2025 Time: 12:45 PM - 2:15 PM Right: 65.04% Wrong: 16.20%

**Q29)** Each of P, Q, R, S, T, U and V has an exam on a different day of a week starting from Monday and ending on Sunday of the same week.

Only five people have exams between Q and T. U has the exam on Thursday. S has the exam immediately before V. R has the exam immediately before Q.

How many people have exams between V and P?

**A) One B) Three C) Four D) Two**

Date: 21/06/2025 Time: 12:45 PM - 2:15 PM Right: 65.12% Wrong: 16.96%

**Q30)** Each of P, Q, R, S, T, U and V has an exam on a different day of a week starting from Monday and ending on Sunday of the same week. R has the exam on Tuesday. Only two people have exams between U and R. Q has the exam immediately before V but not on Wednesday. S has the exam immediately before T.

How many people have exams between Q and P ?

**A) Three B) Four C) Two D) One**

Date: 16/06/2025 Time: 4:30 PM - 6:00 PM Right: 65.29% Wrong: 12.02%

**Q31)** Each of P, Q, R, S, T, U and V has an exam on a different day of a week starting from Monday and ending on Sunday of the same week. U has an exam on Saturday. Only 4 people have an exam between S and T, neither of whom has an exam on Monday. P has an exam immediately after R, and V has an exam immediately before R. T has an exam after P. How many people have an exam after S?

**A) 5 B) 2 C) 3 D) 4**

Date: 17/06/2025 Time: 9:00 AM - 10:30 AM Right: 65.34% Wrong: 7.46%

**Q32)** F, G, H, J, K and L live on six different floors of the same building. The lowermost floor in the building is numbered 1, the floor above it, number 2 and so on till the topmost floor is numbered 6. J lives immediately above L. Only two people live between F and L. F lives on an odd numbered floor. H lives immediately below K. How many people live between G and K?

**A) Four B) Two C) One D) Three**

Date: 21/06/2025 Time: 4:30 PM - 6:00 PM Right: 65.79% Wrong: 16.03%

**Q33)** Each of C, D, E, F, S, T and U has an exam on a different day of a week starting from Monday and ending on Sunday of the same week. No one has an exam before D. Only three people have their exams between D and T. Only one person has the exam between T and S. C has the exam on Wednesday. E has the exam on one of the days after F but on one of the days before U. On which day of the week does E have the exam?

**A) Monday B) Thursday C) Saturday D) Tuesday**

Date: 12/06/2025 Time: 9:00 AM - 10:30 AM Right: 65.85% Wrong: 12.30%

**Q34)** P, Q, R, S, T, U and V have an exam on different days of the week starting on Monday and ending on Sunday. Q has an exam on Wednesday. Exactly 4 people have an exam between T and U, neither of whom has an exam on Monday. R has an exam immediately before S and V has an exam immediately after S. P has an exam immediately before T. How many people have an exam between P and R?

**A) 2 B) 4 C) 1 D) 3**

Date: 16/06/2025 Time: 12:45 PM - 2:15 PM Right: 65.89% Wrong: 10.62%

**Q35)** A, B, C, D, E and F live on six different floors of the same building. The lowermost floor in the building is numbered 1, the floor above it, number 2 and so on till the topmost floor is numbered 6. The product of floors on which F and D live is 15. E lives immediately above C. The sum of floors on which A and D live is 7.

What is the sum of floors on which A and E live?

**A) 6 B) 5 C) 8 D) 7**

Date: 09/06/2025 Time: 9:00 AM - 10:30 AM Right: 65.90% Wrong: 15.64%

**Q36)** Each of P, Q, R, S, T, U and V has an exam on a different day of a week starting from Monday and ending on Sunday of the same week. V has an exam on Tuesday. Exactly 2 people have an exam between V and P. S has an exam immediately before T, and Q has an exam immediately after R. Only 1 person has an exam between T and R. How many people have an exam before S?

**A) 1 B) 3 C) 4 D) 2**

Date: 16/06/2025 Time: 12:45 PM - 2:15 PM Right: 66.38% Wrong: 10.40%

**Q37)** Each of P, Q, R, S, T, U and V has an exam on a different day of a week starting from Monday and ending on Sunday of the same week. P has an exam on Friday. Only 2 people have an exam between P and S. U has an exam immediately before V, and Q has an exam immediately after T. Only 2 people have an exam between R and V. How many people have an exam before V?

**A) 4 B) 1 C) 2 D) 3**

Date: 11/06/2025 Time: 9:00 AM - 10:30 AM Right: 66.58% Wrong: 8.53%

**Q38)** Each of P, Q, R, S, T, U and V has an exam on a different day of a week starting from Monday and ending on Sunday of the same week. U has an exam on Tuesday. Only two people have exams between P and U. V has an exam immediately before R but not on Saturday. T has an exam after P but before Q. How many people have exams between S and Q?

**A) Three B) Four C) Two D) Five**

Date: 14/06/2025 Time: 12:45 PM - 2:15 PM Right: 66.84% Wrong: 10.62%

**Q39)** Each of P, Q, R, S, T, U and V has an exam on a different day of a week starting from Monday and ending on Sunday of the same week. P has the exam on Thursday. U has the exam on one of the days after R and on one of the days before T. V has the exam on one of the days after S but on one of the days before Q. S has the exam on one of the days after P. How many people have the exam before V?

**A) 5 B) 2 C) 3 D) 4**

Date: 05/06/2025 Time: 12:45 PM - 2:15 PM Right: 66.97% Wrong: 9.72%

**Q40)** Seven boxes, G, H, I, J, O, P and Q, are kept one over the other but not necessarily in the same order. Only two boxes are kept between I and P. Only O is kept above Q. No box is kept below P. J is kept at some place below H but at some place above G. Which box is kept third above G?

**A) Q B) H C) J D) O**

Date: 24/06/2025 Time: 9:00 AM - 10:30 AM Right: 67.42% Wrong: 17.02%

**Q41)** E, X, P, A, N, and D live on six different floors of the same building. Only one person lives above D. Only A lives below P. E lives on an even numbered floor. X lives on a floor above D. How many people live below N?

**A) Two B) Three C) Zero D) One**

Date: 10/06/2025 Time: 9:00 AM - 10:30 AM Right: 67.56% Wrong: 24.44%

**Q42)** Each of P, Q, R, S, T, U and V has an exam on a different day of a week starting from Monday and ending on Sunday of the same week. Only five people have exams between T and Q. U has an exam on Thursday. S has an exam immediately after Q. R has an exam immediately after P. How many people have exams between V and T?

**A) Two B) Four C) Five D) Three**

Date: 16/06/2025 Time: 12:45 PM - 2:15 PM Right: 67.57% Wrong: 9.55%

**Q43)** Each of P, Q, R, S, T, U and V has an exam on a different day of a week starting from Monday and ending on Sunday of the same week. U has an exam on Wednesday. Exactly 4 people have an exam between Q and V, neither of whom has an exam on Monday. P has an exam immediately before S, and R has an exam immediately after S. T has an exam immediately before Q. How many people have an exam before Q?

**A) 1 B) 2 C) 3 D) 4**

Date: 14/06/2025 Time: 12:45 PM - 2:15 PM Right: 68.12% Wrong: 7.67%

**Q44)** Seven boxes, A, B, C, D, E, F and G, are kept one above the other but not necessarily in the same order. Only two boxes are kept between B and G. Only C is kept above E. No box is kept below G. D is kept at some place below F but at some place above A. How many boxes are kept below F?

**A) 3 B) 4 C) 2 D) 5**

Date: 11/06/2025 Time: 4:30 PM - 6:00 PM Right: 68.62% Wrong: 18.62%

**Q45)** F, G, H, J, K and L live on six different floors of the same building. The lowermost floor in the building is numbered 1, the floor above it, number 2 and so on till the topmost floor is numbered 6. Only three people live between K and G, where K lives below G. H lives on an odd numbered floor and immediately above K. J lives on one of the floors below F and on one of the floors above L. Who lives on floor numbered 4?

**A) F B) H C) L D) J**

Date: 23/06/2025 Time: 9:00 AM - 10:30 AM Right: 68.81% Wrong: 11.66%

**Q46)** A, B, C, D, E and F live on six different floors of the same building. The lowermost floor in the building is numbered 1, the floor above it, number 2 and so on till the topmost floor is numbered 6. The product of floors on which F and E live is 15. C lives immediately above B. The sum of floors on which D and E live is 7. How many people live between B and D?

**A) 3 B) 2 C) 1 D) 4**

Date: 05/06/2025 Time: 4:30 PM - 6:00 PM Right: 68.82% Wrong: 13.09%

**Q47)** Each of C, D, E, F, S, T and U has an exam on a different day of a week starting from Monday and ending on Sunday of the same week. S has the exam on Thursday and T has the exam on Saturday. F has the exam immediately before U. C has the exam on one of the days after E. D has the exam immediately after U. Who has the exam on the last day of the week?

**A) E B) D C) C D) T**

Date: 11/06/2025 Time: 9:00 AM - 10:30 AM Right: 68.92% Wrong: 11.56%

**Q48)** Each of C, D, E, F, S, T and U has an exam on a different day of a week starting from Monday and ending on Sunday of the same week. Only two people have the exam before T. Only one person has the exam after D. Only three people have the exam between T and F. Only one person has the exam between E and C. U has the exam immediately before E. Who among the following has the exam on Friday?

**A) E B) U C) T D) S**

Date: 05/06/2025 Time: 12:45 PM - 2:15 PM Right: 69.05% Wrong: 10.05%

**Q49)** Each of P, Q, R, S, T, U and V has an exam on a different day of a week starting from Monday and ending on Sunday of the same week. V has the exam on Wednesday. Only one person has the exam after T. P has the exam immediately after R, but not on Tuesday. S has the exam immediately before U.

How many people have exams between P and Q?

**A) Two B) Three C) One D) Four**

Date: 19/06/2025 Time: 4:30 PM - 6:00 PM Right: 69.18% Wrong: 12.89%

**Q50)** Seven boxes, D, E, F, G, S, T and U, are kept one over the other but not necessarily in the same order. U is kept immediately above T. S is kept immediately above D. Only E is kept above G. Only two boxes are kept above U. S is not kept at third position from the bottom. How many boxes are kept between F and E?

**A) Three B) Two C) One D) Four**

Date: 21/06/2025 Time: 4:30 PM - 6:00 PM Right: 69.23% Wrong: 16.44%

**Q51)** Seven boxes D, E, F, G, I, J and K are kept one over the other but not necessarily in the same order. Only three boxes are kept above G. Only one box is kept between J and G. Only three boxes are kept between J and K. K is kept at some place above G. E is kept immediately below K. F is kept at one of the places above D. I is not kept immediately above or below J. Which box is kept at the lowermost position?

**A) K B) D C) G D) F**

Date: 24/06/2025 Time: 4:30 PM - 6:00 PM Right: 69.30% Wrong: 8.51%

**Q52)** Each of P, Q, R, S, T, U and V has an exam on a different day of a week starting from Monday and ending on Sunday of the same week.

No one has the exam before V. Only four people have exams between P and R. Q has the exam immediately before R. T has the exam before U but after S.

How many people have exams between S and R?

**A) Three B) Four C) One D) Two**

Date: 18/06/2025 Time: 4:30 PM - 6:00 PM Right: 69.38% Wrong: 10.53%

**Q53)** M, N, O, P, Y and Z live on six different floors of the same building. The lowermost floor in the building is numbered 1, the floor above it, number 2 and so on till the topmost floor is numbered 6. O lives on an even numbered floor but not on floor number 4. Only two people live between O and Z. Y lives on an odd numbered floor but not on the lowermost floor. Only two people live between Y and M. P lives immediately below Y. How many people live between N and P?

**A) Three B) Two C) One D) Four**

Date: 10/06/2025 Time: 9:00 AM - 10:30 AM Right: 69.41% Wrong: 5.69%

**Q54)** Seven boxes, C, D, E, F, G, H and X, are kept one over the other but not necessarily in the same order. Only two boxes are kept between C and H. Only F is kept above G. Only one box is kept between G and C. E is kept at some place below X but at some place above D. How many boxes are kept between X and D?

**A) Three B) Two C) Four D) One**

Date: 23/06/2025 Time: 4:30 PM - 6:00 PM Right: 69.52% Wrong: 14.79%

**Q55)** A, B, C, D, E and F live on six different floors of the same building. The lowermost floor in the building is numbered 1, the floor above it, number 2 and so on till the topmost floor is numbered 6. F lives on an even numbered floor but not 6. The sum of floors on which D and F live is 7. B lives immediately above A. The sum of floors on which F and C live is 3.

How many people live between B and F?

**A) Two B) Four C) Three D) One**

Date: 06/06/2025 Time: 9:00 AM - 10:30 AM Right: 69.53% Wrong: 9.94%

**Q56)** Each of J, K, L, M, N, O and P has an exam on a different day of a week starting from Monday and ending on Sunday of the same week. Only two people have exams before P. Only one person has an exam after L. Only three people have exams between P and J. Only one person has an exam between K and L. O has an exam immediately after M. How many people have exams between M and N?

**A) Four B) Two C) One D) Three**

Date: 10/06/2025 Time: 12:45 PM - 2:15 PM Right: 70.13% Wrong: 7.29%

**Q57)** Each of P, Q, R, S, T, U and V has an exam on a different day of a week starting from Monday and ending on Sunday of the same week. P has an exam on Wednesday. Exactly 3 people have an exam between P and S. V has an exam immediately after T, and Q has an exam immediately before T. Only 3 people have an exam between U and T. How many people have an exam after Q?

**A) 3 B) 4 C) 1 D) 2**

Date: 20/06/2025 Time: 9:00 AM - 10:30 AM Right: 70.26% Wrong: 8.08%

**Q58)** M, N, O, P, Y and Z live on six different floors of the same building. The lowermost floor in the building is numbered 1, the floor above it, number 2 and so on till the topmost floor is numbered 6. Only three people live between Y and Z, where Y lives below Z. P lives on an odd numbered floor and immediately above Y. O lives on one of the floors below M and on one of the floors above N. Who lives on floor numbered 4?

**A) M B) Z C) P D) O**

Date: 12/06/2025 Time: 12:45 PM - 2:15 PM Right: 70.50% Wrong: 9.43%

**Q59)** Each of P, Q, R, S, T, U and V has an exam on a different day of a week starting from Monday and ending on Sunday of the same week. Q has the exam on Monday. P has the exam before R. Only two people have exams between U and Q. V has the exam immediately before U but after S. R has the exam before T.

How many people have exams between P and S?

**A) Two B) Three C) Five D) Four**

Date: 19/06/2025 Time: 9:00 AM - 10:30 AM Right: 70.60% Wrong: 10.13%

**Q60)** A, B, C, D, E and F live on six different floors of the same building. The lowermost floor in the building is numbered 1, the floor above it, number 2 and so on till the topmost floor is numbered 6. E lives on a floor which is a prime number. The product of floors on which E and A live is 8. C lives immediately above F. The sum of floors on which A and B live is 7. How many people live between C and E?

**A) One B) Three C) Two D) Four**

Date: 09/06/2025 Time: 4:30 PM - 6:00 PM Right: 70.75% Wrong: 11.83%

**Q61)** Seven boxes, A, B, C, D, E, F and G, are kept one above the other but not necessarily in the same order. Only B is kept above G. Only C is kept between G and E. Only A is kept below D. How many boxes are kept below E?

**A) 3 B) 2 C) 4 D) 1**

Date: 10/06/2025 Time: 4:30 PM - 6:00 PM Right: 70.75% Wrong: 23.03%

**Q62)** P, Q, R, S, T, U and V have an exam on different days of the week, starting on Monday and ending on Sunday. S has an exam on Tuesday. Exactly 3 people have an exam between S and V. T has an exam immediately before P and U has an exam immediately after P. Only 1 person has an exam between T and R. Who has an exam on Monday?

**A) T B) R C) Q D) P**

Date: 13/06/2025 Time: 4:30 PM - 6:00 PM Right: 70.98% Wrong: 10.17%

**Q63)** Each of P, Q, R, S, T, U and V has an exam on a different day of a week starting from Monday and ending on Sunday of the same week.

P has the exam on Tuesday. Only two people have exams after R. S has the exam immediately before Q but after R. U has the exam immediately after V.

How many people have exams between T and S?

**A) One B) Three C) Four D) Two**

Date: 20/06/2025 Time: 4:30 PM - 6:00 PM Right: 71.50% Wrong: 13.21%

**Q64)** A, B, C, D, E and F live on six different floors of the same building. The lowermost floor in the building is numbered 1, the floor above it, number 2 and so on till the topmost floor is numbered 6. The product of floors on which E and F live is 10. A lives immediately above C. The sum of floors on which B and E live is 11.

What is the sum of floors on which C and D live?

**A) 6 B) 4 C) 5 D) 7**

Date: 09/06/2025 Time: 12:45 PM - 2:15 PM Right: 72.48% Wrong: 8.88%

**Q65)** Each of P, Q, R, S, T, U and V has an exam on a different day of a week starting from Monday and ending on Sunday of the same week. Q has an exam on Tuesday. Exactly 2 people have exams between Q and R. P has an exam immediately before T, and S has an exam immediately after V. Only 1 person has an exam between T and V. Who has an exam on Monday?

**A) S B) U C) V D) T**

Date: 20/06/2025 Time: 4:30 PM - 6:00 PM Right: 72.60% Wrong: 10.17%

**Q66)** A, B, C, D, E and F live on six different floors of the same building. The lowermost floor in the building is numbered 1, the floor above it, number 2 and so on, till the topmost floor is numbered 6. D lives on an odd numbered floor but not 5. The sum of floors on which D and A live is 5. Only 3 people live between A and F. B lives immediately above E. How many people live above B?

**A) 3 B) 4 C) 2 D) 1**

Date: 20/06/2025 Time: 12:45 PM - 2:15 PM Right: 72.86% Wrong: 12.34%

**Q67)** Seven boxes, A, B, C, D, E, F and Y, are kept one over the other but not necessarily in the same order. Only D is kept above F. Only three boxes are kept between D and A. Only B is kept below E. Y is not kept immediately above A. How many boxes are kept between C and B?

**A) Four B) Three C) Two D) One**

Date: 21/06/2025 Time: 9:00 AM - 10:30 AM Right: 72.86% Wrong: 16.58%

**Q68)** A, B, C, D, E and W live on six different floors of the same building. The lowermost floor in the building is numbered 1, the floor above it, number 2 and so on, till the topmost floor is numbered 6. No one lives below D. Only two people live between E and W. Only two people live between C and A. Only one person lives between D and A. E lives on some floor above A. How many people live below B?

**A) Four B) Two C) One D) Three**

Date: 13/06/2025 Time: 12:45 PM - 2:15 PM Right: 73.19% Wrong: 10.56%

**Q69)** A, B, C, D, E and F live on six different floors of the same building. The lowermost floor in the building is numbered 1, the floor above it, number 2 and so on, till the topmost floor is numbered 6. C lives on a floor that is a prime number. The product of floors on which C and B live is 8. E lives immediately above F. The sum of floors on which B and D live is 7. How many people live between A and D?

**A) 1 B) 4 C) 3 D) 2**

Date: 11/06/2025 Time: 4:30 PM - 6:00 PM Right: 73.68% Wrong: 7.86%

**Q70)** Seven boxes, A, B, C, D, E, F and G, are kept one over the other but not necessarily in the same order. Only four boxes are kept between D and F. Only A is kept above D. Only two boxes are kept between C and G. E is kept immediately above B. G is not kept immediately above E. How many boxes are kept below E?

**A) 1 B) 2 C) 4 D) 3**

Date: 06/06/2025 Time: 9:00 AM - 10:30 AM Right: 74.23% Wrong: 11.23%

**Q71)** Seven boxes, G, H, I, J, O, P and Q, are kept one over the other but not necessarily in the same order. Only two boxes are kept below Q. Only one box is kept above G. Only one box is kept between G and H. I is kept immediately above J. P is kept at some place below O. How many boxes are kept between O and I?

**A) Four B) Three C) Two D) One**

Date: 23/06/2025 Time: 12:45 PM - 2:15 PM Right: 74.25% Wrong: 12.04%

**Q72)** Seven boxes, D, E, F, G, S, T and U, are kept one over the other but not necessarily in the same order. Only two boxes are kept below T. Only one box is kept above U. Only one box is kept between U and D. G is kept immediately above S. F is kept at some place below E. How many boxes are kept between E and G?

**A) Two B) One C) Three D) Four**

Date: 17/06/2025 Time: 12:45 PM - 2:15 PM Right: 74.83% Wrong: 11.78%

**Q73)** M, N, O, P, Y and Z live on six different floors of the same building. The lowermost floor in the building is numbered 1, the floor above it, number 2 and so on till the topmost floor is numbered 6. Only two people live between N and P. Only two people live between Z and O. No one lives above Z. P lives below O but above Y. How many people lives below M?

**A) Three B) Two C) One D) Four**

Date: 10/06/2025 Time: 4:30 PM - 6:00 PM Right: 74.97% Wrong: 12.81%

**Q74)** Seven boxes, A, B, C, D, E, F and G, are kept one over the other but not necessarily in the same order. No box is kept above F. Only three boxes are kept between F and B. Only one box is kept between G and D. D is kept immediately above B. Only four boxes are kept between G and C. A is kept in some place above E. How many boxes are kept below D?

**A) 1 B) 4 C) 3 D) 2**

Date: 05/06/2025 Time: 9:00 AM - 10:30 AM Right: 75.05% Wrong: 8.42%

**Q75)** Each of T, U, V, W, X, Y and Z has an exam on a different day of a week starting from Monday and ending on Sunday of the same week. X has an exam on the third day of the week. Only three people has an exam between X and T. Z has an exam immediately after V and Y has an exam immediately after Z. W does not have an exam on Monday. Who has an exam on Thursday?

**A) V B) Z C) W D) T**

Date: 05/06/2025 Time: 12:45 PM - 2:15 PM Right: 75.13% Wrong: 7.39%

**Q76)** C, O, U, N, T, and Y live on six different floors of the same building. The lowermost floor in the building is numbered 1, the floor above it, number 2 and so on, till the topmost floor is numbered 6. Only two people live above C. Only two people live between C and T. Only N lives between C and U. Y lives immediately below C. Who lives on the floor, numbered 2?

**A) T B) N C) U D) O**

Date: 11/06/2025 Time: 12:45 PM - 2:15 PM Right: 75.16% Wrong: 10.54%

**Q77)** Seven boxes, A, B, C, D, E, F and G, are kept one over the other, but not necessarily in the same order. Only four boxes are kept between C and D. Only E is kept above C. Only two boxes are kept between F and A. G is kept immediately above B. A is not kept immediately above G. How many boxes are kept above F?

**A) 4 B) 1 C) 2 D) 3**

Date: 18/06/2025 Time: 4:30 PM - 6:00 PM Right: 75.20% Wrong: 8.07%

**Q78)** Each of P, Q, R, S, T, U and V has an exam on a different day of a week starting from Monday and ending on Sunday of the same week. Only three people have exams after R. P has the exam immediately after R, but before Q. S has the exam before U but after V. T has the exam on Sunday.

How many people have exams between P and S?

**A) Two B) One C) Four D) Three**

Date: 18/06/2025 Time: 9:00 AM - 10:30 AM Right: 75.22% Wrong: 8.28%

**Q79)** Each of P, Q, R, S, T, U and V has an exam on a different day of a week, starting from Monday and ending on Sunday of the same week. T has an exam on Thursday. U has an exam immediately before T and P has an exam immediately after T. Only 3 people have exams between Q and V. R has an exam immediately after V. How many people have exams before Q?

**A) 3 B) 4 C) 2 D) 1**

Date: 21/06/2025 Time: 9:00 AM - 10:30 AM Right: 75.23% Wrong: 7.91%

**Q80)** A, B, C, D, E and F live on six different floors of the same building. The lowermost floor in the building is numbered 1, the floor above it, number 2 and so on, till the topmost floor is numbered 6. F lives on an even numbered floor but not 6. The sum of floors on which C and F live is 9. The sum of floors on which F and E live is 5. A lives immediately below B. How many people live below B?

**A) 3 B) 1 C) 2 D) 4**

Date: 21/06/2025 Time: 12:45 PM - 2:15 PM Right: 75.27% Wrong: 10.19%

**Q81)** Seven boxes D, E, F, G, I, J and K are kept one over the other but not necessarily in the same order. No box is kept above F. Only three boxes are kept between F and K. Only one box is kept between D and E. E is kept immediately above K. Only four boxes are kept between D and G. J is kept at some place above I. Which box is kept second below J?

**A) F B) G C) K D) D**

Date: 24/06/2025 Time: 12:45 PM - 2:15 PM Right: 76.50% Wrong: 5.56%

**Q82)** A, B, C, D, E and F live on six different floors of the same building. The lowermost floor in the building is numbered 1, the floor above it, number 2 and so on, till the topmost floor is numbered 6. B lives on an even numbered floor but not 6. The sum of floors on which F and B live is 7. D lives immediately above C. The sum of floors on which B and E live is 3. How many people live below D?

**A) 3 B) 2 C) 1 D) 4**

Date: 12/06/2025 Time: 9:00 AM - 10:30 AM Right: 76.52% Wrong: 8.34%

**Q83)** A, B, C, D, E and F live on six different floors of the same building. The lowermost floor in the building is numbered 1, the floor above it, number 2 and so on till the topmost floor is numbered 6. The product of floors on which D and F live is 10. C lives immediately above E. The sum of floors on which B and D live is 11. How many people live between A and E?

**A) 3 B) 1 C) 2 D) 4**

Date: 06/06/2025 Time: 12:45 PM - 2:15 PM Right: 76.73% Wrong: 10.38%

**Q84)** A, B, C, D, E and F live on six different floors of the same building. The lowermost floor in the building is numbered 1, the floor above it, number 2 and so on, till the topmost floor is numbered 6. E lives on an even numbered floor but not 4. The sum of floors on which E and F live is 9. Only 3 people live between C and A. The sum of floors on which B and A live is 3. How many people live above B?

**A) 1 B) 3 C) 4 D) 2**

Date: 17/06/2025 Time: 12:45 PM - 2:15 PM Right: 76.80% Wrong: 6.43%

**Q85)** Each of P, Q, R, S, T, U and V has an exam on a different day of a week starting from Monday and ending on Sunday of the same week. P has an exam on Thursday. T has an exam immediately before P, and V has an exam immediately after P. Only 3 people have an exam between U and Q. R has an exam immediately after Q. How many people have an exam between Q and S?

**A) 3 B) 1 C) 2 D) 4**

Date: 14/06/2025 Time: 9:00 AM - 10:30 AM Right: 76.82% Wrong: 9.42%

**Q86)** A, B, C, D, E and F live on six different floors of the same building. The lowermost floor in the building is numbered 1, the floor above it, number 2 and so on, till the topmost floor is numbered 6. A lives on an odd numbered floor but not 3. The sum of floors on which C and A live is 4. Only 3 people live between E and F. B lives immediately above D. The sum of floors on which D and E live is 10. How many people live below F?

**A) 3 B) 1 C) 4 D) 2**

Date: 13/06/2025 Time: 9:00 AM - 10:30 AM Right: 76.89% Wrong: 5.98%

**Q87)** Seven boxes, D, E, F, G, S, T and U, are kept one over the other but not necessarily in the same order. No box is kept above F. Only three boxes are kept between F and S. Only one box is kept between D and E. E is kept immediately above S. Only four boxes are kept between D and G. T is kept at some place above U. Which box is kept second below T?

**A) F B) G C) D D) S**

Date: 17/06/2025 Time: 4:30 PM - 6:00 PM Right: 77.01% Wrong: 5.13%

**Q88)** Each of P, Q, R, S, T, U and V has an exam on a different day of a week starting from Monday and ending on Sunday of the same week. R has an exam on Thursday. No one has an exam before V. U has an exam immediately before R, but after S. Q has an exam before T but after P. How many people have exams between S and T?

**A) Three B) Four C) Two D) One**

Date: 14/06/2025 Time: 9:00 AM - 10:30 AM Right: 77.13% Wrong: 10.31%

**Q89)** Seven boxes, A, B, C, D, E, F and G, are kept one over the other but not necessarily in the same order. Only A is kept above C. Only F is kept between C and E. Only B is kept below G. How many boxes are kept above E?

**A) 4 B) 3 C) 1 D) 2**

Date: 13/06/2025 Time: 4:30 PM - 6:00 PM Right: 78.00% Wrong: 14.96%

**Q90)** M, N, O, P, Y and Z live on six different floors of the same building. The lowermost floor in the building is numbered 1, the floor above it, number 2 and so on till the topmost floor is numbered 6. Only M lives above N. Z lives immediately below N. Only P lives below O. Who lives on floor numbered 3?

**A) Z B) Y C) M D) O**

Date: 09/06/2025 Time: 9:00 AM - 10:30 AM Right: 78.12% Wrong: 12.52%

**Q91)** A, B, C, D, E and F live on six different floors of the same building. The lowermost floor in the building is numbered 1, the floor above it, number 2 and so on, till the topmost floor is numbered 6. B lives on a floor that is a prime number. The product of floors on which B and D live is 3. Only 2 people live above C. F lives immediately below A. How many people live between A and C?

**A) 2 B) 1 C) 3 D) 4**

Date: 12/06/2025 Time: 12:45 PM - 2:15 PM Right: 78.23% Wrong: 6.40%

**Q92)** F, G, H, K, L, and M live on six different floors of the same building. The lowermost floor in the building is numbered 1, the floor above it is numbered 2, and so on till the topmost floor, which is numbered 6. K lives on the topmost floor. Only three people live between K and G. F lives on a floor below G. L lives on an even numbered floor. H lives on an odd numbered floor but not on floor number 5.

How many people live between M and G?

**A) Two B) Three C) Four D) One**

Date: 24/06/2025 Time: 9:00 AM - 10:30 AM Right: 78.31% Wrong: 4.87%

**Q93)** A, B, C, D, E and F live on six different floors of the same building. The lowermost floor in the building is numbered 1, the floor above it, number 2 and so on, till the topmost floor is numbered 6. B lives on an odd numbered floor but not 3. The sum of floors on which B and D live is 7. E lives immediately below F. C lives on the top floor. How many people live above E?

**A) 2 B) 4 C) 3 D) 1**

Date: 19/06/2025 Time: 4:30 PM - 6:00 PM Right: 78.61% Wrong: 9.65%

**Q94)** M, N, O, P, Y and Z live on six different floors of the same building. The lowermost floor in the building is numbered 1, the floor above it, number 2 and so on till the topmost floor is numbered 6. Only two people live between N and Z. Only M lives above P. Y lives on an even numbered floor. N lives on the lowermost floor. How many people live between O and M?

**A) Three B) Four C) One D) Two**

Date: 09/06/2025 Time: 4:30 PM - 6:00 PM Right: 78.95% Wrong: 9.90%

**Q95)** G, H, I, J, K and X live on six different floors of the same building. The lowermost floor in the building is numbered 1, the floor above it, number 2 and so on, till the topmost floor is numbered 6. K lives on an odd numbered floor but not on the lowermost floor. Only two people live between K and G. Only two people live between I and H. X lives immediately below K. No one lives above I. How many people live between J and X?

**A) Two B) Three C) Four D) One**

Date: 13/06/2025 Time: 9:00 AM - 10:30 AM Right: 79.23% Wrong: 5.08%

**Q96)** M, N, O, P, Y and Z live on six different floors of the same building. The lowermost floor in the building is numbered 1, the floor above it, number 2 and so on till the topmost floor is numbered 6. O lives on floor numbered 4. Only two people live between O and P. Only M lives between O and N. Y lives immediately below O. Who lives on floor numbered 2?

**A) N B) Z C) M D) Y**

Date: 06/06/2025 Time: 12:45 PM - 2:15 PM Right: 79.63% Wrong: 9.35%

**Q97)** M, N, O, S, T and U live on six different floors of the same building. The lowermost floor in the building is numbered 1, the floor above it, number 2 and so on till the topmost floor is numbered 6. T lives on the topmost floor. Only three people live between T and N. O lives on a floor below N. S lives on an even numbered floor. U lives on an odd numbered floor but not on floor number 5. How many people live between M and N?

**A) Two B) Four C) Three D) One**

Date: 12/06/2025 Time: 9:00 AM - 10:30 AM Right: 79.63% Wrong: 5.94%

**Q98)** Seven boxes, G, H, I, J, O, P and Q, are kept one over the other but not necessarily in the same order. Only G is kept above J. Only Q is kept between J and H. Only I is kept below P. How many boxes are kept between O and I?

**A) Four B) Two C) One D) Three**

Date: 24/06/2025 Time: 12:45 PM - 2:15 PM Right: 79.74% Wrong: 9.20%

**Q99)** H, O, L, D, E, and R live on six different floors of the same building. The lowermost floor in the building is numbered 1, the floor above it, number 2 and so on, till the topmost floor is numbered 6. No one lives above L. Only three people live between L and R. H lives on a floor below R. E lives on an even numbered floor. O lives on an odd numbered floor but not on floor number 5. How many people live between D and R?

**A) Zero B) Two C) Three D) One**

Date: 12/06/2025 Time: 4:30 PM - 6:00 PM Right: 79.97% Wrong: 8.72%

**Q100)** N, I, G, H, T and S live on six different floors of the same building. The lowermost floor in the building is numbered 1, the floor above it, number 2 and so on till the topmost floor is numbered 6. Only H lives below G. Only I lives above S. T lives immediately below S. Who lives on floor numbered 3?

**A) T B) N C) H D) S**

Date: 19/06/2025 Time: 4:30 PM - 6:00 PM Right: 80.31% Wrong: 10.77%

**Q101)** F, G, H, K, L, and M live on six different floors of the same building. The lowermost floor in the building is numbered 1, the floor above it is numbered 2, and so on till the topmost floor, which is numbered 6. L lives on floor number 5. H lives on a floor above L. Only K lives below M. F lives on an even numbered floor. How many people live below G?

**A) Two B) Three C) Four D) One**

Date: 23/06/2025 Time: 4:30 PM - 6:00 PM Right: 80.73% Wrong: 6.36%

**Q102)** Seven boxes D, E, F, G, S, T and U are kept one over the other but not necessarily in the same order. Only four boxes are kept between E and D. Only F is kept above E. Only two boxes are kept between T and U. G is kept immediately above S. U is not kept immediately above G. Which box is kept fourth from the top?

**A) F B) G C) D D) T**

Date: 20/06/2025 Time: 12:45 PM - 2:15 PM Right: 80.81% Wrong: 5.34%

**Q103)** Seven boxes D, E, F, G, I, J and K are kept one over the other but not necessarily in the same order. Only four boxes are kept between E and D. Only F is kept above E. Only two boxes are kept between J and K. G is kept immediately above I. K is not kept immediately above G. Which box is kept fourth from the top?

**A) F B) D C) G D) K**

Date: 24/06/2025 Time: 9:00 AM - 10:30 AM Right: 81.04% Wrong: 4.61%

**Q104)** Seven boxes, A, B, C, D, E, F and G, are kept one over the other, but not necessarily in the same order. No box is kept above F. Only three boxes are kept between F and B. Only one box is kept between A and E. E is kept immediately above B. Only four boxes are kept between A and C. G is kept at some place above D. How many boxes are kept above B?

**A) 2 B) 4 C) 3 D) 1**

Date: 19/06/2025 Time: 9:00 AM - 10:30 AM Right: 81.20% Wrong: 4.99%

**Q105)** P, Q, R, S, T, U and V have an exam on different days of the week starting on Monday and ending on Sunday. R has an exam on Wednesday. Exactly three people have an exam between R and Q. V has an exam immediately after S and T has an exam immediately before S. Only three people have an exam between P and S. Who has an exam on Sunday?

**A) S B) Q C) P D) T**

Date: 14/06/2025 Time: 9:00 AM - 10:30 AM Right: 81.51% Wrong: 4.73%

**Q106)** Seven boxes, A, B, C, D, E, F and G, are kept one above the other but not necessarily in the same order. Only two boxes are kept below C. Only one box is kept above A. Only one box is kept between A and E. B is kept immediately above F. D is kept at some place below G. How many boxes are kept above B?

**A) 4 B) 5 C) 3 D) 2**

Date: 13/06/2025 Time: 9:00 AM - 10:30 AM Right: 81.81% Wrong: 6.54%

**Q107)** Seven boxes, A, B, C, D, E, F and G, are kept one above the other but not necessarily in the same order. D is kept second from the bottom. Only three boxes are kept between D and E. F is kept in one of the positions below D. Only A is kept between E and G. B is kept in one of the positions above E. How many boxes are kept between A and B?

**A) 2 B) 1 C) 3 D) 4**

Date: 18/06/2025 Time: 12:45 PM - 2:15 PM Right: 84.59% Wrong: 5.74%

**Q108)** Seven boxes, A, B, C, D, E, F and G are kept one over the other but not necessarily in the same order. Only two boxes are kept below D. Only one box is kept above A. Only one box is kept between A and E. G is kept immediately above B. C is kept in some place below F. How many boxes are kept above G?

**A) 2 B) 5 C) 4 D) 3**

Date: 12/06/2025 Time: 4:30 PM - 6:00 PM Right: 84.74% Wrong: 6.76%

### Answer Key (Q1 to Q108) Puzzle Test

Q1: 3	Q2: 3	Q3: 1	Q4: 2	Q5: 1
Q6: 4	Q7: 4	Q8: 2	Q9: 3	Q10: 3
Q11: 2	Q12: 1	Q13: 3	Q14: 4	Q15: 3
Q16: 2	Q17: 4	Q18: 1	Q19: 4	Q20: 2
Q21: 4	Q22: 4	Q23: 4	Q24: 1	Q25: 2
Q26: 2	Q27: 4	Q28: 1	Q29: 1	Q30: 2
Q31: 1	Q32: 2	Q33: 2	Q34: 1	Q35: 1
Q36: 4	Q37: 4	Q38: 4	Q39: 1	Q40: 2
Q41: 1	Q42: 4	Q43: 1	Q44: 2	Q45: 4
Q46: 2	Q47: 3	Q48: 4	Q49: 3	Q50: 1
Q51: 2	Q52: 1	Q53: 2	Q54: 2	Q55: 4
Q56: 4	Q57: 1	Q58: 4	Q59: 1	Q60: 2

Q61: 1	Q62: 2	Q63: 3	Q64: 2	Q65: 2
Q66: 4	Q67: 3	Q68: 4	Q69: 1	Q70: 4
Q71: 1	Q72: 4	Q73: 1	Q74: 3	Q75: 1
Q76: 4	Q77: 3	Q78: 1	Q79: 4	Q80: 3
Q81: 3	Q82: 1	Q83: 2	Q84: 3	Q85: 4
Q86: 2	Q87: 4	Q88: 2	Q89: 2	Q90: 2
Q91: 2	Q92: 1	Q93: 3	Q94: 4	Q95: 1
Q96: 2	Q97: 1	Q98: 3	Q99: 2	Q100: 2
Q101: 1	Q102: 2	Q103: 3	Q104: 2	Q105: 2
Q106: 2	Q107: 2	Q108: 2		

## Number puzzle

**Q1)** This question is based on the five, three-digit numbers given below.

(Left) 190 735 494 761 781 (Right)

(Example- 697 – First digit = 6, second digit = 9 and third digit = 7)

(NOTE: All operations to be done from left to right.)

What will be the resultant if the second digit of the highest number is subtracted from the second digit of the lowest number?

**A) -1 B) 2 C) -2 D) 1**

Date: 20/06/2025 Time: 9:00 AM - 10:30 AM Right: 47.22% Wrong: 45.50%

**Q2)** This question is based on the five, three-digit numbers given below.

(Left) 401 418 733 283 902 (Right)

(Example: 697 – First digit = 6, second digit = 9 and third digit = 7)

(NOTE: All operations to be done from left to right.)

What will be the resultant if the second digit of the highest number is added to the third digit of the lowest number?

**A) 3 B) 6 C) 4 D) 2**

Date: 05/06/2025 Time: 9:00 AM - 10:30 AM Right: 73.86% Wrong: 18.35%

Q3) This question is based on the five, three-digit numbers given below.

(Left) 514 414 422 875 167 (Right)

(Example: 697 – First digit = 6, second digit = 9 and third digit = 7)

(Note: All operations to be done from left to right.)

What will be the resultant if the second digit of the highest number is subtracted from the second digit of the lowest number?

A) 2 B) 1 C) -1 D) -2

Date: 24/06/2025 Time: 4:30 PM - 6:00 PM Right: 76.01% Wrong: 17.39%

Q4) This question is based on the five, three-digit numbers given below.

(Left) 983 986 481 941 167 (Right)

(Example- 697 – First digit = 6, second digit = 9 and third digit = 7)

(NOTE: All operations to be done from left to right.)

What will be the resultant if the third digit of the highest number is subtracted from the first digit of the lowest number?

A) -4 B) -2 C) -5 D) -3

Date: 20/06/2025 Time: 12:45 PM - 2:15 PM Right: 78.08% Wrong: 16.17%

Q5) This question is based on the five, three-digit numbers given below.

(Left) 983 986 481 941 167 (Right)

(Example- 697 – First digit = 6, second digit = 9 and third digit = 7)

(NOTE: All operations to be done from left to right.)

What will be the resultant if the third digit of the highest number is subtracted from the first digit of the lowest number?

A) -4 B) -5 C) -2 D) -6

Date: 12/06/2025 Time: 9:00 AM - 10:30 AM Right: 82.35% Wrong: 12.18%

Q6) This question is based on the five, three-digit numbers given below.

(Left) 898 740 280 169 993 (Right)

(Example: 697 – First digit = 6, second digit = 9 and third digit = 7)

(NOTE: All operations to be done from left to right.)

What will be the resultant if the first digit of the highest number is added to the third digit of the lowest number?

A) 17 B) 18 C) 21 D) 19

Date: 09/06/2025 Time: 4:30 PM - 6:00 PM Right: 82.37% Wrong: 11.29%

Q7) This question is based on the five, three-digit numbers given below.

(Left) 411 559 916 247 769 (Right)

(Example- 697 – First digit = 6, second digit = 9 and third digit = 7)

(NOTE: All operations to be done from left to right.)

What will be the resultant if the first digit of the lowest number is subtracted from the first digit of the highest number?

A) 7 B) 11 C) 5 D) 9

Date: 21/06/2025 Time: 9:00 AM - 10:30 AM Right: 83.82% Wrong: 10.36%

Q8) This question is based on the five, three-digit numbers given below.

(Left) 614 457 249 625 150 (Right)

(Example: 697 – First digit = 6, second digit = 9 and third digit = 7)

(NOTE: All operations to be done from left to right.)

What will be the resultant if the second digit of the highest number is subtracted from the second digit of the lowest number?

A) 4 B) 3 C) 6 D) 2

Date: 05/06/2025 Time: 9:00 AM - 10:30 AM Right: 84.17% Wrong: 9.20%

Q9) This question is based on the five, three-digit numbers given below.

(Left) 497 581 452 460 775 (Right)

(Example: 697 – First digit = 6, second digit = 9 and third digit = 7)

(Note: All operations to be done from left to right.)

What will be the resultant if second digit of the highest number is subtracted from the second digit of the lowest number?

A) 1 B) -3 C) -1 D) -2

Date: 20/06/2025 Time: 9:00 AM - 10:30 AM Right: 84.21% Wrong: 7.71%

Q10) This question is based on the five, three-digit numbers given below.

(Left) 535 647 232 804 152 (Right)

(Example: 697 – First digit = 6, second digit = 9 and third digit = 7)

(NOTE: All operations to be done from left to right.)

What will be the resultant if the second digit of the highest number is subtracted from the third digit of the lowest number?

A) 3 B) 1 C) 5 D) 2

Date: 09/06/2025 Time: 9:00 AM - 10:30 AM Right: 84.36% Wrong: 8.66%

Q11) This question is based on the five, three-digit numbers given below.

(Left) 870 165 207 893 753 (Right)

(Example: 697 – First digit = 6, second digit = 9 and third digit = 7)

(Note: All operations to be done from left to right.)

What will be the resultant if the first digit of the highest number is subtracted from the third digit of the lowest number?

A) -2 B) -3 C) -4 D) 0

Date: 19/06/2025 Time: 9:00 AM - 10:30 AM Right: 84.67% Wrong: 6.32%

**Q12)** This question is based on the five, three-digit numbers given below.

(Left) 107 788 634 346 488 (Right)

(Example- 697 – First digit = 6, second digit = 9 and third digit = 7)

(NOTE: All operations to be done from left to right.)

What will be the resultant if the first digit of the highest number is added to the third digit of the lowest number?

**A) 13 B) 14 C) 17 D) 15**

Date: 18/06/2025 Time: 12:45 PM - 2:15 PM Right: 85.08% Wrong: 8.60%

**Q13)** This question is based on the five, three-digit numbers given below.

(Left) 917 782 549 557 539 (Right)

(Example- 697 – First digit = 6, second digit = 9 and third digit = 7)

(NOTE: All operations to be done from left to right.)

What will be the resultant if the first digit of the highest number is added to the second digit of the lowest number?

**A) 13 B) 11 C) 12 D) 15**

Date: 16/06/2025 Time: 12:45 PM - 2:15 PM Right: 86.03% Wrong: 7.20%

**Q14)** This question is based on the five, three-digit numbers given below.

(Left) 219 539 568 670 131 (Right)

(Example: 697 – First digit = 6, second digit = 9 and third digit = 7)

(NOTE: All operations to be done from left to right)

What will be the resultant if the second digit of the highest number is subtracted from the second digit of the lowest number?

**A) -4 B) -3 C) -1 D) -5**

Date: 10/06/2025 Time: 4:30 PM - 6:00 PM Right: 86.04% Wrong: 6.78%

**Q15)** This question is based on the five, three-digit numbers given below.

(Left) 143 656 651 264 282 (Right)

(Example- 697 – First digit = 6, second digit = 9 and third digit = 7)

(NOTE: All operations to be done from left to right.)

What will be the resultant if the first digit of the highest number is subtracted from the third digit of the lowest number?

**A) -4 B) -3 C) -2 D) 0**

Date: 18/06/2025 Time: 9:00 AM - 10:30 AM Right: 86.26% Wrong: 5.58%

**Q16)** This question is based on the five, three-digit numbers given below.

(Left) 853 628 981 217 132 (Right)

(Example- 697 – First digit = 6, second digit = 9 and third digit = 7)

(NOTE: All operations to be done from left to right.)

What will be the resultant if the second digit of the highest number is added to the first digit of the lowest number?

**A) 12 B) 9 C) 8 D) 10**

Date: 18/06/2025 Time: 4:30 PM - 6:00 PM Right: 86.26% Wrong: 6.45%

**Q17)** This question is based on the five, three-digit numbers given below.

(Left) 853 628 981 217 132 (Right)

(Example: 697 – First digit = 6, second digit = 9 and third digit = 7)

(Note: All operations to be done from left to right.)

What will be the resultant if the second digit of the highest number is added to the first digit of the lowest number?

**A) 7 B) 9 C) 13 D) 11**

Date: 24/06/2025 Time: 9:00 AM - 10:30 AM Right: 86.33% Wrong: 5.29%

**Q18)** This question is based on the five, three-digit numbers given below.

(Left) 617 335 930 459 571 (Right)

(Example: 697 – First digit = 6, second digit = 9 and third digit = 7)

(Note: All operations to be done from left to right.)

What will be the resultant if the first digit of the highest number is added to the third digit of the lowest number?

**A) 13 B) 12 C) 14 D) 15**

Date: 24/06/2025 Time: 12:45 PM - 2:15 PM Right: 86.56% Wrong: 7.23%

**Q19)** This question is based on the five, three-digit numbers given below.

(Left) 993 281 995 257 599 (Right)

(Example: 697 – First digit = 6, second digit = 9 and third digit = 7)

(NOTE: All operations to be done from left to right.)

What will be the resultant if the third digit of the highest number is added to the first digit of the lowest number?

**A) 8 B) 7 C) 10 D) 6**

Date: 09/06/2025 Time: 12:45 PM - 2:15 PM Right: 86.77% Wrong: 6.67%

**Q20)** This question is based on the five, three-digit numbers given below.

(Left) 815 497 460 637 147 (Right)

(Example- 697 – First digit = 6, second digit = 9 and third digit = 7)

(NOTE: All operations to be done from left to right.)

What will be the resultant if the second digit of the highest number is subtracted from the third digit of the lowest number?

**A) 7 B) 9 C) 6 D) 5**

Date: 17/06/2025 Time: 12:45 PM - 2:15 PM Right: 87.06% Wrong: 5.68%

**Q21)** This question is based on the five, three-digit numbers given below.

(Left) 657 435 578 659 619 (Right)

(Example- 697 – First digit = 6, second digit = 9 and third digit = 7)

(NOTE: All operations to be done from left to right.)

What will be the resultant if the second digit of the highest number is added to the third digit of the lowest number?

**A) 10 B) 11 C) 12 D) 9**

Date: 20/06/2025 Time: 4:30 PM - 6:00 PM Right: 87.10% Wrong: 6.74%

**Q22)** This question is based on the five, three-digit numbers given below.

(Left) 388 739 783 483 785 (Right)

(Example: 697 – First digit = 6, second digit = 9 and third digit = 7)

(NOTE: All operations to be done from left to right.)

What will be the resultant if the first digit of the highest number is subtracted from the third digit of the lowest number?

**A) 0 B) 1 C) 2 D) 4**

Date: 10/06/2025 Time: 12:45 PM - 2:15 PM Right: 87.11% Wrong: 8.07%

**Q23)** This question is based on the five, three-digit numbers given below.

(Left) 307 485 194 237 937 (Right)

(Example: 697 – First digit = 6, second digit = 9 and third digit = 7)

(Note: All operations to be done from left to right.)

What will be the resultant if the third digit of the highest number is subtracted from the first digit of the lowest number?

**A) -6 B) -4 C) -5 D) -3**

Date: 24/06/2025 Time: 4:30 PM - 6:00 PM Right: 87.13% Wrong: 6.98%

**Q24)** This question is based on the five, three-digit numbers given below.

(Left) 815 497 460 637 147 (Right)

(Example- 697 – First digit = 6, second digit = 9 and third digit = 7)

(NOTE: All operations to be done from left to right.)

What will be the resultant if the second digit of the highest number is subtracted from the third digit of the lowest number?

**A) 6 B) 8 C) 9 D) 7**

Date: 23/06/2025 Time: 4:30 PM - 6:00 PM Right: 87.16% Wrong: 5.08%

**Q25)** This question is based on the five, three-digit numbers given below.

(Left) 325 503 158 391 144 (Right)

(Example- 697 – First digit = 6, second digit = 9 and third digit = 7)

(NOTE: All operations to be done from left to right.)

What will be the resultant if the second digit of the highest number is added to the first digit of the lowest number?

**A) 3 B) 4 C) 1 D) 2**

Date: 21/06/2025 Time: 4:30 PM - 6:00 PM Right: 87.19% Wrong: 6.22%

**Q26)** This question is based on the five, three-digit numbers given below.

(Left) 956 521 251 156 335 (Right)

(Example: 697 – First digit = 6, second digit = 9 and third digit = 7)

(NOTE: All operations to be done from left to right.)

What will be the resultant if the second digit of the highest number is added to the first digit of the lowest number?

**A) 5 B) 6 C) 7 D) 9**

Date: 05/06/2025 Time: 12:45 PM - 2:15 PM Right: 87.22% Wrong: 4.95%

**Q27)** This question is based on the five, three-digit numbers given below.

(Left) 917 782 549 557 539 (Right)

(Example- 697 – First digit = 6, second digit = 9 and third digit = 7)

(NOTE: All operations to be done from left to right.)

What will be the resultant if the first digit of the highest number is added to the second digit of the lowest number?

**A) 13 B) 12 C) 11 D) 15**

Date: 21/06/2025 Time: 9:00 AM - 10:30 AM Right: 87.31% Wrong: 7.11%

**Q28)** This question is based on the five, three-digit numbers given below.

(Left) 210 878 407 692 140 (Right)

(Example: 697 – First digit = 6, second digit = 9 and third digit = 7)

(NOTE: All operations to be done from left to right.)

What will be the resultant if the third digit of the highest number is subtracted from the first digit of the lowest number?

**A) -6 B) -7 C) -8 D) -4**

Date: 09/06/2025 Time: 12:45 PM - 2:15 PM Right: 87.33% Wrong: 6.14%

**Q29)** This question is based on the five, three-digit numbers given below.

(Left) 307 485 194 237 937 (Right)

(Example: 697 – First digit = 6, second digit = 9 and third digit = 7)

(Note: All operations to be done from left to right.)

What will be the resultant if the third digit of the highest number is subtracted from the first digit of the lowest number?

**A) -7 B) -3 C) -6 D) -5**

Date: 19/06/2025 Time: 4:30 PM - 6:00 PM Right: 87.84% Wrong: 6.11%

**Q30)** This question is based on the five, three-digit numbers given below.

(Left) 823 664 309 431 175 (Right)

(Example- 697 – First digit = 6, second digit = 9 and third digit = 7)

(NOTE: All operations to be done from left to right.)

What will be the resultant if the first digit of the highest number is added to the third digit of the lowest number?

**A) 16 B) 11 C) 13 D) 14**

Date: 14/06/2025 Time: 12:45 PM - 2:15 PM Right: 88.42% Wrong: 4.91%

**Q31)** This question is based on the five, three-digit numbers given below.

(Left) 611 733 279 265 370 (Right)

(Example: 697 – First digit = 6, second digit = 9 and third digit = 7)

(NOTE: All operations to be done from left to right.)

What will be the resultant if the second digit of the highest number is added to the first digit of the lowest number?

**A) 4 B) 5 C) 6 D) 8**

Date: 10/06/2025 Time: 12:45 PM - 2:15 PM Right: 88.54% Wrong: 6.56%

**Q32)** This question is based on the five, three-digit numbers given below.

(Left) 144 743 290 258 799 (Right)

(Example- 697 – First digit = 6, second digit = 9 and third digit = 7)

(NOTE: All operations to be done from left to right.)

What will be the resultant if the second digit of the highest number is subtracted from the third digit of the lowest number?

**A) -5 B) -4 C) -6 D) -2**

Date: 11/06/2025 Time: 12:45 PM - 2:15 PM Right: 88.64% Wrong: 4.65%

**Q33)** This question is based on the five, three-digit numbers given below.

(Left) 662 268 547 409 909 (Right)

(Example: 697 – First digit = 6, second digit = 9 and third digit = 7)

(NOTE: All operations to be done from left to right.)

What will be the resultant if the third digit of the highest number is subtracted from the first digit of the lowest number?

**A) -8 B) -6 C) -4 D) -7**

Date: 05/06/2025 Time: 4:30 PM - 6:00 PM Right: 88.91% Wrong: 3.83%

**Q34)** This question is based on the five, three-digit numbers given below.

(Left) 441 317 999 155 444 (Right)

(Example- 697 – First digit = 6, second digit = 9 and third digit = 7)

(NOTE: All operations to be done from left to right.)

What will be the resultant if the third digit of the highest number is subtracted from the first digit of the lowest number?

**A) -8 B) -9 C) -5 D) -7**

Date: 18/06/2025 Time: 4:30 PM - 6:00 PM Right: 88.97% Wrong: 3.71%

**Q35)** This question is based on the five, three-digit numbers given below.

(Left) 514 414 422 875 167 (Right)

(Example- 697 – First digit = 6, second digit = 9 and third digit = 7)

(NOTE: All operations to be done from left to right.)

What will be the resultant if the second digit of the highest number is subtracted from the second digit of the lowest number?

**A) -2 B) 2 C) -1 D) 0**

Date: 19/06/2025 Time: 4:30 PM - 6:00 PM Right: 89.05% Wrong: 3.51%

**Q36)** This question is based on the five, three-digit numbers given below.

(Left) 411 559 916 247 769 (Right)

(Example- 697 – First digit = 6, second digit = 9 and third digit = 7)

(NOTE: All operations to be done from left to right.)

What will be the resultant if the first digit of the lowest number is subtracted from the first digit of the highest number?

**A) 10 B) 7 C) 8 D) 6**

Date: 17/06/2025 Time: 4:30 PM - 6:00 PM Right: 89.20% Wrong: 4.51%

**Q37)** This question is based on the five, three-digit numbers given below.

(Left) 103 678 217 111 537 (Right)

(Example: 697 – First digit = 6, second digit = 9 and third digit = 7)

(Note: All operations to be done from left to right.)

What will be the resultant if the second digit of the highest number is added to the first digit of the lowest number?

**A) 9 B) 8 C) 11 D) 7**

Date: 19/06/2025 Time: 12:45 PM - 2:15 PM Right: 89.21% Wrong: 5.77%

**Q38)** This question is based on the five, three-digit numbers given below.

(Left) 441 317 999 155 444 (Right)

(Example- 697 – First digit = 6, second digit = 9 and third digit = 7)

(NOTE: All operations to be done from left to right.)

What will be the resultant if the third digit of the highest number is subtracted from the first digit of the lowest number?

**A) -6 B) -7 C) -5 D) -8**

Date: 23/06/2025 Time: 9:00 AM - 10:30 AM Right: 89.28% Wrong: 5.77%

**Q39)** This question is based on the five, three-digit numbers given below.

(Left) 205 712 237 862 578 (Right)

(Example- 697 – First digit = 6, second digit = 9 and third digit = 7)

(NOTE: All operations to be done from left to right.)

What will be the resultant if the third digit of the highest number is added to the first digit of the lowest number?

**A) 5 B) 4 C) 3 D) 7**

Date: 11/06/2025 Time: 9:00 AM - 10:30 AM Right: 89.29% Wrong: 5.75%

**Q40)** This question is based on the five, three-digit numbers given below.

(Left) 941 915 741 807 776 (Right)

(Example- 697 – First digit = 6, second digit = 9 and third digit = 7)

(NOTE: All operations to be done from left to right.)

What will be the resultant if the third digit of the highest number is added to the first digit of the lowest number?

**A) 11 B) 7 C) 8 D) 9**

Date: 17/06/2025 Time: 4:30 PM - 6:00 PM Right: 89.35% Wrong: 4.60%

**Q41)** This question is based on the five, three-digit numbers given below.

(Left) 740 636 787 884 316 (Right)

(Example- 697 – First digit = 6, second digit = 9 and third digit = 7)

(NOTE: All operations to be done from left to right.)

What will be the resultant if the second digit of the highest number is added to the third digit of the lowest number?

**A) 14 B) 17 C) 13 D) 15**

Date: 13/06/2025 Time: 9:00 AM - 10:30 AM Right: 89.44% Wrong: 4.39%

Q42) This question is based on the five, three-digit numbers given below.

(Left) 773 263 387 270 378 (Right)

(Example: 697 – First digit = 6, second digit = 9 and third digit = 7)

(NOTE: All operations to be done from left to right.)

What will be the resultant if the first digit of the lowest number is subtracted from the first digit of the highest number?

A) 6 B) 8 C) 5 D) 4

Date: 09/06/2025 Time: 4:30 PM - 6:00 PM Right: 89.63% Wrong: 4.85%

Q43) This question is based on the five, three-digit numbers given below.

(Left) 617 335 930 459 571 (Right)

(Example- 697 – First digit = 6, second digit = 9 and third digit = 7)

(Note: All operations to be done from left to right.)

What will be the resultant if the first digit of the highest number is added to the third digit of the lowest number?

A) 13 B) 15 C) 17 D) 14

Date: 19/06/2025 Time: 12:45 PM - 2:15 PM Right: 89.93% Wrong: 4.47%

Q44) This question is based on the five, three-digit numbers given below.

(Left) 236 758 230 563 263 (Right)

(Example- 697 – First digit = 6, second digit = 9 and third digit = 7)

(NOTE: All operations to be done from left to right.)

What will be the resultant if the first digit of the lowest number is subtracted from the first digit of the highest number?

A) 5 B) 6 C) 8 D) 4

Date: 11/06/2025 Time: 12:45 PM - 2:15 PM Right: 89.97% Wrong: 4.65%

**Q45)** This question is based on the five, three-digit numbers given below.

(Left) 103 678 217 111 537 (Right)

(Example: 697 – First digit = 6, second digit = 9 and third digit = 7)

(Note: All operations to be done from left to right.)

What will be the resultant if the second digit of the highest number is added to the first digit of the lowest number?

**A) 12 B) 10 C) 8 D) 6**

Date: 24/06/2025 Time: 4:30 PM - 6:00 PM Right: 90.08% Wrong: 4.53%

**Q46)** This question is based on the five, three-digit numbers given below.

(Left) 190 735 494 761 781 (Right)

(Example- 697 – First digit = 6, second digit = 9 and third digit = 7)

(NOTE: All operations to be done from left to right.)

What will be the resultant if the second digit of the highest number is subtracted from the second digit of the lowest number?

**A) 0 B) 4 C) 2 D) 1**

Date: 16/06/2025 Time: 4:30 PM - 6:00 PM Right: 90.24% Wrong: 4.17%

**Q47)** This question is based on the five, three-digit numbers given below.

(Left) 205 712 237 862 578 (Right)

(Example- 697 – First digit = 6, second digit = 9 and third digit = 7)

(NOTE: All operations to be done from left to right.)

What will be the resultant if the third digit of the highest number is added to the first digit of the lowest number?

**A) 5 B) 6 C) 3 D) 4**

Date: 14/06/2025 Time: 9:00 AM - 10:30 AM Right: 90.90% Wrong: 3.77%

**Q48)** This question is based on the five, three-digit numbers given below.

(Left) 236 758 230 563 263 (Right)

(Example- 697 – First digit = 6, second digit = 9 and third digit = 7)

(NOTE: All operations to be done from left to right.)

What will be the resultant if the first digit of the lowest number is subtracted from the first digit of the highest number?

**A) 5 B) 7 C) 6 D) 4**

Date: 13/06/2025 Time: 4:30 PM - 6:00 PM Right: 90.96% Wrong: 3.49%

**Q49)** This question is based on the five, three-digit numbers given below.

(Left) 823 664 309 431 175 (Right)

(Example- 697 – First digit = 6, second digit = 9 and third digit = 7)

(NOTE: All operations to be done from left to right.)

What will be the resultant if the first digit of the highest number is added to the third digit of the lowest number?

**A) 13 B) 16 C) 12 D) 14**

Date: 12/06/2025 Time: 9:00 AM - 10:30 AM Right: 91.01% Wrong: 3.76%

**Q50)** This question is based on the five, three-digit numbers given below.

(Left) 144 743 290 258 799 (Right)

(Example- 697 – First digit = 6, second digit = 9 and third digit = 7)

(NOTE: All operations to be done from left to right.)

What will be the resultant if the second digit of the highest number is subtracted from the third digit of the lowest number?

**A) -5 B) -7 C) -4 D) -2**

Date: 14/06/2025 Time: 9:00 AM - 10:30 AM Right: 91.15% Wrong: 3.93%

**Q51)** This question is based on the five, three-digit numbers given below.

(Left) 194 932 446 225 493 (Right)

(Example- 697 – First digit = 6, second digit = 9 and third digit = 7)

(NOTE: All operations to be done from left to right.)

What will be the resultant if the first digit of the highest number is added to the second digit of the lowest number?

**A) 15 B) 17 C) 18 D) 16**

Date: 13/06/2025 Time: 4:30 PM - 6:00 PM Right: 91.33% Wrong: 2.67%

**Q52)** This question is based on the five, three-digit numbers given below.

(Left) 951 474 717 497 127 (Right)

(Example- 697 – First digit = 6, second digit = 9 and third digit = 7)

(NOTE: All operations to be done from left to right.)

What will be the resultant if the first digit of the highest number is subtracted from the third digit of the lowest number?

**A) -4 B) -3 C) -2 D) -1**

Date: 20/06/2025 Time: 12:45 PM - 2:15 PM Right: 91.90% Wrong: 2.64%

**Q53)** This question is based on the five, three-digit numbers given below.

(Left) 740 636 787 884 316 (Right)

(Example- 697 – First digit = 6, second digit = 9 and third digit = 7)

(NOTE: All operations to be done from left to right.)

What will be the resultant if the second digit of the highest number is added to the third digit of the lowest number?

**A) 14 B) 15 C) 17 D) 13**

Date: 11/06/2025 Time: 9:00 AM - 10:30 AM Right: 91.91% Wrong: 2.89%

**Q54)** This question is based on the five, three-digit numbers given below.

(Left) 941 915 741 807 776 (Right)

(Example- 697 – First digit = 6, second digit = 9 and third digit = 7)

(NOTE: All operations to be done from left to right.)

What will be the resultant if the third digit of the highest number is added to the first digit of the lowest number?

**A) 8 B) 9 C) 11 D) 7**

Date: 23/06/2025 Time: 9:00 AM - 10:30 AM Right: 92.35% Wrong: 3.61%

**Q55)** This question is based on the five, three-digit numbers given below.

(Left) 194 932 446 225 493 (Right)

(Example- 697 – First digit = 6, second digit = 9 and third digit = 7)

(NOTE: All operations to be done from left to right.)

What will be the resultant if the first digit of the highest number is added to the second digit of the lowest number?

**A) 17 B) 16 C) 15 D) 18**

Date: 11/06/2025 Time: 9:00 AM - 10:30 AM Right: 92.42% Wrong: 2.62%

**Q56)** This question is based on the five, three-digit numbers given below.

(Left) 107 788 634 346 488 (Right)

(Example- 697 – First digit = 6, second digit = 9 and third digit = 7)

(NOTE: All operations to be done from left to right.)

What will be the resultant if the first digit of the highest number is added to the third digit of the lowest number?

**A) 7 B) 9 C) 12 D) 14**

Date: 23/06/2025 Time: 9:00 AM - 10:30 AM Right: 92.95% Wrong: 2.82%

### Answer Key (Q1 to Q56) Number puzzle

Q1: 4	Q2: 1	Q3: 3	Q4: 3	Q5: 2
Q6: 2	Q7: 1	Q8: 2	Q9: 4	Q10: 4
Q11: 2	Q12: 2	Q13: 3	Q14: 1	Q15: 2

Q16: 2	Q17: 2	Q18: 3	Q19: 2	Q20: 3
Q21: 1	Q22: 2	Q23: 1	Q24: 1	Q25: 3
Q26: 2	Q27: 2	Q28: 2	Q29: 3	Q30: 3
Q31: 2	Q32: 1	Q33: 4	Q34: 1	Q35: 3
Q36: 2	Q37: 2	Q38: 4	Q39: 2	Q40: 3
Q41: 1	Q42: 3	Q43: 4	Q44: 1	Q45: 3
Q46: 4	Q47: 4	Q48: 1	Q49: 1	Q50: 1
Q51: 3	Q52: 3	Q53: 1	Q54: 1	Q55: 4
Q56: 4				

## Order and Ranking

**Q1)** M, N, O, P, Y and Z live on six different floors of the same building. The lowermost floor in the building is numbered 1, the floor above it, number 2 and so on till the topmost floor is numbered 6. Only two people live between O and Z. Only two people live between N and M. Only one person lives between P and M. P lives on floor numbered 1. O lives above M. How many people live below Y?

**A)** Three **B)** Two **C)** One **D)** Four

Date: 11/06/2025 Time: 9:00 AM - 10:30 AM Right: 66.27% Wrong: 14.08%

**Q2)** In a row of 37 students facing north, Vishesh is 13<sup>th</sup> from the right end. If Namrata is 10<sup>th</sup> to the left of Vishesh, what is Namrata's position from the left end of the line?

**A)** 11<sup>th</sup> **B)** 12<sup>th</sup> **C)** 15<sup>th</sup> **D)** 14<sup>th</sup>

Date: 23/06/2025 Time: 9:00 AM - 10:30 AM Right: 71.00% Wrong: 23.05%

**Q3)** In a row of 22 students facing north, Suman is 14<sup>th</sup> from the left end. If Dipa is 2<sup>nd</sup> to the right of Suman, what is Dipa's position from the right end of the line?

**A)** 5<sup>th</sup> **B)** 7<sup>th</sup> **C)** 8<sup>th</sup> **D)** 6<sup>th</sup>

Date: 24/06/2025 Time: 4:30 PM - 6:00 PM Right: 77.21% Wrong: 17.56%

**Q4)** 38 people are standing in a row facing north. Hari is 11<sup>th</sup> from the right end while Hema is 14<sup>th</sup> from the left end. How many people are there between Hari and Hema?

**A)** 12 **B)** 13 **C)** 14 **D)** 11

Date: 23/06/2025 Time: 4:30 PM - 6:00 PM Right: 77.44% Wrong: 19.36%

**Q5)** K, M, L, N, O and V live on six different floors of the same building. The lowermost floor in the building is numbered 1, the floor above it, number 2 and so on, till the topmost floor is numbered 6. Only one person lives below K. Only three people live between L and K. N lives on a floor below K. O lives on an even-numbered floor. M lives on an odd-numbered floor but not on floor number 5. How many people live between V and K?

**A) Two B) One C) Three D) Four**

Date: 17/06/2025 Time: 9:00 AM - 10:30 AM Right: 78.56% Wrong: 5.46%

**Q6)** P, A, R, T, L and Y live on six different floors of the same building. The lowermost floor in the building is numbered 1, the floor above it, number 2 and so on till the topmost floor is numbered 6. No one lives below R. Only A lives above T. Only two people live between R and P. Y lives on an even numbered floor. R lives on the lowermost floor. How many people live between L and A?

**A) Zero B) Three C) Two D) One**

Date: 21/06/2025 Time: 4:30 PM - 6:00 PM Right: 78.71% Wrong: 8.59%

**Q7)** I, J, K, L, M and Y live on six different floors of the same building. The lowermost floor in the building is numbered 1, the floor above it, number 2 and so on, till the topmost floor is numbered 6. Only L lives above Y. I lives on some floor below J. Only M lives below K. How many people live between J and M?

**A) Four B) One C) Three D) Two**

Date: 16/06/2025 Time: 9:00 AM - 10:30 AM Right: 80.64% Wrong: 9.24%

**Q8)** All 92 people are standing in a row facing north. Manju is 16<sup>th</sup> from the left end while Nisha is 9<sup>th</sup> from the right end. How many people are there between Manju and Nisha?

**A) 58 B) 48 C) 65 D) 67**

Date: 09/06/2025 Time: 12:45 PM - 2:15 PM Right: 84.70% Wrong: 11.41%

**Q9)** M, N, O, S, T and U live on six different floors of the same building. The lowermost floor in the building is numbered 1, the floor above it, number 2 and so on till the topmost floor is numbered 6. S lives on floor numbered 5. O lives on a floor above S. Only T lives below N. U lives on an even numbered floor. How many people live below M?

**A) Three B) One C) Two D) Four**

Date: 12/06/2025 Time: 4:30 PM - 6:00 PM Right: 84.89% Wrong: 6.70%

**Q10)** In a row of 73 students facing north, Gita is 16<sup>th</sup> from the left end. If Sunita is 21<sup>st</sup> to the right of Gita, what is Sunita's position from the right end of the line?

**A) 31<sup>st</sup> B) 28<sup>th</sup> C) 22<sup>nd</sup> D) 37<sup>th</sup>**

Date: 05/06/2025 Time: 9:00 AM - 10:30 AM Right: 86.02% Wrong: 5.82%

- Q11)** In a row of 81 students facing north, Sima is 12<sup>th</sup> from the right end. If Manju is 9<sup>th</sup> to the left of Sima, what is Manju's position from the left end of the line?  
A) 52<sup>nd</sup> B) 38<sup>th</sup> C) 61<sup>st</sup> D) 47<sup>th</sup>  
Date: 06/06/2025 Time: 4:30 PM - 6:00 PM Right: 87.42% Wrong: 3.40%
- Q12)** Taran ranked 28<sup>th</sup> from the top and 64<sup>th</sup> from the bottom in his class. How many students are there in his class?  
A) 90 B) 92 C) 93 D) 91  
Date: 21/06/2025 Time: 9:00 AM - 10:30 AM Right: 90.77% Wrong: 7.59%
- Q13)** David ranked 19<sup>th</sup> from the top and 25<sup>th</sup> from the bottom in his class. How many students are there in his class?  
A) 42 B) 43 C) 44 D) 45  
Date: 24/06/2025 Time: 4:30 PM - 6:00 PM Right: 91.44% Wrong: 6.65%
- Q14)** Prince ranked 24<sup>th</sup> from the top and 39<sup>th</sup> from the bottom in his class. How many students are there in his class?  
A) 61 B) 62 C) 64 D) 63  
Date: 17/06/2025 Time: 9:00 AM - 10:30 AM Right: 91.68% Wrong: 6.68%
- Q15)** Lokesh ranked 24<sup>th</sup> from the top and 34<sup>th</sup> from the bottom in his class. How many students are there in his class?  
A) 57 B) 58 C) 56 D) 59  
Date: 24/06/2025 Time: 12:45 PM - 2:15 PM Right: 91.81% Wrong: 6.42%
- Q16)** Sujay ranked 29<sup>th</sup> from the top and 59<sup>th</sup> from the bottom in his class. How many students are there in his class?  
A) 87 B) 88 C) 85 D) 86  
Date: 19/06/2025 Time: 9:00 AM - 10:30 AM Right: 92.26% Wrong: 5.79%
- Q17)** Piyush ranked 34<sup>th</sup> from the top and 57<sup>th</sup> from the bottom in his class. How many students are there in his class?  
A) 91 B) 92 C) 90 D) 89  
Date: 18/06/2025 Time: 9:00 AM - 10:30 AM Right: 92.33% Wrong: 5.43%
- Q18)** Hitesh ranked 28<sup>th</sup> from the top and 13<sup>th</sup> from the bottom in his class. How many students are there in his class?  
A) 42 B) 40 C) 41 D) 39  
Date: 09/06/2025 Time: 12:45 PM - 2:15 PM Right: 92.35% Wrong: 6.14%

Q19) Firoz ranked 38<sup>th</sup> from the top and 28<sup>th</sup> from the bottom in his class. How many students are there in his class?

A) 65 B) 66 C) 63 D) 64

Date: 23/06/2025 Time: 12:45 PM - 2:15 PM Right: 92.41% Wrong: 5.72%

Q20) Rajat ranked 16<sup>th</sup> from the top and 55<sup>th</sup> from the bottom in his class. How many students are there in his class?

A) 70 B) 71 C) 72 D) 69

Date: 17/06/2025 Time: 4:30 PM - 6:00 PM Right: 92.44% Wrong: 6.05%

Q21) Shubham ranked 19<sup>th</sup> from the top and 46<sup>th</sup> from the bottom in his class. How many students are there in his class?

A) 62 B) 65 C) 63 D) 64

Date: 12/06/2025 Time: 12:45 PM - 2:15 PM Right: 92.83% Wrong: 5.41%

Q22) Manish ranked 18<sup>th</sup> from the top and 49<sup>th</sup> from the bottom in his class. How many students are there in his class?

A) 65 B) 67 C) 66 D) 64

Date: 16/06/2025 Time: 9:00 AM - 10:30 AM Right: 93.04% Wrong: 5.59%

Q23) Rajesh ranked 17<sup>th</sup> from the top and 44<sup>th</sup> from the bottom in his class. How many students are there in his class?

A) 61 B) 60 C) 59 D) 62

Date: 10/06/2025 Time: 12:45 PM - 2:15 PM Right: 93.09% Wrong: 5.33%

Q24) Piyush ranked 24<sup>th</sup> from the top and 55<sup>th</sup> from the bottom in his class. How many students are there in his class?

A) 79 B) 77 C) 78 D) 76

Date: 06/06/2025 Time: 12:45 PM - 2:15 PM Right: 93.30% Wrong: 4.92%

Q25) Vinod ranked 36<sup>th</sup> from the top and 18<sup>th</sup> from the bottom in his class. How many students are there in his class?

A) 54 B) 53 C) 51 D) 52

Date: 20/06/2025 Time: 12:45 PM - 2:15 PM Right: 93.33% Wrong: 5.13%

Q26) Jon ranked 24<sup>th</sup> from the top and 16<sup>th</sup> from the bottom in his class. How many students are there in his class?

A) 39 B) 40 C) 38 D) 37

Date: 10/06/2025 Time: 9:00 AM - 10:30 AM Right: 93.54% Wrong: 3.96%

**Q27)** Vimal ranked 19<sup>th</sup> from the top and 24<sup>th</sup> from the bottom in his class. How many students are there in his class?

**A) 43 B) 40 C) 41 D) 42**

Date: 10/06/2025 Time: 4:30 PM - 6:00 PM Right: 93.59% Wrong: 5.44%

**Q28)** Suraj ranked 18<sup>th</sup> from the top and 67<sup>th</sup> from the bottom in his class. How many students are there in his class?

**A) 83 B) 82 C) 85 D) 84**

Date: 06/06/2025 Time: 4:30 PM - 6:00 PM Right: 93.60% Wrong: 5.05%

**Q29)** Kavish ranked 38<sup>th</sup> from the top and 15<sup>th</sup> from the bottom in his class. How many students are there in his class?

**A) 50 B) 52 C) 53 D) 51**

Date: 09/06/2025 Time: 9:00 AM - 10:30 AM Right: 93.80% Wrong: 4.27%

**Q30)** Harry ranked 34<sup>th</sup> from the top and 25<sup>th</sup> from the bottom in his class. How many students are there in his class?

**A) 56 B) 59 C) 58 D) 57**

Date: 18/06/2025 Time: 12:45 PM - 2:15 PM Right: 94.00% Wrong: 4.72%

**Q31)** Vijay ranked 34<sup>th</sup> from the top and 11<sup>th</sup> from the bottom in his class. How many students are there in his class?

**A) 42 B) 44 C) 45 D) 43**

Date: 09/06/2025 Time: 4:30 PM - 6:00 PM Right: 94.12% Wrong: 4.49%

**Q32)** Samrath ranked 31<sup>st</sup> from the top and 13<sup>th</sup> from the bottom in his class. How many students are there in his class?

**A) 44 B) 42 C) 41 D) 43**

Date: 18/06/2025 Time: 12:45 PM - 2:15 PM Right: 94.12% Wrong: 4.69%

### Answer Key (Q1 to Q32) Order and Ranking

Q1: 1	Q2: 3	Q3: 2	Q4: 2	Q5: 1
Q6: 3	Q7: 4	Q8: 4	Q9: 3	Q10: 4
Q11: 3	Q12: 4	Q13: 2	Q14: 2	Q15: 1
Q16: 1	Q17: 3	Q18: 2	Q19: 1	Q20: 1
Q21: 4	Q22: 3	Q23: 2	Q24: 3	Q25: 2

Q26: 1	Q27: 4	Q28: 4	Q29: 2	Q30: 3
Q31: 2	Q32: 4			

## Seating Arrangement

Q1) Amita, Babita, Geeta, Kavita, Meeta, Sarita, Vinita are sitting in a straight line, facing north. Geeta sits third to the right of Kavita. Sarita sits third to the left of Amita, who is third to the left of Meeta. Neither Sarita nor Babita sit immediately next to Kavita. Three of the following four are alike in a certain way based on the given arrangement and thus form a group. Which of the following does NOT belong to that group?

A) Amita and Babita   B) Vinita and Amita   C) Babita and Meeta   D) Sarita and Kavita

Date: 24/06/2025   Time: 12:45 PM - 2:15 PM   Right: 34.26%   Wrong: 16.68%

Q2) L, M, N, O, P, Q, and R are sitting around a circular table facing the centre. M is sitting to the immediate right of Q and immediate left of O. N is sitting to the immediate right of O. P is sitting to the immediate left of L. R is sitting to the immediate right of L and immediate left of Q. The position of how many persons will remain unchanged if all the persons are arranged in alphabetical order in clockwise direction starting from L (including L)?

A) 4   B) 3   C) 1   D) 5

Date: 05/06/2025   Time: 4:30 PM - 6:00 PM   Right: 35.74%   Wrong: 41.68%

Q3) I, J, K, L, M, N and R are sitting around a circular table facing the centre of the table. K sits fourth to the right of L. Only two people sit between M and I when counted from the left of M. J sits third to the left of R. N is an immediate neighbour of R and I. How many people between K and N when counted from the left of N?

A) Two   B) Four   C) One   D) Three

Date: 10/06/2025   Time: 9:00 AM - 10:30 AM   Right: 39.89%   Wrong: 22.02%

Q4) A, B, L, M, S, T and Z are sitting around a circular table facing the centre. Z sits fourth to the right of B. Only two people sit between L and T when counted from the left of L. M sits third to the left of S. N is an immediate neighbour of S and T. How many people are there between Z and N when counted from the left of N?

A) 4   B) 2   C) 3   D) 1

Date: 20/06/2025   Time: 9:00 AM - 10:30 AM   Right: 40.15%   Wrong: 24.24%

**Q5)** A, B, C, D, R, S and T are sitting around a circular table facing the centre of the table. B sits fourth to the right of R. Only two people sit between T and D when counted from the left of T. A sits third to the left of C. S is an immediate neighbour of C and D. How many people sit between B and S when counted from the left of S?

**A) Two B) One C) Three D) Four**

Date: 11/06/2025 Time: 12:45 PM - 2:15 PM Right: 42.15% Wrong: 23.70%

**Q6)** Anu, Beena, Deepa, Heena, Kareena, Leena and Reena sit in a straight line, facing north. Kareena sits third to the right of Beena, who sits second to the right of Deepa. Reena sits to the immediate left of Leena. Anu sits second to the left of Heena. Three of the following four are alike in a certain way based on the given arrangement and thus form a group. Who among the following do NOT belong to that group?

**A) Anu and Deepa B) Heena and Reena C) Leena and Kareena D) Beena and Reena**

Date: 24/06/2025 Time: 4:30 PM - 6:00 PM Right: 46.29% Wrong: 15.65%

**Q7)** O, P, Q, R, S, T and X are sitting around a circular table facing the centre of the table. Only one person sits between Q and X when counted from the left of X. P sits third to the right of R. O sits third to the left of T. P sits to the immediate right of O. S is not an immediate neighbour of O. How many people sit between S and X when counted from the right of S?

**A) Two B) One C) Three D) Four**

Date: 10/06/2025 Time: 12:45 PM - 2:15 PM Right: 46.47% Wrong: 25.78%

**Q8)** A, B, C, D, R, S and T are sitting around a circular table facing the centre of the table. Only one person sits between D and T when counted from the left of T. S sits third to the right of R. C sits third to the left of A. S sits to the immediate right of C. B is not an immediate neighbour of C. How many people sit between B and T when counted from the right of B?

**A) Two B) Four C) Three D) One**

Date: 19/06/2025 Time: 12:45 PM - 2:15 PM Right: 47.79% Wrong: 23.78%

**Q9)** A, B, C, D, G, H and I are sitting around a circular table facing the centre of the table. Only one person sits between D and G when counted from the left of G. H sits third to the right of I. C sits third to the left of A. H sits to the immediate right of C. B is not an immediate neighbour of C. How many people sit between B and G when counted from the right of B?

**A) Four B) Two C) Three D) One**

Date: 13/06/2025 Time: 12:45 PM - 2:15 PM Right: 48.37% Wrong: 25.32%

**Q10)** P, Q, R, S, T, U and V are sitting around a circular table facing the centre. Only one person sits between R and T when counted from the left of T. Q sits third to the right of P. U sits third to the left of V. Q sits to the immediate right of U. S is not an immediate neighbour of U. How many people sit between S and T when counted from the right of S?

**A) 4 B) 2 C) 3 D) 1**

Date: 05/06/2025 Time: 12:45 PM - 2:15 PM Right: 50.58% Wrong: 23.31%

**Q11)** A, B, L, M, S, T and Z are sitting around a circular table facing the centre. Only one person sits between B and L when counted from the left of L. S sits third to the right of Z. M sits third to the left of T. S sits to the immediate right of M. A is not an immediate neighbour of M. How many people sit between A and L when counted from the right of A?

**A) 2 B) 4 C) 3 D) 1**

Date: 21/06/2025 Time: 4:30 PM - 6:00 PM Right: 51.39% Wrong: 24.29%

**Q12)** P, Q, R, S, T, U and V are sitting around a circular table facing the centre. Only three people sit between R and Q when counted from the left of R. Only three people sit between V and U when counted from the right of U. S sits to the immediate right of V. T is an immediate neighbour of U as well as Q. How many people sit between T and P when counted from the right of P?

**A) 4 B) 2 C) 3 D) 1**

Date: 06/06/2025 Time: 9:00 AM - 10:30 AM Right: 52.83% Wrong: 25.54%

**Q13)** A, B, C, D, R, S and T are sitting around a circular table facing the centre of the table. Only three people sit between T and R when counted from the left of T. Only three people sit between A and S when counted from the right of S. C sits to the immediate right of A. B is an immediate neighbour of S as well as R. Who sits third to the right of D?

**A) C B) T C) S D) A**

Date: 18/06/2025 Time: 9:00 AM - 10:30 AM Right: 57.35% Wrong: 20.31%

**Q14)** A, B, C, D, E, F, and G are sitting around a circular table facing the centre. A sits to the immediate left of G. D sits to the immediate left of B. B sits second to the left of F. E sits third to the left of G.

How many people sit between C and F when counted from the left of C?

**A) Two B) One C) Three D) Four**

Date: 18/06/2025 Time: 4:30 PM - 6:00 PM Right: 60.25% Wrong: 22.74%

**Q15)** Eight people, A, B, C, D, E, F, G and H, are sitting in a straight line facing south. B is sitting at one of the ends of the line. G is sitting to the immediate left of C. A is sitting to the immediate left of H and immediate right of C. Only 3 people are sitting to the right of E. D is sitting to the immediate left of B. Who is sitting to the immediate left of D?

**A) E B) F C) C D) H**

Date: 10/06/2025 Time: 4:30 PM - 6:00 PM Right: 62.31% Wrong: 13.99%

**Q16)** P, Q, R, S, T, U and V are sitting around a circular table facing the centre. U sits to the immediate right of T. Only three people sit between U and V when counted from the left of U. Only three people sit between T and R. Q sits to the immediate right of P. How many people sit between T and P when counted from the left of P?

**A) 3 B) 1 C) 4 D) 2**

Date: 09/06/2025 Time: 12:45 PM - 2:15 PM Right: 62.93% Wrong: 22.71%

**Q17)** P, Q, R, S, T, U and V are sitting around a circular table facing the centre. Both Q and V are immediate neighbours of S. V sits third to the left of T. R sits to the immediate left of T. U is not an immediate neighbour of V. How many people sit between S and U when counted from the right of S?

**A) 1 B) 2 C) 4 D) 3**

Date: 06/06/2025 Time: 4:30 PM - 6:00 PM Right: 63.81% Wrong: 26.50%

**Q18)** A, B, C, D, E, F and G are sitting around a circular table facing the centre. A sits third to the right of F. C sits second to the left of G. G is not an immediate neighbour of F. D sits to the immediate right of E. What is the position of C with respect to A?

**A) To the immediate right B) Second to the left C) Third to the left D) To the immediate left**

Date: 16/06/2025 Time: 12:45 PM - 2:15 PM Right: 63.97% Wrong: 21.17%

**Q19)** Seven people, I, J, K, L, O, P and Q are sitting in a row, facing north. Only two people sit between Q and O. Only I sits to the right of P. Only one person sits between O and P. K sits at some place to the right of L but at some place to the left of J. How many people sit between J and L?

**A) One B) Three C) Two D) Four**

Date: 10/06/2025 Time: 4:30 PM - 6:00 PM Right: 64.20% Wrong: 20.70%

**Q20)** D, E, F, H, I, J and K are sitting around a square table facing the centre of the table. Only two people sit between E and J when counted from the right of E. Only two people sit between J and F. Only three people sit between E and I. D sits to the immediate left of K. Who sits third to the left of H?

**A) I B) E C) K D) D**

Date: 24/06/2025 Time: 9:00 AM - 10:30 AM Right: 64.22% Wrong: 15.92%

**Q21)** P, Q, R, S, T, U and V are sitting around a circular table facing the centre. Only one person sits between P and V when counted from the right of P. Only one person sits between V and U. Only one person sits between P and Q. Only two people sit between R and U. Only one person sits between T and Q. How many people sit between S and P when counted from the left of S?

**A) 2 B) 0 C) 3 D) 5**

Date: 09/06/2025 Time: 9:00 AM - 10:30 AM Right: 64.30% Wrong: 17.61%

**Q22)** A, B, C, D, G, H and I are sitting around a circular table facing the centre of the table. Only three people sit between I and H when counted from the left of I. Only three people sit between A and G when counted from the right of G. C sits to the immediate right of A. B is an immediate neighbour of G as well as H. Who sits to the second to the left of D?

**A) G B) B C) I D) A**

Date: 13/06/2025 Time: 9:00 AM - 10:30 AM Right: 64.81% Wrong: 15.79%

**Q23)** A, B, C, D, E, F, and G are sitting around a circular table facing the centre. Only C sits between A and E. E sits third to the left of D. B sits to the immediate left of D. G is not an immediate neighbour of E. How many people sit between C and G when counted from the right of C?

**A) Four B) Two C) Three D) One**

Date: 18/06/2025 Time: 9:00 AM - 10:30 AM Right: 64.88% Wrong: 24.99%

**Q24)** P, Q, R, S, T, U and V are sitting around a circular table facing the centre. Only two people sit between T and Q when counted from the left of Q. U sits third to the left of S. P sits to the immediate right of S. P sits second to the left of T. V is an immediate neighbour of U. How many people sit between Q and R when counted from the left of R?

**A) 4 B) 2 C) 3 D) 1**

Date: 11/06/2025 Time: 12:45 PM - 2:15 PM Right: 64.94% Wrong: 13.07%

**Q25)** A, B, C, D, G, H, and I are sitting around a circular table facing the centre. H sits to the immediate right of D. Only three people sit between H and I when counted from the left of H. Only three people sit between D and C. A sits to the immediate right of G. How many people sit between D and G when counted from the right of G?

**A) One B) Three C) Two D) Four**

Date: 06/06/2025 Time: 9:00 AM - 10:30 AM Right: 65.16% Wrong: 16.74%

**Q26)** P, Q, R, S, T, U and V are sitting around a circular table facing the centre. Only two people sit between T and S when counted from the right of T. Only three people sit between V and Q when counted from the right of Q. S sits to the immediate right of Q. U sits to the immediate right of R. How many people sit between Q and U when counted from the right of Q?

**A) 1 B) 3 C) 4 D) 2**

Date: 05/06/2025 Time: 9:00 AM - 10:30 AM Right: 66.15% Wrong: 14.05%

**Q27)** A, B, C, D, E, F and G are sitting around a circular table facing the centre. A sits third to the right of G. C sits second to the right of D. G is not an immediate neighbour of C. E sits to the immediate left of B. How many people sit between D and B when counted from the left of D?

**A) Three B) Two C) None D) Four**

Date: 13/06/2025 Time: 4:30 PM - 6:00 PM Right: 66.17% Wrong: 18.91%

**Q28)** A, B, C, D, E, F, and G are sitting around a circular table facing the centre. D sits to the immediate right of B. Only three people sit between D and E when counted from the left of D. Only three people sit between B and C. F sits to the immediate right of A. How many people sit between A and B when counted from the left of A?

**A) One B) Two C) Three D) Four**

Date: 19/06/2025 Time: 4:30 PM - 6:00 PM Right: 66.36% Wrong: 21.81%

**Q29)** Seven people, A, B, C, D, S, T, and U are sitting in a row, facing north. Only two people sit between T and C. Only D sits to the right of U. Only one person sits between C and U. B sits at some place to the right of S but at some place to the left of A. How many people sit between A and S?

**A) One B) Two C) Three D) Four**

Date: 24/06/2025 Time: 12:45 PM - 2:15 PM Right: 66.40% Wrong: 18.39%

**Q30)** Karuna, Jyoti, Shiv, Ram, Puran, Om and Luv are sitting around a circular table, facing the centre. Shiv sits third to the left of Luv. Karuna sits second to the left of Shiv. Jyoti sits third to the right of Puran. Ram sits second to the right of Jyoti. Ram is not an immediate neighbour of Shiv. Who sits to the immediate left of Ram?

**A) Luv B) Karuna C) Om D) Puran**

Date: 16/06/2025 Time: 4:30 PM - 6:00 PM Right: 66.74% Wrong: 15.68%

**Q31)** D, E, F, G, M, N and O are sitting around a circular table, facing the centre of the table. N sits to the immediate left of D. G sits to the immediate left of E. E sits second to the left of O. F sits third to the left of D. Who sits fourth to the right of M?

**A) G B) O C) F D) D**

Date: 12/06/2025 Time: 9:00 AM - 10:30 AM Right: 66.77% Wrong: 19.25%

**Q32)** A, B, C, D, E, F and G are sitting around a circular table facing the centre. D sits third to the right of C. A sits second to the right of B. B is not an immediate neighbour of C. G sits to the immediate right of F. C sits to the immediate left of F. How many people sit between G and E when counted from the left of G?

**A)** Three **B)** None **C)** Two **D)** One

Date: 13/06/2025 Time: 9:00 AM - 10:30 AM Right: 67.27% Wrong: 19.18%

**Q33)** A, B, C, D, E, F and G are sitting around a circular table facing the centre. B sits third to the left of C. F sits second to the left of E. B is not an immediate neighbour of E. D sits to the immediate right of A. What is the position of B with respect to G?

**A)** To the immediate right **B)** To the immediate left **C)** Second to the left **D)** Third to the left

Date: 14/06/2025 Time: 12:45 PM - 2:15 PM Right: 67.38% Wrong: 20.37%

**Q34)** A, B, C, D, E, F, and G are sitting around a circular table facing the centre. B sits third to the left of F. C sits second to the left of D. Only F sits between A and C. G is not an immediate neighbour of B. How many people sit between A and D when counted from the left of D?

**A)** One **B)** Four **C)** Two **D)** Three

Date: 19/06/2025 Time: 12:45 PM - 2:15 PM Right: 67.42% Wrong: 16.88%

**Q35)** P, Q, R, S, T, U and V are sitting around a circular table facing the centre. R sits third to the left of Q. P sits second to the left of T. Both U and P are immediate neighbours of Q. V is not an immediate neighbour of R. How many people live between T and U when counted from the left of T?

**A)** 3 **B)** 1 **C)** 4 **D)** 2

Date: 10/06/2025 Time: 9:00 AM - 10:30 AM Right: 67.95% Wrong: 14.22%

**Q36)** Seven people, A, B, L, M, N, S, and T are sitting in a row, facing north. Only L sits to the left of S. Only four people sit between L and N. Only M sits between A and B, and A is not an immediate neighbour of N. Who sits at the extreme right of the line?

**A)** A **B)** N **C)** D **D)** T

Date: 23/06/2025 Time: 9:00 AM - 10:30 AM Right: 68.11% Wrong: 22.59%

**Q37)** P, Q, R, S, T, U and V are sitting around a circular table facing the centre. Only two people sit between P and T when counted from the right of P. Only two people sit between T and V. Only three people sit between P and Q. R sits to the immediate left of U. How many people sit between Q and U when counted from the left of Q?

**A)** 2 **B)** 3 **C)** 1 **D)** 4

Date: 11/06/2025 Time: 4:30 PM - 6:00 PM Right: 68.72% Wrong: 16.64%

**Q38)** Seven friends, F, G, H, I, O, P and Q, are sitting in a row facing north. Only two people sit between I and G. Only H sits to the right of F. Only one person sits between G and F. O sits at some place to the right of P but at some place to the left of Q. Who sits third from the right end of the line?

**A) F B) G C) H D) Q**

Date: 16/06/2025 Time: 4:30 PM - 6:00 PM Right: 68.88% Wrong: 13.90%

**Q39)** Seven people, I, J, K, L, O, P and Q are sitting in a row, facing north. Only J sits to the left of Q. Only four people sit between J and I. Only O sits between P and K and P is not an immediate neighbour of I. Who sits at the extreme right end of the row?

**A) O B) K C) L D) I**

Date: 06/06/2025 Time: 12:45 PM - 2:15 PM Right: 68.93% Wrong: 22.10%

**Q40)** Seven people D, E, F, G, L, M and N are sitting in a row, facing north. Only five people sit between M and L. F sits to the immediate left of L. Only one person sits between F and E. N sits at some place to the left of G but at some place to the right of D. Who sits third from the left end of the row?

**A) N B) D C) G D) F**

Date: 23/06/2025 Time: 9:00 AM - 10:30 AM Right: 69.09% Wrong: 18.43%

**Q41)** A, B, C, D, G, H and I are sitting around a circular table facing the centre of the table. G sits to the immediate left of D. B sits to the immediate left of C. C sits second to the left of A. I sits third to the left of D. Who sits third to the right of H?

**A) D B) I C) A D) C**

Date: 14/06/2025 Time: 9:00 AM - 10:30 AM Right: 69.11% Wrong: 17.25%

**Q42)** A, B, C, D, E, F, and G are sitting around a circular table facing the centre. Only one person sits between G and E when counted from the right of G. Only one person sits between E and B. Only one person sits between G and F. Only two people sit between C and B. Only one person sits between D and F. How many people sit between A and D when counted from the right of D?

**A) One B) Three C) Four D) Two**

Date: 21/06/2025 Time: 12:45 PM - 2:15 PM Right: 69.51% Wrong: 15.43%

**Q43)** Seven friends, D, E, F, G, M, N and O, are sitting in a row facing north. Only five people sit between G and D. F sits to the immediate left of D. Only one person sits between F and M. O sits at some place to the left of E but at some place to the right of N. Who sits third from the left end of the line?

**A) F B) M C) N D) O**

Date: 17/06/2025 Time: 4:30 PM - 6:00 PM Right: 69.77% Wrong: 16.61%

**Q44)** Seven people, I, J, K, L, O, P and Q are sitting in a row, facing north. Only three people sit to the left of P. Only I sits to the right of Q. Only three people sit between Q and K. L sits at some place to the left of J but at some place to the right of O. How many people sit between O and J?

**A) Two B) Four C) One D) Three**

Date: 10/06/2025 Time: 12:45 PM - 2:15 PM Right: 70.17% Wrong: 15.44%

**Q45)** D, E, F, G, H, I and P are sitting around a circular table facing the centre of the table. Only four people sit between D and P when counted from the right of D. D sits third to the left of H. G sits third to the left of E. I is an immediate neighbour of both P and H. How many people sit between F and I when counted from the right of F?

**A) One B) Four C) Three D) Two**

Date: 19/06/2025 Time: 9:00 AM - 10:30 AM Right: 70.20% Wrong: 11.18%

**Q46)** A, B, C, D, E, F and G are sitting around a circular table facing the centre. C sits third to the left of B. A sits second to the left of G. G is not an immediate neighbour of C. D sits to the immediate left of E. How many people sit between A and E when counted from the left of A?

**A) One B) Two C) None D) Four**

Date: 14/06/2025 Time: 9:00 AM - 10:30 AM Right: 70.66% Wrong: 17.06%

**Q47)** Seven people D, E, F, G, L, M and N are sitting in a row, facing north. Only two people sit to the left of L. Only three people sit between L and E. G sits second to the right of L. Only two people sit between G and M. D sits at some place to the right of N but at some place to the left of F. How many people sit to the right of D?

**A) Four B) Two C) Three D) One**

Date: 23/06/2025 Time: 4:30 PM - 6:00 PM Right: 70.68% Wrong: 14.94%

**Q48)** A, B, C, D, R, S and T are sitting around a circular table facing the centre of the table. Only one person sits between T and S when counted from the right of T. Only one person sits between S and C. Only one person sits between T and R. Only two people sit between A and C. Only one person sits between B and R. Who sits third to the right of D?

**A) C B) A C) T D) S**

Date: 18/06/2025 Time: 4:30 PM - 6:00 PM Right: 70.84% Wrong: 9.69%

**Q49)** Seven friends, E, F, G, H, I, J and Q, are sitting in a row facing north. Only three people sit to the left of Q. Only H sits to the right of E. Only three people sit between E and J. I sits at some place to the left of F but at some place to the right of G. How many people sit between G and F?

**A) Two B) Three C) Four D) One**

Date: 20/06/2025 Time: 4:30 PM - 6:00 PM Right: 71.44% Wrong: 13.82%

**Q50)** A, B, C, D, R, S and T are sitting around a circular table facing the centre of the table. T sits to the immediate right of D. Only three people sit between T and S when counted from the left of T. Only three people sit between D and C. A sits to the immediate right of R. How many people sit between B and R when counted from the left of R?

**A) Four B) Two C) One D) Three**

Date: 17/06/2025 Time: 12:45 PM - 2:15 PM Right: 71.60% Wrong: 12.77%

**Q51)** A, B, C, D, G, H, and I are sitting around a circular table facing the centre. Only two people sit between A and H when counted from the right of A. Only two people sit between H and D. Only three people sit between A and B. C sits to the immediate left of I. Who sits third to the left of G?

**A) H B) A C) C D) I**

Date: 05/06/2025 Time: 12:45 PM - 2:15 PM Right: 71.63% Wrong: 13.55%

**Q52)** Seven people, N, O, P, Q, R, S and T, are sitting in a straight line facing north. T is sitting at one of the ends of the line. Only two people are sitting to the left of R. P is sitting to the immediate right of R and immediate left of S. Q is sitting to the immediate left of O. Q does not sit at an extreme end of the line. How many people are sitting between O and N?

**A) Two B) Zero C) Four D) One**

Date: 05/06/2025 Time: 9:00 AM - 10:30 AM Right: 71.93% Wrong: 12.20%

**Q53)** F, G, H, I, J, K and X are sitting around a circular table facing the centre of the table. H sits to the immediate right of F. Only three people sit between H and G when counted from the left of H. X sits third to the right of F. I sits to the immediate right of K. How many people sit between J and K when counted from the left of K?

**A) Two B) One C) Four D) Three**

Date: 09/06/2025 Time: 9:00 AM - 10:30 AM Right: 72.10% Wrong: 13.67%

**Q54)** Seven people, A, B, L, M, N, S, and T are sitting in a row, facing north. Only two people sit to the left of S. Only three people sit between S and B. T sits second to the right of S. Only two people sit between T and M. L sits at some place to the right of A but at some place to the left of N. How many people sit to the right of L?

**A) Three B) Two C) One D) Four**

Date: 21/06/2025 Time: 12:45 PM - 2:15 PM Right: 72.18% Wrong: 14.65%

**Q55)** A, B, C, D, R, S and T are sitting around a circular table facing the centre of the table. Only four people sit between B and D when counted from the right of B. B sits third to the left of C. T sits third to the left of R. S is an immediate neighbour of both D and C. How many people sit between A and S when counted from the right of A?

**A) Three B) One C) Four D) Two**

Date: 11/06/2025 Time: 9:00 AM - 10:30 AM Right: 72.36% Wrong: 9.66%

**Q56)** A, B, C, D, G, H and I are sitting around a circular table facing the centre of the table. Only two people sit between H and B when counted from the right of H. Only three people sit between A and C when counted from the right of C. B sits to the immediate right of C. G sits to the immediate right of I. Who sits fourth to the right of D?

**A) G B) I C) C D) A**

Date: 13/06/2025 Time: 4:30 PM - 6:00 PM Right: 72.36% Wrong: 10.05%

**Q57)** A, B, C, D, E, F, and G are sitting around a circular table facing the centre. Only two people sit between D and F when counted from the left of F. E sits third to the left of G. A sits to the immediate right of G. A sits second to the left of D. B is an immediate neighbour of E. How many people sit between C and F when counted from the left of C?

**A) Two B) Four C) Three D) One**

Date: 19/06/2025 Time: 9:00 AM - 10:30 AM Right: 72.46% Wrong: 11.40%

**Q58)** A, B, L, M, S, T and Z are sitting around a circular table facing the centre. M sits to the immediate right of T. Only three people sit between M and A when counted from the left of M. Only three people sit between T and Z. L sits to the immediate right of S. How many people sit between B and S when counted from the left of S?

**A) 1 B) 3 C) 4 D) 2**

Date: 20/06/2025 Time: 4:30 PM - 6:00 PM Right: 72.63% Wrong: 13.52%

**Q59)** Seven people, A, B, L, M, N, S, and T are sitting in a row, facing north. Only two people sit to the right of T. Only two people sit between T and N. Only two people sit between M and A. A sits to the immediate left of T. B sits to the immediate right of S. Who sits at third position from the left end of the line?

**A) L B) D C) T D) A**

Date: 23/06/2025 Time: 12:45 PM - 2:15 PM Right: 72.75% Wrong: 14.35%

**Q60)** Seven people, A, B, C, D, S, T, and U are sitting in a row, facing north. No one sits to the right of D. Only three people sit between D and S. Only two people sit between S and T. C sits third to the left of U. A sits to the immediate right of U. How many people sit between B and T?

**A) Four B) Three C) One D) Two**

Date: 24/06/2025 Time: 4:30 PM - 6:00 PM Right: 72.90% Wrong: 14.56%

**Q61)** M, N, O, P, Q, R and X are sitting around a circular table facing the centre of the table. Only four people sit between Q and R when counted from the right of Q. Q sits third to the left of X. P sits third to the left of M. N is an immediate neighbour of R and X. How many people sit between O and N when counted from the right of O?

**A) Three B) One C) Four D) Two**

Date: 11/06/2025 Time: 4:30 PM - 6:00 PM Right: 72.93% Wrong: 11.88%

**Q62)** Seven friends, A, B, C, D, N, O and P, are sitting in a straight row facing north. No one sits to the right of A. Only three people sit between A and D. Only two people sit between D and B. C sits third to the left of P. N sits to the immediate right of P. How many people sit between O and B?

**A) One B) Four C) Three D) Two**

Date: 17/06/2025 Time: 9:00 AM - 10:30 AM Right: 73.19% Wrong: 14.82%

**Q63)** Ansh, Kautuk, Swati, Vansh, Navya, Deepak and Rani are sitting around a circular table, facing the centre. Kautuk sits second to the right of Swati. Vansh sits to the immediate left of Ansh. Ansh sits second to the left of Swati. Navya sits third to the right of Rani. Who sits third to the left of Deepak?

**A) Rani B) Navya C) Ansh D) Vansh**

Date: 17/06/2025 Time: 12:45 PM - 2:15 PM Right: 73.21% Wrong: 10.91%

**Q64)** Seven people, I, J, K, L, O, P and Q are sitting in a row, facing north. Only five people sit between L and Q. P sits to the immediate left of Q. Only one person sits between P and I. O sits at some place to the left of K but at some place to the right of J. Who sits third from the left end of the line?

**A) P B) Q C) O D) J**

Date: 05/06/2025 Time: 4:30 PM - 6:00 PM Right: 73.49% Wrong: 12.33%

**Q65)** A, B, C, D, G, H, and I are sitting around a circular table facing the centre. Only two people sit between D and A when counted from the left of A. H sits third to the left of G. I sits to the immediate right of G. I sits second to the left of D. B is not an immediate neighbor of H. Who sits third to the right of C?

**A) D B) A C) I D) H**

Date: 06/06/2025 Time: 4:30 PM - 6:00 PM Right: 73.57% Wrong: 8.80%

**Q66)** Seven people, I, J, K, L, O, P and Q are sitting in a row, facing north. No one sits to the right of I. Only three people sit between I and J. Only two people sit between J and Q. L sits third to the left of P. K sits to the immediate right of P. How many people sit between O and Q?

**A) Three B) One C) Two D) Four**

Date: 09/06/2025 Time: 4:30 PM - 6:00 PM Right: 73.67% Wrong: 14.43%

**Q67)** Q, R, S, T, U, V and Y are sitting around a circular table facing the centre of the table. Y sits fourth to the left of S. R sits fourth to the right of T. Only two people sit between S and T when counted from the left of S. V is not an immediate neighbour of R or T. U is not an immediate neighbour of V. Who sits third to the right of Q?

**A) Y B) T C) U D) R**

Date: 19/06/2025 Time: 4:30 PM - 6:00 PM Right: 73.77% Wrong: 10.65%

**Q68)** D, E, F, G, H, I and K are sitting around a circular table facing the centre of the table. I sits third to the left of H. E sits second to the left of G. Only H sits between D and E. K is not an immediate neighbour of I. How many people sit between F and E when counted from the right of F?

**A) Three B) Four C) One D) Two**

Date: 09/06/2025 Time: 12:45 PM - 2:15 PM Right: 73.82% Wrong: 11.06%

**Q69)** A, B, C, D, G, H, and I are sitting around a circular table facing the centre. B sits third to the left of I. G sits second to the left of H. Only I sits between A and G. C is not an immediate neighbor of B. How many people sit between D and G when counted from the right of D?

**A) Four B) One C) Two D) Three**

Date: 06/06/2025 Time: 12:45 PM - 2:15 PM Right: 73.96% Wrong: 13.60%

**Q70)** Dipti, Priti, Neeti, Reeti, Swati, Kirti and Jyoti are sitting around a circular table, facing the centre. Dipti sits second to the right of Priti. Jyoti sits to the immediate left of Priti. Swati is an immediate neighbour of both Jyoti and Neeti. Reeti is an immediate neighbour of Priti. Who sits second to the left of Neeti?

**A) Reeti B) Jyoti C) Priti D) Dipti**

Date: 18/06/2025 Time: 12:45 PM - 2:15 PM Right: 73.96% Wrong: 16.05%

**Q71)** A, B, C, D, R, S and T are sitting around a circular table facing the centre of the table. B sits third to the left of T. R sits second to the left of S. Only T sits between A and R. C is not an immediate neighbour of B. How many people sit between D and R when counted from the right of D?

**A) Three B) Four C) One D) Two**

Date: 16/06/2025 Time: 12:45 PM - 2:15 PM Right: 74.44% Wrong: 9.91%

**Q72)** Seven friends, I, J, K, L, M, N and R, are sitting in a row facing north. No one sits to the right of M. Only three people sit between M and R. Only two people sit between R and L. K sits third to the left of I. J sits to the immediate right of I. How many people sit between N and L?

**A) Two B) One C) Four D) Three**

Date: 20/06/2025 Time: 12:45 PM - 2:15 PM Right: 74.55% Wrong: 14.98%

**Q73)** A, B, C, D, G, H, and I are sitting around a circular table facing the centre. Only one person sits between H and I when counted from the right of H. Only one person sits between I and C. Only one person sits between H and G. Only two people sit between A and C. Only one person sits between B and G. Who sits third to the right of D ?

**A) C B) G C) A D) I**

Date: 09/06/2025 Time: 4:30 PM - 6:00 PM Right: 74.74% Wrong: 8.62%

**Q74)** A, B, L, M, S, T and Z are sitting around a circular table facing the centre. T sits third to the left of S. M sits second to the left of A. Only S sits between L and M. B is not an immediate neighbour of T. How many people sit between Z and M when counted from the right of Z?

**A) 1 B) 2 C) 3 D) 4**

Date: 23/06/2025 Time: 12:45 PM - 2:15 PM Right: 74.98% Wrong: 11.02%

**Q75)** Seven people, A, B, L, M, N, S, and T are sitting in a row, facing north. Only five people sit between T and A. N sits to the immediate left of A. Only one person sits between N and L. M sits at some place to the left of S but at some place to the right of B. Who sits third from the left end of the line?

**A) A B) T C) M D) B**

Date: 21/06/2025 Time: 4:30 PM - 6:00 PM Right: 75.01% Wrong: 10.59%

**Q76)** Seven friends, K, L, M, N, O, P and S, are sitting in a row facing north. Only two people sit to the left of S. Only three people sit between S and O. K sits second to the right of S. Only two people sit between K and M. L sits at some place to the right of N but at some place to the left of P. How many people sit to the right of L?

**A) Three B) Four C) Two D) One**

Date: 18/06/2025 Time: 12:45 PM - 2:15 PM Right: 75.09% Wrong: 13.01%

**Q77)** Seven people, A, B, L, M, N, S, and T are sitting in a row, facing north. Only three people sit between A and S. M sits to the immediate left of S. No one sits to the right of T. Only two people sit between T and M. N sits to the immediate right of L. How many people sit between B and N?

**A) One B) Two C) Four D) Three**

Date: 23/06/2025 Time: 4:30 PM - 6:00 PM Right: 75.69% Wrong: 11.75%

**Q78)** Prabhat, Dinesh, Yug, Monu, Sakshi, Amit and Shipra are sitting around a circular table, facing the centre. Yug sits second to the left of Amit. Prabhat sits third to the right of Amit. Monu sits to the immediate right of Dinesh. Shipra is not an immediate neighbour of Prabhat. Who sits second to the left of Dinesh?

**A) Shipra B) Sakshi C) Prabhat D) Yug**

Date: 17/06/2025 Time: 4:30 PM - 6:00 PM Right: 75.88% Wrong: 11.95%

**Q79)** Seven friends, C, D, E, F, G, H and P, are sitting in a row facing north. Only three people sit between F and C. P sits to the immediate left of C. No one sits to the right of E. Only two people sit between E and P. H sits to the immediate right of D. How many people sit between G and H?

**A) Three B) Two C) One D) Four**

Date: 20/06/2025 Time: 9:00 AM - 10:30 AM Right: 75.98% Wrong: 9.19%

**Q80)** A, B, C, D, R, S and T are sitting around a circular table facing the centre of the table. S sits fourth to the left of C. R sits fourth to the right of A. Only two people sit between C and A when counted from the left of C. D is not an immediate neighbour of R or C. B is not an immediate neighbour of D. Who sits fourth to the right of T?

**A) A B) C C) S D) R**

Date: 12/06/2025 Time: 12:45 PM - 2:15 PM Right: 76.38% Wrong: 7.05%

**Q81)** Kabir, Jasbir, Urmila, Richa, Prem, Deep and Sonika are sitting around a circular table, facing the centre. Sonika sits third to the right of Prem. Kabir sits to the immediate right of Deep. Jasbir sits second to the left of Sonika. Urmila sits third to the right of Jasbir. Who sits second to the left of Urmila?

**A) Jasbir B) Kabir C) Richa D) Prem**

Date: 17/06/2025 Time: 9:00 AM - 10:30 AM Right: 76.65% Wrong: 10.32%

**Q82)** A, B, L, M, S, T and Z are sitting around a circular table facing the centre. Only four people sit between M and T when counted from the right of M. M sits third to the left of L. S sits third to the left of Z. B is an immediate neighbour of both T and L. How many people sit between A and B when counted from the right of A?

**A) 2 B) 1 C) 3 D) 4**

Date: 21/06/2025 Time: 9:00 AM - 10:30 AM Right: 77.08% Wrong: 9.59%

**Q83)** Seven people, I, J, K, L, O, P and Q are sitting in a row, facing north. Only three people sit between I and J. L sits to the immediate left of J. No one sits to the right of Q. Only two people sit between Q and L. K sits to the immediate right of P. How many people sit between O and K?

**A) One B) Four C) Three D) Two**

Date: 13/06/2025 Time: 12:45 PM - 2:15 PM Right: 77.24% Wrong: 10.20%

**Q84)** Seven people, I, J, K, L, O, P and Q are sitting in a row, facing north. Only two people sit to the right of I. Only two people sit between I and O. Only two people sit between J and P. P sits to the immediate left of I. Q sits to the immediate right of L. Who sits at third position from the left end of the line?

**A) I B) O C) Q D) K**

Date: 16/06/2025 Time: 9:00 AM - 10:30 AM Right: 77.39% Wrong: 10.18%

**Q85)** A, B, C, D, R, S and T are sitting around a circular table facing the centre of the table. Only two people sit between A and R when counted from the right of A. Only two people sit between R and D. Only three people sit between A and B. C sits to the immediate left of T. Who sits third to the left of S?

**A) D B) T C) C D) A**

Date: 12/06/2025 Time: 4:30 PM - 6:00 PM Right: 77.62% Wrong: 11.76%

**Q86)** Seven people, A, B, C, D, Q, R and S are sitting in a row, facing north. Only three people sit between A and B. R sits to the immediate left of B. No one sits to the right of D. Only two people sit between D and R. C sits to the immediate right of S. How many people sit between Q and C?

**A) Four B) One C) Three D) Two**

Date: 24/06/2025 Time: 9:00 AM - 10:30 AM Right: 77.79% Wrong: 9.53%

**Q87)** Seven people, I, J, K, L, O, P and Q are sitting in a row, facing north. Only two people sit to the left of P. Only three people sit between P and I. Only one person sits between I and O. Q sits to the immediate left of K. J is not an immediate neighbour of I. How many people sit to the right of L?

**A) Three B) One C) Four D) Two**

Date: 11/06/2025 Time: 9:00 AM - 10:30 AM Right: 78.78% Wrong: 8.06%

**Q88)** A, B, C, D, G, H and I are sitting around a circular table facing the centre of the table. Only B sits between H and A. A sits third to the left of D. G sits to the immediate left of D. C is not an immediate neighbour of A. Who sits third to the left of I?

**A) G B) C C) A D) H**

Date: 14/06/2025 Time: 12:45 PM - 2:15 PM Right: 79.60% Wrong: 11.23%

**Q89)** Seven people, D, E, F, G, L, M and N, are sitting in a row, facing north. Only M sits to the left of N. Only four people sit between M and L. Only F sits between G and D, and G is not an immediate neighbour of L. Who sits at the extreme right of the line?

**A) N B) D C) E D) G**

Date: 20/06/2025 Time: 12:45 PM - 2:15 PM Right: 79.65% Wrong: 11.12%

**Q90)** D, E, F, G, M, N and O are sitting around a circular table, facing the centre of the table. Only E sits between N and M. M sits third to the left of O. G sits to the immediate left of O. D is not an immediate neighbour of M. Who sits third to the left of F?

**A) M B) N C) E D) D**

Date: 12/06/2025 Time: 12:45 PM - 2:15 PM Right: 81.42% Wrong: 9.12%

**Q91)** Seven people, D, E, F, G, Q, R and S, are sitting in a row facing north. No one sits to the left of F. Only four people sit between F and D. Only three people sit to the right of Q. G sits to the immediate left of S. E is not an immediate neighbour of Q. Who sits at the rightmost end of the line?

**A) E B) S C) D D) F**

Date: 12/06/2025 Time: 9:00 AM - 10:30 AM Right: 81.70% Wrong: 8.66%

**Q92)** Seven friends, A, B, C, D, P, Q and R, are sitting in a straight line facing north. Only two people sit to the left of R. Only three people sit between R and P. Only one person sits between P and A. D sits to the immediate left of Q. B is not an immediate neighbour of P. How many people sit to the right of C?

**A) One B) Two C) Four D) Three**

Date: 16/06/2025 Time: 9:00 AM - 10:30 AM Right: 82.77% Wrong: 6.81%

**Q93)** Seven friends, A, B, C, D, E, F and O, are sitting in a row facing north. Only two people sit to the left of F. Only three people sit between F and A. Only one person sits between A and O. D sits to the immediate left of C. E is not an immediate neighbour of A. How many people sit to the right of B?

**A) Four B) One C) Two D) Three**

Date: 21/06/2025 Time: 9:00 AM - 10:30 AM Right: 82.86% Wrong: 6.10%

**Q94)** Seven people, I, J, K, L, O, P and Q are sitting in a row, facing north. No one sits to the left of J. Only four people sit between J and K. Only three people sit to the right of O. I sits to the immediate left of L. P is not an immediate neighbour of O. Who sits at the rightmost end of the line?

**A) P B) J C) I D) L**

Date: 12/06/2025 Time: 4:30 PM - 6:00 PM Right: 85.01% Wrong: 7.06%

### Answer Key (Q1 to Q94) Seating Arrangement

Q1: 1	Q2: 4	Q3: 2	Q4: 1	Q5: 4
Q6: 2	Q7: 3	Q8: 3	Q9: 3	Q10: 3
Q11: 3	Q12: 1	Q13: 2	Q14: 1	Q15: 2
Q16: 3	Q17: 3	Q18: 4	Q19: 3	Q20: 3
Q21: 4	Q22: 2	Q23: 1	Q24: 2	Q25: 1
Q26: 4	Q27: 2	Q28: 4	Q29: 2	Q30: 1

Q31: 2	Q32: 1	Q33: 2	Q34: 4	Q35: 1
Q36: 4	Q37: 3	Q38: 4	Q39: 3	Q40: 1
Q41: 2	Q42: 4	Q43: 4	Q44: 4	Q45: 4
Q46: 2	Q47: 3	Q48: 4	Q49: 2	Q50: 2
Q51: 4	Q52: 3	Q53: 1	Q54: 1	Q55: 4
Q56: 1	Q57: 1	Q58: 4	Q59: 1	Q60: 2
Q61: 4	Q62: 3	Q63: 3	Q64: 3	Q65: 3
Q66: 1	Q67: 4	Q68: 4	Q69: 3	Q70: 4
Q71: 4	Q72: 4	Q73: 4	Q74: 2	Q75: 3
Q76: 1	Q77: 2	Q78: 1	Q79: 2	Q80: 3
Q81: 3	Q82: 1	Q83: 4	Q84: 4	Q85: 2
Q86: 4	Q87: 2	Q88: 4	Q89: 3	Q90: 2
Q91: 1	Q92: 1	Q93: 2	Q94: 1	

## Statement- Conclusion

**Q1)** Read the given statements and conclusions carefully. Assuming that the information given in the statements is true, even if it appears to be at variance with commonly known facts, decide which of the given conclusion(s) logically follow(s) from the statements.

### Statements:

All tanks are figs.

No eagles are tanks.

Some mugs are eagles.

### Conclusions:

(I) Some figs are not eagles.

(II) Some mugs are not tanks.

**A)** Only conclusion (I) follows. **B)** Both conclusions (I) and (II) follow.

**C)** Neither conclusion (I) nor (II) follows. **D)** Only conclusion (II) follows.

Date: 24/06/2025 Time: 4:30 PM - 6:00 PM Right: 30.75% Wrong: 65.21%

**Q2)** Read the given statements and conclusions carefully. Assuming that the information given in the statements is true, even if it appears to be at variance with commonly known facts, decide which of the given conclusion(s) logically follow(s) from the statements.

**Statements:**

All cats are bills.  
No snakes are bills.  
All snakes are dolls.

**Conclusions:**

(I) Some dolls are not cats.  
(II) No bills are dolls.

- A)** Both conclusions (I) and (II) follow. **B)** Only conclusion (I) follows. **C)** Only conclusion (II) follows.  
**D)** Neither conclusion (I) nor (II) follows.

Date: 24/06/2025 Time: 12:45 PM - 2:15 PM Right: 30.82% Wrong: 64.12%

**Q3)** Read the given statements and conclusions carefully. Assuming that the information given in the statements is true, even if it appears to be at variance with commonly known facts, decide which of the given conclusion(s) logically follow(s) from the statements.

**Statements:**

All cats are owls.  
Some owls are rats.  
No rat is bat.

**Conclusions:**

(I) Some rats are cats.  
(II) Some bats can be cats.

- A)** Only conclusion (I) follows **B)** Neither conclusion (I) nor conclusion (II) follows  
**C)** Only conclusion (II) follows **D)** Both conclusions (I) and (II) follow

Date: 16/06/2025 Time: 12:45 PM - 2:15 PM Right: 42.56% Wrong: 54.06%

**Q4)** Read the given statements and conclusions carefully. Assuming that the information given in the statements is true, even if it appears to be at variance with commonly known facts, decide which of the given conclusion(s) logically follow(s) from the statements.

**Statements:**

- All lions are tigers.
- Some tigers are leopard.
- No leopard is giraffe.

**Conclusions:**

- (I) Some leopards are lions.
- (II) Some giraffe can be tigers.

- A)** Both conclusions (I) and (II) follow   **B)** Only conclusion (I) follows  
**C)** Either conclusion (I) or conclusion (II) follows   **D)** Only conclusion (II) follows

Date: 16/06/2025   Time: 4:30 PM - 6:00 PM   Right: 52.91%   Wrong: 43.28%

**Q5)** Read the given statements and conclusions carefully. Assuming that the information given in the statements is true, even if it appears to be at variance with commonly known facts, decide which of the given conclusion(s) logically follow(s) from the statements.

**Statements:**

- All bottles are glasses.
- No glasses are plates.
- Some plates are spoons.

**Conclusion (I)** No bottles are plates.

**Conclusion (II)** No spoons are glasses.

- A)** Only Conclusion (II) is true   **B)** Both Conclusion (I) and (II) are true  
**C)** Neither Conclusion (I) nor (II) is true   **D)** Only Conclusion (I) is true

Date: 23/06/2025   Time: 12:45 PM - 2:15 PM   Right: 57.38%   Wrong: 40.14%

**Q6)** Read the given statements and conclusions carefully. Assuming that the information given in the statements is true, even if it appears to be at variance with commonly known facts, decide which of the given conclusions logically follow(s) from the statements.

**Statements:**

All tubs are shirts.

Some shirts are jams.

No jam is a coat.

**Conclusions:**

(I) No tub is a coat.

(II) Some jams are tubs.

- A)** Only conclusion (II) follows   **B)** Only conclusion (I) follows   **C)** Neither conclusion (I) nor (II) follows  
**D)** Both conclusions (I) and (II) follow

Date: 09/06/2025   Time: 12:45 PM - 2:15 PM   Right: 60.37%   Wrong: 37.24%

**Q7)** Read the given statements and conclusions carefully. Assuming that the information given in the statements is true, even if it appears to be at variance with commonly known facts, decide which of the given conclusion(s) logically follow(s) from the statements.

**Statements:**

All animals are deer.

All animals are bears.

All animals are cows.

**Conclusions:**

(I) All deer are cows.

(II) Some cows are bears.

- A)** Only conclusion (I) follows.   **B)** Both conclusions (I) and (II) follow.  
**C)** Neither conclusion (I) nor (II) follows.   **D)** Only conclusion (II) follows.

Date: 24/06/2025   Time: 9:00 AM - 10:30 AM   Right: 61.13%   Wrong: 36.30%

**Q8)** Read the given statements and conclusions carefully. Assuming that the information given in the statements is true, even if it appears to be at variance with commonly known facts, decide which of the given conclusion(s) logically follow(s) from the statements.

**Statements:**

All letters are message.

Some messages are emails.

No email is a post.

**Conclusions:**

(I) No letter is a post.

(II) Some emails are letters.

**A)** Both conclusions (I) and (II) follow **B)** Neither conclusion (I) nor (II) follows

**C)** Only conclusion (II) follows **D)** Only conclusion (I) follows

Date: 21/06/2025 Time: 4:30 PM - 6:00 PM Right: 61.72% Wrong: 35.43%

**Q9)** Read the given statements and conclusions carefully. Assuming that the information given in the statements is true, even if it appears to be at variance with commonly known facts, decide which of the given conclusion(s) logically follow(s) from the statements.

**Statements:**

All curtain are screen.

All curtain are blinder.

Some blinder are drape.

**Conclusions:**

(I) Some drape are curtain.

(II) Some blinder are screen.

**A)** Neither conclusion (I) nor (II) follows **B)** Both conclusions (I) and (II) follow

**C)** Only conclusion (I) follows **D)** Only conclusion (II) follows

Date: 20/06/2025 Time: 12:45 PM - 2:15 PM Right: 64.52% Wrong: 31.71%

**Q10)** Read the given statements and conclusions carefully. Assuming that the information given in the statements is true, even if it appears to be at variance with commonly known facts, decide which of the given conclusion(s) logically follow(s) from the statements.

**Statements:**

All burger are pizza.

All burger are fries.

All burger are taco.

**Conclusions:**

(I) All pizza are taco.

(II) Some taco are fries.

**A)** Both conclusions (I) and (II) follow   **B)** Neither conclusion (I) nor (II) follows

**C)** Only conclusion (I) follows   **D)** Only conclusion (II) follows

Date: 20/06/2025   Time: 4:30 PM - 6:00 PM   Right: 66.29%   Wrong: 30.25%

**Q11)** Read the given statements and conclusions carefully. Assuming that the information given in the statements is true, even if it appears to be at variance with commonly known facts, decide which of the given conclusion(s) logically follow(s) from the statements.

**Statements:**

All terraces are lawns.

All lawns are grounds.

No ground is a field.

**Conclusions:**

(I) No terrace is a field.

(II) Some grounds are terraces.

**A)** Only conclusion (I) follows.   **B)** Both conclusions (I) and (II) follow.

**C)** Neither conclusion (I) nor (II) follows.   **D)** Only conclusion (II) follows.

Date: 21/06/2025   Time: 9:00 AM - 10:30 AM   Right: 71.54%   Wrong: 26.13%

**Q12)** Read the given statements and conclusions carefully. Assuming that the information given in the statements is true, even if it appears to be at variance with commonly known facts, decide which of the given conclusion(s) logically follow(s) from the statements.

**Statements:**

All warriors are politicians.

All leaders are knights.

Some knights are warriors.

**Conclusions:**

(I) Some warriors are leaders.

(II) Some politicians are knights.

**A)** Only conclusion (II) follows. **B)** Only conclusion (I) follows. **C)** Both conclusions (I) and (II) follow.

**D)** Neither conclusion (I) nor (II) follows.

Date: 06/06/2025 Time: 4:30 PM - 6:00 PM Right: 72.18% Wrong: 25.39%

**Q13)** Read the given statements and conclusions carefully. Assuming that the information given in the statements is true, even if it appears to be at variance with commonly known facts, decide which of the given conclusions logically follow(s) from the statements.

**Statements:**

All jams are bands.

All bands are sacks.

No sack is a can.

**Conclusions:**

(I) No jam is a can.

(II) Some sacks are jams.

**A)** Neither conclusion (I) nor (II) follows. **B)** Only conclusion (I) follows. **C)** Only conclusion (II) follows.

**D)** Both conclusions (I) and (II) follow.

Date: 09/06/2025 Time: 9:00 AM - 10:30 AM Right: 72.29% Wrong: 24.74%

**Q14)** Read the given statements and conclusions carefully. Assuming that the information given in the statements is true, even if it appears to be at variance with commonly known facts, decide which of the given conclusion(s) logically follow(s) from the statements.

**Statements:**

All sparrows are parrots.

All parrots are macau.

Some sparrows are dove.

**Conclusions:**

(I) Some sparrows are macau.

(II) Some doves are parrots.

- A)** Both conclusions (I) and (II) follow   **B)** Only conclusion (I) follows   **C)** Only conclusion (II) follows  
**D)** Neither conclusion (I) nor conclusion (II) follows

Date: 17/06/2025   Time: 12:45 PM - 2:15 PM   Right: 72.29%   Wrong: 25.14%

**Q15)** Read the given statements and conclusions carefully. Assuming that the information given in the statements is true, even if it appears to be at variance with commonly known facts, decide which of the given conclusion(s) logically follow(s) from the statements.

**Statements:**

Some nuts are black.

All black are crows.

All crows are pens.

**Conclusions:**

(I) All nuts are black.

(II) Some black are crows.

- A)** Only conclusion (II) follows.   **B)** Both conclusions (I) and (II) follow.  
**C)** Neither conclusion (I) nor (II) follows.   **D)** Only conclusion (I) follows.

Date: 10/06/2025   Time: 4:30 PM - 6:00 PM   Right: 73.60%   Wrong: 24.69%

**Q16)** Read the given statements and conclusions carefully. Assuming that the information given in the statements is true, even if it appears to be at variance with commonly known facts, decide which of the given conclusion(s) logically follow(s) from the statements.

**Statements:**

All cars are buses.

All buses are trucks.

Some buses are ships.

**Conclusions:**

(I) Some ships are cars.

(II) All trucks are cars.

**A)** Neither conclusion (I) nor (II) follows. **B)** Only conclusion (I) follows.

**C)** Both conclusions (I) and (II) follow. **D)** Only conclusion (II) follows.

Date: 05/06/2025 Time: 12:45 PM - 2:15 PM Right: 73.85% Wrong: 24.40%

**Q17)** Read the given statements and conclusions carefully. Assuming that the information given in the statements is true, even if it appears to be at variance with commonly known facts, decide which of the given conclusion(s) logically follow(s) from the statements.

**Statements:**

All tablets are laptops.

No laptop is a desktop.

No laptop is a mobile.

**Conclusions:**

(I) No tablet is a desktop.

(II) Some mobiles are desktops.

**A)** Only conclusion (I) follows. **B)** Only conclusion (II) follows. **C)** Neither conclusion (I) nor (II) follows.

**D)** Both conclusions (I) and (II) follow.

Date: 23/06/2025 Time: 4:30 PM - 6:00 PM Right: 74.91% Wrong: 21.87%

**Q18)** Read the given statements and conclusions carefully. Assuming that the information given in the statements is true, even if it appears to be at variance with commonly known facts, decide which of the given conclusion(s) logically follow(s) from the statements.

**Statements:**

All keys are doors.

Some doors are cupboards.

All cupboards are big.

**Conclusions:**

(I) Some keys are doors.

(II) All doors are cupboards.

**A)** Neither conclusion (I) nor (II) follows. **B)** Only conclusion (II) follows.

**C)** Both conclusions (I) and (II) follow. **D)** Only conclusion (I) follows.

Date: 13/06/2025 Time: 4:30 PM - 6:00 PM Right: 75.76% Wrong: 21.82%

**Q19)** Read the given statements and conclusions carefully. Assuming that the information given in the statements is true, even if it appears to be at variance with commonly known facts, decide which of the given conclusion(s) logically follow(s) from the statements.

**Statements:**

All sweater are jacket.

All sweater are coat.

All coat are blazer.

**Conclusions:**

(I) All sweater are blazer.

(II) Some coat are jacket.

**A)** Only conclusion (I) follows **B)** Neither conclusion (I) nor (II) follows

**C)** Both conclusions (I) and (II) follow **D)** Only conclusion (II) follows

Date: 19/06/2025 Time: 9:00 AM - 10:30 AM Right: 75.81% Wrong: 20.79%

**Q20)** Read the given statements and conclusions carefully. Assuming that the information given in the statements is true, even if it appears to be at variance with commonly known facts, decide which of the given conclusion(s) logically follow(s) from the statements.

**Statements:**

All fruit are bananas.

Some bananas are green.

All green are leaves.

**Conclusions:**

(I) Some fruits are bananas.

(II) Some green are leaves.

- A)** Only conclusion (I) follows   **B)** Only conclusion (II) follows   **C)** Both conclusions (I) and (II) follow  
**D)** Neither conclusion (I) nor (II) follows

Date: 14/06/2025   Time: 9:00 AM - 10:30 AM   Right: 77.96%   Wrong: 19.89%

**Q21)** Read the given statement(s) and conclusions carefully. Assuming that the information given in the statement(s) is true, even if it appears to be at variance with commonly known facts, decide which of the given conclusions logically follow(s) from the statement(s).

**Statement:**

All grapes are apples.

All apples are kiwis.

Some kiwis are bananas.

**Conclusion:**

(I) All apples are bananas.

(II) Some kiwis are grapes.

- A)** Neither conclusion (I) nor (II) follows.   **B)** Only conclusion (II) follows.   **C)** Only conclusion (I) follows.  
**D)** Both conclusions I and II follow.

Date: 23/06/2025   Time: 9:00 AM - 10:30 AM   Right: 79.84%   Wrong: 17.67%

**Q22)** Read the given statements and conclusions carefully. Assuming that the information given in the statements is true, even if it appears to be at variance with commonly known facts, decide which of the given conclusion(s) logically follow(s) from the statements.

**Statements:**

Some deers are lions.  
Some frogs are deers.  
Some horses are lions.

**Conclusions:**

(I) Atleast some lions are frogs.  
(II) Some deers are horses.

- A)** Only conclusion (I) follows. **B)** Neither conclusion (I) nor (II) follows. **C)** Only conclusion (II) follows.  
**D)** Both conclusions (I) and (II) follow.

Date: 06/06/2025 Time: 9:00 AM - 10:30 AM Right: 80.53% Wrong: 16.09%

**Q23)** Read the given statements and conclusions carefully. Assuming that the information given in the statements is true, even if it appears to be at variance with commonly known facts, decide which of the given conclusion(s) logically follow(s) from the statements.

**Statements:**

All birds are omnivores.  
All omnivores are lions.  
Some birds are reptiles.

**Conclusions:**

(I) Some omnivores are reptiles.  
(II) Some reptiles are lions.

- A)** Both conclusions (I) and (II) follow. **B)** Only conclusion (I) follows. **C)** Only conclusion (II) follows.  
**D)** Either conclusion (I) or (II) follows.

Date: 18/06/2025 Time: 4:30 PM - 6:00 PM Right: 80.87% Wrong: 15.92%

**Q24)** Read the given statements and conclusions carefully. Assuming that the information given in the statements is true, even if it appears to be at variance with commonly known facts, decide which of the given conclusion(s) logically follow(s) from the statements.

**Statements:**

All chain are bracelet.

All bracelet are ring.

Some ring are tops.

**Conclusions:**

(I) All chain are ring.

(II) Some tops are chain.

**A)** Only conclusion (I) follows   **B)** Neither conclusion (I) nor (II) follows

**C)** Both conclusions (I) and (II) follow   **D)** Only conclusion (II) follows

Date: 20/06/2025   Time: 9:00 AM - 10:30 AM   Right: 81.44%   Wrong: 15.61%

**Q25)** Read the given statements and conclusions carefully. Assuming that the information given in the statements is true, even if it appears to be at variance with commonly known facts, decide which of the given conclusion(s) logically follow(s) from the statements.

**Statements:**

All induction are stove.

Some stove are oven.

Some oven are tandoor.

**Conclusions:**

(I) Some tandoor are induction.

(II) Some oven are induction.

**A)** Neither conclusion (I) nor (II) follows   **B)** Both conclusions (I) and (II) follow

**C)** Only conclusion (I) follows   **D)** Only conclusion (II) follows

Date: 21/06/2025   Time: 12:45 PM - 2:15 PM   Right: 81.70%   Wrong: 15.28%

**Q26)** Read the given statements and conclusions carefully. Assuming that the information given in the statements is true, even if it appears to be at variance with commonly known facts, decide which of the given conclusions logically follow(s) from the statements.

**Statements:**

All crabs are ties.  
Some ties are hooves.  
Some hooves are vents.

**Conclusions:**

(I): Some vents are crabs.  
(II): Some hooves are crabs.

- A)** Only conclusion (II) follows. **B)** Both conclusions (I) and (II) follow.  
**C)** Neither conclusion (I) nor (II) follows. **D)** Only conclusion (I) follows.

Date: 06/06/2025 Time: 12:45 PM - 2:15 PM Right: 82.18% Wrong: 14.56%

**Q27)** Read the given statements and conclusions carefully. Assuming that the information given in the statements is true, even if it appears to be at variance with commonly known facts, decide which of the given conclusion(s) logically follow(s) from the statements.

**Statements:**

All bears are cats.  
All cats are pandas.  
Some bears are tigers.

**Conclusions:**

(I) Some tigers are cats.  
(II) Some pandas are bears.

- A)** Neither conclusion (I) nor (II) follows **B)** Only conclusion (II) follows **C)** Only conclusion (I) follows  
**D)** Both conclusions (I) and (II) follow

Date: 18/06/2025 Time: 12:45 PM - 2:15 PM Right: 82.47% Wrong: 15.03%

**Q28)** Read the given statements and conclusions carefully. Assuming that the information given in the statements is true, even if it appears to be at variance with commonly known facts, decide which of the given conclusion(s) logically follow(s) from the statements.

Statements:

All cows are emu.

All emus are ostrich.

Some ostriches are duck.

Conclusions:

(I) Some ducks are cows.

(II) All ostriches are cows.

**A)** Only conclusion (I) follows   **B)** Only conclusion (II) follows   **C)** Both conclusions (I) and (II) follow

**D)** Neither conclusion (I) nor conclusion (II) follows

Date: 16/06/2025   Time: 9:00 AM - 10:30 AM   Right: 82.68%   Wrong: 15.04%

**Q29)** Read the given statements and conclusions carefully. Assuming that the information given in the statements is true, even if it appears to be at variance with commonly known facts, decide which of the given conclusion(s) logically follow(s) from the statements.

Statements:

All rabbits are squirrel.

Some squirrels are rats.

All rats are mammals.

Conclusions:

(I) Some mammals are squirrel.

(II) Some rats are rabbits.

**A)** Only conclusion (II) follows   **B)** Both conclusions (I) and (II) follow   **C)** Only conclusion (I) follows

**D)** Neither conclusion (I) nor conclusion (II) follows

Date: 17/06/2025   Time: 9:00 AM - 10:30 AM   Right: 83.15%   Wrong: 14.11%

**Q30)** Read the given statements and conclusions carefully. Assuming that the information given in the statements is true, even if it appears to be at variance with commonly known facts, decide which of the given conclusions logically follow(s) from the statements.

**Statements:**

Some guns are bombs.  
Some guns are cargos.  
Some bombs are riffles.

**Conclusions:**

(I): Some guns are riffles.  
(II): Some bombs are cargos.

- A)** Only conclusion (II) follows. **B)** Only conclusion (I) follows. **C)** Both conclusions (I) and (II) follow.  
**D)** Neither conclusion (I) nor (II) follows.

Date: 09/06/2025 Time: 4:30 PM - 6:00 PM Right: 83.79% Wrong: 13.00%

**Q31)** Read the given statements and conclusions carefully. Assuming that the information given in the statements is true, even if it appears to be at variance with commonly known facts, decide which of the given conclusion(s) logically follow(s) from the statements.

**Statements:**

All trucks are big.  
All big are cars.  
All cars are long.

**Conclusions:**

(I) All big are trucks.  
(II) All cars are big.

- A)** Only conclusion (II) follows. **B)** Both conclusions (I) and (II) follow. **C)** Only conclusion (I) follows.  
**D)** Neither conclusion (I) nor (II) follows.

Date: 12/06/2025 Time: 9:00 AM - 10:30 AM Right: 84.18% Wrong: 13.54%

**Q32)** Read the given statements and conclusions carefully. Assuming that the information given in the statements is true, even if it appears to be at variance with commonly known facts, decide which of the given conclusion(s) logically follow(s) from the statements.

**Statements:**

Some protein are carbs.

Some protein are vitamin.

Some carbs are sugar.

**Conclusions:**

(I) Some protein are sugar.

(II) Some carbs are vitamin.

- A)** Only conclusion (II) follows   **B)** Only conclusion (I) follows   **C)** Neither conclusion (I) nor (II) follows  
**D)** Both conclusions (I) and (II) follow

Date: 19/06/2025   Time: 12:45 PM - 2:15 PM   Right: 85.28%   Wrong: 11.46%

**Q33)** Read the given statements and conclusions carefully. Assuming that the information given in the statements is true, even if it appears to be at variance with commonly known facts, decide which of the given conclusion(s) logically follow(s) from the statements.

**Statements:**

All pulse are rice.

All rice are wheat.

All wheat are corn.

**Conclusions:**

(I) All pulse are corn.

(II) Some corn are rice.

- A)** Neither conclusion (I) nor (II) follows   **B)** Both conclusions (I) and (II) follow  
**C)** Only conclusion (II) follows   **D)** Only conclusion (I) follows

Date: 19/06/2025   Time: 4:30 PM - 6:00 PM   Right: 85.36%   Wrong: 12.19%

**Q34)** Read the given statements and conclusions carefully. Assuming that the information given in the statements is true, even if it appears to be at variance with commonly known facts, decide which of the given conclusion(s) logically follow(s) from the statements.

**Statements:**

Some hens are pigeons.

All pigeons are crows.

All crows are mynahs.

**Conclusions:**

(I) Some hens are mynahs.

(II) Some mynahs are pigeons.

**A)** Neither conclusion (I) nor conclusion (II) follows   **B)** Only conclusion (I) follows

**C)** Only conclusion (II) follows   **D)** Both conclusions (I) and (II) follow

Date: 17/06/2025   Time: 4:30 PM - 6:00 PM   Right: 86.18%   Wrong: 11.21%

**Q35)** Read the given statements and conclusions carefully. Assuming that the information given in the statements is true, even if it appears to be at variance with commonly known facts, decide which of the given conclusion(s) logically follow(s) from the statements.

**Statements:**

All cars are old.

Some old are new.

Some new are red.

**Conclusions:**

(I) All old are cars.

(II) Some new are old.

**A)** Both conclusions (I) and (II) follow.   **B)** Neither conclusion (I) nor (II) follows.

**C)** Only conclusion (I) follows.   **D)** Only conclusion (II) follows.

Date: 10/06/2025   Time: 12:45 PM - 2:15 PM   Right: 88.38%   Wrong: 9.57%

**Q36)** Read the given statements and conclusions carefully. Assuming that the information given in the statements is true, even if it appears to be at variance with commonly known facts, decide which of the given conclusion(s) logically follow(s) from the statements.

**Statements:**

Some trees are flowers.

All flowers are beautiful.

Some beautiful are girls.

**Conclusions:**

(I) Some flowers are trees.

(II) Some beautiful are flowers.

**A)** Only conclusion (I) follows. **B)** Only conclusion (II) follows. **C)** Both conclusions (I) and (II) follow.

**D)** Neither conclusion (I) nor (II) follows.

Date: 12/06/2025 Time: 12:45 PM - 2:15 PM Right: 88.56% Wrong: 9.03%

**Q37)** Read the given statements and conclusions carefully. Assuming that the information given in the statements is true, even if it appears to be at variance with commonly known facts, decide which of the given conclusion(s) logically follow(s) from the statements.

**Statements:**

All chimpanzees are gorilla.

All gorillas are monkeys.

No monkey is a langur.

**Conclusion:**

(I) Some langurs are gorillas.

(II) Some monkeys are chimpanzees.

**A)** Neither Conclusion (I) nor (II) follows **B)** Both Conclusions (I) and (II) follow

**C)** Only Conclusion (I) follows **D)** Only Conclusion (II) follows

Date: 18/06/2025 Time: 9:00 AM - 10:30 AM Right: 89.25% Wrong: 8.45%

**Q38)** Read the given statements and conclusions carefully. Assuming that the information given in the statements is true, even if it appears to be at variance with commonly known facts, decide which of the given conclusion(s) logically follow(s) from the statements.

**Statements:**

All boys are handsome.

Some handsome are cars.

Some cars are grey.

**Conclusions:**

(I) All handsome are boys.

(II) All cars are handsome.

**A)** Only conclusion (I) follows. **B)** Both conclusions (I) and (II) follow.

**C)** Neither conclusion (I) nor (II) follows. **D)** Only conclusion (II) follows.

Date: 13/06/2025

Time: 12:45 PM - 2:15 PM

Right: 89.38%

Wrong: 8.68%

**Q39)** Read the given statements and conclusions carefully. Assuming that the information given in the statements is true, even if it appears to be at variance with commonly known facts, decide which of the given conclusion(s) logically follow(s) from the statements.

**Statements:**

Some houses are small.

Some small are forks.

All forks are knives.

**Conclusions:**

(I) Some small are houses.

(II) Some forks are small.

**A)** Neither conclusion (I) nor (II) follows **B)** Only conclusion (II) follows

**C)** Both conclusions (I) and (II) follow **D)** Only conclusion (I) follows

Date: 14/06/2025

Time: 12:45 PM - 2:15 PM

Right: 90.76%

Wrong: 6.83%

**Q40)** Read the given statements and conclusions carefully. Assuming that the information given in the statements is true, even if it appears to be at variance with commonly known facts, decide which of the given conclusion(s) logically follow(s) from the statements.

**Statements:**

Some water is pink.  
All pink are buildings.  
All buildings are tall.

**Conclusions:**

(I) Some pink is water.  
(II) Some buildings are pink.

**A)** Both conclusions (I) and (II) follow. **B)** Neither conclusion (I) nor (II) follows.

**C)** Only conclusion (II) follows. **D)** Only conclusion (I) follows.

Date: 11/06/2025 Time: 12:45 PM - 2:15 PM Right: 90.92% Wrong: 6.84%

**Q41)** Read the given statements and conclusions carefully. Assuming that the information given in the statements is true, even if it appears to be at variance with commonly known facts, decide which of the given conclusion(s) logically follow(s) from the statements.

**Statements:**

All bikes are roads.  
Some roads are TVs.  
Some TVs are cups.

**Conclusions:**

(I) All roads are bikes.  
(II) All roads are TVs.

**A)** Both conclusion (I) and (II) follow **B)** Only conclusion (II) follows

**C)** Neither conclusion (I) nor (II) follows **D)** Only conclusion (I) follows

Date: 13/06/2025 Time: 9:00 AM - 10:30 AM Right: 91.40% Wrong: 6.54%

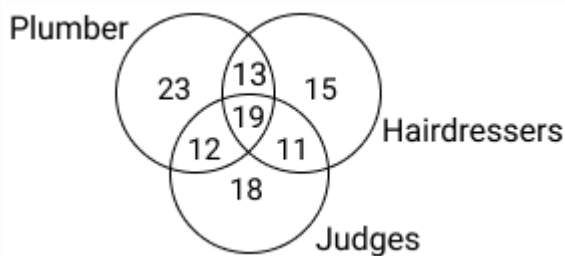
**Answer Key (Q1 to Q41) Statement- Conclusion**

Q1: 3	Q2: 2	Q3: 3	Q4: 4	Q5: 4
Q6: 3	Q7: 4	Q8: 2	Q9: 4	Q10: 4
Q11: 2	Q12: 1	Q13: 4	Q14: 1	Q15: 1
Q16: 1	Q17: 1	Q18: 4	Q19: 3	Q20: 3

Q21: 2	Q22: 2	Q23: 1	Q24: 1	Q25: 1
Q26: 3	Q27: 4	Q28: 4	Q29: 3	Q30: 4
Q31: 4	Q32: 3	Q33: 2	Q34: 4	Q35: 4
Q36: 3	Q37: 4	Q38: 3	Q39: 3	Q40: 1
Q41: 3				

## Venn Diagram

Q1) Study the given Venn diagram carefully and answer the question that follows.

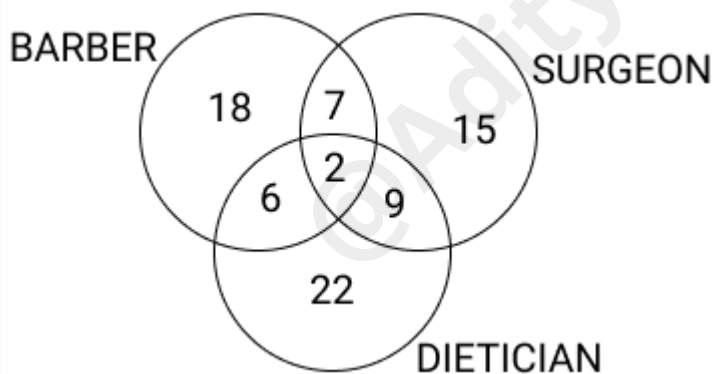


The numbers in different sections indicate the number of persons. How many plumbers are there who are also hairdressers and judges?

- A) 11 B) 12 C) 23 D) 19

Date: 10/06/2025 Time: 9:00 AM - 10:30 AM Right: 92.74% Wrong: 4.50%

Q2) Study the given Venn diagram carefully and answer the question that follows.

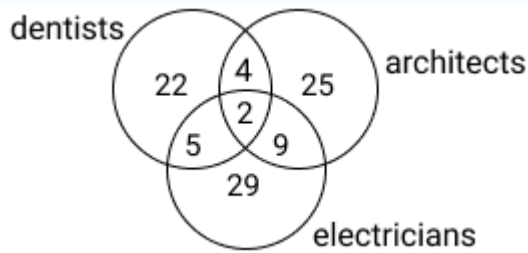


The numbers in different sections indicate the number of persons. How many surgeons are there who are also dieticians but not barbers?

- A) 22 B) 15 C) 9 D) 18

Date: 11/06/2025 Time: 4:30 PM - 6:00 PM Right: 94.24% Wrong: 3.52%

Q3) Study the given Venn diagram carefully and answer the questions.

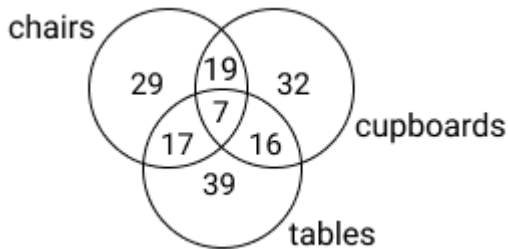


The numbers in different sections indicate the number of persons. How many electricians are there who are also architects but not dentists?

- A) 5 B) 2 C) 9 D) 4

Date: 05/06/2025 Time: 4:30 PM - 6:00 PM Right: 94.82% Wrong: 3.10%

Q4) Study the given Venn diagram carefully and answer the question that follows.

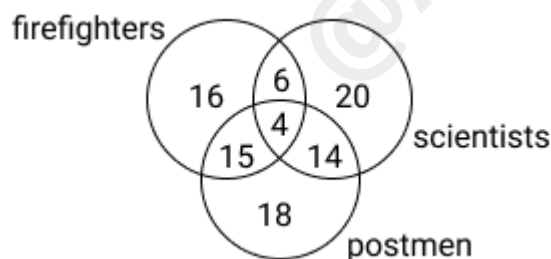


The numbers in different sections indicate the number of pieces of furniture. How many chairs are there which are also cupboards but not tables?

- A) 17 B) 19 C) 29 D) 7

Date: 11/06/2025 Time: 9:00 AM - 10:30 AM Right: 94.87% Wrong: 2.79%

Q5) Study the given diagram and answer the question that follows. (The numbers in different sections indicate the number of persons.)

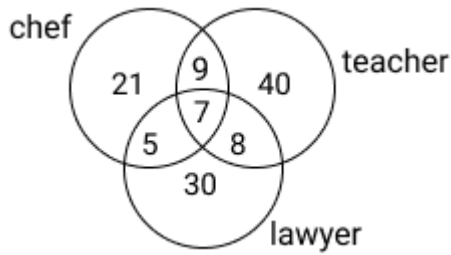


How many such scientists are there who are also firefighters but not postmen?

- A) 6 B) 20 C) 16 D) 15

Date: 12/06/2025 Time: 4:30 PM - 6:00 PM Right: 95.02% Wrong: 3.50%

Q6) Study the given Venn diagram carefully and answer the question that follows.



The numbers in different sections indicate the number of persons. How many chefs are there who are also teachers but not lawyers?

- A) 8 B) 9 C) 5 D) 7

Date: 05/06/2025 Time: 9:00 AM - 10:30 AM Right: 95.40% Wrong: 2.34%

### Answer Key (Q1 to Q6) Venn Diagram

Q1: 4	Q2: 3	Q3: 3	Q4: 2	Q5: 1
Q6: 2				

**COMPLETE MATHS**  
**ब्रह्मास्त्र**  
**FORMULA BOOK**  
 CLASS NOTES • CONCEPTS • SHORT TRICKS  
 SOLVED EXAMPLES • CALCULATION TRICKS  
**ADITYA RANJAN SIR**  
 EXCISE INSPECTOR  
 USEFUL FOR: CET, SSC, RAILWAYS, DEFENCE, BANKING, & ALL GOVT. EXAMS  
 Selected है Selection दिलायेंगे

BUY NOW

**रेलवे गणित**  
 2<sup>nd</sup> EDITION  
 2018 से अब तक RRB द्वारा पूछे गए सभी सवाल  
**4000+ MCQs** चैप्टर - वाइज  
 NTPC, RPF SI, RPF CONSTABLE, ALP, TECHNICIAN, GROUP D, RRB JE and other railway exams.  
 Typewise & Levelwise  
 Chapter-wise Test  
 Smart Approach and Short Tricks  
**आदित्य रंजन सर**  
 (Excise Inspector)  
 "SELECTED है, SELECTION दिलाएंगे"

BUY NOW

**RAILWAY MATHS**  
 ENGLISH MEDIUM  
 All questions asked by RRB from 2018 till date  
**4000+ MCQs** Chapter-Wise  
 NTPC, RPF SI, RPF CONSTABLE, ALP, TECHNICIAN, GROUP D, RRB JE and other railway exams.  
 Type-wise & Level-wise  
 Chapter-wise Test  
 Smart Approach and Short Tricks  
**Aditya Ranjan Sir**  
 (Excise Inspector)  
 "SELECTED है, SELECTION दिलाएंगे"

BUY NOW

**रेलवे सामान्य विज्ञान**  
 5000+ चैप्टर-वाइज  
 One-liner & MCQs.  
 भौतिक विज्ञान | रसायन विज्ञान  
 जीव विज्ञान  
 नवीनतम पैटर्न पर आधारित  
 पूर्णतः परीक्षाओं की सफलता के लिए  
 सफलता के लिए संश्लेषण करने के लिए एक साथ  
**Useful for:**  
 RRB ALP, Technician, NTPC (CBT-1 & CBT-2), Group D, RPF SI & Constable, JE, other govt. exams.  
**आदित्य रंजन सर**  
 (Excise Inspector)  
 SELECTED है SELECTION दिलाएंगे

BUY NOW

**Railway General Science**  
 English Medium 5000+ Chapter-Wise  
 One-liner & MCQs.  
**Physics | Chemistry**  
**Biology**  
 BASED ON LATEST PATTERN  
 Complete Coverage of Previous exams  
 Factual & Numerical Questions Included  
**Useful for:**  
 RRB ALP, Technician, NTPC (CBT-1 & CBT-2), Group D, RPF SI & Constable, JE, other govt. exams.  
**ADITYA RANJAN SIR**  
 (Excise Inspector)  
 SELECTED है SELECTION दिलाएंगे

BUY NOW

**रेलवे NTPC**  
 2025-26 Edition  
 TCS PYQs सहित  
 नाम टेक्निकल पोपुलर कॅटेगिरी  
 20 प्रैक्टिस पेपर्स | 10 मॉल्टिपल चॉइस पेपर्स | 30 SETS  
**CBT-01**  
 स्नातक स्तरीय  
 Chief Commercial Cum Ticket Supervisor  
 Junior Account Assistant Cum Typist  
 Senior Clerk Cum Typist  
 Goods Train Manager  
 Station Master  
 गैर स्नातक स्तरीय  
 Commercial Cum Ticket Clerk  
 Accounts Clerk Cum Typist  
 Junior Clerk Cum Typist  
 Train Clerk  
**प्रैक्टिस वर्क बुक**  
 विस्तृत व्याख्या सहित  
**आदित्य रंजन सर**  
 (Excise Inspector)

BUY NOW

**रेलवे ग्रुप-D परीक्षा**  
 2025-26 Edition  
 TCS PYQs सहित  
 15 मॉल्टिपल चॉइस पेपर्स | 15 प्रैक्टिस पेपर्स | 30 SETS  
**प्रैक्टिस वर्क बुक**  
 विस्तृत व्याख्या सहित  
 नवीनतम पाठ्यक्रम एवं पैटर्न पर आधारित  
**आदित्य रंजन सर**  
 (Excise Inspector)  
 SELECTED है SELECTION दिलाएंगे

BUY NOW



ऊपर दी गयी किसी भी **BOOK** को अभी **ORDER** करने के लिए उसी पर **CLICK** कीजिये  
**AVAILABLE on Flipkart**  **amazon.in**

हिंदी माध्यम

# रेलवे गणित

ALP, TECHNICIAN, RPF, NTPC, GROUP D & RRB JE

2ND EDITION

- Type-wise & Level-wise
- Chapter-wise Test
- Smart Approach and Short Tricks

PRICE

~~₹430~~

₹299

ORDER NOW

AVAILABLE ON

amazon

Flipkart



किताब को **ORDER** करने के लिए उस किताब के **PICTURE** पर **CLICK** करें  
**To ORDER** the book **CLICK** on the **PICTURE** of the book

**COMPLETE MATHS**  
**ब्रह्मास्त्र**  
**FORMULA BOOK**  
 CLASS NOTES + CONCEPTS + SHORT TRICKS  
 SOLVED EXAMPLES + CALCULATION TRICKS  
**ADITYA RANJAN SIR**  
 EXCISE INSPECTOR  
 USEFUL FOR  
 CET SSC, BANKING,  
 DEFENCE, BANKING,  
 & ALL GOVT. EXAMS  
 Selected है Selection दिलायेगे  
**BUY NOW**

**101 Days**  
 Self-Preparation module  
**SSC**  
**MATHS**  
**CHAPTER WISE TYPE WISE**  
**6500+ TCS MCQ**  
 Complete Coverage for 2025 Exams  
 Smart Approach & Short Tricks  
 With Best Explanations  
 Useful for  
 SSC CGL (Tier 1 & II), CHS (Tier 1 & II), CPO,  
 Selection Post, GD, MTS & other Govt. Exams  
**Aditya Ranjan Sir**  
 (Excise Inspector)  
 Selected है Selection दिलायेगे  
**BUY NOW**

**101 Days**  
 Self-Preparation module  
**SSC**  
**मैथ्स**  
**CHAPTER WISE TYPE WISE**  
**6500+ TCS MCQ**  
 Complete Coverage for 2025 Exams  
 Smart Approach & Short Tricks  
 With Best Explanations  
 Useful for  
 SSC CGL (Tier 1 & II), CHS (Tier 1 & II), CPO,  
 Selection Post, GD, MTS & other Govt. Exams  
**आदित्य रंजन सर**  
 (Excise Inspector)  
 Selected है Selection दिलायेगे  
**BUY NOW**

**हिन्दी माध्यम**  
**SSC**  
**सामान्य अध्ययन**  
**ब्रह्मास्त्र**  
 ज्ञान का अंतिम प्रहार - 6  
**SUBJECT WISE TOPIC WISE**  
 विषयवार विस्तृत अवधारणाएँ  
 और महत्वपूर्ण ओन-लिनर फाक्ट्स  
 विस्तृत व्याख्यान से सजे 4500+ TCS PYQs  
**आदित्य रंजन सर**  
 (Excise Inspector)  
 Selected है Selection दिलायेगे  
**BUY NOW**

**UPSC**  
**CDS**  
 COMBINED DEFENCE SERVICES  
 INA • IMA • AFA  
**MATHEMATICS**  
 Chapterwise | 2018-2024  
**FEATURES**  
 1000+ Solved MCQs  
 Topic-wise & Smart-wise  
 Short Tricks & Smart Solutions  
 CDS MATHS Detailed Syllabus  
 CDS MATHS Chapter-wise Weightage  
**Aditya Ranjan Sir**  
 (Excise Inspector)  
 Selected है Selection दिलायेगे  
**BUY NOW**

**101 Days**  
 Self-Preparation module  
**SSC**  
**MATHS**  
**CHAPTER WISE EXAM WISE**  
**6000+ TCS MCQ**  
 Complete Coverage for 2025 Exams  
 Smart Approach & Short Tricks  
 With Best Explanations  
 Useful for  
 SSC CGL (Tier 1 & II), CHS (Tier 1 & II), CPO,  
 Selection Post, GD, MTS & other Govt. Exams  
**Aditya Ranjan Sir**  
 (Excise Inspector)  
 Selected है Selection दिलायेगे  
**BUY NOW**

**101 Days**  
 Self-Preparation module  
**SSC**  
**मैथ्स**  
**CHAPTER WISE EXAM WISE**  
**6000+ TCS MCQ**  
 Complete Coverage for 2025 Exams  
 Smart Approach & Short Tricks  
 With Best Explanations  
 Useful for  
 SSC CGL (Tier 1 & II), CHS (Tier 1 & II), CPO,  
 Selection Post, GD, MTS & other Govt. Exams  
**आदित्य रंजन सर**  
 (Excise Inspector)  
 Selected है Selection दिलायेगे  
**BUY NOW**

**ENGLISH MEDIUM**  
**SSC**  
**GENERAL STUDIES**  
**ब्रह्मास्त्र**  
 ज्ञान का अंतिम प्रहार - 6  
**SUBJECT WISE TOPIC WISE**  
 TOPIC WISE DETAILED CONCEPTS  
 & VERY IMPORTANT ONE-LINER FACTS  
 4500+ TCS PYQs WITH DETAILED EXPLANATION  
**ADITYA RANJAN SIR**  
 (Excise Inspector)  
 Selected है Selection दिलायेगे  
**BUY NOW**

**English Medium**  
**5000+**  
**Chapter-Wise**  
**Railway**  
**General Science**  
**Physics | Chemistry**  
**Biology**  
 Complete Coverage of Previous exams  
 Factual & Numerical Questions Included  
 Useful for  
 RRB ALP, Technician, NTPC  
 (CET 1 & CET-2), Group D, RPF SI  
 & Constable, JE, other govt. exams.  
**ADITYA RANJAN SIR**  
 (Excise Inspector)  
 Selected है Selection दिलायेगे  
**BUY NOW**

**5000+**  
**चैप्टर-वाइज**  
**रेलवे**  
**सामान्य विज्ञान**  
 भौतिक विज्ञान | रसायन विज्ञान  
 जीव विज्ञान  
 मनीषा नारायण  
 पेटर्सन पर आधारित  
 पूर्णतः परीक्षाओं की सम्पूर्ण कवरेज  
 तथ्यात्मक एवं संख्यात्मक प्रश्न एक साथ  
 Useful for  
 RRB ALP, Technician, NTPC  
 (CET 1 & CET-2), Group D, RPF SI  
 & Constable, JE, other govt. exams.  
**आदित्य रंजन सर**  
 (Excise Inspector)  
 Selected है Selection दिलायेगे  
**BUY NOW**

**NEW**  
**ENGLISH MEDIUM**  
**RAILWAY MATHS**  
 All questions asked by RRB from 2018 till date  
**4000+ MCQs Chapter-Wise**  
 NTPC, RPF SI, RPF CONSTABLE, ALP,  
 TECHNICIAN, GROUP D, RRB JE  
 and other railway exams.  
 Type-wise & Level-wise  
 Chapter-wise Test  
 Smart Approach  
 and Short Tricks  
**Aditya Ranjan Sir**  
 (Excise Inspector)  
 Selected है, SELECTION दिलाएँगे  
**BUY NOW**

**NEW**  
**हिन्दी माध्यम**  
**रेलवे गणित**  
 2018 से अब तक RRB द्वारा पूछे गए सभी सवाल  
**4000+ MCQs चैप्टर - वाइज**  
 NTPC, RPF SI, RPF CONSTABLE, ALP,  
 TECHNICIAN, GROUP D, RRB JE  
 and other railway exams.  
 Type-wise & Level-wise  
 Chapter-Wise Test  
 Smart Approach  
 and Short Tricks  
**आदित्य रंजन सर**  
 (Excise Inspector)  
 Selected है, SELECTION दिलाएँगे  
**BUY NOW**

**उत्तर प्रदेश पुलिस**  
**2025-26**  
**हिन्दी माध्यम**  
**MATHS**  
**CONSTABLE**  
 विगत वर्षों के प्रश्नों के साथ संभावित प्रश्नों का संग्रह  
 TYPE WISE & LEVEL WISE  
 विस्तृत व्याख्यान सहित  
 SMART TRICKS & SMART SOLUTIONS  
 1250+ MCQs का संग्रह  
**USEFUL FOR**  
 UPP CONSTABLE,  
 JAIL WARDER & OTHER EXAMS  
**आदित्य रंजन सर**  
 (Excise Inspector)  
 Selected है Selection दिलायेगे  
**BUY NOW**

**UTTAR PRADESH POLICE**  
**2025-26**  
**ENGLISH MEDIUM**  
**MATHS**  
**UP-SI दरोगा**  
 Chapter-wise Collection of PYQs with expected Questions  
 TYPE WISE & LEVEL WISE  
 DETAILED EXPLANATIONS  
 SMART TRICKS & SMART SOLUTIONS  
 1250+ MCQs का संग्रह  
**USEFUL FOR**  
 UPPSI, UPP CONSTABLE,  
 JAIL WARDER & OTHER EXAMS  
**Aditya Ranjan Sir**  
 (Excise Inspector)  
 Selected है Selection दिलायेगे  
**BUY NOW**

**रेलवे**  
**2025-26**  
**TCS PYQs सहित**  
**NTPC**  
 नाम देविकाकल पोपुलर केम्पेगिरी  
**20** मॉडेल पेपर **10** वास्तविक पेपर **30** SETS  
 स्नातक स्तरिय  
 Detailed Conceptual Questions, Short Tricks  
 Assorted Level Questions, Topic  
 Assorted Level Questions, Topic  
 Assorted Level Questions, Topic  
 Assorted Level Questions, Topic  
**प्रेक्टिस वर्क बुक**  
 विस्तृत व्याख्यान सहित  
**आदित्य रंजन सर**  
 (Excise Inspector)  
**BUY NOW**

**रेलवे**  
**2025-26**  
**ग्रुप-D परीक्षा**  
**15** मॉडेल पेपर **30** TCS PYQs सहित  
**प्रेक्टिस वर्क बुक**  
 विस्तृत व्याख्यान सहित  
 मनीषा नारायण पेटर्सन पर आधारित  
**आदित्य रंजन सर**  
 (Excise Inspector)  
 Selected है Selection दिलायेगे  
**BUY NOW**

**गणित**  
**दिल्ली पुलिस**  
**2025-26**  
**हिन्दी माध्यम**  
**कांस्टेबल 2025-26**  
**अध्यायवार**  
 विषयवार  
 Latest TCS PYQs सहित  
 विस्तृत व्याख्यान  
 Smart Tricks & Smart Solutions  
 1250+ MCQs का संग्रह  
**आदित्य रंजन सर**  
 (Excise Inspector)  
 Selected है Selection दिलायेगे  
**BUY NOW**

**सामान्य अध्ययन**  
**दिल्ली पुलिस**  
**2025-26**  
**हिन्दी माध्यम**  
**कांस्टेबल 2025-26**  
**अध्यायवार**  
 विषयवार  
 विषयवार विस्तृत अवधारणाएँ  
 विस्तृत व्याख्यान के साथ  
 मनीषा नारायण TCS PYQs  
 सामग्री एवं रेखाचित्र  
**आदित्य रंजन सर**  
 (Excise Inspector)  
 Selected है Selection दिलायेगे  
**BUY NOW**

**रीजनिंग**  
**दिल्ली पुलिस**  
**2025-26**  
**हिन्दी माध्यम**  
**कांस्टेबल 2025-26**  
**अध्यायवार**  
 विषयवार  
 Latest TCS PYQs सहित  
 विस्तृत व्याख्यान  
 Smart Tricks & Smart Solutions  
 1250+ MCQs का संग्रह  
**आदित्य रंजन सर**  
 (Excise Inspector)  
 Selected है Selection दिलायेगे  
**BUY NOW**

**कंप्यूटर**  
**दिल्ली पुलिस**  
**2025-26**  
**हिन्दी माध्यम**  
**कांस्टेबल 2025-26**  
**अध्यायवार**  
 विषयवार  
 विषयवार विस्तृत अवधारणाएँ  
 विस्तृत व्याख्यान के साथ  
 मनीषा नारायण TCS PYQs  
 सामग्री एवं रेखाचित्र  
**आदित्य रंजन सर**  
 (Excise Inspector)  
 Selected है Selection दिलायेगे  
**BUY NOW**